

Name: _____

| | | |
|--|---|--|
| <p>Kevin has an appointment with his doctor at 2:00 p.m. He has to get a physical so he can play football. It is 12:23 p.m. now and it will take him 45 minutes to get to the doctor's office. How long can he play a video game before he has to leave to get to the appointment on time?</p> | <p>Mrs. White is making a honey cake. She will use $\frac{4}{8}$ of a cup of honey in the cake and $\frac{3}{8}$ of a cup of honey in the frosting. How much honey will she use in all?</p> | <p>Alex decided to write a letter to his favorite uncle on Blah Buster Day. He wrote the letter on his computer and printed it on bright blue paper. It took him 37 minutes to write the letter. If he started writing it at 12:16 p.m., what time did he finish the letter?</p> |
|--|---|--|

| | | |
|---|----------------|---|
| $\begin{array}{r} 437 \\ - 153 \\ \hline \end{array}$ | $6 \times 5 =$ | <p>The circus is in town! Tickets are only \$5 for kids. Adults need to pay double the price of kids tickets. Jenna is bringing four of her friends in her class. Her mom is also coming. Jenna wants to pay for everyone. How much will she need to pay?</p> |
| | $15 \div 3 =$ | |

| | | |
|--|--|---|
| <p>1 km = 1,000 m</p> <p>28 km = _____ m</p> | <p>Can 315 be evenly divided by 7? Circle: 315 is NOT divisible by 7 315 is divisible by 7</p> | $\begin{array}{r} 26 \\ + 30 \\ \hline \end{array}$ |
| <p>18 kg = _____ g</p> | | |



Name: _____

The vowels are missing in the word search.
Fill in the missing vowels and circle the words.

| | | | | | | | | | |
|---|---|---|---|---|---|---|---|---|---|
| □ | P | P | R | □ | C | □ | □ | T | □ |
| H | Y | B | C | L | □ | V | □ | R | T |
| P | P | □ | C | T | □ | R | □ | R | □ |
| R | W | C | T | C | L | □ | M | B | □ |
| □ | □ | N | A | T | I | O | N | A | L |
| C | R | □ | □ | N | S | T | □ | □ | D |
| T | T | □ | S | □ | N | □ | T | □ | R |
| □ | H | H | T | □ | □ | G | H | T | R |
| C | □ | M | □ | T | T | □ | D | P | S |
| □ | S | T | □ | T | □ | □ | N | □ | X |

APPRECIATE • OMITTED
PRACTICE • INSTEAD • CLIMB
NATIONAL • CLEVER • WORTH
TAUGHT • PICTURE • SENATOR
STATE

$$\begin{array}{r} 76 \\ - 22 \\ \hline \end{array}$$

$$\begin{array}{r} 330 \\ + 340 \\ \hline \end{array}$$



$$(9 + 8) + 5 =$$

Circle the relative adverb.
Craig, Colorado is where I was born.

$$44 \div 11 =$$

David invented a robotic bug. The bug can crawl five centimeters in twenty seconds. How long would it take the bug to crawl twenty-six centimeters?

Write the missing family fact.

$$\begin{array}{l} 87 + 15 = 102 \\ 102 - 87 = 15 \\ 102 - 15 = 87 \\ \hline \end{array}$$

How many millimeters are in 7 centimeters?

_____ millimeters

Name: _____

Circle the greatest number:

192,830,675,404

9,361

4,205,735,684

372,981,658

Ava wants Amanda to guess a three digit number. She tells Amanda that her number has three different digits. The digits are 2, 3, and 9. Amanda thinks. She then guesses the number 392. What are the chances that Amanda has guessed correctly?

What time is 15 hours after
1:00 a.m.?

$11 \times 12 =$

Anne is making up her own calendar. The first month of her weird calendar is called Affy. To make matters worse, she is giving Affy a total of thirty-seven days. What is the least number of Tuesdays that can occur during Affy? Show the month of Affy.

What can you multiply by 7 to get
6?

In the number 9,545,452, the digit 2 is in
what place?

Insert commas in the correct places in
this sentence.

My favorite kinds of music are
jazz rock and gospel.



Name: _____

| | | | | | | | | | |
|------|-------|-------|-------|-------|-----|--|-------|-------|-------|
| 40.6 | +46.5 | | | | -40 | | -14 | | +21.7 |
| | | -32.4 | | +28.1 | | | | | |
| | | | | | | | | | +2 |
| | | -6 | | +41.9 | | | | | |
| | -40.2 | | | 20.7 | | | | | +13.9 |
| +16 | | | | -1 | | | +8 | | +15.3 |
| | | | | | | | | | |
| +3.7 | | | | +9.8 | | | -33.1 | | |
| | +35 | | -51.3 | | | | | +62.2 | 126.7 |

Six kids and three adults are going to the circus. Kid's tickets are on sale for only half the price of adult tickets. The total cost is \$54. How much is one kids ticket? How much is one adult ticket?

What part of speech is underlined in this sentence?

Jack London wrote *The Call of the Wild*, and then he wrote *White Fang*.

Name: _____

$$\begin{array}{r} 10,619 \\ - 8,000 \\ \hline \end{array}$$

$$\begin{array}{r} 13,152 \\ - 6,301 \\ \hline \end{array}$$

$$\begin{array}{r} 13,711 \\ - 4,228 \\ \hline \end{array}$$

$$\begin{array}{r} 58,813 \\ - 29,316 \\ \hline \end{array}$$

$$\begin{array}{r} 108,123 \\ - 68,018 \\ \hline \end{array}$$

$$\begin{array}{r} 64,362 \\ - 38,957 \\ \hline \end{array}$$

$$\begin{array}{r} 90,803 \\ - 1,924 \\ \hline \end{array}$$

$$\begin{array}{r} 59,461 \\ - 2,338 \\ \hline \end{array}$$

$$\begin{array}{r} 62,255 \\ - 2,831 \\ \hline \end{array}$$

$$\begin{array}{r} 10,836 \\ - 8,716 \\ \hline \end{array}$$

$$\begin{array}{r} 10,736 \\ - 7,691 \\ \hline \end{array}$$

$$\begin{array}{r} 15,563 \\ - 7,158 \\ \hline \end{array}$$

$$\begin{array}{r} 46,603 \\ - 5,128 \\ \hline \end{array}$$

$$\begin{array}{r} 84,989 \\ - 7,404 \\ \hline \end{array}$$

$$\begin{array}{r} 78,893 \\ - 2,893 \\ \hline \end{array}$$

$$\begin{array}{r} 17,122 \\ - 8,091 \\ \hline \end{array}$$

$$\begin{array}{r} 15,120 \\ - 5,713 \\ \hline \end{array}$$

$$\begin{array}{r} 12,984 \\ - 6,679 \\ \hline \end{array}$$

$$\begin{array}{r} 94,467 \\ - 78,623 \\ \hline \end{array}$$

$$\begin{array}{r} 91,075 \\ - 67,917 \\ \hline \end{array}$$

$$\begin{array}{r} 127,243 \\ - 74,660 \\ \hline \end{array}$$

$$\begin{array}{r} 2 \\ + 5 \\ \hline \end{array}$$

$$\begin{array}{r} + 9 \\ \hline \end{array}$$

$$\begin{array}{r} + 6 \\ \hline \end{array}$$

$$\begin{array}{r} + 7 \\ \hline 29 \end{array}$$

$$\begin{array}{r} - \\ \hline \end{array}$$

22

$$\begin{array}{r} + \\ \hline \end{array}$$

25

$$\begin{array}{r} - 4 \\ \hline \end{array}$$

$$\begin{array}{r} - 7 \\ \hline \end{array}$$

14

$$\begin{array}{r} + \\ \hline \end{array}$$

21

$$\begin{array}{r} + \\ \hline \end{array}$$

26

$$\begin{array}{r} + \\ \hline \end{array}$$

35

Name: _____

Each box needs a number from 1 to 9. You may re-use numbers.
One set of sums has been done for you.

| | | | | | | |
|----------------|---------------|---------------|---------------|---------------|---------------|--|
| sum of 6 ↓ | sum of 5 ↓ | sum of 6 ↓ | sum of 6 → | | | |
| 3 | sum of 5 → | | | | | |
| sum of 10 ↓ | 1 | sum of 5 → | | sum of 2 → | | |
| 2 | sum of 9 ↓ | sum of 8 → | | | | |
| | | sum of 6 ↓ | sum of 9 ↓ | sum of 8 ↓ | sum of 6 ↓ | |
| sum of 5 → | | sum of 8 → | | | | |
| | | sum of 8 → | | | | |
| | | sum of 7 → | | | | |

| | | | | | | |
|---------------|---------------|---------------|---|---------------|----------------|--|
| | | sum of 7 → | | | | |
| | sum of 5 → | | | sum of 8 ↓ | | |
| sum of 5 ↓ | | sum of 7 ↓ | | | sum of 10 ↓ | |
| | | sum of 6 ↓ | | | sum of 8 ↓ | |
| | | sum of 7 → | | | | |
| | sum of 8 → | 3 | 2 | 3 | | |
| | sum of 3 → | | | | | |
| | | | | | | |

Maria multiplied two one-digit numbers and then added 176. The result was 261. Anna does not believe her and thinks Maria made a mistake. Who is correct?


Circle the smallest number:

125,768,043,937 245,780
248,619,054 1,396

Conjugate this verb in the perfect tense.
dye

Holly is getting messy. She has made a 1' x 3' x 1' cube made out of clay blocks. She wants her art project to have at least a surface area of 17 square feet. Does she need to add more clay?

$12 \times 8 =$






It's NO PREP at edHelper.




edHelper.com!

More history!



only \$19.99 per year



Things for the classroom!



More science!



New ideas!



More puzzles!



Take The Boring Out Of Homework!

Easy to
print!

edHelper

Weekly K-6 "Take It Home" Books

Kids want choices
for homework.
"Take It Home" books
have fun graphics and
challenging puzzles and
problems for older kids.

"Dr. Programmer"
challenges kids..

Homework
will never be
the same!

edHelper.com

