

Name: _____

Emma put 7 marshmallows in each of 41 bags. The marshmallows are for the class cookout. How many marshmallows did she use?

April had 52 marshmallows. She gave 5 marshmallows to each of her 4 friends. Then she gave half of the rest to her brother. How many marshmallows did she keep?

Kevin bought a book of Smiley stickers. He wanted to give a sticker to everyone that wasn't smiling during Humor Month. There were 80 stickers. The stickers were divided evenly on 5 pages. How many stickers were on each page?

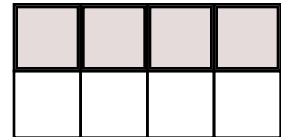
Fill in the blanks with these numbers:
0, 4, 2

$$\begin{array}{r}
 \square \quad 2 \quad \square \\
 - \quad 1 \quad 0 \quad \square \\
 \hline
 1 \quad 2 \quad 4
 \end{array}$$

Fill in the blanks with these numbers:
6, 3, 2

$$\begin{array}{r}
 3 \quad 8 \quad 8 \\
 - \quad 1 \quad \square \quad \square \\
 \hline
 2 \quad 5 \quad \square
 \end{array}$$

What fraction of the box is shaded?



$$\frac{\square}{2}$$


The factors of 12 are _____ 2 _____ 6 _____

Choose the pair that best represents a synonym and antonym for the given word.

honest

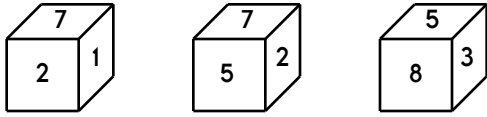
- (A) authentic, just (B) truthful, deceptive
(C) devious, false (D) deceitful, lying

Color $\frac{7}{10}$.

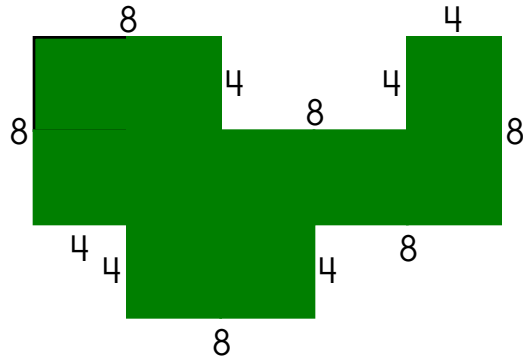
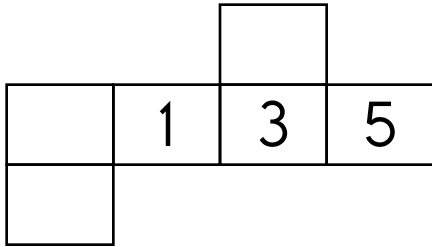


Name: _____

This is the look at one cube that is turned around a few times.



This pattern can be folded into the cube. Fill in the missing boxes.



The perimeter is _____.

How do you know if a number is divisible by 3? Use this trick.

$$630,072 \quad \underline{6} + \underline{3} + \underline{0} + \underline{0} + \underline{7} + \underline{2} = \boxed{\quad} \boxed{\quad}$$

$\boxed{\quad} + \boxed{\quad} = \underline{\quad}$ Is that a multiple of 3? Circle if it is: 3 6 9 12 15

Circle one: 630,072 is divisible by three 630,072 is not divisible by three

$$2,126,790 \quad \underline{\quad} + \underline{\quad} + \underline{\quad} + \underline{\quad} + \underline{\quad} + \underline{\quad} + \underline{\quad} = \boxed{\quad} \boxed{\quad}$$

$\boxed{\quad} + \boxed{\quad} = \underline{\quad}$ Is that a multiple of 3? Circle if it is: 3 6 9 12 15

Circle one: 2,126,790 is divisible by three 2,126,790 is not divisible by three

Is 59 prime or composite?

$$\begin{array}{r} 74 \\ - 63 \\ \hline \end{array}$$



The month before me has thirty-one days. The month after me has thirty-one days. What month am I?

- April
- March
- July
- December

$$\begin{array}{r} 59 \\ + 72 \\ \hline \end{array}$$

Name: _____

Write four words to describe this boy flying a kite.

1. _____
2. _____
3. _____
4. _____



Use one or more of these words also:

- | | |
|--------|-------------|
| purple | kite-flying |
| fun | windblown |
| red | exhilarated |

Write a sentence to describe the picture.
Use some of the above words.

©edHelper

What is the value of the BIG digit?

482,917

- mihr
- maree
- marre
- mare

How many inches are in four feet?

Round each number to the place value of the BIG number.

8**2**5,245

Fill in the missing fractions.

$\frac{2}{7}$, _____ , $\frac{4}{7}$, _____

Circle the relative adverb.

The reason why we have pop quizzes is so that we learn to master the material.

Circle the word that best completes the sentence.

I am not sure (wear/where) I will be, so please text me when you get to the concert.



Name: _____

$$\begin{array}{r} 81 \\ - 44 \\ \hline \end{array}$$

$$\begin{array}{r} 30 \\ + 42 \\ \hline \end{array}$$

$$\begin{array}{r} 155 \\ - 98 \\ \hline \end{array}$$

$$\begin{array}{r} 36 \\ + 92 \\ \hline \end{array}$$

$$\begin{array}{r} 115 \\ - 17 \\ \hline \end{array}$$

$$\begin{array}{r} 76 \\ + 53 \\ \hline \end{array}$$

$$\begin{array}{r} 41 \\ + 94 \\ \hline \end{array}$$

$$\begin{array}{r} 168 \\ - 91 \\ \hline \end{array}$$

$$\begin{array}{r} 69 \\ + 77 \\ \hline \end{array}$$

$$\begin{array}{r} 51 \\ + 43 \\ \hline \end{array}$$

$$\begin{array}{r} 65 \\ - 18 \\ \hline \end{array}$$

$$\begin{array}{r} 137 \\ - 92 \\ \hline \end{array}$$

$$\begin{array}{r} 17 \\ + 25 \\ \hline \end{array}$$

$$\begin{array}{r} 82 \\ + 88 \\ \hline \end{array}$$

$$\begin{array}{r} 69 \\ - 20 \\ \hline \end{array}$$

$$\begin{array}{r} 101 \\ - 11 \\ \hline \end{array}$$

$$\begin{array}{r} 158 \\ - 72 \\ \hline \end{array}$$

$$\begin{array}{r} 21 \\ + 97 \\ \hline \end{array}$$

$$\begin{array}{r} 127 \\ - 77 \\ \hline \end{array}$$

$$\begin{array}{r} 115 \\ - 60 \\ \hline \end{array}$$

$$\begin{array}{r} 17 \\ + 16 \\ \hline \end{array}$$

$$\begin{array}{r} 80 \\ + 24 \\ \hline \end{array}$$

$$\begin{array}{r} 126 \\ - 42 \\ \hline \end{array}$$

$$\begin{array}{r} 29 \\ + 44 \\ \hline \end{array}$$

$$\begin{array}{r} 144 \\ - 54 \\ \hline \end{array}$$

$$\begin{array}{r} 50 \\ - 22 \\ \hline \end{array}$$

$$\begin{array}{r} 79 \\ + 17 \\ \hline \end{array}$$

$$\begin{array}{r} 64 \\ - 23 \\ \hline \end{array}$$

$$\begin{array}{r} 54 \\ + 64 \\ \hline \end{array}$$

$$\begin{array}{r} 55 \\ + 21 \\ \hline \end{array}$$

$$\begin{array}{r} 38 \\ + 15 \\ \hline \end{array}$$

$$\begin{array}{r} 114 \\ - 19 \\ \hline \end{array}$$

$$\begin{array}{r} 88 \\ - 41 \\ \hline \end{array}$$

$$\begin{array}{r} 69 \\ - 31 \\ \hline \end{array}$$

$$\begin{array}{r} 72 \\ + 36 \\ \hline \end{array}$$

$$\begin{array}{r} 46 \\ + 38 \\ \hline \end{array}$$

$$\begin{array}{r} 65 \\ + 69 \\ \hline \end{array}$$

$$\begin{array}{r} 60 \\ + 69 \\ \hline \end{array}$$

$$\begin{array}{r} 20 \\ + 48 \\ \hline \end{array}$$

$$\begin{array}{r} 157 \\ - 69 \\ \hline \end{array}$$

$$\begin{array}{r} 138 \\ - 49 \\ \hline \end{array}$$

$$\begin{array}{r} 133 \\ - 47 \\ \hline \end{array}$$

$$\begin{array}{r} 5 \\ + 5 \\ \hline \square \\ + 3 \\ \hline \square \\ + 2 \\ \hline \square \\ + 3 \\ \hline 18 \\ + \square \\ \hline 22 \\ - \square \\ \hline 18 \\ + 7 \\ \hline \square \\ + 2 \\ \hline 27 \\ - \square \\ \hline 19 \\ + \square \\ \hline 21 \\ + \square \\ \hline 27 \end{array}$$

Name: _____

- • 2 • 6 • 4 • 1 • 6 • 1 • 7 • 3 • 2 • - • = • 6 • 6 • 8 • = • 8
 1 • - • 1

9 2 = 7 - 0

-

4 - 1 = 7 -

2

1

0

0

- 6 = 4 -

9

-

-

0

3

3

-

7

=

-

4

-

-

-

=

7

-

-

7

- 0 = 3 - 5

1

Which number is greater: 0.2
 or 0.13?

	4	
	1	
+	73	
	<hr/>	

	1	
	4	
+	59	
	<hr/>	

$3 \overline{)9}$



Name: _____

$4 \times \underline{4} = 16 = 4 \times \underline{4}$

$3 \times \underline{\quad} = 21 = 7 \times \underline{\quad}$

$11 \times 9 = \underline{\quad} = 9 \times \underline{\quad}$

$\underline{\quad} \times 10 = \underline{\quad} = 10 \times 9$

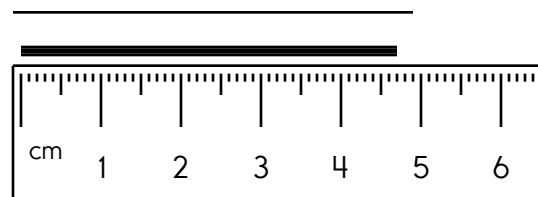
$10 \times 4 = \underline{\quad} = 4 \times \underline{\quad}$

$12 \times \underline{\quad} = \underline{\quad} = 12 \times 12$

Fill in the boxes so each line equals 16.

16	
32	÷
1	×
	- 2
(+)	- 15

Write the length in centimeters.



How many pints are equal to 6 gallons?

Write true or false.

57 is a composite number true _____

40 is a composite number _____

46 is a composite number _____

29 is a composite number _____

2 is a composite number _____

43 is a composite number _____

Do you use A.M. or P.M. to write 8:00 in the evening?

Which is larger, $\frac{4}{6}$ or $\frac{2}{8}$?

$$9 \overline{)63}$$

$6 \times 10 = \underline{\quad}$

$12 \times 2 = \underline{\quad}$

$$\begin{array}{r} 7 \\ \times 8 \\ \hline \end{array}$$

$6 \times 2 = \underline{\quad}$

$9 \times 9 = \underline{\quad}$

Name: _____

Can you draw lines to cover every number or shape in the picture?

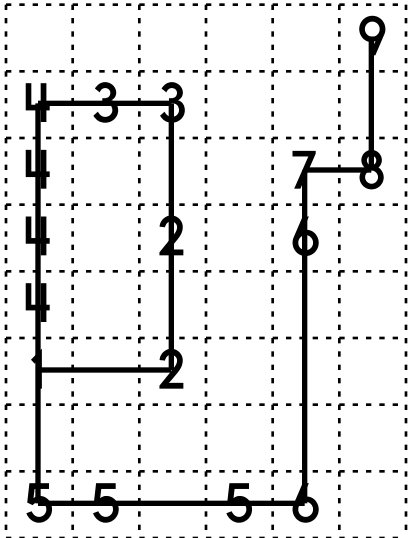
You can only move left, right, up, or down. And definitely no starting or stopping in a blank spot!

The first one is already done for you. Good luck.

Draw exactly 8 lines.

Start on 1.

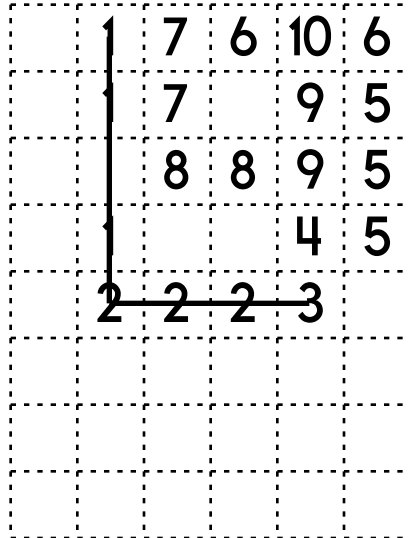
Do not pick up your pencil.



Draw exactly 9 lines.

Start on 1.

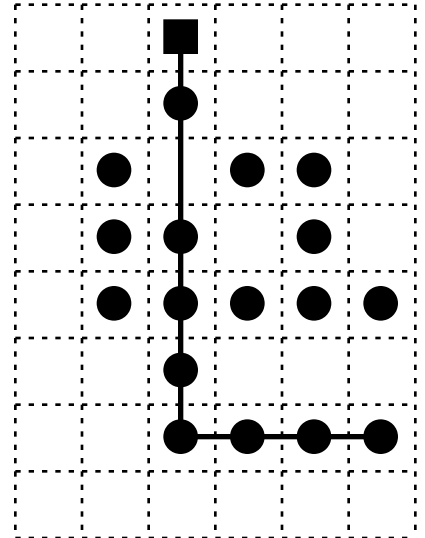
Do not pick up your pencil.



Draw exactly 8 lines.

Start on the square.


Do not pick up your pencil.



Draw exactly 6 lines.

Start on the square.


Do not pick up your pencil.



Draw exactly 9 lines.

Start on the square.

Do not pick up your pencil.

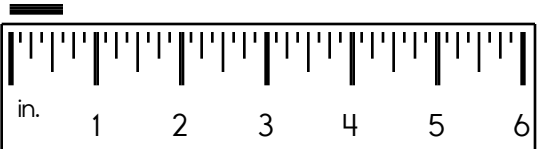


Name: _____

Each box needs a number from 1 to 9. You may re-use numbers.
One set of sums has been done for you.



	sum of 10 ↓	sum of 10 ↓		sum of 7 ↓	sum of 2 ↓	sum of 8 ↓	
sum of 8 →			sum of 6 →				
			sum of 5 →				
					sum of 5 →		
			sum of 10 ↓				sum of 9 ↓
sum of 8 ↓		sum of 10 →	5	3	2		
	sum of 5 →						
	sum of 9 →						

	sum of 9 ↓			sum of 6 →			
		sum of 8 ↓			sum of 2 →		
sum of 8 →							sum of 7 ↓
sum of 10 →			sum of 8 ↓		sum of 7 ↓	sum of 6 ↓	
sum of 4 ↓				sum of 10 ↓	2		
					1		
					4		

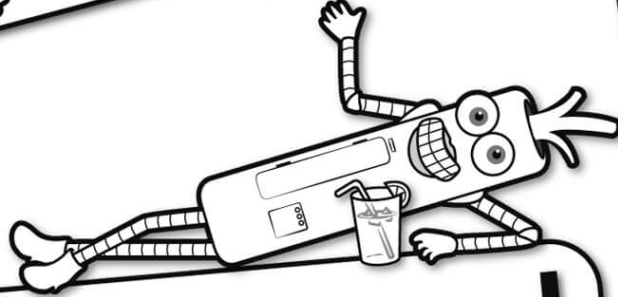
<p>Write the length in inches.</p> <p>_____</p> 	<p>Which is larger, 0.2 or 0.8?</p> <p>_____</p>	<p><input type="radio"/> spelling</p> <p><input type="radio"/> speling</p>
<p>Circle the largest number.</p> <p>460 206 431</p> <p>166 425 245</p>	<p><input type="radio"/> spellig</p> <p><input type="radio"/> spellin</p>	

<p>List the first four multiples of 12.</p> <p>_____</p>	<p>Color in $\frac{1}{3}$.</p> <table style="width: 100%; text-align: center;"> <tr> <td style="border: 1px solid black; width: 33px; height: 33px;"></td> <td style="border: 1px solid black; width: 33px; height: 33px;"></td> <td style="border: 1px solid black; width: 33px; height: 33px;"></td> </tr> <tr> <td style="border: 1px solid black; width: 33px; height: 33px;"></td> <td style="border: 1px solid black; width: 33px; height: 33px;"></td> <td style="border: 1px solid black; width: 33px; height: 33px;"></td> </tr> </table>							<p>What number is one hundred thousand more than 5,408?</p> <p>_____</p>
<p>Circle the word that best completes the sentence.</p> <p>Jake was (born/borned) on July 4.</p>								

<p>Write the number with 2 ten-thousands and 4 ones.</p> <p>_____</p>	<p><input type="radio"/> muti</p> <p><input type="radio"/> mte</p> <p><input type="radio"/> mati</p> <p><input type="radio"/> mate</p>	<p>Which is longer: three feet or thirty-nine inches?</p> <p>_____</p>
---	--	--




It's NO PREP at edHelper.




edHelper.com!

More history!



only \$19.99 per year




More science!



New ideas!



More puzzles!



Take The Boring Out Of Homework!

Easy to
print!

edHelper

Weekly K-6 "Take It Home" Books

Kids want choices
for homework.
"Take It Home" books
have fun graphics and
challenging puzzles and
problems for older kids.

"Dr. Programmer"
challenges kids..

Homework
will never be
the same!

edHelper.com

