

Name: \_\_\_\_\_

<p>Mr. Martinez is running for mayor. He spent a total of nine weeks working on his campaign. He gave speeches for four weeks. The rest of the time he worked in his office. He worked every day of the week. How many days did he spend in his office?</p>	<p>Jack is 11 years old. His father is 3 times as old as he is plus 2 years. Jack made a wild guess that his father is 41. How old is Jack's father?</p>	<p>Jason found 3 sand dollars and 5 conch shells at the beach. What fraction of the group of shells are the sand dollars?</p>
---	--	---

How do you know if a number is divisible by 6? Use this trick.

Is the number 1,755,984 even? Yes No    If no, it is not a multiple of 6.

1,755,984   1 + 7 + 5 + 5 + 9 + 8 + 4 =

+  = \_\_\_\_    Is that a multiple of 6? Circle: Yes No

Circle one: 1,755,984 is divisible by six    1,755,984 is not divisible by six

Is the number 65,991,216 even? Yes No    If no, it is not a multiple of 6.

65,991,216   \_\_\_\_ + \_\_\_\_ + \_\_\_\_ + \_\_\_\_ + \_\_\_\_ + \_\_\_\_ + \_\_\_\_ + \_\_\_\_ =

+  = \_\_\_\_    Is that a multiple of 6? Circle: Yes No

Circle one: 65,991,216 is divisible by six    65,991,216 is not divisible by six


Calculate the product of 6 and 7.

\_\_\_\_\_

Write a fraction to represent what is shaded.


\_\_\_\_\_

Name: \_\_\_\_\_



Max wants to play basketball. He will need special glasses to play. The special glasses are expensive. They cost \$105. His grandmother gave him \$61 to help buy the glasses. How much more does Max need to buy the special glasses?

What is the ratio of boys to girls in your class?

\_\_\_\_\_

$$\begin{array}{r} 87 \\ - 72 \\ \hline \end{array}$$

$$7 \overline{)63}$$

$$\begin{array}{r} 51 \\ 49 \\ + 67 \\ \hline \end{array}$$

$$\begin{array}{r} 32 \\ 11 \\ + 98 \\ \hline \end{array}$$

There are seven cars parked in a row exactly the same distance from each other. The first car is 30 inches from the second car. The first car is 60 inches from the third car. How far is the sixth car from the third car?

\_\_\_\_\_

Write a word to describe March.

\_\_\_\_\_

Make a pattern.  
Start with 17.  
Subtract 3; add 6.

\_\_\_\_\_, \_\_\_\_\_, \_\_\_\_\_, \_\_\_\_\_, \_\_\_\_\_, \_\_\_\_\_

The sum of two whole numbers is twenty-nine. The difference between the two numbers is one. What are these two numbers?

\_\_\_\_\_

$2 \times 2 = \underline{\hspace{2cm}}$

$7 \times 12 = \underline{\hspace{2cm}}$

$5 \times 1 = \underline{\hspace{2cm}}$

$8 \times 9 = \underline{\hspace{2cm}}$

$$7 \overline{)14}$$

Write the unshaded part as a decimal.



List the first five multiples of 10.

\_\_\_\_\_

Name: \_\_\_\_\_

Which is larger,  $\frac{3}{4}$  or  $\frac{1}{6}$  ?  
\_\_\_\_\_

Which number is greater: 0.9 or 0.83?  
\_\_\_\_\_

Is 15 prime or composite?  
\_\_\_\_\_

Fill in the boxes so each line equals 14.

14

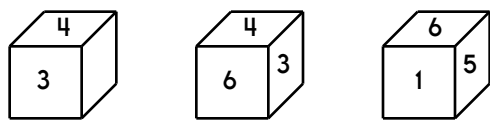
$18 - \square$

$\square \div 5$

$7 \times \square$

$(\square + 5) + \square$

This is the look at one cube that is turned around a few times.



This pattern can be folded into the cube. Fill in the missing boxes.

3	5		

If you take 49 away from me, the difference is 48. What number am I?  
\_\_\_\_\_

Write the numeral for six hundred eighty-four.  
\_\_\_\_\_

Do you use A.M. or P.M. to write 7:00 in the evening?  
\_\_\_\_\_

$$\begin{array}{r} 29 \\ + 17 \\ \hline \end{array}$$

What is one-tenth of 20?  
\_\_\_\_\_

Round each number to the place value of the BIG number.

421,1**3**8,773  
\_\_\_\_\_

Write the number for nine thousand, six hundred two.  
\_\_\_\_\_

$9 \overline{)45}$        $5 \overline{)45}$

$\begin{array}{r} 3 \\ \times 10 \\ \hline \end{array}$	$\begin{array}{r} 9 \\ \times 12 \\ \hline \end{array}$
---	---

Name: \_\_\_\_\_

$$\begin{array}{r} 16 \\ + 27 \\ \hline \end{array}$$

$$\begin{array}{r} 124 \\ - 51 \\ \hline \end{array}$$

$$\begin{array}{r} 104 \\ - 22 \\ \hline \end{array}$$

$$\begin{array}{r} 26 \\ + 78 \\ \hline \end{array}$$

$$\begin{array}{r} 40 \\ + 95 \\ \hline \end{array}$$

$$\begin{array}{r} 145 \\ - 61 \\ \hline \end{array}$$

$$\begin{array}{r} 21 \\ + 61 \\ \hline \end{array}$$

$$\begin{array}{r} 59 \\ - 48 \\ \hline \end{array}$$

$$\begin{array}{r} 33 \\ - 19 \\ \hline \end{array}$$

$$\begin{array}{r} 137 \\ - 67 \\ \hline \end{array}$$

$$\begin{array}{r} 62 \\ + 67 \\ \hline \end{array}$$

$$\begin{array}{r} 71 \\ + 20 \\ \hline \end{array}$$

$$\begin{array}{r} 94 \\ - 59 \\ \hline \end{array}$$

$$\begin{array}{r} 85 \\ + 39 \\ \hline \end{array}$$

$$\begin{array}{r} 19 \\ + 28 \\ \hline \end{array}$$

$$\begin{array}{r} 36 \\ + 72 \\ \hline \end{array}$$

$$\begin{array}{r} 95 \\ - 60 \\ \hline \end{array}$$

$$\begin{array}{r} 39 \\ - 27 \\ \hline \end{array}$$

$$\begin{array}{r} 53 \\ - 38 \\ \hline \end{array}$$

$$\begin{array}{r} 142 \\ - 96 \\ \hline \end{array}$$

$$\begin{array}{r} 14 \\ + 20 \\ \hline \end{array}$$

$$\begin{array}{r} 95 \\ + 79 \\ \hline \end{array}$$

$$\begin{array}{r} 142 \\ - 59 \\ \hline \end{array}$$

$$\begin{array}{r} 82 \\ + 26 \\ \hline \end{array}$$

$$\begin{array}{r} 62 \\ + 64 \\ \hline \end{array}$$

$$\begin{array}{r} 49 \\ + 87 \\ \hline \end{array}$$

$$\begin{array}{r} 79 \\ - 27 \\ \hline \end{array}$$

$$\begin{array}{r} 148 \\ - 58 \\ \hline \end{array}$$

$$\begin{array}{r} 62 \\ - 50 \\ \hline \end{array}$$

$$\begin{array}{r} 75 \\ + 98 \\ \hline \end{array}$$

$$\begin{array}{r} 62 \\ - 43 \\ \hline \end{array}$$

$$\begin{array}{r} 38 \\ + 12 \\ \hline \end{array}$$

$$\begin{array}{r} 141 \\ - 86 \\ \hline \end{array}$$

$$\begin{array}{r} 83 \\ + 90 \\ \hline \end{array}$$

$$\begin{array}{r} 38 \\ + 26 \\ \hline \end{array}$$

$$\begin{array}{r} 81 \\ - 67 \\ \hline \end{array}$$

$$\begin{array}{r} 92 \\ - 64 \\ \hline \end{array}$$

$$\begin{array}{r} 62 \\ + 17 \\ \hline \end{array}$$

$$\begin{array}{r} 129 \\ - 87 \\ \hline \end{array}$$

$$\begin{array}{r} 82 \\ + 15 \\ \hline \end{array}$$

$$\begin{array}{r} 84 \\ - 14 \\ \hline \end{array}$$


$$\begin{array}{r} 64 \\ + 14 \\ \hline \end{array}$$

$$\begin{array}{r} 6 \\ + 7 \\ \hline \square \\ + 6 \\ \hline \square \\ + 8 \\ \hline 27 \\ - \square \\ \hline 23 \\ - \square \\ \hline 15 \\ + \square \\ \hline 18 \\ + \square \\ \hline 21 \\ + 5 \\ \hline \square \\ + 6 \\ \hline 32 \\ + \square \\ \hline 37 \\ - 3 \\ \hline \square \end{array}$$

Name: \_\_\_\_\_

$9 + 5 + 7 = 1 + 8 + 4 = 5 + 0 + 0 + 3 + 3$

Use the pieces above to help you fill in the runaway math puzzle.



What is the second month with 31 days?  
\_\_\_\_\_

$38 + 7 = \underline{\hspace{2cm}}$

- stoopping
- stoppig
- stopping
- stapping



What is the value of the BIG digit?  
**1**2,769  
\_\_\_\_\_

$\begin{array}{r} 86 \\ - 22 \\ \hline \end{array}$	$\begin{array}{r} 39 \\ - 15 \\ \hline \end{array}$	$\begin{array}{r} 72 \\ - 11 \\ \hline \end{array}$
---	---	---

Insert punctuation marks into this sentence.  
Alyssa, Amy said, how are you feeling today?

If  $H + H = 16$ , then what does H equal?  
\_\_\_\_\_

Name: \_\_\_\_\_

Fill in each box of the edHelperKu puzzle using the numbers from 1 to 4.

Every row must contain the numbers 1, 2, 3, and 4.

Every column must contain the numbers 1, 2, 3, and 4.

In a cage with a plus sign, the given number will be the sum of all the digits in the cage.

4+ 1234	1	7+ 2	1234
11+ 1234	1234	1234	2
2	4	3	8+ 1
3+ 1	1234	1234	1234

Fill in the blanks. These equations are from the puzzle above.

$$1 + \underline{\quad} + \underline{\quad} = 8$$

$$\underline{\quad} + \underline{\quad} + 4 = 11$$

$$2 + \underline{\quad} + \underline{\quad} = 7$$

$$1 + \underline{\quad} = 3$$

$$\underline{\quad} + 1 = 4$$

Name: \_\_\_\_\_

86	-52				+23		$+\frac{1}{2}$		$+1\frac{1}{2}$
		-22		+2					
	+18			$27\frac{1}{2}$			$-\frac{1}{2}$		$+\frac{1}{2}$
$-\frac{1}{2}$				+4			$-\frac{1}{2}$		
	$-5\frac{1}{2}$		$-\frac{1}{2}$				-11	43	

28	$-\frac{1}{3}$		+2		$-\frac{1}{3}$		$-\frac{1}{3}$		
								$-\frac{1}{3}$	
			$+3\frac{2}{3}$		-23				
-22		+11						$-\frac{2}{3}$	
					-49		$+7\frac{1}{3}$		
$-\frac{1}{3}$		$-4\frac{2}{3}$	$17\frac{1}{3}$	+56	$73\frac{1}{3}$		7	+8	15

Name: \_\_\_\_\_

Circle words to the RIGHT or DOWN. Every letter is used exactly ONCE.

W E A S C H A M B E R D  
A A H U S H H E L M O  
S T P A S S A G E S D W  
A R I T H M E T I C Y N  
B V A C A T I O N S E T  
Y E X T I N G U I S H O  
T O W E R S D E C K S W  
P L A Y G R O U N D S N

Write the words found:

DOWNTOWN	PLAYGROUNDS	_____
_____	_____	_____
_____	_____	_____
_____	_____	_____
_____	_____	_____

<p>If <math>\square = 9</math>, then <math>\square + 5 =</math> _____</p>	<p>Write the number with 4 hundreds and 3 thousands.</p> <p>_____</p>	$\begin{array}{r} 90 \\ - 85 \\ \hline \end{array}$
---	---	---



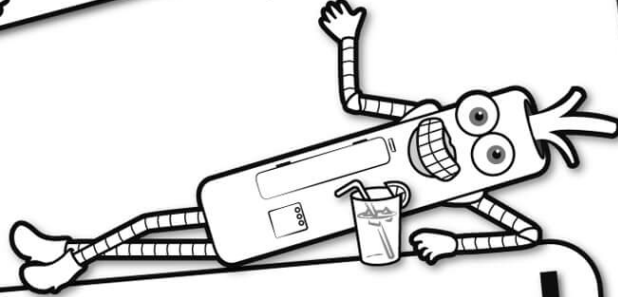
<p>Write the length in inches.</p> <p>_____</p>	<p>If you add 9 to me, the sum is 48. What number am I?</p> <p>_____</p>	$\begin{array}{r} 5 \\ \times 12 \\ \hline \end{array}$
	<p>Would you use a ruler or a yardstick to measure the length of your room?</p> <p>_____</p>	$\begin{array}{r} 8 \\ \times 1 \\ \hline \end{array}$

<p>Share 28 equally among 4.</p> <p>_____</p>	<p>It is 82 degrees Fahrenheit outside. What would you wear if you are going outside?</p> <p>_____</p>	$3 \overline{)21}$
---	--	--------------------






It's NO PREP at edHelper.



# edHelper.com!


More history!




Things for the classroom!



only \$19.99 per year




More science!



New ideas!



More puzzles!



# Take The Boring Out Of Homework!

Easy to  
print!

edHelper

## Weekly K-6 "Take It Home" Books

Kids want choices  
for homework.  
"Take It Home" books  
have fun graphics and  
challenging puzzles and  
problems for older kids.

"Dr. Programmer"  
challenges kids..

Homework  
will never be  
the same!

edHelper.com

