



Name: _____

Get a fidget spinner! Spin it.

I needed to spin _____ time(s) to finish.

$$\underline{\quad} \div 3 = 5$$

11, 13, 15, 17, _____, 21

Sarah bought six candy bars. It cost \$4.20. How much did each candy bar cost?

156, 169, _____, 195,
208, 221, 234

$$84 \div 7 =$$


Holly has 22 nickels. How much money is that?

How many hundreds are in the number 34,000?

$$\text{double } 20 =$$

In the parking lot there are 13 vehicles. There are 3 SUVs. What fraction of the vehicles are not SUVs?

Draw a small clock that shows 10 minutes past 11:00.



$$10 \times \underline{\quad} = \underline{\quad} = 15 \times 6$$

$$10 \times \underline{\quad} = 90 = \underline{\quad} \times 3$$

$$6 \times 5 = \underline{\quad} = 2 \times \underline{\quad}$$

$$4 \times \underline{\quad} = 28 = \underline{\quad} \times 14$$

$$8 \times 7 = \underline{\quad} = 28 \times \underline{\quad}$$

Circle the three numbers whose sum equals 18.

11	16	7	8
10	18	3	6

Name: _____

Make change. You can use \$20, \$10, \$5, \$1, 25¢, 10¢, 5¢, or 1¢.

Nathan has \$52.56. He has 5 bills and 4 coins. How?

\$20				
		5¢		

Ava has \$26.15. She has 3 bills and 2 coins. How?

Peter has \$81.18. He has 6 bills and 19 coins. How?

Anne has \$21.36. She has 4 bills and 4 coins. How?

Name: _____

Jessica went to the café and ordered a turkey and Swiss cheese sandwich, a cup of potato salad, and a milkshake. The sandwich cost \$2.58, the potato salad cost \$1.23, and the milkshake cost \$1.28. How much did Jessica's meal cost in all?

Maria made a flag to display during Red Cross Month. The flag was 4 feet long and $2\frac{2}{3}$ feet wide. She drew a large red cross in the middle of it. What is the area of the flag?

Max is taking a 24-hour walk challenge. He is trying to stay awake for 24 hours and plans to walk as far as he can. Each hour he plans to sit and rest for only 8 minutes. If he is able to do this, how long will he spend walking and not resting during the 24 hours?

_____ hours and _____ minutes

Emma was so into a book. She finally finished! She then spent 2 times as long playing a game on her phone as she did reading. Emma spent a total of 84 minutes in her room reading and playing the game. For how long did Emma read?

Name: _____

Name the place value that is 10 times greater than the hundred billions place.

How much greater is 182 than 45?

How many total legs are on 4 elephants and 5 ants?

$10 \times 9 \times 5$

Rose has 72 cookies. She and her 8 friends shared them equally. How many cookies did Rose keep?

How many total legs are on 9 owls?

Which number has exactly 2 hundreds?

Name: _____

How many times greater is

88 than 8? _____

24 than 8? _____

800,000 than 800? _____

8,600 than 860? _____

60 than 6? _____

Double the number 6 three times.

$$24 \div \underline{\quad} = 8$$

Name the shape with five sides and five angles.

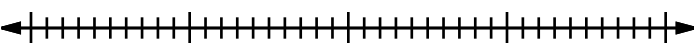
Amy gave out a survey. The answers she got back were 15, 26, 21, and 18. What is the range of these numbers?

Holly has 30 cookies. She and her 5 friends shared them equally. How many cookies did Holly keep?

11, 22, 33, 44, 55, 66,
_____, 88, 99

Name: _____

<p>Maria is packing picnic baskets for her family's annual beach picnic. The picnic is so much fun! She gets to see all her aunts and uncles and cousins at one time. There will be 30 people at the picnic this year. Each basket has food for 5 people. How many baskets will she need to pack?</p>	<p>Jack started his homework at 3:25 p.m. He finished it one and a half hours later. What time did Jack finish his work?</p>	<p>Jenna wants to go to the juggling show. Tickets cost \$1.75. She has 3 quarters and 2 nickels. How much more money does she need?</p>
---	--	--

<p>Locate where to put the number 612,000 and label the point K.</p> <p>  </p>	<p>Do you use A.M. or P.M. to write the time you eat dinner?</p> <p>_____</p>
---	---

<p>What is the value of the 4 in 45?</p> <p>_____</p>	<p>The fire started at 12:36 p.m. It was put out by 2:17 p.m. on the same day. How long did the fire last?</p>	<p>Color $\frac{1}{10}$.</p> <table border="1" style="width: 100%; height: 100px;"> <tr><td></td><td></td><td></td><td></td><td></td><td></td><td></td><td></td><td></td><td></td></tr> <tr><td></td><td></td><td></td><td></td><td></td><td></td><td></td><td></td><td></td><td></td></tr> <tr><td></td><td></td><td></td><td></td><td></td><td></td><td></td><td></td><td></td><td></td></tr> <tr><td></td><td></td><td></td><td></td><td></td><td></td><td></td><td></td><td></td><td></td></tr> <tr><td></td><td></td><td></td><td></td><td></td><td></td><td></td><td></td><td></td><td></td></tr> <tr><td></td><td></td><td></td><td></td><td></td><td></td><td></td><td></td><td></td><td></td></tr> <tr><td></td><td></td><td></td><td></td><td></td><td></td><td></td><td></td><td></td><td></td></tr> <tr><td></td><td></td><td></td><td></td><td></td><td></td><td></td><td></td><td></td><td></td></tr> <tr><td></td><td></td><td></td><td></td><td></td><td></td><td></td><td></td><td></td><td></td></tr> <tr><td></td><td></td><td></td><td></td><td></td><td></td><td></td><td></td><td></td><td></td></tr> </table>																																																																																																				
<p>Which is longer: three feet or forty inches?</p> <p>_____</p>																																																																																																						

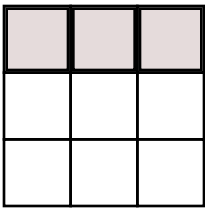
<p>Which number is greater: 0.2 or 0.21?</p> <p>_____</p>	<p>52 - 32 = _____</p>	<table style="margin-left: auto; margin-right: auto;"> <tr><td>5</td><td>7</td></tr> <tr><td>-</td><td>49</td></tr> <tr><td colspan="2" style="border-top: 1px solid black;"></td></tr> </table>	5	7	-	49		
5	7							
-	49							

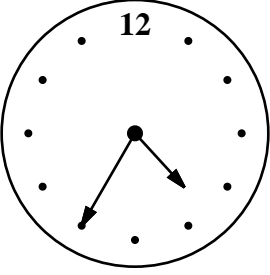
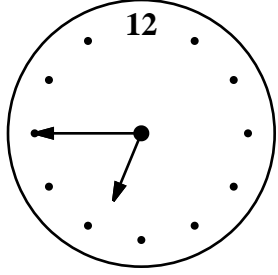
Name: _____

List the first five multiples of 12. _____	Name the polygon that has ten vertices. _____
---	--

Is 45 smaller than 54? _____	The factors of 15 are ___ 3 5 ___
---------------------------------	---

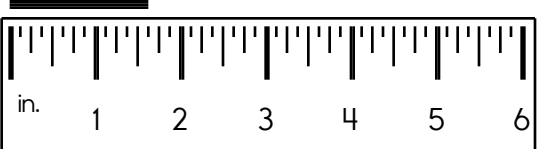
<p>Fill in the boxes so each line equals 10.</p> <div style="border: 1px solid black; padding: 5px; margin-bottom: 5px;"> <div style="background-color: #d3d3d3; text-align: center; padding: 2px;">10</div> <div style="display: flex; justify-content: space-around; align-items: center;"> <div style="border: 1px solid black; padding: 5px; color: blue;">80</div> <div>÷</div> <div style="border: 1px solid black; width: 40px; height: 30px;"></div> </div> <div style="display: flex; justify-content: space-around; align-items: center;"> <div style="border: 1px solid black; width: 40px; height: 30px;"></div> <div>×</div> <div style="border: 1px solid black; padding: 5px; color: blue;">5</div> </div> <div style="display: flex; justify-content: space-around; align-items: center;"> <div style="border: 1px solid black; width: 40px; height: 30px;"></div> <div>-</div> <div style="border: 1px solid black; padding: 5px; color: blue;">6</div> </div> <div style="display: flex; justify-content: space-around; align-items: center;"> <div style="border: 1px solid black; padding: 5px;">(-)</div> <div>+</div> <div style="border: 1px solid black; padding: 5px; color: blue;">9</div> </div> </div>	<p>How many fourths are in 3?</p> <p>_____</p> <div style="border: 1px solid black; padding: 5px;"> <input type="radio"/> almost <input type="radio"/> almos <input type="radio"/> almot <input type="radio"/> ilmost </div>
--	---

<p>Write the number for four thousand, nine hundred thirty.</p> <p>_____</p>	<p>The sum of two whole numbers is fourteen. The difference between the two numbers is two. What are these two numbers?</p> <p>_____</p>	<p>What fraction of the box is shaded?</p> <div style="text-align: center;">  </div> <div style="text-align: center; margin-top: 10px;"> <div style="border: 1px solid black; width: 30px; height: 30px; display: inline-block;"></div> <div style="border-top: 1px solid black; width: 20px; display: inline-block;"></div> </div>
--	--	---

<div style="display: flex; justify-content: space-around; align-items: center;"> <div style="text-align: center;">  <p>current time (pm)</p> </div> <div style="text-align: center;">  <p>time party starts (pm)</p> </div> </div> <p>How long until the party? _____</p>	<p>Round the number to the place value of the BIG number.</p> <p>98,872</p> <p>_____</p>
--	---

Name: _____

<p>If twenty crayons are divided into ten equal rows, how many crayons are in each row?</p> <p>_____</p>	<p>Write the numeral for three hundred sixty-one.</p> <p>_____</p>	<p>8 $\overline{)56}$</p>
--	--	--------------------------------------

<p>Write the length in inches.</p> <p>_____</p> 	<p>Round to the nearest thousand.</p> <p>6,376 is rounded to _____</p> <p>6,111 is rounded to _____</p> <p>2,892 is rounded to _____</p>
---	--

<p>What is the third month with 31 days?</p> <p>_____</p>	<p>What is the value of the BIG digit?</p> <p>25,938</p> <p>_____</p>	<p>3 $\overline{)6}$</p> <p>4 $\overline{)16}$</p>
<p>Write the ordinal number that comes after sixty-first.</p> <p>_____</p>	<p>_____</p>	

<p>Make a pattern.</p> <p>Start with 39.</p> <p>Add 10.</p> <p>_____, _____, _____, _____, _____, _____</p>	<p>Share 12 equally among 2.</p> <p>_____</p>
---	---

<p>35 - 5 = _____</p>	<p>If $\square = 7$, then $15 - \square =$ _____</p>	<p>62 + 51 —</p>
-----------------------	--	--------------------------

<p>Insert punctuation marks into this sentence.</p> <p>Thomas asked Clara Are we having spaghetti for dinner again?</p>	<p>What are 48 tens equal to?</p> <p>_____</p>
---	--

Name: _____

$$\begin{array}{r} 932 \\ + 909 \\ \hline \end{array}$$

$$\begin{array}{r} 446 \\ + 197 \\ \hline \end{array}$$

$$\begin{array}{r} 1,619 \\ - 850 \\ \hline \end{array}$$

$$\begin{array}{r} 1,602 \\ - 811 \\ \hline \end{array}$$

$$\begin{array}{r} 645 \\ + 258 \\ \hline \end{array}$$

$$\begin{array}{r} 1,234 \\ - 705 \\ \hline \end{array}$$

$$\begin{array}{r} 742 \\ - 313 \\ \hline \end{array}$$

$$\begin{array}{r} 382 \\ + 502 \\ \hline \end{array}$$

$$\begin{array}{r} 1,120 \\ - 400 \\ \hline \end{array}$$

$$\begin{array}{r} 1,018 \\ - 221 \\ \hline \end{array}$$

$$\begin{array}{r} 777 \\ + 328 \\ \hline \end{array}$$

$$\begin{array}{r} 816 \\ + 633 \\ \hline \end{array}$$

$$\begin{array}{r} 980 \\ + 639 \\ \hline \end{array}$$

$$\begin{array}{r} 974 \\ + 704 \\ \hline \end{array}$$

$$\begin{array}{r} 412 \\ - 191 \\ \hline \end{array}$$

$$\begin{array}{r} 469 \\ + 895 \\ \hline \end{array}$$

$$\begin{array}{r} 1,022 \\ - 225 \\ \hline \end{array}$$

$$\begin{array}{r} 1,283 \\ - 629 \\ \hline \end{array}$$

$$\begin{array}{r} 179 \\ + 526 \\ \hline \end{array}$$

$$\begin{array}{r} 212 \\ + 931 \\ \hline \end{array}$$

$$\begin{array}{r} 723 \\ - 558 \\ \hline \end{array}$$

$$\begin{array}{r} 601 \\ + 951 \\ \hline \end{array}$$

$$\begin{array}{r} 1,023 \\ - 321 \\ \hline \end{array}$$

$$\begin{array}{r} 1,793 \\ - 989 \\ \hline \end{array}$$

$$\begin{array}{r} 1,472 \\ - 476 \\ \hline \end{array}$$

$$\begin{array}{r} 715 \\ + 201 \\ \hline \end{array}$$

$$\begin{array}{r} 1,466 \\ - 472 \\ \hline \end{array}$$

$$\begin{array}{r} 763 \\ + 631 \\ \hline \end{array}$$

$$\begin{array}{r} 612 \\ - 151 \\ \hline \end{array}$$

$$\begin{array}{r} 445 \\ + 722 \\ \hline \end{array}$$

$$\begin{array}{r} 1,777 \\ - 921 \\ \hline \end{array}$$

$$\begin{array}{r} 1,163 \\ - 846 \\ \hline \end{array}$$

$$\begin{array}{r} 492 \\ + 127 \\ \hline \end{array}$$

$$\begin{array}{r} 137 \\ + 654 \\ \hline \end{array}$$

$$\begin{array}{r} 1,359 \\ - 489 \\ \hline \end{array}$$

$$\begin{array}{r} 6 \\ + 9 \\ \hline \square \end{array}$$

$$\begin{array}{r} + 6 \\ \hline \square \\ + 3 \end{array}$$

$$\begin{array}{r} 24 \\ - \square \\ \hline 19 \end{array}$$

$$\begin{array}{r} + 5 \\ \hline \square \\ - 7 \end{array}$$

$$\begin{array}{r} + 8 \\ \hline \square \\ + 7 \end{array}$$

$$\begin{array}{r} 32 \\ + \square \\ \hline 38 \end{array}$$

$$\begin{array}{r} + \square \\ \hline 45 \\ - \square \end{array}$$

$$\begin{array}{r} 43 \end{array}$$

Use the pieces above to help you fill in the runaway math puzzle.

	0	+		=			
-						-	
0		8		8		3	
=						=	
	+	3			=	1	2
						+	
1						2	

	7
2	
<hr/>	
	4

8	
- 8	
<hr/>	

$$\frac{2}{10}, \quad \underline{\hspace{2cm}}, \quad \frac{4}{10}, \quad \frac{5}{10}$$

Name: _____

Jack never spends the coins he gets. He has 27 dimes. But that's nothing! He has 3 times as many nickels as dimes. How much money does he have in all?

A number less than 11 has some factors. Two of its factors are 2 and 6. Can you name at least one number that fits this?

Two prime numbers are each greater than 1 and less than 21. When these two prime numbers are added together, they have a sum of 26.
What are the two prime numbers?

Name: _____

Pay the bill!

Sara received a bill for her cellphone from Mobile Unlimited for \$63.73. Write the check as Sara would write it.

SARA	1305
	DATE _____
PAY TO THE ORDER OF _____	\$ <input style="width: 100px;" type="text"/>
_____	DOLLARS
MEMO _____	
⑆998 1 18409⑆	⑈58318⑈ 1305

Pay the bill!

Rent is due. Sara needs to pay her landlord \$2,900. Her landlord's name is April Anderson.

SARA	1306
	DATE _____
PAY TO THE ORDER OF _____	\$ <input style="width: 100px;" type="text"/>
_____	DOLLARS
MEMO _____	
⑆998 1 18409⑆	⑈58318⑈ 1306

There are 2 groups of 5 rocks. How many rocks?

Is 345 closer to 300 or 400?

$$35 \div 5 =$$

What number is halfway between 0 and 8?

Is 25 a composite or a prime number?

If you exchange 100 dimes for dollars, then how many dollars would you get?

Name: _____

Ready to make equations? There is a missing equation in each box.
Circle the numbers once you find it!

A

21	50	36
25	83	44
58	73	51

Find an
addition fact.

B

33	70	90
76	89	46
61	26	87

Find a
subtraction fact.

C

51	19	70
74	25	90
38	42	37

Find an
addition fact.

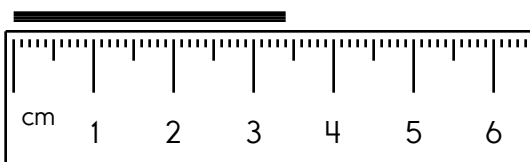
Equations:

Write the equation facts you found.

A	58	+	25	=	83
B		-		=	
C		+		=	

Which is smaller, $\frac{1}{5}$ or $\frac{3}{5}$?

Write the length in centimeters.



What is half of 36?

20
65
+ 12

19
10
+ 40

65
+ 66

Name _____



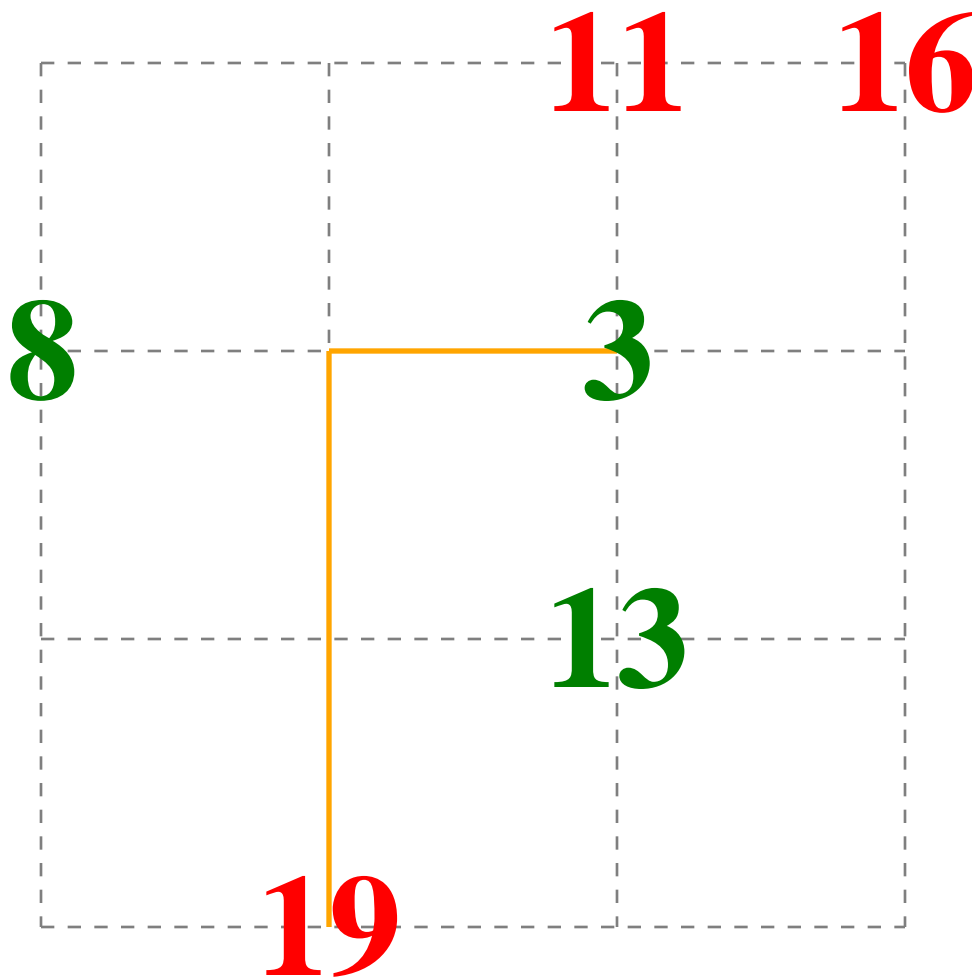
Date _____

Greater and Less Than Number Kissing

Start at a green number and draw a line to any red number that is greater than the green number.

Draw a line that connects one number to one other number to kiss. Draw your lines over the trace lines. No lines may cross. Once you draw a line to a number, that number cannot be used again.

One complete line has already been drawn for you.





It's NO PREP at edHelper.

More history!



edHelper.com!



New online math games!



New ideas!



x
+ =
- ÷
< >

More puzzles!



