

Name: \_\_\_\_\_

<p>Max's dog eats five dog biscuits every day. How many biscuits does Max's dog eat in seven days?</p>	<p>Maria went to the store. She bought one jar of "Bubble Stuff." It cost 89¢. She gave the clerk 3 quarters and 2 dimes. How much money did she get back?</p>	<p>Jacob found 2 sand dollars and 4 conch shells at the beach. What fraction of the group of shells are the sand dollars?</p>
--	--	---

<p>Fill in the boxes so each line equals 7.</p> <p style="text-align: center;"><u>7</u></p> <p><input type="text" value="9"/> - <input type="text"/></p> <p><input type="text" value="7"/> x <input type="text"/></p> <p><input type="text" value="98"/> ÷ <input type="text"/></p> <p>( <input type="text"/> + <input type="text" value="2"/> ) - <input type="text"/></p> <p><input type="text" value="4"/> + <input type="text"/> x <input type="text"/></p>	<p><math>70 + 35 = \underline{\hspace{2cm}}</math></p> <table style="margin-left: auto; margin-right: auto;"> <tr><td style="text-align: right;">10</td><td></td></tr> <tr><td style="text-align: right;">43</td><td></td></tr> <tr><td style="text-align: right;">+ 42</td><td></td></tr> <tr><td colspan="2"><hr/></td></tr> </table> <table style="margin-left: auto; margin-right: auto;"> <tr><td style="text-align: right;">12</td><td></td></tr> <tr><td style="text-align: right;">+ 51</td><td></td></tr> <tr><td colspan="2"><hr/></td></tr> </table>	10		43		+ 42		<hr/>		12		+ 51		<hr/>		<table style="margin-left: auto; margin-right: auto;"> <tr><td style="text-align: right;">8</td></tr> <tr><td style="text-align: right;">x 4</td></tr> <tr><td colspan="2"><hr/></td></tr> </table>	8	x 4	<hr/>	
10																				
43																				
+ 42																				
<hr/>																				
12																				
+ 51																				
<hr/>																				
8																				
x 4																				
<hr/>																				

<p><math>12 \times 1 = \underline{\hspace{2cm}}</math>      <math>5 \times 4 = \underline{\hspace{2cm}}</math></p>	$8 \overline{)48}$
<p><math>13 + \square = 27</math>      <math>30 + \square = 32</math></p>	

<p><math>3 \times 7 = \underline{\hspace{2cm}}</math>      <math>7 \times 6 = \underline{\hspace{2cm}}</math></p>
---



Name: \_\_\_\_\_



The vowels are missing in the word search.  
Fill in the missing vowels and circle the words.

□	M	□	□	L	R	□	□	□	S
T	C	E	L	E	R	Y	M	B	□
L	□	N	Y	C	B	□	P	T	C
□	K	□	P	T	□	□	□	C	S
C	N	B	T	□	T	□	R	L	R
K	□	□	C	Y	T	K	T	D	S
R	M	T	B	R	□	M	□	Y	T
M	S	H	W	V	M	W	N	□	□
□	S	P	□	□	K	□	T	M	C
Y	C	□	K	□	□	P	□	L	K

Write the correct symbol.

< = >  
715 ○ 715

$$\begin{array}{r} 45 \\ - 19 \\ \hline \end{array}$$

$$\begin{array}{r} 35 \\ + 83 \\ \hline \end{array}$$

CAKE • LACK • MAIL • STACK  
BOTTOM • DYE • IMPORTANT • ANY  
SPEAK • CELERY

$$\begin{array}{r} 69 \\ - 59 \\ \hline \end{array}$$

- saop
- soap
- sahnp
- soapp

$$4 \overline{)36}$$

$$8 \overline{)16}$$

- seve
- sorv
- serve
- sorve

$$\begin{array}{r} 95 \\ + 34 \\ \hline \end{array}$$

11 + 51 = \_\_\_\_\_

27 + □ = 32

Can you think of a 5-letter word that has the vowel E in it?

\_\_\_\_\_

What is the fourth month with 30 days?

\_\_\_\_\_

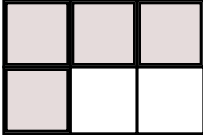
$$\begin{array}{r} 9 \\ x 4 \\ \hline \end{array}$$

$$\begin{array}{r} 5 \\ x 7 \\ \hline \end{array}$$


$$\begin{array}{r} 95 \\ - 52 \\ \hline \end{array}$$


$$\begin{array}{r} 93 \\ - 66 \\ \hline \end{array}$$

Name: \_\_\_\_\_

$80 - 49 = \underline{\hspace{2cm}}$	$76 - 39 = \underline{\hspace{2cm}}$	What fraction of the box is shaded?  $\frac{\square}{3}$
$\begin{array}{r} 12 \\ \times 12 \\ \hline \end{array}$ $\begin{array}{r} \phantom{1}1 \\ \times 12 \\ \hline \end{array}$	$\begin{array}{r} 7 \\ \times 4 \\ \hline \end{array}$ $\begin{array}{r} \phantom{7}4 \\ \times 8 \\ \hline \end{array}$	

$\begin{array}{r} 93 \\ + 49 \\ \hline \end{array}$	$\begin{array}{r} 54 \\ + 28 \\ \hline \end{array}$	$\begin{array}{r} 55 \\ + 11 \\ \hline \end{array}$	$\begin{array}{r} 71 \\ + 91 \\ \hline \end{array}$	$5 \overline{)45}$
---	---	---	---	--------------------

<p>Fill in the blanks with these numbers: <b>5, 2, 7</b></p> $\begin{array}{r} 1 \quad \square \quad 7 \\ + 2 \quad 5 \quad \square \\ \hline 4 \quad 3 \quad \square \end{array}$	<p>Fill in the blanks with these numbers: <b>9, 2, 7</b></p> $\begin{array}{r} 2 \quad 8 \quad 5 \\ + 6 \quad 4 \quad 2 \\ \hline \square \quad \square \quad \square \end{array}$	<p>What fraction of the box is shaded?  <math>\frac{\square}{2}</math></p>
--	--	--

$\begin{array}{r} 51 \\ - 30 \\ \hline \end{array}$	<p>Fill in the blanks with these numbers: <b>1, 9, 2</b></p> $\begin{array}{r} \square \quad 1 \quad \square \\ 2 \quad 4 \quad 8 \\ + 5 \quad 4 \quad 0 \\ \hline \square \quad 9 \quad 9 \end{array}$	<p>Fill in the blanks with these numbers: <b>9, 7, 7</b></p> $\begin{array}{r} 2 \quad \square \quad 5 \\ 5 \quad 1 \quad 5 \\ + 1 \quad \square \quad 8 \\ \hline \square \quad 6 \quad 8 \end{array}$	
---	---	---	---

Name: \_\_\_\_\_

$$\begin{array}{r} 77 \\ + 49 \\ \hline \end{array}$$

$$\begin{array}{r} 38 \\ + 87 \\ \hline \end{array}$$

$$\begin{array}{r} 47 \\ + 26 \\ \hline \end{array}$$

$$\begin{array}{r} 141 \\ - 73 \\ \hline \end{array}$$

$$\begin{array}{r} 136 \\ - 55 \\ \hline \end{array}$$

$$\begin{array}{r} 105 \\ - 31 \\ \hline \end{array}$$

$$\begin{array}{r} 10 \\ + 77 \\ \hline \end{array}$$

$$\begin{array}{r} 18 \\ + 24 \\ \hline \end{array}$$

$$\begin{array}{r} 120 \\ - 33 \\ \hline \end{array}$$

$$\begin{array}{r} 29 \\ + 21 \\ \hline \end{array}$$

$$\begin{array}{r} 62 \\ - 39 \\ \hline \end{array}$$

$$\begin{array}{r} 193 \\ - 94 \\ \hline \end{array}$$

$$\begin{array}{r} 50 \\ + 95 \\ \hline \end{array}$$

$$\begin{array}{r} 167 \\ - 95 \\ \hline \end{array}$$

$$\begin{array}{r} 171 \\ - 82 \\ \hline \end{array}$$

$$\begin{array}{r} 79 \\ + 99 \\ \hline \end{array}$$

$$\begin{array}{r} 105 \\ - 12 \\ \hline \end{array}$$

$$\begin{array}{r} 19 \\ + 33 \\ \hline \end{array}$$

$$\begin{array}{r} 25 \\ + 16 \\ \hline \end{array}$$

$$\begin{array}{r} 93 \\ - 27 \\ \hline \end{array}$$

$$\begin{array}{r} 130 \\ - 42 \\ \hline \end{array}$$

$$\begin{array}{r} 71 \\ + 44 \\ \hline \end{array}$$

$$\begin{array}{r} 77 \\ - 43 \\ \hline \end{array}$$

$$\begin{array}{r} 58 \\ + 56 \\ \hline \end{array}$$

$$\begin{array}{r} 114 \\ - 82 \\ \hline \end{array}$$

$$\begin{array}{r} 74 \\ - 61 \\ \hline \end{array}$$

$$\begin{array}{r} 12 \\ + 26 \\ \hline \end{array}$$

$$\begin{array}{r} 25 \\ + 79 \\ \hline \end{array}$$

$$\begin{array}{r} 38 \\ - 16 \\ \hline \end{array}$$

$$\begin{array}{r} 35 \\ + 55 \\ \hline \end{array}$$

$$\begin{array}{r} 85 \\ - 15 \\ \hline \end{array}$$

$$\begin{array}{r} 71 \\ + 78 \\ \hline \end{array}$$

$$\begin{array}{r} 17 \\ + 75 \\ \hline \end{array}$$

$$\begin{array}{r} 89 \\ - 27 \\ \hline \end{array}$$

$$\begin{array}{r} 68 \\ + 65 \\ \hline \end{array}$$

$$\begin{array}{r} 141 \\ - 88 \\ \hline \end{array}$$

$$\begin{array}{r} 88 \\ - 22 \\ \hline \end{array}$$

$$\begin{array}{r} 103 \\ - 61 \\ \hline \end{array}$$

$$\begin{array}{r} 121 \\ - 52 \\ \hline \end{array}$$

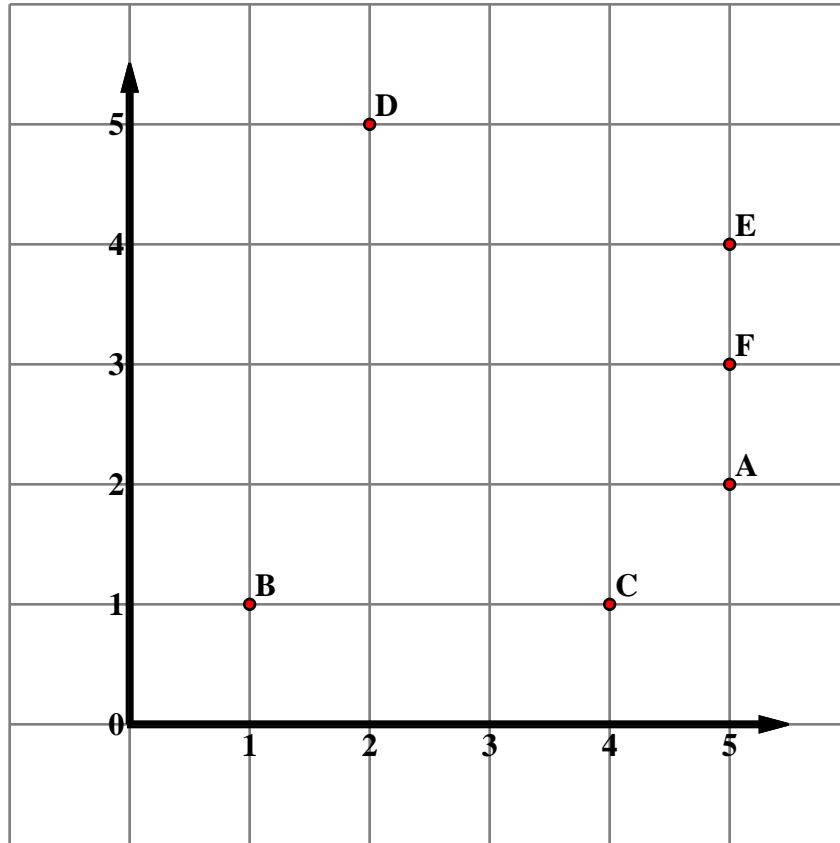
$$\begin{array}{r} 47 \\ + 94 \\ \hline \end{array}$$

$$\begin{array}{r} 78 \\ + 41 \\ \hline \end{array}$$

$$\begin{array}{r} 83 \\ + 48 \\ \hline \end{array}$$

$$\begin{array}{r} 4 \\ + 3 \\ \hline \square \\ + 9 \\ \hline \square \\ + 3 \\ \hline 19 \\ + \square \\ \hline 21 \\ - 3 \\ \hline \square \\ + 9 \\ \hline \square \\ - 5 \\ \hline \square \\ + 6 \\ \hline 28 \\ + \square \\ \hline 31 \\ - \square \\ \hline 29 \\ + \square \\ \hline 31 \end{array}$$

Name: \_\_\_\_\_



Write the letter that is at the ordered pair.

- |                      |                   |                   |
|----------------------|-------------------|-------------------|
| 1. $(5, 2)$ <u>A</u> | 2. $(5, 3)$ _____ | 3. $(5, 4)$ _____ |
| 4. $(2, 5)$ _____    | 5. $(4, 1)$ _____ | 6. $(1, 1)$ _____ |

Write the ordered pair for the given point.

- |  |                    |                    |
|--|--------------------|--------------------|
| 7. <b>D</b> <u><math>(2, 5)</math></u> | 8. <b>F</b> _____  | 9. <b>E</b> _____  |
| 10. <b>B</b> _____                     | 11. <b>C</b> _____ | 12. <b>A</b> _____ |

Plot each point on the coordinate grid.

- |                             |                             |                             |
|-----------------------------|-----------------------------|-----------------------------|
| 13. <b>G</b> $(2, 2)$ _____ | 14. <b>H</b> $(2, 1)$ _____ | 15. <b>I</b> $(4, 3)$ _____ |
| 16. <b>J</b> $(1, 4)$ _____ | 17. <b>K</b> $(3, 5)$ _____ | 18. <b>L</b> $(5, 5)$ _____ |
| 19. <b>M</b> $(2, 3)$ _____ | 20. <b>N</b> $(3, 3)$ _____ | 21. <b>O</b> $(3, 1)$ _____ |

Name: \_\_\_\_\_

$\frac{1}{4}$		$\frac{1}{4}$		$\frac{1}{4}$		$\frac{1}{4}$	
$\frac{1}{8}$	$\frac{1}{8}$	$\frac{1}{8}$	$\frac{1}{8}$	$\frac{1}{8}$	$\frac{1}{8}$	$\frac{1}{8}$	$\frac{1}{8}$

$$\frac{\square}{4} = \frac{2}{8}$$

$\frac{1}{6}$	$\frac{1}{6}$	$\frac{1}{6}$	$\frac{1}{6}$	$\frac{1}{6}$	$\frac{1}{6}$
$\frac{1}{3}$		$\frac{1}{3}$		$\frac{1}{3}$	

$$\frac{\square}{6} = \frac{2}{3}$$

$\frac{1}{4}$	
$\frac{1}{12}$	

$$\frac{\square}{4} = \frac{6}{12}$$

$\frac{1}{12}$	
$\frac{1}{3}$	

$$\frac{4}{12} = \frac{\square}{3}$$

$\frac{1}{6}$	
$\frac{1}{12}$	

$$\frac{5}{6} = \frac{\square}{12}$$

$\frac{1}{3}$	
$\frac{1}{9}$	

$$\frac{\square}{3} = \frac{6}{9}$$

$\frac{1}{10}$	
$\frac{1}{5}$	

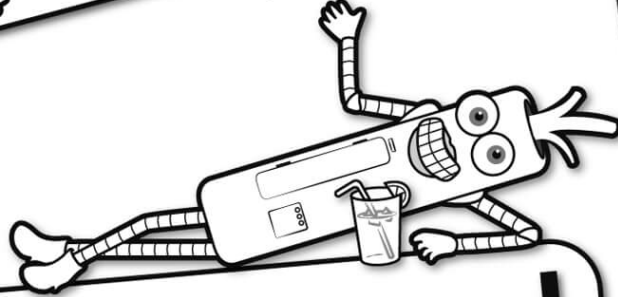
$$\frac{2}{10} = \frac{\square}{5}$$

$\frac{1}{8}$	
$\frac{1}{2}$	

$$\frac{\square}{8} = \frac{\square}{2}$$




It's NO PREP at edHelper.




# edHelper.com!

More history!




Things for the classroom!



only \$19.99 per year


More science!



New ideas!



More puzzles!



# Take The Boring Out Of Homework!

Easy to  
print!

edHelper

## Weekly K-6 "Take It Home" Books

Kids want choices  
for homework.  
"Take It Home" books  
have fun graphics and  
challenging puzzles and  
problems for older kids.

"Dr. Programmer"  
challenges kids..

Homework  
will never be  
the same!

edHelper.com

