



Name: \_\_\_\_\_

+	12					6	3
6	18	12		18		12	
	$\underline{6 + 12}$	$\underline{6 + \quad}$	$\underline{6 + \quad}$	$\underline{6 + \quad}$	$\underline{6 + \quad}$	$\underline{6 + 6}$	$\underline{6 + 3}$
7	19				17		
	$\underline{7 + 12}$	$\underline{7 + \quad}$	$\underline{7 + \quad}$	$\underline{7 + \quad}$	$\underline{7 + \quad}$	$\underline{7 + 6}$	$\underline{7 + 3}$
					17		
	$\underline{\quad + 12}$	$\underline{\quad + \quad}$	$\underline{\quad + \quad}$	$\underline{\quad + \quad}$	$\underline{\quad + \quad}$	$\underline{\quad + 6}$	$\underline{\quad + 3}$
8			14				11
	$\underline{8 + 12}$	$\underline{8 + \quad}$	$\underline{8 + \quad}$	$\underline{8 + \quad}$	$\underline{8 + \quad}$	$\underline{8 + 6}$	$\underline{8 + 3}$
12		18					
	$\underline{12 + 12}$	$\underline{12 + \quad}$	$\underline{12 + \quad}$	$\underline{12 + \quad}$	$\underline{12 + \quad}$	$\underline{12 + 6}$	$\underline{12 + 3}$
							14
	$\underline{\quad + 12}$	$\underline{\quad + \quad}$	$\underline{\quad + \quad}$	$\underline{\quad + \quad}$	$\underline{\quad + \quad}$	$\underline{\quad + 6}$	$\underline{\quad + 3}$
						12	
	$\underline{\quad + 12}$	$\underline{\quad + \quad}$	$\underline{\quad + \quad}$	$\underline{\quad + \quad}$	$\underline{\quad + \quad}$	$\underline{\quad + 6}$	$\underline{\quad + 3}$



current time



15 minutes later



Write this number using words.

$6 + \boxed{\quad} = 12$

$12 + \boxed{\quad} = 29$

$23 + \boxed{\quad} = 35$

$18 + \boxed{\quad} = 24$

Name: \_\_\_\_\_

Find the missing numbers. These both have the same rule. What is the rule?

If

$$1, 1 = 2$$

$$2, 2 = 4$$

$$3, 3 = 6$$

$$4, 4 = 8$$

Then

$$5, 5 = ?$$

If

$$7, 7 = 14$$

$$8, 8 = 16$$

$$9, 9 = 18$$

$$10, 10 = 20$$

Then

$$11, 11 = ?$$


What is the rule for each pattern?

4, 4, 17, 10, \_\_\_\_\_, \_\_\_\_\_, 43, 22, 56, 28, 69, 34

\_\_\_\_\_, \_\_\_\_\_, 25, 19, 41, 29, 57, 39, 73, 49, 89, 59, 105, 69

Name: \_\_\_\_\_

+		11	25		23	
44	56				67	
	<u>44</u> + <u>    </u>	<u>44</u> + <u>11</u>	<u>44</u> + <u>25</u>	<u>44</u> + <u>    </u>	<u>44</u> + <u>23</u>	<u>44</u> + <u>    </u>
	<u>    </u> + <u>    </u>	<u>    </u> + <u>11</u>	<u>    </u> + <u>25</u>	<u>    </u> + <u>    </u>	<u>    </u> + <u>23</u>	<u>    </u> + <u>    </u>
19			44			
	<u>19</u> + <u>    </u>	<u>19</u> + <u>11</u>	<u>19</u> + <u>25</u>	<u>19</u> + <u>    </u>	<u>19</u> + <u>23</u>	<u>19</u> + <u>    </u>
5		16		17		11
	<u>5</u> + <u>    </u>	<u>5</u> + <u>11</u>	<u>5</u> + <u>25</u>	<u>5</u> + <u>    </u>	<u>5</u> + <u>23</u>	<u>5</u> + <u>    </u>
20	32		45		43	
	<u>20</u> + <u>    </u>	<u>20</u> + <u>11</u>	<u>20</u> + <u>25</u>	<u>20</u> + <u>    </u>	<u>20</u> + <u>23</u>	<u>20</u> + <u>    </u>
	<u>    </u> + <u>    </u>	<u>    </u> + <u>11</u>	<u>    </u> + <u>25</u>	<u>    </u> + <u>    </u>	<u>    </u> + <u>23</u>	<u>    </u> + <u>    </u>
	<u>    </u> + <u>    </u>	<u>    </u> + <u>11</u>	<u>    </u> + <u>25</u>	<u>    </u> + <u>    </u>	<u>    </u> + <u>23</u>	<u>    </u> + <u>    </u>
31						37
	<u>31</u> + <u>    </u>	<u>31</u> + <u>11</u>	<u>31</u> + <u>25</u>	<u>31</u> + <u>    </u>	<u>31</u> + <u>23</u>	<u>31</u> + <u>    </u>

$\begin{array}{r} 38 \\ 27 \\ + 26 \\ \hline \end{array}$	$\begin{array}{r} 78 \\ 53 \\ + 10 \\ \hline \end{array}$	<p>Write the correct symbol.</p> <p>&lt;   =   &gt;</p> <p>59,415      59,451</p>	<p><input type="radio"/> quck</p> <p><input type="radio"/> qaeck</p> <p><input type="radio"/> quick</p> <p><input type="radio"/> qick</p>	$\begin{array}{r} 8 \\ \times 5 \\ \hline \end{array}$
---	---	--	---	--

word root **duct** can mean **leader**

**conduct, conductor**

Name: \_\_\_\_\_

Wendy is having a bad day. Her best friend moved to another city. Now it will take Wendy 2 hours and 19 minutes to get to her friend's house. How many minutes will it take to get to her friend's house?

Gavin saw 3 Play-Doh frogs and 5 Play-Doh birds. Each frog has 4 legs, and each bird has 2 legs. How many total legs do these 8 Play-Doh frogs and birds have?

Gavin drew a very large square with a blue piece of chalk at the playground. One side is 9 feet long. Gavin wants to walk along the square and can only walk on the line. If he wants to walk the square 2 times by only stepping on the line, how many feet will he end up walking?

Holly and Hunter each ordered a pizza pie at CC's Pizza. CC's pizza is special in that they don't cut the pie into slices, you have to do that! When Holly got her pie she cut it into 5 slices. Hunter decided to cut his into 4 slices.

If Holly ate 4 slices and Hunter ate 3 slices, who ate more?



Name: \_\_\_\_\_

Get a fidget spinner! Spin it.

I needed to spin \_\_\_\_\_ time(s) to finish.

30, 35, 40, 45, 50, 55,  
\_\_\_\_\_, 65

$$\begin{array}{r} 48 \\ - 1 \\ \hline \end{array}$$

$$\begin{array}{r} 6 \\ + 1 \\ \hline \end{array}$$

Write these numbers in  
order from smallest to  
largest.

80, 17, 106, 50, 14

\_\_\_\_, \_\_\_\_\_, \_\_\_\_\_, \_\_\_\_\_,  
\_\_\_\_\_

E, I, F, J, \_\_\_\_\_, K, H,  
L, I, M

4, 9, 9, 4, 9, 9, 4,  
\_\_\_\_\_, 9, 4, 9, 9

It is 8:44 when Anne leaves  
her house. She arrives at  
school at 9:07. How much  
time has passed?

double 900

Make your own  
equation.

\_\_\_\_ + 9 = \_\_\_\_

Make your own  
equation.

\_\_\_\_ - 3 = \_\_\_\_

Write this number:  
6 hundreds, 4 tens

In ten hours it will be  
midnight. What time is it  
now?



Name: \_\_\_\_\_

Spin again.

I needed to spin \_\_\_\_\_ time(s) to finish.

April started school with 10 pencils in her desk. She counted her pencils. She only has 5. How many pencils has she used?

$$18 = \underline{\quad} + 10$$

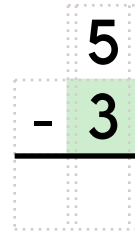
$$12 = \underline{\quad} + 10$$

$$14 = \underline{\quad} + 10$$

Estimate. Write an EVEN number. About how many pencils can you put into an empty backpack?

Draw 4 small squares. Then color in some to show  $\frac{1}{2}$ .

twenty-one minus eight equals



double 40

How many hours are there from 6 a.m. to 10 p.m.?

$$8 - 1 + 5 - 5 - 5$$

Circle the odd numbers.

49 67 61 43

88 55 64 52 80

36 58 71 75

27, 36, \_\_\_\_\_, 54, 63,  
72, 81, 90, 99

Round 73 to the nearest 10.

Name: \_\_\_\_\_

<p>Mrs. King used an equal number of apples in each of 5 pies. She used 30 apples in all. How many apples did she use in each pie?</p>	<p>Nathan is making hot chocolate for his friends. He has mugs that hold 1 pint each. He is making 3 gallons of hot chocolate. How many mugs can he fill?</p>	<p>Rosa had \$3. She bought a sheet of poster paper. She drew pictures of the moon on it. The poster paper cost \$0.52 for one sheet. How much did Rosa have left after she paid for the paper?</p>
--	---	---

<p>You ask Emma for the time. She says in twelve minutes it will be five. Write the time on your digital clock:</p> <div style="border: 1px solid black; border-radius: 10px; width: 100px; height: 30px; margin: 10px auto; display: flex; align-items: center; justify-content: center;"> <span>:</span> </div>	<div style="display: flex; justify-content: space-around; align-items: flex-end;"> <div style="text-align: center;"> <math display="block">\begin{array}{r} 64 \\ - 12 \\ \hline \end{array}</math> </div> <div style="text-align: center;"> <math display="block">\begin{array}{r} 92 \\ - 49 \\ \hline \end{array}</math> </div> <div style="text-align: center;"> <math display="block">\begin{array}{r} 42 \\ - 36 \\ \hline \end{array}</math> </div> </div>
---	---



<div style="display: flex; justify-content: space-around; align-items: center;"> <div style="text-align: center;"> <math display="block">3 \overline{)21}</math> </div> <div style="text-align: center;"> <math display="block">7 \overline{)21}</math> </div> </div>	<p>Write the correct symbol.</p> <p style="text-align: center;">&lt;   =   &gt;</p> <p style="text-align: center;">9,271   <span style="font-size: 2em; vertical-align: middle;">○</span>   1,279</p>	<p><input type="radio"/> heehr</p> <p><input type="radio"/> hare</p> <p><input type="radio"/> hari</p> <p><input type="radio"/> hre</p>
---	---	---

<p>Fill in the blanks with these numbers: <b>1, 6, 8</b></p> <div style="display: flex; justify-content: space-around; align-items: center;"> <div style="text-align: center;"> <div style="border: 1px solid black; width: 40px; height: 30px; margin: 0 auto;"></div> <div style="display: flex; justify-content: space-between; width: 100px;"> <span>0</span><span>3</span></div> </div> <div style="text-align: center;"> <div style="border: 1px solid black; width: 40px; height: 30px; margin: 0 auto;"></div> <div style="display: flex; justify-content: space-between; width: 100px;"> <span>5</span><span></span></div> </div> </div> <hr style="width: 100%;"/> <div style="display: flex; justify-content: space-around; align-items: center;"> <span>7</span><span>8</span><span>8</span> </div>	<p>Fill in the blanks with these numbers: <b>8, 0, 9</b></p> <div style="display: flex; justify-content: space-around; align-items: center;"> <div style="text-align: center;"> <div style="border: 1px solid black; width: 40px; height: 30px; margin: 0 auto;"></div> <div style="display: flex; justify-content: space-between; width: 100px;"> <span></span><span>1</span></div> </div> <div style="text-align: center;"> <div style="border: 1px solid black; width: 40px; height: 30px; margin: 0 auto;"></div> <div style="display: flex; justify-content: space-between; width: 100px;"> <span>5</span><span>7</span></div> </div> </div> <hr style="width: 100%;"/> <div style="display: flex; justify-content: space-around; align-items: center;"> <div style="border: 1px solid black; width: 40px; height: 30px; margin: 0 auto;"></div> <span>5</span><span>8</span> </div>	<div style="display: flex; justify-content: space-around; align-items: center;"> <div style="text-align: center;"> <math display="block">\begin{array}{r} 9 \\ \times 4 \\ \hline \end{array}</math> </div> <div style="text-align: center;"> <math display="block">\begin{array}{r} 23 \\ + 26 \\ \hline \end{array}</math> </div> </div>
---	---	--

Name: \_\_\_\_\_

Sudoku Sums of 6

Each row, column, and box must have the numbers 1 through 4.  
Hint: Look for sudoku sums. The sum of the two boxes inside of the dashed lines is 6.

Here is an example of a sudoku sum of 6:

2	4
---	---

4	1		
		3	
	2	1	

$$7 \overline{)35}$$

$$\begin{array}{r} 22 \\ - 15 \\ \hline \end{array}$$

Fill in the boxes so each line equals 7.

7		
98	÷	
1	x	
12	-	
	+	1 x
( 5 + ) -		

$$61 + 56 = \underline{\hspace{2cm}}$$

$$7 \overline{)63}$$

$$4 \overline{)20}$$

$$\begin{array}{r} 12 \\ \times 1 \\ \hline \end{array}$$

$$\begin{array}{r} 8 \\ \times 9 \\ \hline \end{array}$$

- ☐ fil
- ☐ fill
- ☐ fohl
- ☐ fih

4 + 2 =	9 - 4 =	8 x 4 =	6 + 1 =
---------	---------	---------	---------



Name: \_\_\_\_\_

Write four words to describe this candy.

1. \_\_\_\_\_

2. \_\_\_\_\_

3. \_\_\_\_\_

4. \_\_\_\_\_

Use one or more of these words also:

chocolate

swirled

sweet

chewy

sugary

Write a sentence to describe the picture.

Use some of the above words.



©edHelper

e u w i f e n m i b n b a t  
z h u u g f o o t n e i c n  
h v e o o e t e n g i g r s  
o a y m i t t z o i g g a t  
z m o p p u z z l e w e s b  
t x u d i f f e g e e r h l  
r l n i t j u m a i l c i e  
i i g h u t e d c c u r b s  
i j p u s h e s t t i r e d

**Word Bank**

crash

mail

pushes

bigger

mitt

foot

young

ten


puzzle

wife

curb

tired

07:06



Circle the adjectives in the sentence.

Evan's new haircut made him look silly, but I still think he's the nicest boy in our class.

Write an odd number with a two in the hundreds place.

\_\_\_\_\_

Name: \_\_\_\_\_

$$\begin{array}{r} 8,067 \\ - 6,865 \\ \hline \end{array}$$

$$\begin{array}{r} 4,682 \\ + 5,175 \\ \hline \end{array}$$

$$\begin{array}{r} 5,751 \\ + 7,285 \\ \hline \end{array}$$

$$\begin{array}{r} 15,689 \\ - 5,956 \\ \hline \end{array}$$

$$\begin{array}{r} 4,344 \\ + 1,070 \\ \hline \end{array}$$

$$\begin{array}{r} 7,070 \\ - 5,264 \\ \hline \end{array}$$

$$\begin{array}{r} 18,428 \\ - 8,647 \\ \hline \end{array}$$

$$\begin{array}{r} 4,905 \\ + 2,944 \\ \hline \end{array}$$

$$\begin{array}{r} 11,863 \\ - 9,739 \\ \hline \end{array}$$

$$\begin{array}{r} 8,762 \\ + 3,611 \\ \hline \end{array}$$

$$\begin{array}{r} 9,610 \\ - 3,684 \\ \hline \end{array}$$

$$\begin{array}{r} 2,324 \\ + 7,998 \\ \hline \end{array}$$

$$\begin{array}{r} 6,652 \\ + 4,954 \\ \hline \end{array}$$

$$\begin{array}{r} 7,935 \\ - 5,419 \\ \hline \end{array}$$

$$\begin{array}{r} 8,948 \\ + 7,945 \\ \hline \end{array}$$

$$\begin{array}{r} 15,364 \\ - 6,041 \\ \hline \end{array}$$

$$\begin{array}{r} 4,198 \\ + 9,425 \\ \hline \end{array}$$

$$\begin{array}{r} 4,891 \\ - 3,440 \\ \hline \end{array}$$

$$\begin{array}{r} 7,825 \\ + 2,799 \\ \hline \end{array}$$

$$\begin{array}{r} 2,792 \\ + 9,353 \\ \hline \end{array}$$

$$\begin{array}{r} 13,205 \\ - 8,763 \\ \hline \end{array}$$

$$\begin{array}{r} 17,537 \\ - 9,549 \\ \hline \end{array}$$

$$\begin{array}{r} 9,559 \\ + 4,475 \\ \hline \end{array}$$

$$\begin{array}{r} 10,988 \\ - 6,681 \\ \hline \end{array}$$

$$\begin{array}{r} 11,966 \\ - 7,454 \\ \hline \end{array}$$

$$\begin{array}{r} 4,593 \\ + 8,578 \\ \hline \end{array}$$

$$\begin{array}{r} 16,068 \\ - 7,593 \\ \hline \end{array}$$

$$\begin{array}{r} 3,510 \\ + 1,596 \\ \hline \end{array}$$

$$\begin{array}{r} 9 \\ + 7 \\ \hline \square \end{array}$$

$$\begin{array}{r} + 6 \\ \hline \square \\ - 3 \\ \hline \square \end{array}$$

$$\begin{array}{r} + 4 \\ \hline \square \\ + 7 \\ \hline \square \end{array}$$

$$\begin{array}{r} + 9 \\ \hline 39 \\ - \square \\ \hline \end{array}$$

$$\begin{array}{r} 37 \\ + 2 \\ \hline \square \\ - 9 \\ \hline \end{array}$$

$$\begin{array}{r} 30 \\ - \square \\ \hline 23 \\ + 9 \\ \hline \square \end{array}$$

Name: \_\_\_\_\_

Find 2 equations hidden in each box. Good luck!

$2 + 3$   
 $8 + 5$   
 $63$   
 $11$   
 $9 \times 6$   
 $21$   
 $40$   
 $7$   
 $4 \times 8$   
 $8 \times 1$   
 $13$   
 $6$   
 $1 \times 2$   
 $1 + 5$

Write 2 equations: \_\_\_\_\_

$9 + 6$   
 $1 \times 8$   
 $3$   
 $2$   
 $9$   
 $9 + 5$   
 $16$   
 $2 - 2$   
 $14$   
 $1 \times 1$   
 $4 \times 5$   
 $40$   
 $8$   
 $7 \times 1$

Write 2 equations: \_\_\_\_\_

$6 \times 4$   
 $9 - 3$   
 $9$   
 $8 - 8$   
 $54$   
 $27$   
 $2$   
 $8 \times 4$   
 $5 - 2$   
 $14$   
 $1 \times 1$   
 $1$   
 $28$   
 $24$

Write 2 equations: \_\_\_\_\_

Name: \_\_\_\_\_

Find 2 equations hidden in each box. Good luck!

$9 - 1$

$5 + 8$

$4 + 6$

$7 \times 6$

$54$

$5 \times 4$

$1 \times 1$

$5$

$10$

$1$

$8 \times 4$

$6 \times 8$

$1 + 5$

Write 2 equations: \_\_\_\_\_

$5$

$25$

$7$

$9$

$36$

$81$

$8 - 4$

$9 \times 4$

$8 - 3$

$9 \times 0$

$6$

$7 \times 7$

$2 \times 1$

$6 + 9$

Write 2 equations: \_\_\_\_\_

$9 \times 8$

$63$

$10$

$9 \times 9$

$72$

$0$

$7 \times 6$

$8 - 8$

$5 \times 4$

$5$

$6$

$32$

$7 \times 8$

$25$

Write 2 equations: \_\_\_\_\_

Name: \_\_\_\_\_

	+	+	=	
	B	B	C	27
+	B	A	B	?
=	24	16	15	

**Equations and Hints:**

Each letter is a whole number.

Fill in the equations using the chart:

$B + A = 16$       $B + B + \underline{\hspace{1cm}} = 27$       $\underline{\hspace{1cm}} + \underline{\hspace{1cm}} = 24$

$\underline{\hspace{1cm}} + \underline{\hspace{1cm}} = 15$

Additional hints:

Each letter is less than 16.      $B = C + 9$      B is the largest.

C is the smallest.

**Show Work:**


**Solve:**

? =


Name: \_\_\_\_\_




Holly



Peter



Amy



Connor

39 • 46 • 47 • 7

### Facts

Holly is seven years old.

Peter is thirty-nine years older than Holly.

Amy is one year older than Peter.

Connor is thirty-two years older than Holly.

How old is Holly? \_\_\_\_\_

How old is Peter? \_\_\_\_\_

How old is Amy? \_\_\_\_\_

How old is Connor? \_\_\_\_\_

$$\begin{array}{r} 617 \\ + 818 \\ \hline \end{array}$$

$$\begin{array}{r} 596 \\ + 354 \\ \hline \end{array}$$

$$\begin{array}{r} 605 \\ - 566 \\ \hline \end{array}$$

$$\begin{array}{r} 389 \\ + 523 \\ \hline \end{array}$$

$$\begin{array}{r} 404 \\ - 105 \\ \hline \end{array}$$

$$3 \times 9 = \underline{\hspace{2cm}}$$

$$4 \times 3 = \underline{\hspace{2cm}}$$





It's NO PREP at edHelper.

More history!



**edHelper.com!**



New online math games!



1 2 3



New ideas!



$\times = \div < >$

More puzzles!





