

Name: \_\_\_\_\_



$288 + 472 =$

$848 + 419 =$

$115 + 394 =$

$940 + 461 =$

$886 + 792 =$

$993 + 349 =$

$787 + 798 =$

$721 + 362 =$



$208 + \underline{\quad} = 234$

$758 + \underline{\quad} = 804$

$\underline{\quad} + 78 = 828$

$\underline{\quad} + 32 = 543$

$\underline{\quad} + 14 = 984$

$\underline{\quad} + 95 = 614$

$943 + \underline{\quad} = 966$

$142 + \underline{\quad} = 238$

$$\begin{array}{r} 798 \\ + 68 \\ \hline \end{array}$$

$$\begin{array}{r} 471 \\ + 34 \\ \hline \end{array}$$

$$\begin{array}{r} 507 \\ + 67 \\ \hline \end{array}$$

$$\begin{array}{r} 630 \\ + 64 \\ \hline \end{array}$$

$$\begin{array}{r} 306 \\ + 85 \\ \hline \end{array}$$

$$\begin{array}{r} 27 \\ + 97 \\ \hline \end{array}$$

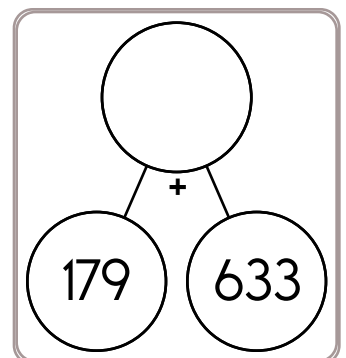
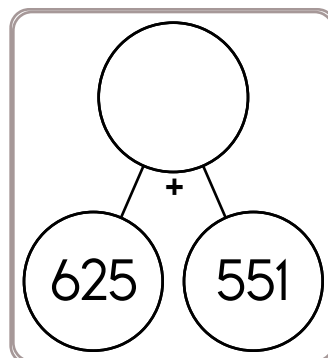

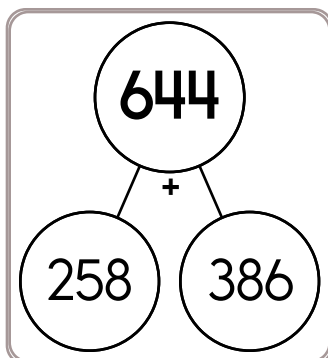
$$\begin{array}{r} 91 \\ + 27 \\ \hline \end{array}$$

$$\begin{array}{r} 80 \\ + 89 \\ \hline \end{array}$$

$$\begin{array}{r} 99 \\ + 87 \\ \hline \end{array}$$

$$\begin{array}{r} 45 \\ + 57 \\ \hline \end{array}$$

$$\begin{array}{r} 65 \\ + 42 \\ \hline \end{array}$$



Name: \_\_\_\_\_

$$\begin{array}{r} 96 \\ + 76 \\ \hline \end{array}$$

$$\begin{array}{r} 49 \\ + 19 \\ \hline \end{array}$$

$$\begin{array}{r} 25 \\ + 55 \\ \hline \end{array}$$

$$\begin{array}{r} 97 \\ + 92 \\ \hline \end{array}$$

$$\begin{array}{r} 68 \\ + 24 \\ \hline \end{array}$$

$$\begin{array}{r} 19 \\ + 55 \\ \hline \end{array}$$

$$\begin{array}{r} 20 \\ + \square\square \\ \hline 81 \end{array}$$

$$\begin{array}{r} 2\square \\ + \square 3 \\ \hline 43 \end{array}$$

$$\begin{array}{r} \square 6 \\ + 42 \\ \hline \square 8 \end{array}$$

$$\begin{array}{r} 4\square \\ + \square 9 \\ \hline 80 \end{array}$$

$$\begin{array}{r} 20 \\ + 5\square \\ \hline 78 \end{array}$$

$$\begin{array}{r} 71 \\ + \square\square \\ \hline 154 \end{array}$$

$$\begin{array}{r} 63 \\ + 99 \\ \hline \end{array}$$

$$\begin{array}{r} 74 \\ + 83 \\ \hline \end{array}$$

$$\begin{array}{r} 48 \\ + 78 \\ \hline \end{array}$$

$$\begin{array}{r} 27 \\ + 87 \\ \hline \end{array}$$

$$\begin{array}{r} 76 \\ + 54 \\ \hline \end{array}$$

$$\begin{array}{r} 45 \\ + 62 \\ \hline \end{array}$$

$$\begin{array}{r} 7\square \\ + 57 \\ \hline \square 31 \end{array}$$

$$\begin{array}{r} 70 \\ + 8\square \\ \hline \square 52 \end{array}$$

$$\begin{array}{r} 4\square \\ + \square 2 \\ \hline 81 \end{array}$$

$$\begin{array}{r} \square 8 \\ + 4\square \\ \hline \square 44 \end{array}$$

$$\begin{array}{r} \square 6 \\ + \square 1 \\ \hline 1\square 7 \end{array}$$

$$\begin{array}{r} \square\square \\ + 56 \\ \hline 107 \end{array}$$

$$\begin{array}{r} 81 \\ + 39 \\ \hline \end{array}$$

$$\begin{array}{r} 90 \\ + 89 \\ \hline \end{array}$$

$$\begin{array}{r} 74 \\ + 90 \\ \hline \end{array}$$

$$\begin{array}{r} 82 \\ + 11 \\ \hline \end{array}$$

$$\begin{array}{r} 56 \\ + 46 \\ \hline \end{array}$$

$$\begin{array}{r} 18 \\ + 50 \\ \hline \end{array}$$

$$\begin{array}{r} 7\square \\ + \square 5 \\ \hline 1\square 8 \end{array}$$

$$\begin{array}{r} 7\square \\ + \square 3 \\ \hline \square 30 \end{array}$$

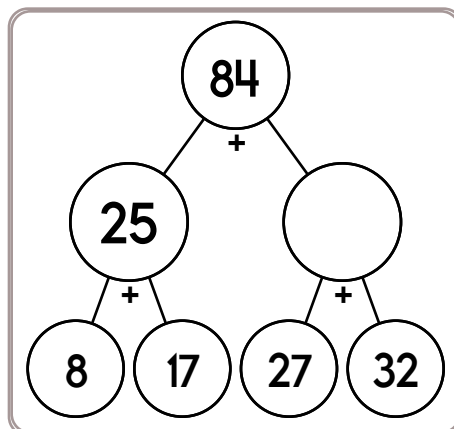
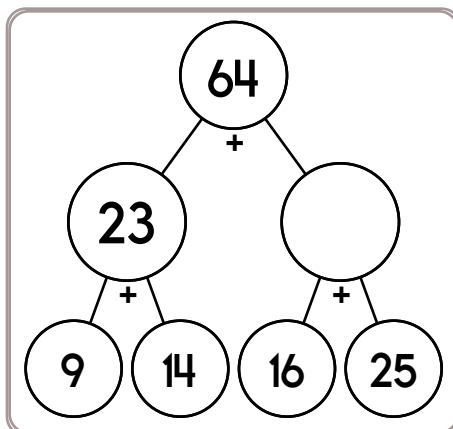
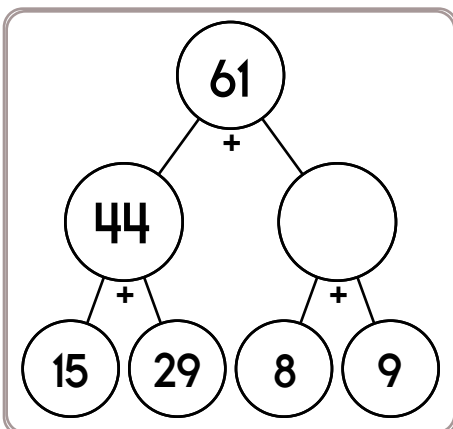
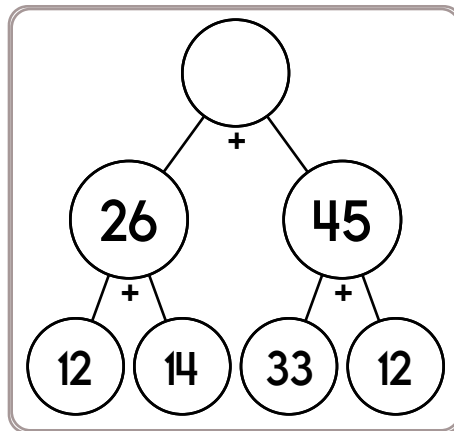
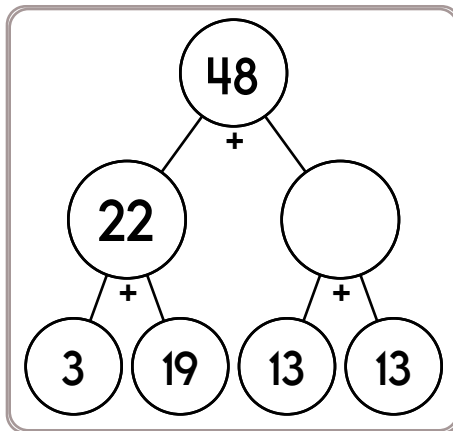
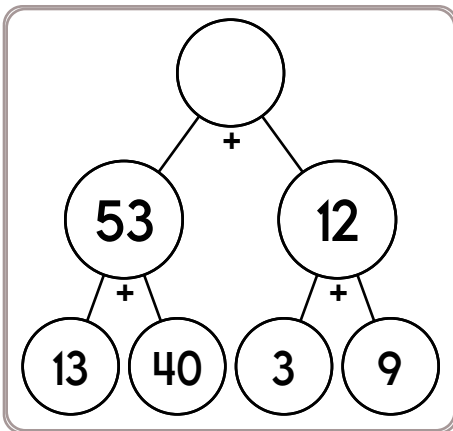
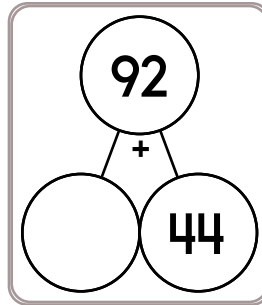
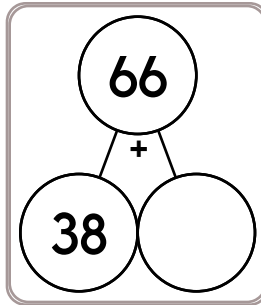
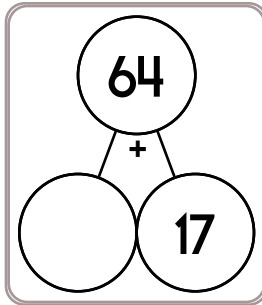
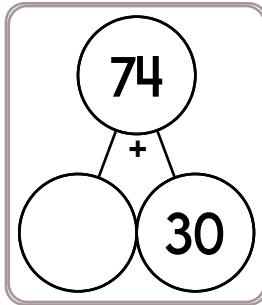

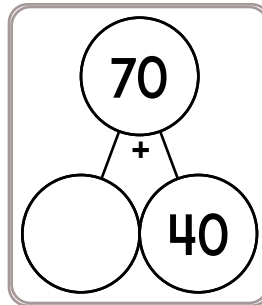
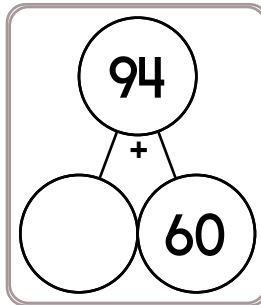

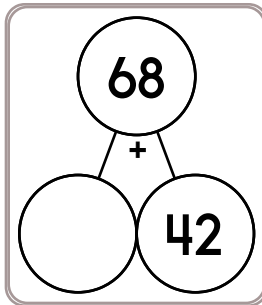

$$\begin{array}{r} \square\square \\ + 35 \\ \hline 90 \end{array}$$

$$\begin{array}{r} 8\square \\ + \square 1 \\ \hline 168 \end{array}$$

$$\begin{array}{r} 34 \\ + 52 \\ \hline \square 6 \end{array}$$

$$\begin{array}{r} \square\square \\ + 96 \\ \hline 173 \end{array}$$

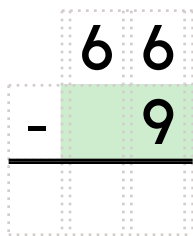
Name: \_\_\_\_\_



Circle the number that is smallest.

5,050    5,500

5,005



6, \_\_\_\_\_, 10, 12, 14, 16

Name: \_\_\_\_\_

Ava made a kite. It was red, white, and blue. She worked on it for four hours on Monday, three hours on Tuesday, and one hour on Wednesday. She was finished! How many hours did she work on the kite?

Emma has twenty-nine pairs of shoes! Four pairs of the shoes are brown. How many pairs of shoes are not brown?

Anna bought 2 books of poetry. The first book cost \$13.68. The other book cost \$16.05. How much more did the second book of poetry cost than the first one?

There are over 2,700 kinds of snakes! The fastest snake on record is the African black mamba. It can crawl seven miles per hour over short distances. If it could travel a long distance at that speed, how far could a black mamba travel in three hours?

Jack lives on a farm. He takes care of a flock of geese. If each goose eats eight ounces of cracked corn each day, how many ounces of corn will he need to feed seven geese for three days?

Connor has saved 5 dimes and 8 nickels to buy a notebook. What fraction of a dollar has he saved?

Name: \_\_\_\_\_

Ms. Martinez made 4 dozen raisin biscuits. She gives 2 to each student in her class. There are no biscuits left over. How many students are in her class?

Kevin picked three quarts of blueberries. Some of the blueberries are ripe and some are not ripe. If he takes one blueberry from the basket without looking, what are the possible outcomes?

Mary is putting together goodie bags for her birthday party. She invited 9 friends, and everyone can come except for Sarah. At the party store, she bought 21 squeezable stress balls. She wants to give everyone (including herself) an equal number of squeezable stress balls. How many should she put into each goodie bag?

Eric is bored, so he decides to start coloring the outside sidewalk. Would you believe every 15 minutes he goes through 8 pieces of chalk. That's a lot of chalk! After 2 hours his arms are so tired he quits. How much chalk did Eric use?

Name: \_\_\_\_\_

Draw a line from START to END.

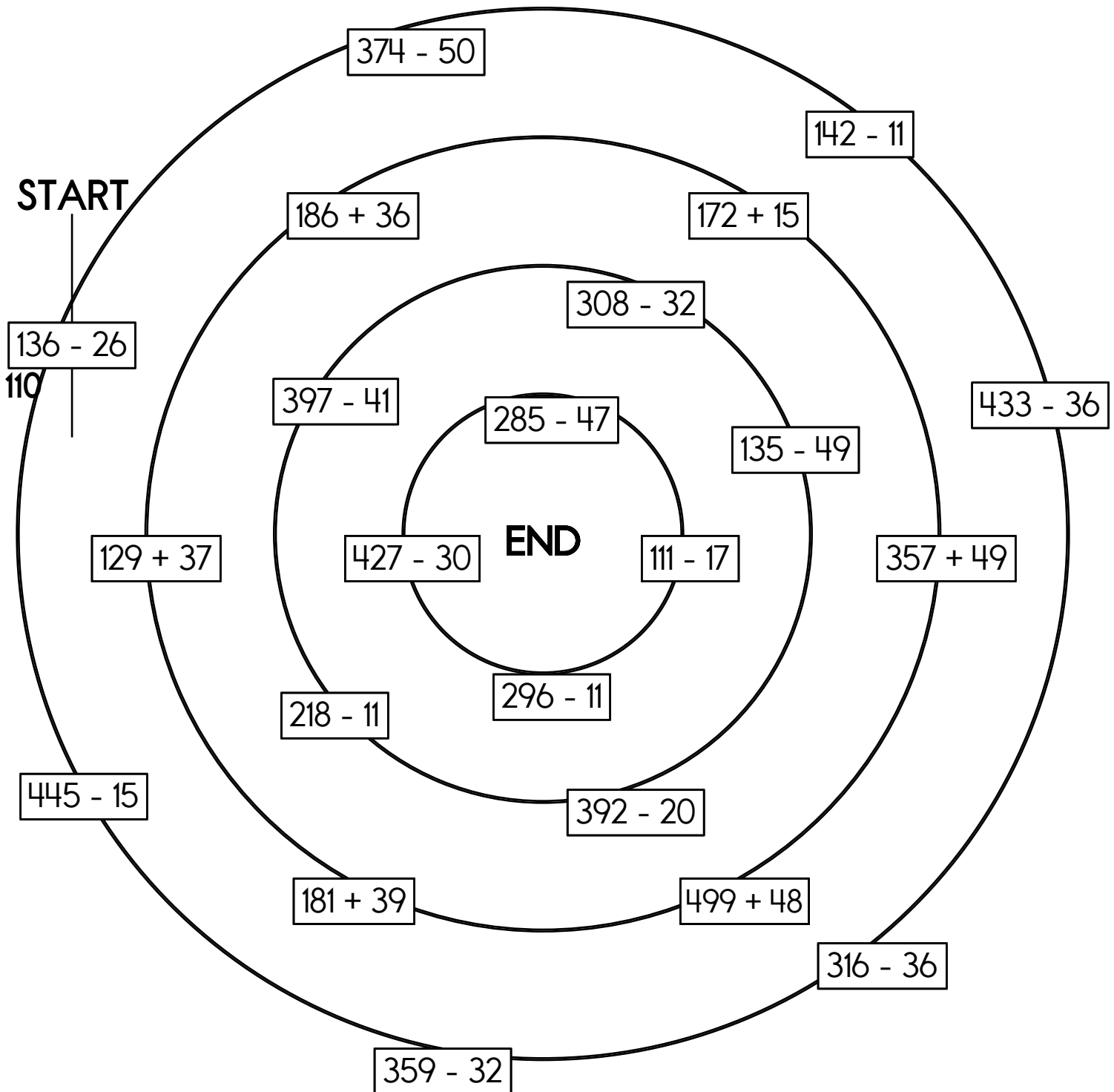
372

~~110~~

220

94

Cross out the number you use above and then write it below.



Name: \_\_\_\_\_

Adam wanted to be a juggler. He practiced for 26 minutes every day. How many hours did he practice in one week (7 days)?

David put 7 pieces of green pepper on each slice of pizza. There are 14 slices of pizza. How many pieces of pepper did he use?

Sara has 3 quarters, 2 dimes, and 4 nickels. She spent 85 cents on a game. How much money does she have left?

Fill in the numbers.

33		35		37
	44	45	46	
		55	56	57
			66	67

		15	
23		25	
43			

87	

Color in  $\frac{2}{3}$ .


You ask Jenna for the time. She says in thirteen minutes it will be four. Write the time on your digital clock:

:
---

$$\begin{array}{r} 56 \\ + 70 \\ \hline \end{array}$$

$$2 \overline{)6}$$

Name: \_\_\_\_\_

Some vowels are missing in the word search.  
Fill in the missing vowels and circle the words.

N B P P   S  N T  
 C N L P D S W T R P  
 T  **W H E N**  F E  
 T D  C H E R M F N  
 T M S W M H E P R E  
 L R  A Y T S   L  
 E W F U O O R    
 W  N D  W N  L   
 P  N P N A R Y S  
 A M  N  C  Y I T

CATTLE • MENACE • WINDOW  
 FREELY • LEAST • WHEN • UPON  
 PLEASE • POISON • TEMPORARY

$$\begin{array}{r} 73 \\ - 42 \\ \hline \end{array}$$

$$\begin{array}{r} 57 \\ + 90 \\ \hline \end{array}$$

- mopped
- mapt
- mappid
- moopt

$$\begin{array}{r} 3 \\ \times 11 \\ \hline \end{array}$$

$$\begin{array}{r} 9 \\ \times 1 \\ \hline \end{array}$$

$$\begin{array}{r} 7 \\ \times 9 \\ \hline \end{array}$$

$$7 \overline{)42}$$

$$7 \overline{)21}$$

$56 + 90 = \underline{\hspace{2cm}}$

Can you think of a five-letter word that has the vowel E in it?

- trece
- traci
- tras
- trace

$$\begin{array}{r} 56 \\ + 39 \\ \hline \end{array}$$

$20 + \boxed{\phantom{00}} = 26$

\_\_\_\_\_

$11 \times 12 = \underline{\hspace{2cm}}$

$10 \times 1 = \underline{\hspace{2cm}}$

$$\begin{array}{r} 33 \\ 24 \\ + 39 \\ \hline \end{array}$$

$7 + \boxed{\phantom{00}} = 27$

$15 + \boxed{\phantom{00}} = 32$

Circle the nouns.  
 Don't ever go to the beach  
 without plenty of sunscreen.

Name: \_\_\_\_\_

Fill in the boxes so each line equals 13.

13	
<input style="width: 40px;" type="text" value="13"/> ÷ <input style="width: 40px;" type="text"/>	
<input style="width: 40px;" type="text"/> × <input style="width: 40px;" type="text" value="1"/>	
<input style="width: 40px;" type="text" value="18"/> - <input style="width: 40px;" type="text"/>	
( <input style="width: 40px;" type="text"/> + <input style="width: 40px;" type="text"/> ) + <input style="width: 40px;" type="text" value="4"/>	
<input style="width: 40px;" type="text"/> + <input style="width: 40px;" type="text"/> × <input style="width: 40px;" type="text" value="6"/>	

Choose the word that is spelled correctly and write it on the line.  
(I'd/I'd) rather not have vegetables with dinner.

\_\_\_\_\_

$$8 \overline{)72}$$

$$4 \overline{)8}$$

Fill in the blanks with these numbers:

9, 6, 3

$$\begin{array}{r} \square \square 1 \\ - 3 1 1 \\ \hline \square 8 0 \end{array}$$

Fill in the blanks with these numbers:

2, 2, 6

$$\begin{array}{r} 4 8 7 \\ - \square 2 \square \\ \hline 2 \square 5 \end{array}$$

$$\begin{array}{r} 63 \\ - 35 \\ \hline \end{array}$$

$$\begin{array}{r} 66 \\ - 51 \\ \hline \end{array}$$

$$\begin{array}{r} 91 \\ + 30 \\ \hline \end{array}$$

Write the final part of the math analogy.

eight fives : 40 :: six sixes :

Explain why you think your answer is correct.

$6 + 9 = \square$

$7 \times 8 = \square$

$10 - 3 = \square$

$12 - 4 = \square$

Name: \_\_\_\_\_

$$\begin{array}{r} 9,447 \\ + 2,025 \\ \hline \end{array}$$

$$\begin{array}{r} 9,000 \\ + 7,750 \\ \hline \end{array}$$

$$\begin{array}{r} 6,401 \\ - 1,945 \\ \hline \end{array}$$

$$\begin{array}{r} 4,352 \\ - 3,302 \\ \hline \end{array}$$

$$\begin{array}{r} 11,283 \\ - 4,635 \\ \hline \end{array}$$

$$\begin{array}{r} 4,782 \\ + 2,539 \\ \hline \end{array}$$

$$\begin{array}{r} 4,813 \\ + 5,100 \\ \hline \end{array}$$

$$\begin{array}{r} 12,469 \\ - 6,669 \\ \hline \end{array}$$

$$\begin{array}{r} 15,300 \\ - 5,940 \\ \hline \end{array}$$

$$\begin{array}{r} 8,513 \\ + 7,971 \\ \hline \end{array}$$

$$\begin{array}{r} 14,292 \\ - 9,932 \\ \hline \end{array}$$

$$\begin{array}{r} 9,462 \\ + 4,372 \\ \hline \end{array}$$

$$\begin{array}{r} 14,650 \\ - 6,415 \\ \hline \end{array}$$

$$\begin{array}{r} 7,377 \\ + 3,427 \\ \hline \end{array}$$

$$\begin{array}{r} 8,777 \\ + 7,094 \\ \hline \end{array}$$

$$\begin{array}{r} 4,565 \\ + 1,794 \\ \hline \end{array}$$

$$\begin{array}{r} 19,183 \\ - 9,935 \\ \hline \end{array}$$

$$\begin{array}{r} 13,000 \\ - 5,627 \\ \hline \end{array}$$

$$\begin{array}{r} 14,908 \\ - 9,647 \\ \hline \end{array}$$

$$\begin{array}{r} 11,162 \\ - 4,536 \\ \hline \end{array}$$

$$\begin{array}{r} 9,018 \\ + 4,688 \\ \hline \end{array}$$

$$\begin{array}{r} 1,301 \\ + 9,971 \\ \hline \end{array}$$

$$\begin{array}{r} 11,564 \\ - 9,883 \\ \hline \end{array}$$

$$\begin{array}{r} 7,352 \\ + 5,159 \\ \hline \end{array}$$

$$\begin{array}{r} 8,285 \\ + 5,846 \\ \hline \end{array}$$

$$\begin{array}{r} 7,188 \\ - 2,641 \\ \hline \end{array}$$

$$\begin{array}{r} 8,753 \\ + 5,545 \\ \hline \end{array}$$

$$\begin{array}{r} 5,570 \\ + 9,165 \\ \hline \end{array}$$

$$\begin{array}{r} 9 \\ + 4 \\ \hline \square \end{array}$$

$$\begin{array}{r} + 4 \\ \hline \square \\ + 3 \\ \hline \square \end{array}$$

$$\begin{array}{r} + 4 \\ \hline \square \\ - 8 \\ \hline \square \end{array}$$

$$\begin{array}{r} 16 \\ + \square \\ \hline \square \end{array}$$

$$\begin{array}{r} 23 \\ - 9 \\ \hline \square \end{array}$$

$$\begin{array}{r} + 9 \\ \hline \square \\ + 23 \\ \hline \square \end{array}$$

$$\begin{array}{r} 27 \\ + \square \\ \hline \square \end{array}$$


$$\begin{array}{r} 34 \\ + \square \\ \hline \square \end{array}$$

$$43$$

Name: \_\_\_\_\_


Find and draw all the rectangular arrays for the equations below that equal 20.

2 x 10 = 20    \_\_\_\_\_ x \_\_\_\_\_ = 20    \_\_\_\_\_ x \_\_\_\_\_ = 20    \_\_\_\_\_ x \_\_\_\_\_ = 20



Find and draw all the rectangular arrays for the equations below that equal 35.

\_\_\_\_\_ x \_\_\_\_\_ = 35    \_\_\_\_\_ x \_\_\_\_\_ = 35



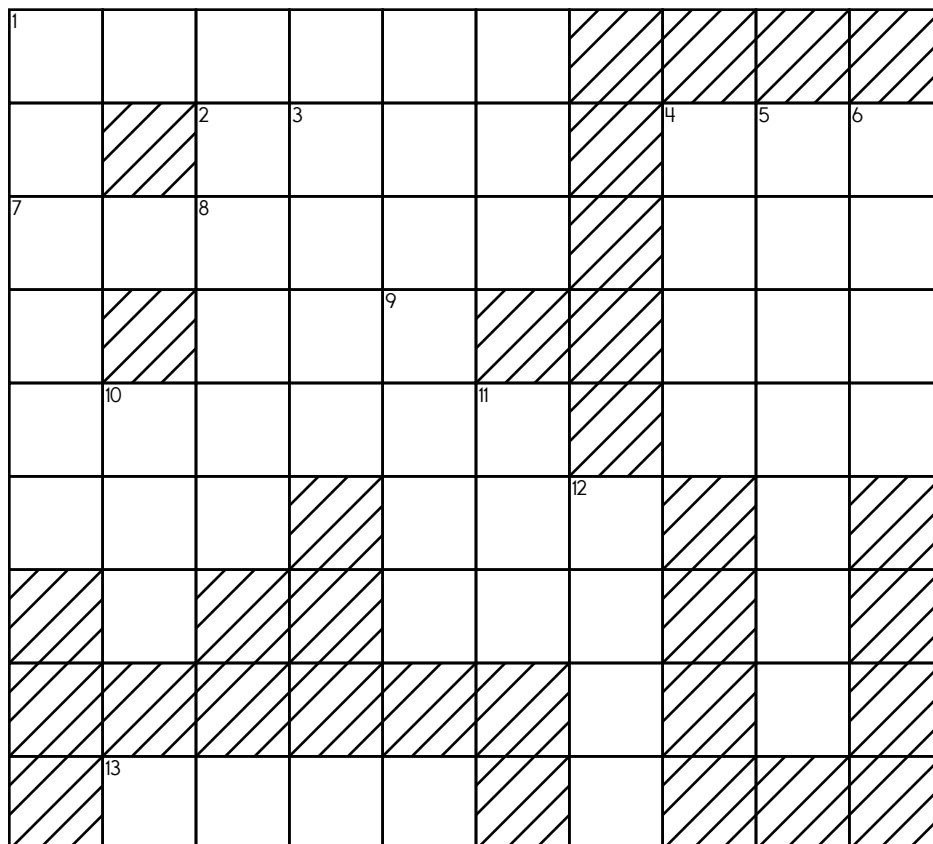
Name: \_\_\_\_\_

**ACROSS**

**DOWN**

1. the ones in 12-Down + the tens in 4-Down + the hundreds in 9-Down + the hundred thousands in 1-Down
2. the hundreds in 8-Down + the ones in 10-Down + the tens in 7-Across + the thousands in 12-Down
7. the hundred thousands in 1-Across + the thousands in 13-Across + the tens in 9-Down + the hundreds in 3-Down
13. the tens in 1-Down + the thousands in 6-Down + the hundreds in 3-Down + the ones in 9-Down

1. **nine hundred nineteen thousand, eight hundred eighty-six**
3. the tens in 9-Down + the thousands in 1-Down + the hundreds in 6-Down
4. the hundreds in 13-Across + the tens in 12-Down + the thousands in 3-Down
5. **three million, two hundred sixteen thousand, nine hundred seventy-six**
6. **seven thousand, four hundred seventy-five**
8. the hundreds in 9-Down + the thousands in 6-Down + the tens in 4-Down
9. **two thousand, nine hundred seventy-six**
10. the tens in 4-Down + the hundreds in 9-Down + the ones in 6-Down
11. the hundreds in 13-Across + the ones in 9-Down + the tens in 12-Down
12. the thousands in 3-Down + the ones in 13-Across + the tens in 6-Down



Name: \_\_\_\_\_

Cross off the number that does NOT belong.

16, 32, 48, 64, 80, 83, 96, 112, 128, 144

Why does \_\_\_\_\_ not belong in the pattern?

Cross off the number that does NOT belong.

30, 35, 39, 40, 45, 50, 55, 60, 65

Why does \_\_\_\_\_ not belong in the pattern?


Name: \_\_\_\_\_

**ACROSS**

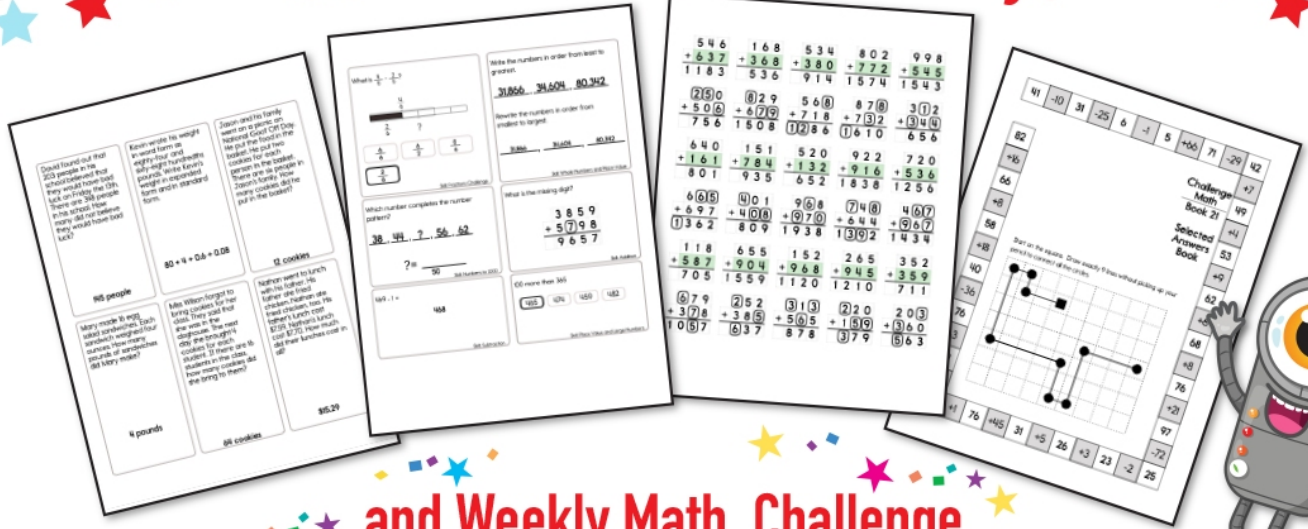
**DOWN**

1. the hundred thousands in 3-Down + the hundreds in 8-Across + the ones in 8-Down
4. the tens in 8-Across + the ones in 8-Down + the hundred thousands in 1-Across + the hundreds in 3-Down
7. the ones in 4-Across + the tens in 2-Down + the thousands in 3-Down
8. the thousands in 8-Down + the hundreds in 3-Down + the tens in 2-Down
9. the ones in 6-Down + the hundreds in 4-Across + the thousands in 3-Down + the tens in 5-Down
10. **seven million, two hundred sixty-six thousand, six hundred forty-three**
11. the ones in 7-Across + the hundreds in 5-Down + the tens in 9-Across
12. **nine million, one hundred seventy-eight thousand, nine hundred thirty-one**


2. **one thousand, five hundred thirty-four**
3. **five hundred sixty-two thousand, six hundred forty**
5. the hundreds in 6-Down + the tens in 8-Across + the ones in 1-Across
6. the hundreds in 1-Across + the ones in 8-Down + the tens in 7-Across
8. **eight thousand, one hundred thirty-six**




# Subscribe to Get Answer Keys





and Weekly Math, Challenge  
 Workbooks, Posters, Daily Reading,  
 and so much more!



**SUBSCRIBE TO RECEIVE EVEN MORE**  
 Answer Keys • Effective Activities • Access  
 to as many printables as you need!



**edHelper.com**



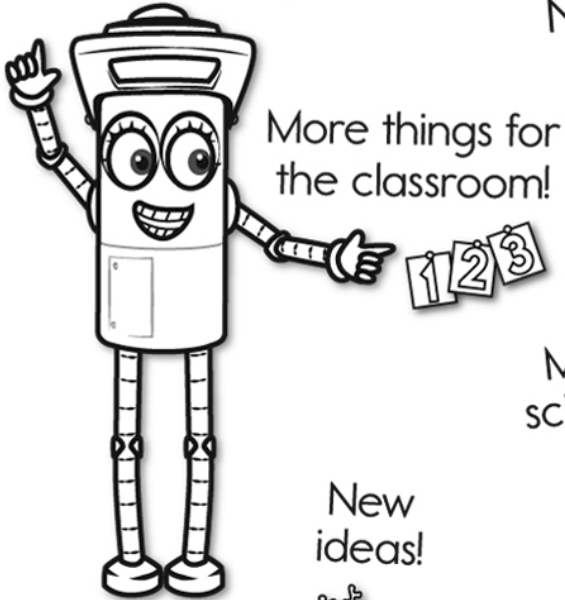
It's NO PREP at edHelper.

More history!

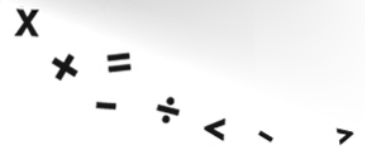



# edHelper.com!


New online math games!



New ideas!



More puzzles!



# Take The Boring Out Of Homework!

Easy to  
print!

edHelper

## Weekly K-6 "Take It Home" Books

Kids want choices  
for homework.  
"Take It Home" books  
have fun graphics and  
challenging puzzles and  
problems for older kids.

"Dr. Programmer"  
challenges kids..

Homework  
will never be  
the same!

edHelper.com

