

Name: _____

Amanda likes to write. She writes poems in a notebook. She has written 13 poems in the book. If she writes 11 more poems, how many poems will be in her book?

Emily made some cookies. She made a wild guess about the time to bake them. She left them in the oven for 45 minutes. They all burned. The recipe said they should bake for 15 minutes. How many minutes too long were they in the oven?

Ava put daffodils and daisies in a vase. She put nine more daffodils than daisies in the vase. There are twenty-seven flowers in all. How many daisies are in the vase?

D, F, H, J, L, N, P,
_____, T

8, 5, _____, 5, 8, 5, 8,
5, 8, 5

$$\begin{array}{r} 168 \\ + \quad 98 \\ \hline \end{array}$$

Jessica cut eight slices of bologna into small pieces to use on crackers. She cut each slice into four small pieces. How many small pieces of bologna did she have?

There are 17 children in Mr. Clark's class. Eight of them wear glasses. What fraction of the children wear glasses?

Emily was in the doghouse. She forgot to water her mother's flowers. Now they are all dead. Emily bought 5 plants for her mother. The plants cost \$5.91. Emily gave the clerk \$10. How much change did she get?

$5 + \square = 7$

$32 + \square = 39$

$20 + \square = 30$

$26 + \square = 35$

Name: _____

Jack likes to tell jokes. He writes his jokes in his notebook. On Monday he wrote 4 jokes. On Tuesday he wrote 8 jokes. On Wednesday he wrote 5 jokes. On Thursday he wrote 6 jokes. On Friday he wrote 11 jokes. How many jokes did he write on those five days?

Jacob and his friends decided to go to the pool on Friendship Day. The pool might be warm from the sun, but it would be cooler than the air! On Friendship Day, the air temperature was 105.5 degrees. The water temperature was 88.7 degrees. How much warmer was the air than the water?

5 more than 865

How many hours are there from 9 a.m. to 6 p.m.?

double 50

The Central City Zoo opened a butterfly garden. There are 2,623 butterflies flitting from plant to plant in the garden. Round off the number of butterflies to the nearest hundred.

In the Pet Parade store, there are 4 different kinds of cat food. There are 9 bags of each kind of cat food on the shelves. How many bags of cat food are there in all?

Max put 6 pieces of green pepper on each slice of pizza. There are 15 slices of pizza. How many pieces of pepper did he use?

Write this number:
9 ones, 7 thousands, 8 tens

$$\begin{array}{r} 266 \\ - 90 \\ \hline \end{array}$$

$$5 + 4 + 6 - 5$$

Name: _____

Jason and his parents went to Yellowstone National Park. They drove from their house in Maine. On Monday they drove 280 miles. On Tuesday they drove 328 miles. How many miles did they drive on Monday and Tuesday?

Eric's dog caught sixteen rats. Alex's dog caught nine rats. How many rats did the dogs catch in all?

Megan collects cards with jokes on them. She had 49 cards. She gave 10 cards to April and 19 cards to Robert. How many cards does she have left?

2 less than 862

If you know
 $75 + 26 = 101$
 Then what is $75 + 24$?

46, 52, 58, 64,
 _____, 76, 82, 88

Max bought a big box of bubble gum. In the box there were 6 rows of gum. There were 8 pieces of gum in each row. How many pieces of bubble gum were in the box?

The Lambert family is having a picnic. They want to barbeque chicken. There are 24 pieces of chicken. There are 6 people in the family. If the chicken is divided equally, how many pieces will each person get?

Emma brought 8 cupcakes to the Pandemonium Day party. Alex brought 10 cupcakes and some drinks. Amy brought 6 cupcakes and 13 cookies. There were 12 people at the party. If they shared the cupcakes equally, how many did each person get?

$2 + 5 = \square$

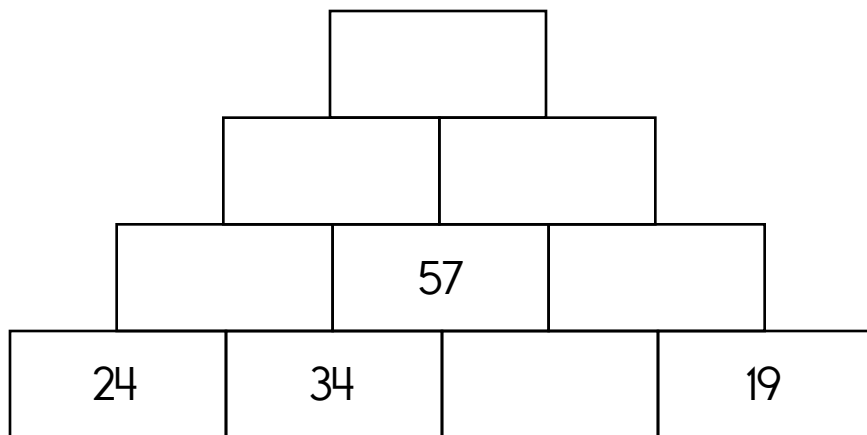
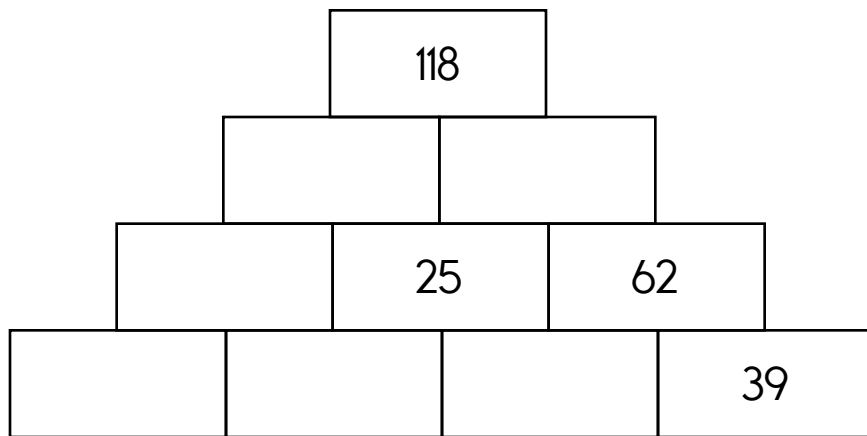
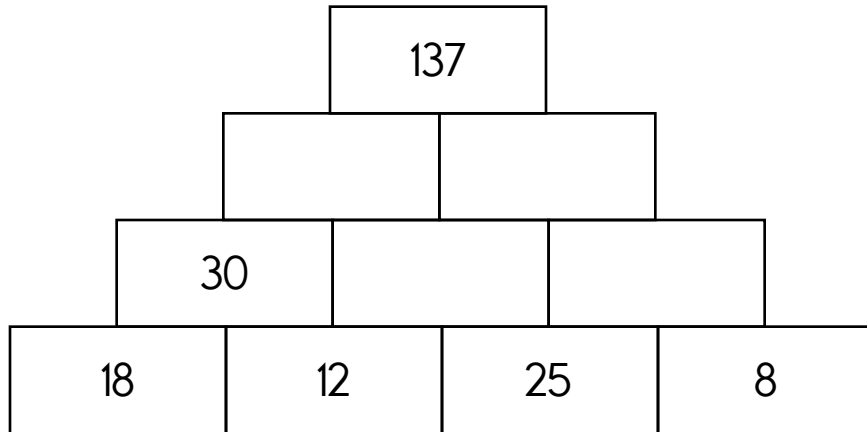
$10 - 6 = \square$

$12 - 9 = \square$

$9 + 7 = \square$

Name: _____

The block above is the sum of the two blocks below. Fill in the missing blocks.



double 900

 $7 - 1 + 1 + 5 - 1$

What number multiplied by five is forty-five?

Name: _____

	+	+	=	
	C	A	C	?
+	C	C	B	13
=	12	9	7	

Equations and Hints:

Each letter is a whole number.

Fill in the equations using the chart:

$$A + C = 9 \quad _ + C = 12 \quad _ + _ = 7$$

$$_ + _ + _ = 13$$

Additional hints:

C is the largest. $C = A + 3$ **B is the smallest.**

Each letter is less than 10.

Show Work:**Solve:**

$$? = _$$





MathWorksheets.com

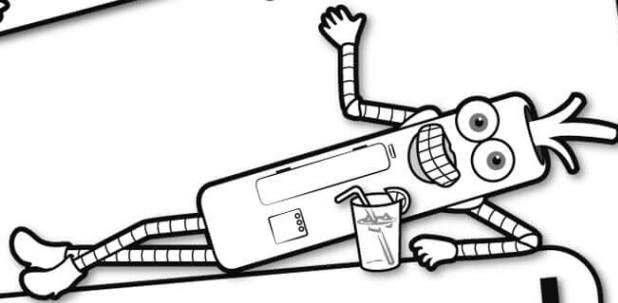


Free Weekly Math Worksheet Workbooks

Every Week!




It's NO PREP at edHelper.




edHelper.com!

More history!




only \$19.99 per year



Things for the classroom!

1 2 3


More science!



New ideas!



More puzzles!



Take The Boring Out Of Homework!

Easy to
print!

edHelper

Weekly K-6 "Take It Home" Books

Kids want choices
for homework.
"Take It Home" books
have fun graphics and
challenging puzzles and
problems for older kids.

"Dr. Programmer"
challenges kids..

Homework
will never be
the same!

edHelper.com

