

Name: _____

Kevin had fifty-six rocks in his collection. He gave Nathan sixteen rocks. He gave Adam eight rocks. How many rocks does Kevin have left?

Sarah and her father picked two baskets of pecans from their trees. They picked 607 pecans in all. Sarah picked 290 pecans. How many did her father pick?

Emma made some cookies. She made a wild guess about the time to bake them. She left them in the oven for 45 minutes. They all burned. The recipe said they should bake for 17 minutes. How many minutes too long were they in the oven?

How many hours are there from 8 a.m. to 10 p.m.?

Write this number:
9 tens, 2 hundreds

6 less than 846

Rose put daffodils and daisies in a vase. She put five more daffodils than daisies in the vase. There are twenty-three flowers in all. How many daisies are in the vase?

Justin likes bad poems! He copies bad poems and puts them in a box to read again and again. The box is 2 ft long and 1.5 ft wide. What is the perimeter of the box?

Jack dyed 2 dozen eggs. He put stickers on 12 of them. How many eggs did not have stickers?

$$8 - 2 - 1 + 1 + 6$$

10, _____, 14, 16, 18, 20,
22

What number multiplied by six is fifty-four?

Name: _____

I do not like green eggs and ham. I like blue eggs and bacon. I have ten blue hens that lay blue eggs. Monday my hens laid nine blue eggs. Tuesday they laid seven blue eggs. Wednesday they laid seven blue eggs. Thursday they laid only four blue eggs. Friday they laid eight blue eggs. How many blue eggs did they lay in all from Monday to Friday?

In 1997 the fourth graders at Mountain Springs Elementary School planted 15 maple trees around their school. When their leaves changed to crimson this fall, a new group of fourth graders planted some elm trees. How many years was it from the time the maple trees were planted to the time the elm trees were planted?

$$4 + 3 - 3 - 1$$

3 less than 853

$$\begin{array}{r} 167 \\ + 13 \\ \hline \end{array}$$

The food service workers made 590 cupcakes last week. Round this number to the nearest hundred.

There are five students in the lunch line. Wendy is 51 inches tall. Rosa is 46 inches tall. Eric is 45 inches tall. Kevin is 48 inches tall. Anne is 47 inches tall. What is the difference in height between the tallest and shortest student?

Sarah used 40 ft of border to make a bulletin board about Paul Revere. The bulletin board is 10 ft long. What is the area of the board? (hint: the border is the perimeter)

Write a word to describe March.

$$92 + 5 = \underline{\hspace{2cm}}$$

$$19 + \square = 33$$

$$17 + \square = 21$$

Name: _____

Squeaky Squirrel played all summer. He didn't gather nuts for the winter. When his grandfather, old Samuel Squirrel told him to quit playing, Squeaky said, "I have plenty of time. I'll gather nuts later." Then one day it snowed. There was no more time to gather nuts. Squeaky had only 162 nuts to last all winter! His grandfather had 420 nuts in his storehouse. How many more nuts did Samuel have than Squeaky?

Jacob bought a bag of peanuts for the elephants. He gave the first elephant 19 nuts. He gave the second elephant 5 more nuts than he gave to the first elephant. He gave the baby elephant 10 nuts. He has 13 nuts left. How many peanuts did he start with?

Write this number:
8 hundreds, 7 tens, 5
thousands, 4 ones

$$\begin{array}{r} 46 \\ + \quad 8 \\ \hline \end{array}$$

13, _____, 39, 52, 65,
78, 91, 104, 117

The Central City Zoo opened a butterfly garden. There are 1,960 butterflies flitting from plant to plant in the garden. Round off the number of butterflies to the nearest hundred.

Max made a scale drawing of the rock garden before he made the real one. On his drawing 0.5 in = 1 ft. The drawing has two sides that measure 14 inches and two sides that measure 9.5 inches. What is the perimeter of Max's garden?

Mrs. Anderson needs 13 bees to start a colony. She wants to make 2 colonies. How many bees does she need in all?

Name: _____

Fill in the blanks by adding the two numbers below each hexagon.

How many days are there in three full weeks?

$68 - 9 = \underline{\hspace{2cm}}$



Name: _____

Eric built a house for his dog. He thinks his dog is the best dog in the world! He painted the house bright red. The paint cost \$2.45. Eric had \$3.74. How much did he have left after he bought the paint?

Robert is two years older than his best friend. His best friend is twice as old as Robert's brother. Robert's brother is eight. How old is Robert?

Mrs. Hall gave each of her 25 students a small bag. She told them to go outside and fill the bags with trash. After everyone finished, they had juice and cookies. Each student ate 2 cookies. How many cookies were eaten in all?

The cook could make 45 hamburgers every hour. How many could he make in 8 hours?

double 400

Write this number:
3 hundreds, 4 tens, 9
thousands

$$\begin{array}{r} 137 \\ - 98 \\ \hline \end{array}$$

Write a word that means the same as *friendly*.





MathWorksheets.com

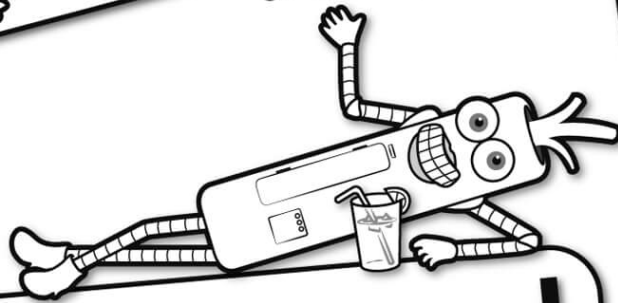


Free Weekly Math Worksheet Workbooks

Every Week!




It's NO PREP at edHelper.



edHelper.com!


More history!




Things for the classroom!



only \$19.99 per year




More science!



New ideas!



More puzzles!



Take The Boring Out Of Homework!

Easy to
print!

edHelper

Weekly K-6 "Take It Home" Books

Kids want choices
for homework.
"Take It Home" books
have fun graphics and
challenging puzzles and
problems for older kids.

"Dr. Programmer"
challenges kids..

Homework
will never be
the same!

edHelper.com

