

Name: _____

So many Truffula trees had been cut down, there were only 23 left. Although the Lorax tried to protect them, it seemed no one listened. The workers from the Thneed factory came and cut down 9 more trees. How many trees were left?

Mr. Thompson is a famous artist. He sold a drawing of a cat for \$902. He sold a drawing of a horse for \$760. How much more did the drawing of the cat cost?

Eric had 116 postcards. Jason gave him some more postcards. Now Eric has 158 postcards. How many postcards did Jason give Eric?

6 less than 756

45, 60, 75, _____, 105,
120, 135, 150, 165, 180

46, 56, 66, 76,
_____, 96

Anna bought a doghouse for her dog. The sides of the doghouse are 6 inches longer than her dog. Her dog is 9 inches long (not counting his tail). How long are the sides of the doghouse?

Anna planted some trees on Arbor Day. The elm tree was 1 yard tall. The cherry tree was 21 inches tall. How much taller was the elm tree than the cherry tree?

Adam went to a movie. The movie was about rockets. The ticket cost \$9.75. Adam had some popcorn that cost \$2.18 and a drink that cost \$1.26. How much did Adam spend in all?

$$47 + 9 = \underline{\hspace{2cm}}$$

$$75 + 7 = \underline{\hspace{2cm}}$$



Name: _____

I do not like green eggs and ham. I like blue eggs and bacon. I have ten blue hens that lay blue eggs. Monday my hens laid eight blue eggs. Tuesday they laid seven blue eggs. Wednesday they laid nine blue eggs. Thursday they laid only two blue eggs. Friday they laid ten blue eggs. How many blue eggs did they lay in all from Monday to Friday?

There are 13 pages about D-Day in Mary's book. There are some pages about D-Day in Jack's book, too. There are 27 pages about D-Day in all in the two books. Write an equation and solve it to find out how many pages about D-Day are in Jack's book.

$$\begin{array}{r} 58 \\ + \quad 6 \\ \hline \end{array}$$

If you know
 $90 + 23 = 113$
 Then what is $90 + 21$?

How many hours are there from 6 a.m. to 11 p.m.?

Señora Martín wrote the digits 3, 7, 3, and 8 on the board. What is the smallest number you can write with these digits?

Meltrosa did not like her name. She wanted a different name. She wrote down all the names she knew. She put them in six groups. There were eight names in each group. How many names were there in all?

Rosa made 4 pounds of pretzels. She put them in bags. Each bag weighed 8 ounces. How many bags of pretzels could she make?

$$\begin{array}{r} 67 \\ - \quad 5 \\ \hline \end{array}$$

3 less than 373

I, G, J, H, K, _____, L,
 J, M, K

Name: _____

Valley Elementary School is having a Fall Festival. Each second grade student will bring some homemade cookies for the second grade booth. Sara brought twenty-five cookies. Hannah brought nineteen cookies. Amanda brought twenty-three cookies. How many cookies did the three girls bring in all?

There are 67 students in third grade. There are 18 students in Miss Bell's class. There are 22 students in Mr. Edison's class. The rest of the students are in Ms. Lovell's class. How many more students are there in Ms. Lovell's class than Miss Bell's class?

double 60

$$\begin{array}{r} 268 \\ - 31 \\ \hline \end{array}$$

 $5 - 2 + 1 - 1$


A can of Play-Doh costs 5 nickels. How many pennies have the same value as 5 nickels?

There are over 2,700 kinds of snakes! The fastest snake on record is the African black mamba. It can crawl seven miles per hour over short distances. If it could travel a long distance at that speed, how far could a black mamba travel in two hours?


Mr. Allen put 24 pairs of Levis on each rack. How many pairs of jeans did he put on six racks?

Rewrite the adjective as an adverb.
helpless


Name: _____




April



Ava



Max



Hunter

31	•	64	•	36	•	6
----	---	----	---	----	---	---

Facts

April is six years old.

Ava is thirty years older than April.

Max is twenty-five years older than April.

Hunter is fifty-eight years older than April.

How old is April? _____

How old is Ava? _____

How old is Max? _____

How old is Hunter? _____

	7	8	7	1
-		1	2	6
<hr/>				

	7	6	6	5
+		9	2	0
<hr/>				

	1	7	8	7
+		6	5	8
<hr/>				

	8	9	9	1
-		2	4	1
<hr/>				

$7 \times 2 = \underline{\quad\quad}$

$7 \times 4 = \underline{\quad\quad}$

$19 + \square = 33$

$9 + \square = 24$

Name: _____

63	64

24	25	
34	35	

38	39

16	17	
26	27	

72	73	
	83	84
	93	94

9	10
29	30

35	36
	46
55	

17	18	
27	28	29
37		

51	52	
61	62	

24	25

5	6

47	48	49
		59

12	13
	23
32	

3	4	5
	14	15
		25

7	8
17	
27	

65	66	67
75	76	
		87

58	59

65	66	67
		77

56	57

6	7	8
16		





MathWorksheets.com

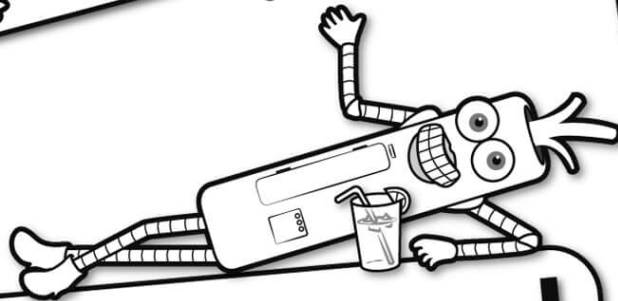


Free Weekly Math Worksheet Workbooks

Every Week!




It's NO PREP at edHelper.




edHelper.com!

More history!




Things for the classroom!



only \$19.99 per year


More science!



New ideas!



More puzzles!



Take The Boring Out Of Homework!

Easy to
print!

edHelper

Weekly K-6 "Take It Home" Books

Kids want choices
for homework.
"Take It Home" books
have fun graphics and
challenging puzzles and
problems for older kids.

"Dr. Programmer"
challenges kids..

Homework
will never be
the same!

edHelper.com

