

Name: _____

The workers in the Morningside Elementary School cafeteria told the students that it takes three hundred ninety-eight pounds of ground beef to make hamburgers for all the students, but only one hundred pounds of ground beef to make spaghetti for the same number of students. How many more pounds of ground beef does it take to make hamburgers than it takes to make spaghetti?

Jack loved puzzles. He had seventeen puzzles of his own. He got two new puzzles for his birthday. One puzzle was a picture of a dog. It had sixty-three pieces. The other puzzle was a picture of a bright red car. It has one hundred forty-two pieces. How many more pieces did the car puzzle have than the dog puzzle?

$$\begin{array}{r} 159 \\ + 43 \\ \hline \end{array}$$

double 900

2 more than 652

Sarah bought some corn. She spent 5 quarters, 2 dimes, and 8 pennies. How much did the corn cost?

There are over 2,700 kinds of snakes! The fastest snake on record is the African black mamba. It can crawl seven miles per hour over short distances. If it could travel a long distance at that speed, how far could a black mamba travel in two hours?

Hannah made 4 pounds of peanut butter fudge for the sale. She cut each pound of fudge into 24 pieces. How many pieces of fudge did she make?

Name: _____

The people who live on Maple Street had a block party last week. They barbequed 112 pieces of chicken, 100 pork chops, 120 hamburgers, and 102 steaks. How many pieces of meat did they barbeque in all?

Holly had 9 books about frogs. She received more books for her birthday. Now she has 13 books about frogs. How many books about frogs did she receive for her birthday?

The mailman spent 5.2 hours delivering mail today. Write that number in expanded form.

10, 12, 14, 16, 18, 20,
_____, 24, 26

$$\begin{array}{r} 159 \\ - 22 \\ \hline \end{array}$$

$$\begin{array}{r} 46 \\ - 5 \\ \hline \end{array}$$

The students in Ms. Rodriguez's class had a Poetry Picnic on Bad Poetry Day. They had hot dogs, chips, apples, and juice. They drank 32 cups of juice. How many quarts of juice did they drink?

Mr. Brown built a deck on the back of his house. The deck was 12 ft long and 16 feet wide. What is the perimeter of the deck in yards? Round your answer to the nearest tenth.

Wendy has a box of sugar that is 3 inches x 6 inches x 4 inches. Jessica has a box of sugar that is 6 inches x 5 inches x 5 inches. How many more cubic inches will Jessica's box hold than Wendy's?

G, I, K, M, _____, Q,
S, U, W, Y

What number multiplied by three is fifteen?

J, K, I, J, H, I,
_____, H, F, G

Name: _____

Amanda counted 384 people at the beach. If 129 of them were playing in the water, how many people were not playing in the water?

Eric counted 218 boats without sails on the river. Anna counted 187 boats with sails. How many boats did they count in all?

The Lorax, the one who speaks for the trees, is very old. In 10 years he will be 130 years old. How old is he now?

$$\begin{array}{r} 69 \\ + \quad 6 \\ \hline \end{array}$$

6 more than 356

How many hours are there from 8 a.m. to 9 p.m.?

Gavin made a scale drawing of the rock garden before he made the real one. On his drawing 1 in = 1 ft. The drawing has two sides that measure 15 inches and two sides that measure 10 inches. What is the perimeter of Gavin's garden?

There are 35 floors in the skyscraper. There are 8 offices on each floor. How many offices are in the skyscraper?

Robert has 3 bags of Canadian flags. Each bag has 6 flags. Sarah takes 10 flags from Robert. How many flags does Robert have left?

Write this number:
4 ones, 3 hundreds, 2 tens,
8 thousands

Write this number:
4 thousands, 8 hundreds

Write this number:
7 ones, 6 hundreds, 8 tens

Name: _____

$6 - 1 - 3$

double 90

$8 - 4 + 4 + 5$

5, 5, 0, 0, 0, 0, 5, 5,
 0, 0, 0, 0, 0, 5, 5, 0,
 0, 0, 0, 0, 0, 5, 5, 0,
 0, 0, _____, 0

$6 + 6 - 4 - 6 + 6$

If you know
 $79 + 25 = 104$
 Then what is $79 + 24$?

What number multiplied by
 six is forty-eight?

$4 + 5 - 2 - 3$

$$\begin{array}{r} 149 \\ - 15 \\ \hline \end{array}$$

How many hours are there
 from 7 a.m. to 8 p.m.?

double 200

5 less than 765

$$\begin{array}{r} 159 \\ + 73 \\ \hline \end{array}$$

45, 60, 75, _____, 105,
 120, 135, 150

$$\begin{array}{r} 67 \\ - 7 \\ \hline \end{array}$$

Name: _____

Multiply

x	0	1	2	3	4	5	6	7	8	9
2						10				
3								21		
4							24			
5					20					
6				18						
7	0									
8			16							
9		9								

$4 \times 7 =$ $2 \times 9 =$ $3 \times 3 =$ $4 \times 1 =$ $5 \times 5 =$

$5 \times 9 =$ $9 \times 2 =$ $7 \times 8 =$ $7 \times 3 =$ $4 \times 8 =$

$8 \times 3 =$ $9 \times 7 =$ $5 \times 5 =$ $6 \times 2 =$ $0 \times 2 =$

$9 \times 1 =$ $4 \times 8 =$ $6 \times 3 =$ $4 \times 7 =$ $5 \times 7 =$

$6 \times 3 =$ $4 \times 8 =$ $9 \times 0 =$ $8 \times 4 =$ $2 \times 5 =$





MathWorksheets.com

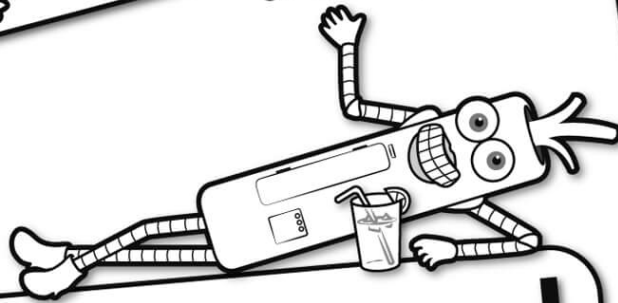


Free Weekly Math Worksheet Workbooks

Every Week!




It's NO PREP at edHelper.




edHelper.com!


More history!




only \$19.99 per year



More science!



More puzzles!



New ideas!



Take The Boring Out Of Homework!

Easy to
print!

edHelper

Weekly K-6 "Take It Home" Books

Kids want choices
for homework.
"Take It Home" books
have fun graphics and
challenging puzzles and
problems for older kids.

"Dr. Programmer"
challenges kids..

Homework
will never be
the same!

edHelper.com

