

Name: _____

	9	9	4
X			7
<hr/>			

	1	4	6
X			5
<hr/>			

	4	1	7
X			6
<hr/>			

	4	9	8
X			9
<hr/>			

	9	6	0
X			8
<hr/>			

	8	7	4
X			4
<hr/>			

	7	2	9
X			3
<hr/>			

	2	0	3
X			6
<hr/>			

	4	3	3
X			2
<hr/>			

	9	5	1
X			6
<hr/>			

	3	6	0
X			9
<hr/>			

	8	1	2
X			7
<hr/>			

	8	1	4
X			4
<hr/>			

	2	1	9
X			8
<hr/>			

	8	1	1
X			7
<hr/>			

	1	2	0
X			2
<hr/>			

	1	9	8
X			6
<hr/>			

	9	7	2
X			4
<hr/>			

	4	4	8
X			9
<hr/>			

	8	5	2
X			5
<hr/>			

Name: _____

	2	2	7
X			8
<hr/>			

	5	9	1
X			6
<hr/>			

	6	4	0
X			9
<hr/>			

	6	6	4
X			2
<hr/>			

	8	7	0
X			4
<hr/>			

	9	1	5
X			5
<hr/>			

	3	7	2
X			6
<hr/>			

	9	2	1
X			9
<hr/>			

	2	4	6
X			2
<hr/>			

	3	5	9
X			5
<hr/>			

	4	5	4
X			3
<hr/>			

	2	4	2
X			7
<hr/>			

	3	8	9
X			7
<hr/>			

	6	4	4
X			3
<hr/>			

	4	9	6
X			8
<hr/>			

	9	5	1
X			2
<hr/>			

	3	6	3
X			7
<hr/>			

	7	7	5
X			9
<hr/>			

	8	3	8
X			6
<hr/>			

	5	5	7
X			3
<hr/>			

Name: _____

	8	1	0
X			3
<hr/>			

	4	6	7
X			8
<hr/>			

	8	1	3
X			2
<hr/>			

	5	2	6
X			5
<hr/>			

	5	4	7
X			5
<hr/>			

	1	6	7
X			3
<hr/>			

	8	1	9
X			4
<hr/>			

	6	4	3
X			8
<hr/>			

	9	0	0
X			7
<hr/>			

	4	4	8
X			3
<hr/>			

	2	2	3
X			5
<hr/>			

	3	2	9
X			2
<hr/>			

	6	9	8
X			5
<hr/>			

	4	6	3
X			9
<hr/>			

	7	1	5
X			2
<hr/>			

	7	5	1
X			6
<hr/>			

	1	2	0
X			3
<hr/>			

	8	2	5
X			9
<hr/>			

	6	6	3
X			8
<hr/>			

	7	8	6
X			7
<hr/>			

Name: _____

	6	1	5
X			6
<hr/>			

	5	4	1
X			9
<hr/>			

	5	6	1
X			5
<hr/>			

	6	0	3
X			7
<hr/>			

	3	8	7
X			5
<hr/>			

	3	6	9
X			8
<hr/>			

	5	2	0
X			9
<hr/>			

	8	9	3
X			3
<hr/>			

	6	3	1
X			7
<hr/>			

	7	3	4
X			8
<hr/>			

	6	2	3
X			2
<hr/>			

	8	4	1
X			9
<hr/>			

	5	3	4
X			2
<hr/>			

	8	5	8
X			5
<hr/>			

	4	9	3
X			4
<hr/>			

	6	6	1
X			7
<hr/>			

	2	1	0
X			5
<hr/>			

	5	8	8
X			2
<hr/>			

	7	0	3
X			3
<hr/>			

	4	3	9
X			6
<hr/>			

Name: _____

Cross off the number that does NOT belong.

10, 20, 30, 40, 49, 50, 60

Why does _____ not belong in the pattern?

Cross off the number that does NOT belong.

180, 190, 200, 210, 220, 230, 240, 250, 256, 260



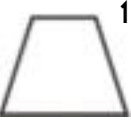


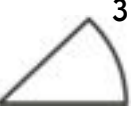

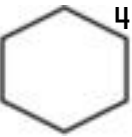
Why does _____ not belong in the pattern?

Name: _____

Each row, column, and box must have the numbers 1 through 4. The first box is done.

4	3		1
2	1	4	
			2
	2	1	

Each row, column, and box must have 4 different pictures. The first box is done.

 3	 4		 1
 1	 2		
	 3		
 2		 4	



MathWorksheets.com



Free Weekly Math Worksheet Workbooks

Every Week!



It's NO PREP at edHelper.



edHelper.com!


More history!



only \$19.99 per year



Things for the classroom!




More science!



New ideas!



More puzzles!



Take The Boring Out Of Homework!

Easy to
print!

edHelper

Weekly K-6 "Take It Home" Books

Kids want choices
for homework.
"Take It Home" books
have fun graphics and
challenging puzzles and
problems for older kids.

"Dr. Programmer"
challenges kids..

Homework
will never be
the same!

edHelper.com

