

Name: _____

$8 - 4 = \underline{\quad}$

$4 + \underline{\quad} = 8$

56, 64, _____, 80, 88, 96,

104, 112, 120, 128


five plus nine equals

7, 9, 11, 13, _____, 17

$$\begin{array}{r} 19 \\ + 10 \\ \hline \end{array}$$

$$\begin{array}{r} 8 \\ - 5 \\ \hline \end{array}$$

What time is it?



____:____

Ava took her empty backpack and filled it with tennis balls. Estimate how many tennis balls you think she was able to fit into her backpack.

Mary took an empty half gallon milk carton and filled it with jelly beans. Write a number to estimate how many jelly beans are in the milk carton.

A, F, _____, P, U, Z

How many dots on the bug?



57, 58, _____, _____, _____,

62, _____

$11 = \underline{\quad} + 10$

$13 = \underline{\quad} + 10$

Estimate. Write an EVEN number. About how many pencils can you hold in your hand?

$$\begin{array}{r} 49 \\ - 2 \\ \hline \end{array}$$

Name: _____

Cross off the letter that does NOT belong.

B, F, J, N, R, V, X, Z

Why does _____ not belong in the pattern?

Cross off the number that does NOT belong.

52, 69, 86, 103, 120, 137, 154, 170, 171, 188

Why does _____ not belong in the pattern?

Name: _____

Complete each pattern, using the same rule. Write what the rule is.

____, ____, P, L, H, D

Z, V, R, ____, ____, ____, ____

Find the missing numbers. These both have the same rule. What is the rule?

If

$$1, 1 = 2$$

$$2, 2 = 4$$

$$3, 3 = 6$$

$$4, 4 = 8$$

Then

$$5, 5 = ?$$

If

$$6, 6 = 12$$

$$7, 7 = 14$$

$$8, 8 = 16$$


$$9, 9 = 18$$


Then

$$10, 10 = ?$$

Name: _____

<p>Jason hit the ball 13 times. Robert hit the ball 10 times. How many times did they hit the ball in all?</p>	<p>Sara had 27 smiley face stickers. She gave 11 stickers to Jane. How many stickers did she have left?</p>	<p>There are 19 books on the shelf. Two books are about horses. How many books are not about horses?</p>
--	---	--

<p>Write ch or tw to complete each word.</p> <p>_____enty _____op _____ase _____ice</p>	$\begin{array}{r} 65 \\ + 10 \\ \hline \end{array}$	$\begin{array}{r} 59 \\ - 49 \\ \hline \end{array}$	 <p style="text-align: center;">8 : 45</p>
--	---	---	---

$\begin{array}{r} 76 \\ + 46 \\ \hline \end{array}$	$\begin{array}{r} 55 \\ - 24 \\ \hline \end{array}$	<div style="border: 2px solid gray; border-radius: 15px; padding: 5px; display: inline-block;">12:30</div>		$\begin{array}{r} 97 \\ - 87 \\ \hline \end{array}$	$\begin{array}{r} 75 \\ - 60 \\ \hline \end{array}$
---	---	--	--	---	---

<p>18 + _____ = 23</p> <p><input type="radio"/> 6 <input type="radio"/> 5 <input type="radio"/> 7</p>	<p>1 _____ 1</p> <p><input type="radio"/> < <input type="radio"/> > <input type="radio"/> =</p>	<p>10:00 a.m. to 12:00 p.m.</p> <p><input type="radio"/> 2 hours <input type="radio"/> 6 hours <input type="radio"/> 1 hour <input type="radio"/> 8 hours</p>
---	---	--

Name: _____

$10 + 5 = 15$

$4 + 9 =$

$8 + 11 =$

$5 + 2 =$

$12 + 7 =$

$5 + 5 =$

$5 + 8 =$

$3 + 6 =$

$12 + 5 =$

$12 + 6 =$

$8 + 6 =$

12	7	19	6	8	19	5	8	13	10	5	2	7	5	5	13
7	7	21	15	5	6	10	8	12	12	7	24	22	19	7	25
5	9	8	11	20	5	12	10	3	8	6	5	6	21	3	17
3	6	13	24	4	9	13	5	3	15	10	18	24	19	17	17
24	18	9	8	16	9	5	3	17	3	3	20	10	12	6	22
18	3	6	9	11	5	5	5	14	19	3	12	8	7	28	13
12	19	6	4	5	19	12	16	2	5	7	9	6	12	8	18
16	6	12	10	5	2	6	19	8	15	8	6	14	13	2	7
13	14	10	8	12	6	3	14	18	5	13	7	5	16	17	8
3	15	7	7	15	3	5	8	21	14	8	13	19	8	15	19
8	17	7	10 + 5 = 15	17	2	9	27	5	18	20	15	3	6		
28	13	13	2	5	20	10	8	10	5	5	10	4	6	17	24
12	5	7	12	1	21	17	17	11	6	5	17	23	14	9	12
12	12	20	11	17	5	6	21	5	11	5	12	12	5	3	10



Write operation.
Write = sign.
Circle.

$4 + 11 = 15$

$7 + 4 =$

$12 + 6 =$

$7 + 2 =$

$9 + 3 =$

$8 + 11 =$

$2 + 9 =$

$5 + 8 =$

$11 + 7 =$


$5 + 11 =$

$6 + 11 =$


6	17	11	11	10	11	4	18	17	19	6	8	2	7	7	3
11	7	17	3	4 + 11 = 15	14	11	18	8	9	4	8	10	19		
6	11	11	3	5	11	4	16	18	3	4	12	29	6	16	3
11	12	12	11	9	18	16	12	11	7	22	2	9	12	3	13
17	15	9	14	6	19	15	4	2	16	4	11	9	5	11	16
11	3	8	5	16	6	19	13	6	11	12	11	18	11	11	11
7	7	7	2	10	15	8	7	11	16	6	26	10	6	23	6
5	19	18	2	7	12	6	8	4	5	20	9	3	12	11	9
5	8	13	13	9	18	16	11	8	4	7	15	3	24	5	1
14	27	14	9	19	20	6	24	5	17	11	12	6	16	19	7
8	11	20	8	7	4	15	4	15	12	22	8	6	11	13	14
6	11	25	2	2	22	11	9	23	6	11	17	12	18	5	4
16	7	19	17	6	3	6	2	14	14	10	15	5	16	9	8

Name: _____


Draw a slide of the shape by moving the shape 2 dots to the right and 2 dots up.



Draw a slide of the shape by moving the shape 3 dots to the left and 3 dots up.



Draw a slide of the shape by moving the shape 2 dots to the right and 2 dots up.



Name: _____

Sudoku Sums of 10

Each row, column, and box must have the numbers 1 through 6.
Hint: Look for sudoku sums. The sum of the two boxes inside of the dashed lines is 10.

Here is an example of a sudoku sum of 10:

6	4
---	---

	2			4	
	5		1		
			6		4
	6	2	5		
6					1
				3	

100 more
than 132

Circle each odd number that is less than 376.

670 567 774 781 935
 280 678 705 430 865
 196 190 570 903 693
 263 199 300 686 927
 163 206 910 113 652

The number 49 is an odd number. Write an odd number greater than 72.

$77 + 20 = \underline{\hspace{2cm}}$

Write the missing sign.

$11 \quad \underline{\hspace{1cm}} \quad 5 = 6$

What month comes before April?

$79 - 47 = \underline{\hspace{2cm}}$

Name: _____


Circle the words.

startateourauntwouldpilebottlejumpswingdrawfineman
shefinetipmanhisneedstartfullfrogourauntfogtrainnose

Combine the words to make a compound word.

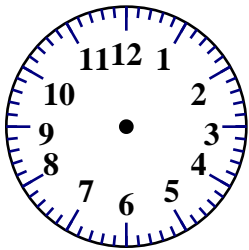
water + fall = _____

piggy + back = _____



10 : 35

four hundred
twenty-nine



1 : 45

$$\begin{array}{r} 61 \\ + 50 \\ \hline \end{array}$$

Write + or - in the circles.

16 ○ 12 = 15 ○ 11

10 ○ 2 ○ 8 = 18 ○ 10 ○ 12

$$\begin{array}{r} 19 \\ - 10 \\ \hline \end{array}$$

- pue
- pyar
- pure
- puri

There are 147 children at the zoo. About how many children are there at the zoo? (Hint: Round your answer to the nearest ten.)

87 - 14 = _____

$$\begin{array}{r} 32 \\ + 43 \\ \hline \end{array}$$

Name: _____

$14 + \underline{\quad} = 18$

$\underline{\quad} + 16 = 23$

$$\begin{array}{r} 56 \\ + \quad 2 \\ \hline \end{array}$$

$14 + 10 = \underline{\quad}$

$14 + 13 = \underline{\quad}$

There are many plants in Erin's house. There are two plants in Erin's room. There is one plant in the kitchen. There are five plants in the living room. How many plants are there in Erin's house?

541

I am in the hundreds place.

What number am I? _____

I am nine numbers more than the number in the hundreds place.

What number am I? _____

Circle the odd number.

6 1 20 8
4 18

$$\begin{array}{r} 12 \\ + 83 \\ \hline \end{array}$$

$33 + 86 = \underline{\quad}$

ten less than
876

$70 + 500 + 2$

Get your ruler. Draw a line using your ruler that is 6 centimeters long.

$10 + 4 + 400$

It is your turn. Write O to make your move.

X		
	O	X

Write the missing sign.

$11 \quad \underline{\quad} \quad 7 = 4$

$$\begin{array}{r} 41 \\ - 27 \\ \hline \end{array}$$

$$\begin{array}{r} 68 \\ - 17 \\ \hline \end{array}$$



Name: _____

Can you guess the word?

No duplicate letters can be used.

G R I E F

The letter **G** is in the word
and is in the correct spot.

T **O** U G H

The letter **O** is in the word,
but **O** is not in that spot.

A B C D E F G H I J K L

A list of letters will be given that
have not been used. Good luck!

Hint: There are no duplicate letters in the answer.

H O N E Y
W H A L E
B E A C H

D F G I J K M P Q R S T U V X Z

Let's check if you guessed correctly. Look across or
down to find the correct answer.

P E O H C A T A E R E N H K D R A H E
J F E H W O A R B E A C H C E H H E A
V C A R R N E R A A H D G A H O N E Y
C N B R A N E E A A O U Y P W E H H F
P E E Y O E N R E A C H B A E R E A E
E R C X H A A R R E Y O A H Y O Q R C
R C Y Q H X A G B R E T E J R C R E C
H V H A S C E B A C A R Y E C R E O R

Hint: There are no duplicate letters in the answer.

T O W E R
A F T E R

B C D G H I J K L M N P Q S U V
X Y Z

Let's check if you guessed correctly. Look diagonally
to find the correct answer. (DIAGONAL!)

T L W L F N C T T G C E A E B T E I G
F T A T T W T F L R E E X W R F T A F
B L T T W R L O W E R G Y T E B B A L
E S T E T O E L W D L X E A T O R Z E
R O F B N T E Q T E E N A L L T E T F
T E S R T M T F R E R R E F A A T U E
M R A T T C T N A W R Z L W T L T T A
W C A R W O A A N T E T D E T E W E S
U F A N E F L T K E A A E T O K R T R
T Y E A T T F G L A Y R E L T S A A L

Hint: There are no duplicate letters in the answer.

M I N O R
B R A N D

C E F G H J K L P Q S T U V W X
Y Z

Let's check if you guessed correctly. Look diagonally
to find the correct answer. (DIAGONAL!)

O A I I N Y N K A N M A M W D O D O Y
N D R R R Q I N N N N R R I D F O W K
K M R O O A M R R O N M Z G N A W D R
I B B A G D N D M U K I N R D O B N D
K Z R R N N A K N R O N O J B R R J A
A W A A H K R M D M M R O O N I V D W
N R N A N O N I N N A N X L N O N K R
K I K N B D R D V N N F R R A R D N B
R A W P A A F A D R D A A O N Z D D N
R A I D D K D O A K M A M N P K R A N

Name: _____

Complete each pattern, using the same rule. Write what the rule is.

122, _____, _____, 80, 66, 52, 38

_____, _____, 142, 128, 114, 100, 86, _____, 58, 44

Complete each pattern, using the same rule. Write what the rule is.

39, _____, 65, 78, 91, 104, 117, 130

221, 234, _____, _____, _____, _____, 299

_____, _____, 130, _____, 156, 169

260, 273, _____, _____, _____, _____

Name: _____

Complete the pattern.

24 32 40 48 56 _____

4 6 8 10 _____

40 50 60 70 80 _____

15 18 21 24 _____

Rosa started school with 10 pencils in her desk. She counted her pencils. She only has 6. How many pencils has she used?

sixteen plus eight equals

$$\begin{array}{r} 97 \\ - 62 \\ \hline \end{array}$$

Emma and Anna are playing a game together. Emma has 19 diamonds. Anna has 15 diamonds. Anna wants to buy an avatar that costs 20 diamonds. How many diamonds does she need to borrow from Emma so she can buy it?

Draw 4 small squares. Then color in some to show $\frac{1}{2}$.

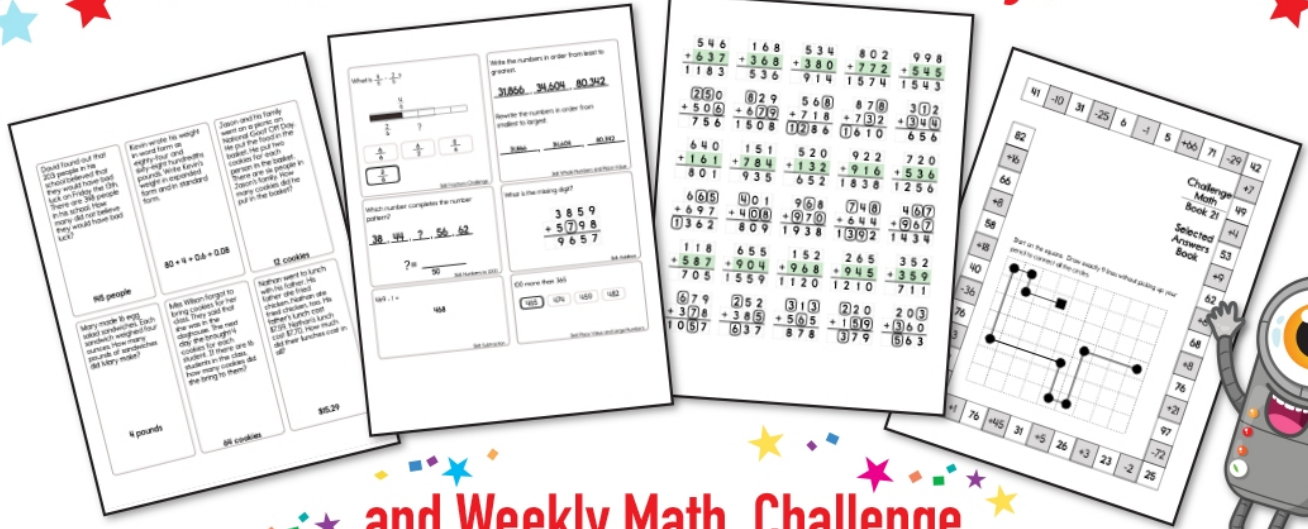
Write the numbers.

ten _____


nineteen _____

twenty-one _____


Subscribe to Get Answer Keys





and Weekly Math, Challenge
 Workbooks, Posters, Daily Reading,
 and so much more!



SUBSCRIBE TO RECEIVE EVEN MORE
 Answer Keys • Effective Activities • Access
 to as many printables as you need!



edHelper.com



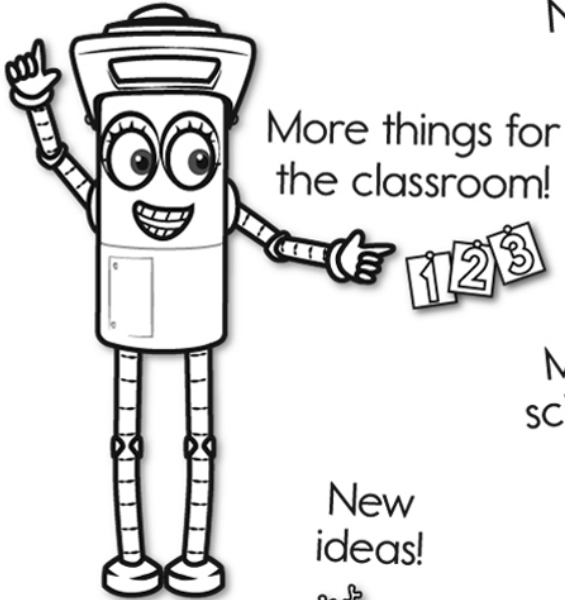
It's NO PREP at edHelper.

More history!



edHelper.com!

New online math games!



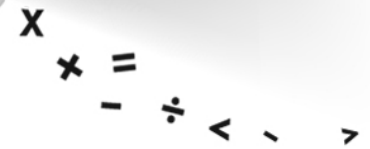
More things for the classroom!




New ideas!



More science!



More puzzles!



Take The Boring Out Of Homework!

Easy to
print!

edHelper

Weekly K-6 "Take It Home" Books

Kids want choices
for homework.
"Take It Home" books
have fun graphics and
challenging puzzles and
problems for older kids.

"Dr. Programmer"
challenges kids..

Homework
will never be
the same!

edHelper.com

