

Name: _____

What is ten more than 87?

$$8 + 1 = \underline{\quad}$$

$$9 + 1 = \underline{\quad}$$

How many?



$$4 \text{ tens} + 9 \text{ ones} = 49$$

$$8 \text{ tens} + 2 \text{ ones} = \underline{\quad}$$

$$5 \text{ tens} + 8 \text{ ones} = \underline{\quad}$$

$$2 \text{ tens} + 0 \text{ ones} = \underline{\quad}$$

What comes before
and after?

____, 90, ____

____, 106, ____

Write the number that
is 2 more.

12 ____

91 ____

38 ____

38, 42, 46, _____, 54,
58

	1	5
+	1	0
<hr/>		

	3	5
+		1
<hr/>		

Circle the odd numbers.

6 42 39

1 85 27

23 594 758

What comes before
and after?

____, 75, ____

____, 94, ____


____, 118, ____

A two-digit even number
has a 4 in the tens place.
The sum of the ones and
tens digits is 6. What is the
number?

Name: _____

Mr. Grumpy had 33 strawberries. He ate 12 strawberries. How many strawberries were left?	Wendy hugged 15 people. Jessica hugged 31 people. How many more people did Jessica hug than Wendy?	Rosa liked carrots cut in round slices. They looked like orange pennies. She helped her mother cut them. Rosa cut 17 slices. Her mother cut 35 slices. How many slices did they cut in all?
--	--	---

Combine the words to make a compound word. over + turn = _____ news + stand = _____	Ten snakes were hissing. Some snakes quit hissing. Five snakes were still hissing. How many snakes quit hissing?	$\begin{array}{r} 48 \\ - 37 \\ \hline \end{array}$
---	--	---


Write the number that comes before. _____ 90 _____ 348 _____ 652 _____ 69 _____ 791 _____ 584	 Write this number using words.
---	--

Estimate how long it took you to get to school today. Circle one. less than 7 minutes more than 7 minutes	$\begin{array}{r} 25 \\ + 21 \\ \hline \end{array}$	$45 + 8 = \underline{\hspace{2cm}}$	$\begin{array}{r} 72 \\ - 49 \\ \hline \end{array}$
---	---	-------------------------------------	---

Name: _____

Gavin has 8 books. He gets 3 more for his birthday. How many books does he have in all?

David loved to laugh. He liked to make his friends laugh. He had a book of jokes. There were 10 jokes about horses, 6 about cats, 8 about dogs, and 29 about other animals. How many jokes were there in all?



How will you get from your house to Amy's house?

Go up _____. Go right _____.

Start at 5f, 1B. Go left 3. Go up 3. You knock at the door. Who answers?

A treasure is 2 units from Hunter's house. Put a circle around all the possible spots on the chart where the treasure could be.

Who is at Peter's house? She had to go right 2 and then up 1 to get there.

Name: _____

Holly worked on her gingerbread house for 37 minutes. Amanda worked on her house for 14 minutes. How many more minutes did Holly work than Amanda?	Peter went fishing with his father. Peter caught some fish. His father caught 4 fish. They caught 11 fish in all. How many fish did Peter catch?	Kayla saw 12 birds in the tree. Three flew away. How many birds were left in the tree?
--	--	--

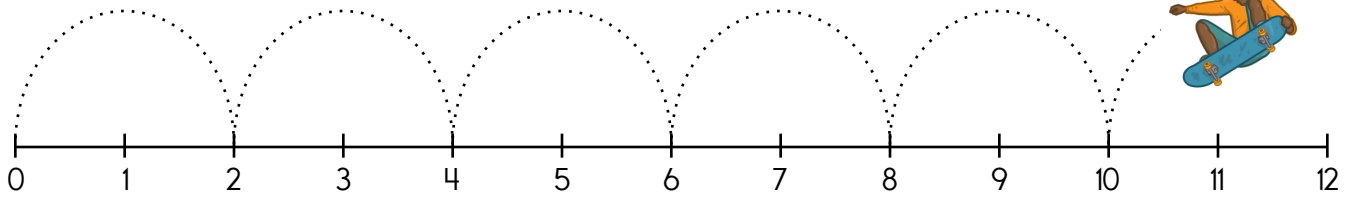
Write how much to add or subtract.

65	$\ominus 9$	56	$\ominus 9$	47	$\ominus 9$	38	$\ominus 9$	29	$\ominus 9$	20	$\ominus 9$	11	$\ominus 9$	2
29	\bigcirc	26	\bigcirc	23	\bigcirc	20	\bigcirc	17	\bigcirc	14	\bigcirc	11	\bigcirc	8
9	\bigcirc	14	\bigcirc	19	\bigcirc	24	\bigcirc	29	\bigcirc	34	\bigcirc	39	\bigcirc	44

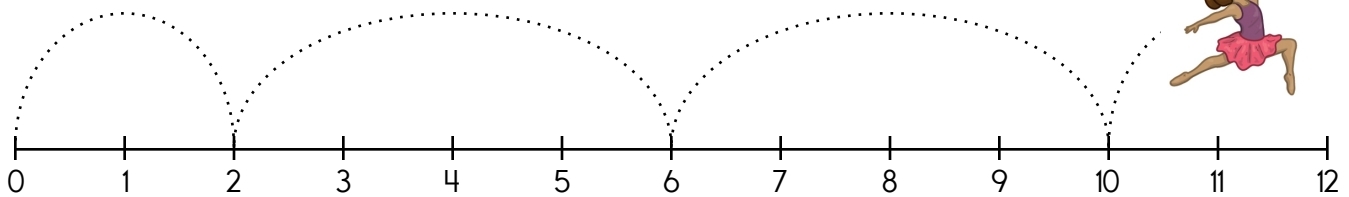
nine hundred forty	<input type="radio"/> cut <input type="radio"/> cutt <input type="radio"/> koht <input type="radio"/> cuut	You will grow bigger as you get older. Name something that will get bigger over time. _____	$\begin{array}{r} 72 \\ + 11 \\ \hline \end{array}$	ten less than 669
--------------------	---	--	---	-------------------

$24 - 21 =$ _____	$17 + 74 =$ _____	<input type="radio"/> riasse <input type="radio"/> raisi <input type="radio"/> riase <input type="radio"/> raise	$\begin{array}{r} 42 \\ - 34 \\ \hline \end{array}$
-------------------	-------------------	---	---

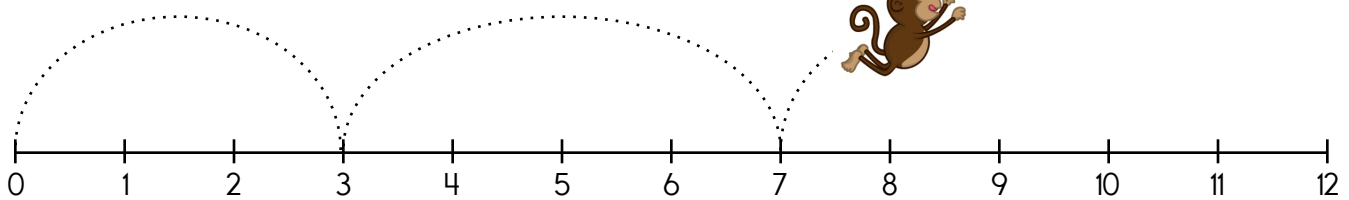
Name: _____



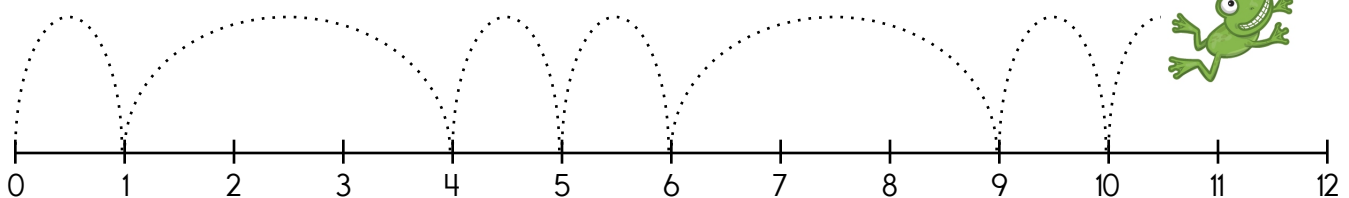
Look at the pattern. The skateboarder will next go to number _____.



Look at the pattern. The dancer will next go to number _____.



Look at the pattern. The monkey will next go to number _____.



Look at the pattern. The frog will next go to number _____.

Write **ch** or **cr** to complete each word.

_____oss

_____ow

_____ain

_____eam

$$\begin{array}{r} 14 \\ + 12 \\ \hline \end{array}$$

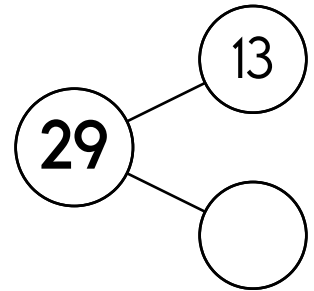
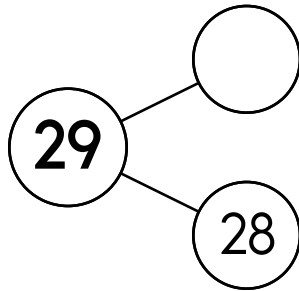
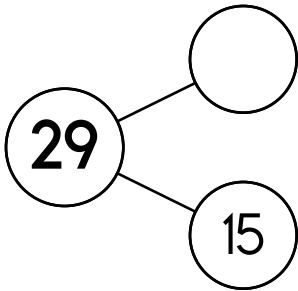


word root **ultra** can mean **beyond**

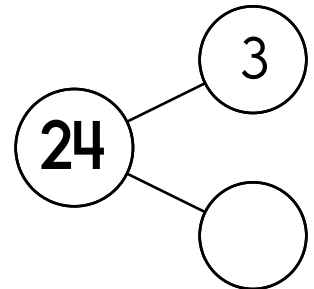
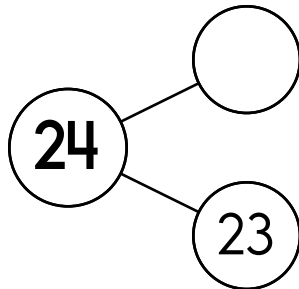
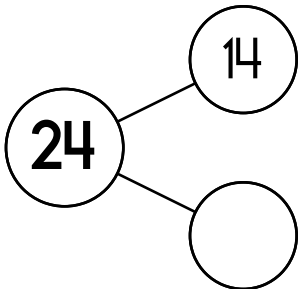
ultrasonic

Name: _____

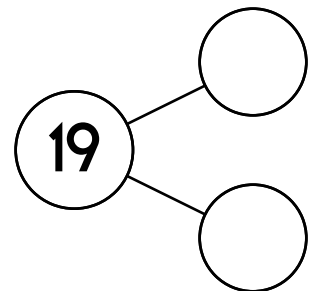
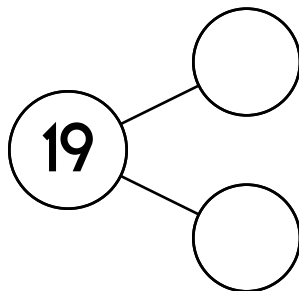
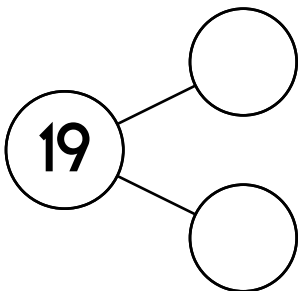
What numbers make 29?



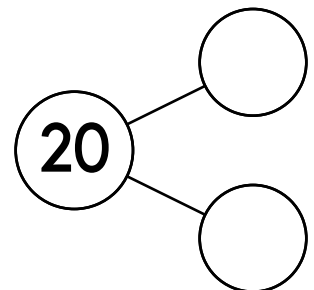
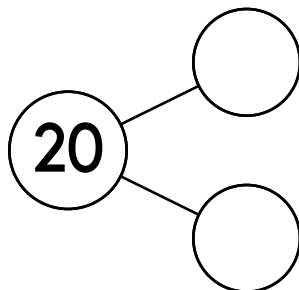
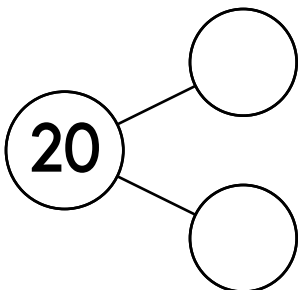
What numbers make 24?



What numbers make 19?



What numbers make 20?



Name: _____

+	11		3		8	
	<u> </u> + <u>11</u>	<u> </u> + <u> </u>	<u> </u> + <u>3</u>	<u> </u> + <u> </u>	<u> </u> + <u>8</u>	<u> </u> + <u> </u>
	21					12
	<u> </u> + <u>11</u>	<u> </u> + <u> </u>	<u> </u> + <u>3</u>	<u> </u> + <u> </u>	<u> </u> + <u>8</u>	<u> </u> + <u> </u>
7	18				15	9
	<u>7</u> + <u>11</u>	<u>7</u> + <u> </u>	<u>7</u> + <u>3</u>	<u>7</u> + <u> </u>	<u>7</u> + <u>8</u>	<u>7</u> + <u> </u>
	21	18				
	<u> </u> + <u>11</u>	<u> </u> + <u> </u>	<u> </u> + <u>3</u>	<u> </u> + <u> </u>	<u> </u> + <u>8</u>	<u> </u> + <u> </u>
10		18				
	<u>10</u> + <u>11</u>	<u>10</u> + <u> </u>	<u>10</u> + <u>3</u>	<u>10</u> + <u> </u>	<u>10</u> + <u>8</u>	<u>10</u> + <u> </u>
			5			
	<u> </u> + <u>11</u>	<u> </u> + <u> </u>	<u> </u> + <u>3</u>	<u> </u> + <u> </u>	<u> </u> + <u>8</u>	<u> </u> + <u> </u>
				16	17	
	<u> </u> + <u>11</u>	<u> </u> + <u> </u>	<u> </u> + <u>3</u>	<u> </u> + <u> </u>	<u> </u> + <u>8</u>	<u> </u> + <u> </u>
6			9			
	<u>6</u> + <u>11</u>	<u>6</u> + <u> </u>	<u>6</u> + <u>3</u>	<u>6</u> + <u> </u>	<u>6</u> + <u>8</u>	<u>6</u> + <u> </u>

Circle the words.

claydearstolestreetgladtwelvblocksawgreenthirdflat
gladcupthirdrabbitdirtsawstreetnotstuckslickbadchat

Name: _____

across →

down ↓



2. _____ in _____



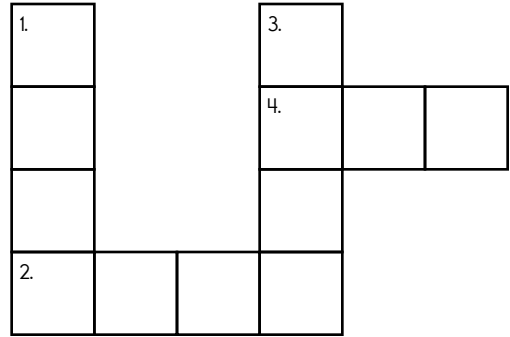
1. mil _____



4. _____ e



3. h _____ n _____



o r m c v a l e o c
a b t r m l e y t o
b e s t o l f o h m
u s o i t z l u i e
m g f j u m p r s f
f i f b e f o r e h
l v f f o r u r e l

Eric had 12 bottles of
Coca-Cola. He gave 8 to
his friends. How many
does he have left?

two hundred
ninety-nine

$$\begin{array}{r} 25 \\ + 51 \\ \hline \end{array}$$

100 more
than 157

$$\begin{array}{r} 14 \\ 32 \\ + 41 \\ \hline \end{array}$$

Word Bank

jump this off
come your all
best for before

How many tally marks?

||||| ||||| |||||

$$45 - 39 = \underline{\hspace{2cm}}$$

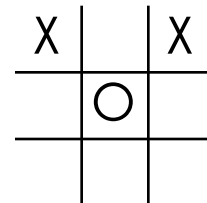
$$\begin{array}{r} 36 \\ + 63 \\ \hline \end{array}$$



eight hundred
ninety-five

How many days are there in
three full weeks?

It is your turn. Write O to make your move.



$$26 + 79 = \underline{\hspace{2cm}}$$

Name: _____

Fill in the numbers.

25	26

	45

	60

88	

83	

	13

	50
--	----

62	

	17
--	----

56

Color in the boxes.

16 or 2 = orange, 7 or 12 = purple,

6 or 15 = blue

What is the hidden number? _____

1 + 1	9 + 3	3 + 4	3 + 4	9 + 3	3 + 4	1 + 5	1 + 1
9 + 3	1 + 5	8 + 8	6 + 9	1 + 5	1 + 1	9 + 3	8 + 8
9 + 3	8 + 8	1 + 5	1 + 1	1 + 5	1 + 1	3 + 4	6 + 9
1 + 5	9 + 3	3 + 4	9 + 3	9 + 3	3 + 4	1 + 5	1 + 1
9 + 3	8 + 8	8 + 8	6 + 9	8 + 8	6 + 9	3 + 4	1 + 1
9 + 3	6 + 9	1 + 5	1 + 5	1 + 1	8 + 8	9 + 3	1 + 5
8 + 8	9 + 3	3 + 4	9 + 3	9 + 3	3 + 4	8 + 8	1 + 1
1 + 5	6 + 9	8 + 8	6 + 9	8 + 8	6 + 9	1 + 1	1 + 5

39 - 33 = _____

Sixteen is an even number.
yes no



Name: _____

Find 2 equations hidden in each box. Good luck!

0

18

$$6 - 3$$

$$1 + 1$$

14

$$9 + 9$$

2

7

Write 2 equations: _____

$$8 + 2$$

$$2 + 7$$

10

$$3 + 3$$

$$1 + 4$$

6

14

4

Write 2 equations: _____

15

8

$$8 + 6$$

11

$$6 - 2$$

$$9 - 1$$

$$1 + 2$$

4

Write 2 equations: _____

Name: _____

Find 2 equations hidden in each box. Good luck!

9 9 - 0 4 - 2
5 - 1 15 2

Write 2 equations: _____

6 + 8 3 - 3 5 + 4
8 + 2
9 10

Write 2 equations: _____

17 8 + 8 4 - 2
16
15 8 + 7

Write 2 equations: _____

Name: _____

Add 10.

34

80

20

73

12

62

38

Add 1.

13	
----	--

1	
---	--

98	
----	--

21	
----	--

Subtract 1.

	55
--	----

	57
--	----

	44
--	----

	69
--	----

Subtract 1 or 10.

99

	84
--	----

	9
--	---

57

	17
--	----

Add 1 or 10.

29

82

15	
----	--

76

65	
----	--

25

Name: _____

Complete the pattern.

14

21

28

35

42

4

8

12

16

20

12

15

18

21

24

45

54

63

72

81

30

40

50

60

70

24

32

40

48

56

April has two tomato plants. There are 3 ripe tomatoes on one plant. There are 6 ripe tomatoes on the other plant. How many ripe tomatoes are there in all?

Write an addition number sentence using the numbers 6, 4, and 2.

Circle the number that is less.

184 166

$$\begin{array}{r} 75 \\ - 72 \\ \hline \end{array}$$




It's NO PREP at edHelper.

More history!



edHelper.com!



New online math games!



1 2 3

More science!

New ideas!



\times
 $\times =$
 $- \div$
 $< - >$

More puzzles!



