

Name: \_\_\_\_\_

$$\begin{array}{r} 86 \\ - 61 \\ \hline \end{array}$$

$$\begin{array}{r} 66 \\ - 16 \\ \hline \end{array}$$

$$\begin{array}{r} 59 \\ - 33 \\ \hline \end{array}$$

$$\begin{array}{r} 76 \\ - 60 \\ \hline \end{array}$$

$$\begin{array}{r} 84 \\ - 72 \\ \hline \end{array}$$

$$\begin{array}{r} 45 \\ - 41 \\ \hline \end{array}$$

$$\begin{array}{r} 63 \\ - 21 \\ \hline \end{array}$$

$$\begin{array}{r} 80 \\ - 40 \\ \hline \end{array}$$

$$\begin{array}{r} 37 \\ - 15 \\ \hline \end{array}$$

$$\begin{array}{r} 69 \\ - 11 \\ \hline \end{array}$$

$$\begin{array}{r} 69 \\ - 58 \\ \hline \end{array}$$

$$\begin{array}{r} 27 \\ - 16 \\ \hline \end{array}$$

$$\begin{array}{r} 27 \\ - 21 \\ \hline \end{array}$$

$$\begin{array}{r} 84 \\ - 41 \\ \hline \end{array}$$

$$\begin{array}{r} 48 \\ - 23 \\ \hline \end{array}$$

$$\begin{array}{r} 76 \\ - 63 \\ \hline \end{array}$$

$$\begin{array}{r} 48 \\ - 13 \\ \hline \end{array}$$

$$\begin{array}{r} 87 \\ - 14 \\ \hline \end{array}$$

$$\begin{array}{r} 79 \\ - 49 \\ \hline \end{array}$$

$$\begin{array}{r} 35 \\ - 20 \\ \hline \end{array}$$

$$\begin{array}{r} 54 \\ - 22 \\ \hline \end{array}$$

$$\begin{array}{r} 29 \\ - 22 \\ \hline \end{array}$$

$$\begin{array}{r} 47 \\ - 32 \\ \hline \end{array}$$

$$\begin{array}{r} 79 \\ - 46 \\ \hline \end{array}$$

$$\begin{array}{r} 53 \\ - 21 \\ \hline \end{array}$$

$$\begin{array}{r} 66 \\ - 22 \\ \hline \end{array}$$

$$\begin{array}{r} 51 \\ - 50 \\ \hline \end{array}$$

$$\begin{array}{r} 42 \\ - 40 \\ \hline \end{array}$$

$$\begin{array}{r} 77 \\ - 43 \\ \hline \end{array}$$

$$\begin{array}{r} 56 \\ - 16 \\ \hline \end{array}$$

$$\begin{array}{r} 79 \\ - 20 \\ \hline \end{array}$$

$$\begin{array}{r} 67 \\ - 21 \\ \hline \end{array}$$

$$\begin{array}{r} 78 \\ - 66 \\ \hline \end{array}$$

$$\begin{array}{r} 45 \\ - 40 \\ \hline \end{array}$$

$$\begin{array}{r} 79 \\ - 37 \\ \hline \end{array}$$

$$\begin{array}{r} 23 \\ - 11 \\ \hline \end{array}$$

Name: \_\_\_\_\_

$\begin{array}{r} 87 \\ - 72 \\ \hline \end{array}$	$\begin{array}{r} 58 \\ - 56 \\ \hline \end{array}$	$\begin{array}{r} 69 \\ - 25 \\ \hline \end{array}$	$\begin{array}{r} 27 \\ - 22 \\ \hline \end{array}$	$\begin{array}{r} 79 \\ - 64 \\ \hline \end{array}$	$\begin{array}{r} 27 \\ - 11 \\ \hline \end{array}$
---	---	---	---	---	---

$\begin{array}{r} 76 \\ - 22 \\ \hline \end{array}$	$\begin{array}{r} 55 \\ - 23 \\ \hline \end{array}$	$\begin{array}{r} 84 \\ - 80 \\ \hline \end{array}$	$\begin{array}{r} 47 \\ - 33 \\ \hline \end{array}$	$\begin{array}{r} 78 \\ - 48 \\ \hline \end{array}$	$\begin{array}{r} 79 \\ - 69 \\ \hline \end{array}$
---	---	---	---	---	---

$73 - 61 =$

$69 - 65 =$

$85 - 30 =$

$76 - 20 =$

$41 - 31 =$

$77 - 66 =$

$72 - 31 =$

$64 - 22 =$

$35 - 25 =$

$87 - 82 =$

$59 - 27 =$

$87 - 67 =$

$78 - \underline{\quad} = 15$

$73 - \underline{\quad} = 33$

$56 - \underline{\quad} = 34$

$47 - \underline{\quad} = 35$

$85 - \underline{\quad} = 52$

$83 - \underline{\quad} = 32$

$76 - \underline{\quad} = 42$

$48 - \underline{\quad} = 4$

$68 - \underline{\quad} = 14$

$45 - \underline{\quad} = 20$

$56 - \underline{\quad} = 22$

$51 - \underline{\quad} = 30$

$\begin{array}{r} 65 \\ - 45 \\ \hline \end{array}$	$\begin{array}{r} 79 \\ - 33 \\ \hline \end{array}$	$\begin{array}{r} 76 \\ - 15 \\ \hline \end{array}$	$\begin{array}{r} 22 \\ - 22 \\ \hline \end{array}$	$\begin{array}{r} 83 \\ - 63 \\ \hline \end{array}$	$\begin{array}{r} 63 \\ - 63 \\ \hline \end{array}$
---	---	---	---	---	---

Name: \_\_\_\_\_

$$\begin{array}{r} 31 \\ - 20 \\ \hline \end{array}$$

$$\begin{array}{r} 77 \\ - 13 \\ \hline \end{array}$$

$$\begin{array}{r} 75 \\ - 73 \\ \hline \end{array}$$

$$\begin{array}{r} 86 \\ - 16 \\ \hline \end{array}$$

$$\begin{array}{r} 77 \\ - 16 \\ \hline \end{array}$$

$$\begin{array}{r} 52 \\ - 11 \\ \hline \end{array}$$

$$\begin{array}{r} 52 \\ - 22 \\ \hline \end{array}$$

$$\begin{array}{r} 24 \\ - 23 \\ \hline \end{array}$$

$$\begin{array}{r} 84 \\ - 14 \\ \hline \end{array}$$

$$\begin{array}{r} 58 \\ - 50 \\ \hline \end{array}$$

$$\begin{array}{r} 47 \\ - 11 \\ \hline \end{array}$$

$$\begin{array}{r} 46 \\ - 42 \\ \hline \end{array}$$

$57 - 30 =$

$69 - 24 =$

$41 - 30 =$

$67 - 54 =$

$43 - 30 =$

$24 - 11 =$

$79 - 77 =$

$58 - 23 =$

$83 - 50 =$

$84 - 54 =$

$83 - 12 =$

$85 - 14 =$

$82 - \underline{\quad} = 60$

$\underline{\quad} - 30 = 14$

$\underline{\quad} - 70 = 12$

$57 - \underline{\quad} = 6$

$84 - \underline{\quad} = 60$

$\underline{\quad} - 21 = 48$

$83 - \underline{\quad} = 10$

$\underline{\quad} - 60 = 0$

$\underline{\quad} - 52 = 32$

$\underline{\quad} - 28 = 10$

$79 - \underline{\quad} = 11$

$15 - \underline{\quad} = 1$

$$\begin{array}{r} 87 \\ - 80 \\ \hline \end{array}$$

$$\begin{array}{r} 77 \\ - 72 \\ \hline \end{array}$$

$$\begin{array}{r} 76 \\ - 74 \\ \hline \end{array}$$

$$\begin{array}{r} 78 \\ - 77 \\ \hline \end{array}$$

$$\begin{array}{r} 66 \\ - 65 \\ \hline \end{array}$$

$$\begin{array}{r} 87 \\ - 55 \\ \hline \end{array}$$

Name: \_\_\_\_\_

Write your starting time.

 : 

$87 - 41 = \square$

$35 - 30 = \square$

$76 - 43 = \square$

$53 - 51 = \square$

$59 - 35 = \square$

$58 - 23 = \square$

$28 - 25 = \square$

$56 - 23 = \square$

$11 - 11 = \square$

$81 - 21 = \square$

$69 - 53 = \square$

$83 - 31 = \square$

$59 - 47 = \square$

$43 - 20 = \square$

$79 - 70 = \square$

$16 - 14 = \square$

$36 - 31 = \square$

$55 - 14 = \square$

$45 - 41 = \square$

$29 - 24 = \square$

$56 - 24 = \square$

$48 - 33 = \square$

$79 - 29 = \square$

$62 - 40 = \square$

$77 - 50 = \square$

$53 - 13 = \square$

$59 - 40 = \square$

$78 - 50 = \square$

$78 - 72 = \square$

$49 - 42 = \square$

$60 - 20 = \square$

$24 - 21 = \square$

$79 - 26 = \square$

$33 - 33 = \square$

$26 - 13 = \square$

$58 - 28 = \square$

$56 - 14 = \square$

$42 - 41 = \square$

$25 - 23 = \square$

$68 - 68 = \square$

$58 - 38 = \square$

$68 - 61 = \square$

Write your ending time.

 : 

Make your own equations.

$78 - \square = \square$

$49 - \square = \square$

$\square - 52 = \square$

$\square - 59 = \square$

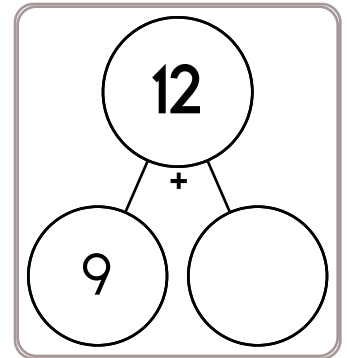
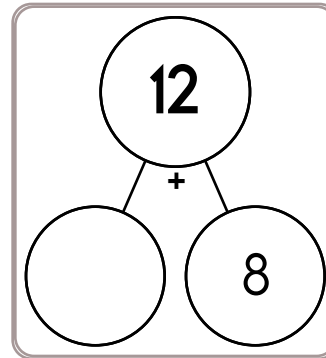
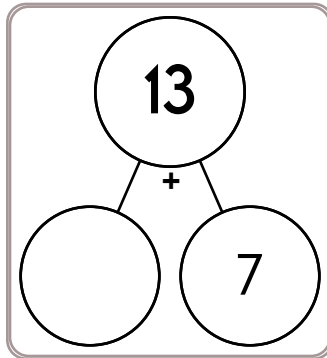
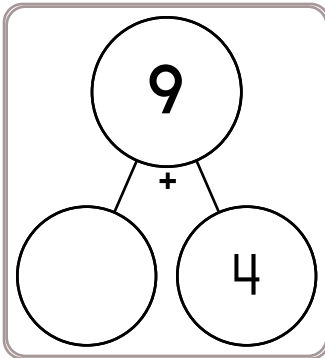
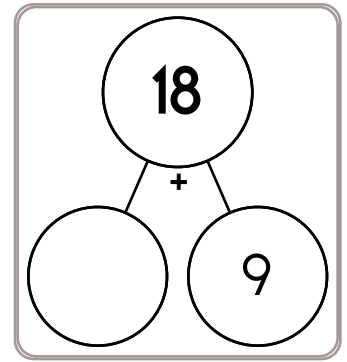
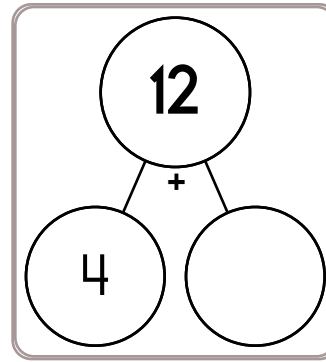
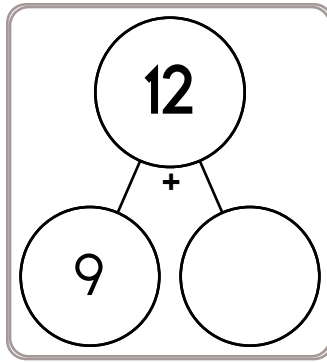
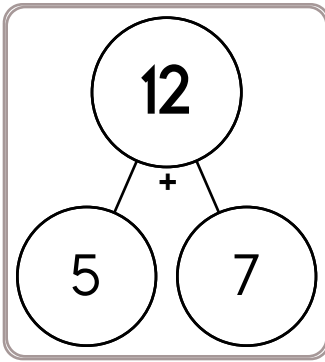
$\square - \square = \square$

$\square - 57 = \square$

$54 - \square = \square$

$\square - \square = \square$

Name: \_\_\_\_\_



$9 - 4 =$

$4 - 3 =$

$7 - 6 =$

$5 - 3 =$

$9 - 5 =$

$3 - 2 =$

$6 - 6 =$

$9 - 5 =$

$5 - 3 =$

$7 - 4 =$

$8 - 6 =$

$6 - 2 =$



$4 + \underline{\quad} = 12$

$2 + \underline{\quad} = 9$

$\underline{\quad} + 7 = 13$

$\underline{\quad} + 4 = 11$

$\underline{\quad} + 9 = 11$

$\underline{\quad} + 3 = 9$

$8 + \underline{\quad} = 14$

$3 + \underline{\quad} = 8$

$\underline{\quad} + 4 = 9$

$7 + \underline{\quad} = 16$

$5 + \underline{\quad} = 12$

$\underline{\quad} + 5 = 14$

Name: \_\_\_\_\_

Jason has 20 peanuts. He put them in groups. If he put 4 peanuts in each group, how many groups did he have?

On the first day of winter Rosa made cookies. She made forty-nine chocolate chip cookies. She gave eight cookies to her little brother. She gave five cookies to her sister. She gave eight cookies to her mother. She gave nine cookies to her father. How many cookies did she have left?

Jack went fishing with his father. Jack caught some fish. His father caught 7 fish. They caught 11 fish in all. How many fish did Jack catch?

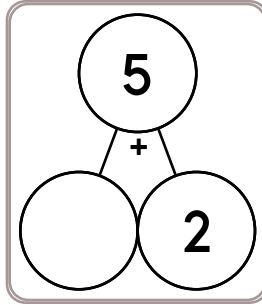
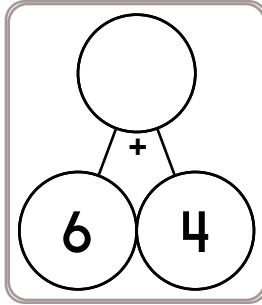
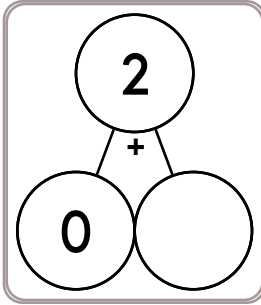

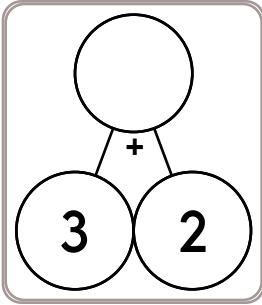

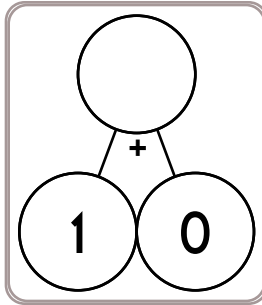
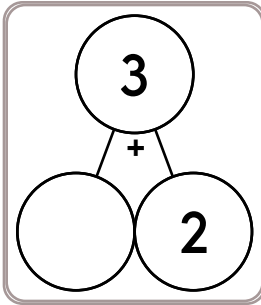
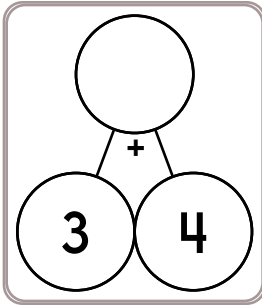
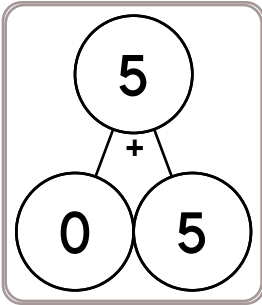
Today it is very cold. Vera hopes it will snow. It is only 19 degrees outside. Yesterday it was 29 degrees. How much colder is it today than it was yesterday?

$$\begin{array}{r} 12 \\ + \quad 4 \\ \hline \end{array}$$

$$\begin{array}{r} 26 \\ + 10 \\ \hline \end{array}$$

95, \_\_\_\_\_, \_\_\_\_\_, \_\_\_\_\_,  
\_\_\_\_\_, \_\_\_\_\_, 101

Name: \_\_\_\_\_



$$\begin{array}{r} 89 \\ - 50 \\ \hline \end{array}$$

$$\begin{array}{r} 13 \\ + 10 \\ \hline \end{array}$$

How much is this?

$$\begin{array}{r} 98 \\ - 20 \\ \hline \end{array}$$

$$\begin{array}{r} 17 \\ + 72 \\ \hline \end{array}$$

$$\begin{array}{r} 3 \\ + 7 \\ \hline \end{array}$$

Erin collects Frigid Dolls. She has 16 of them in the fridge. For her birthday she got 5 more. How many does she have now?

There were nineteen kids on the playground. Five of them came inside to read. How many kids are still on the playground?

What time is it?

\_\_\_\_\_





MathWorksheets.com



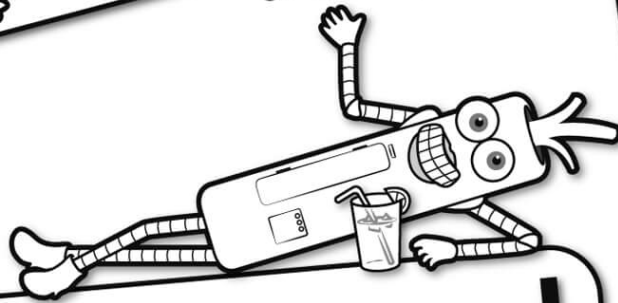
Free Weekly Math Worksheet Workbooks

Every Week!






It's NO PREP at edHelper.



# edHelper.com!


More history!




Things for the classroom!



only \$19.99 per year




More science!



New ideas!



More puzzles!



# Take The Boring Out Of Homework!

Easy to  
print!

edHelper

## Weekly K-6 "Take It Home" Books

Kids want choices  
for homework.  
"Take It Home" books  
have fun graphics and  
challenging puzzles and  
problems for older kids.

"Dr. Programmer"  
challenges kids..

Homework  
will never be  
the same!

edHelper.com

