

Name: \_\_\_\_\_

$$\begin{array}{r} 50 \\ + 20 \\ \hline \end{array}$$

$$\begin{array}{r} 40 \\ + 30 \\ \hline \end{array}$$

$$\begin{array}{r} 30 \\ + 30 \\ \hline \end{array}$$

$$\begin{array}{r} 60 \\ + 20 \\ \hline \end{array}$$

$$\begin{array}{r} 30 \\ + 20 \\ \hline \end{array}$$

$$\begin{array}{r} 20 \\ + 20 \\ \hline \end{array}$$

$$\begin{array}{r} 20 \\ + 70 \\ \hline \end{array}$$

$$\begin{array}{r} 50 \\ + 20 \\ \hline \end{array}$$

$$\begin{array}{r} 40 \\ + 30 \\ \hline \end{array}$$

$$\begin{array}{r} 50 \\ + 10 \\ \hline \end{array}$$

$$\begin{array}{r} 60 \\ + 10 \\ \hline \end{array}$$

$$\begin{array}{r} 10 \\ + 10 \\ \hline \end{array}$$

$$\begin{array}{r} 20 \\ + 10 \\ \hline \end{array}$$

$$\begin{array}{r} 10 \\ + 70 \\ \hline \end{array}$$

$$\begin{array}{r} 30 \\ + 60 \\ \hline \end{array}$$

$$\begin{array}{r} 30 \\ + 20 \\ \hline \end{array}$$

$$\begin{array}{r} 50 \\ + 30 \\ \hline \end{array}$$

$$\begin{array}{r} 20 \\ + 20 \\ \hline \end{array}$$

$$\begin{array}{r} 20 \\ + 10 \\ \hline \end{array}$$

$$\begin{array}{r} 20 \\ + 70 \\ \hline \end{array}$$

$$\begin{array}{r} 50 \\ + 20 \\ \hline \end{array}$$

$$\begin{array}{r} 50 \\ + 30 \\ \hline \end{array}$$

$$\begin{array}{r} 40 \\ + 30 \\ \hline \end{array}$$

$$\begin{array}{r} 60 \\ + 20 \\ \hline \end{array}$$

$$\begin{array}{r} 50 \\ + 30 \\ \hline \end{array}$$

$$\begin{array}{r} 10 \\ + 30 \\ \hline \end{array}$$

$$\begin{array}{r} 10 \\ + 10 \\ \hline \end{array}$$

$$\begin{array}{r} 20 \\ + 10 \\ \hline \end{array}$$

$$\begin{array}{r} 70 \\ + 20 \\ \hline \end{array}$$

$$\begin{array}{r} 60 \\ + 20 \\ \hline \end{array}$$

$$\begin{array}{r} 70 \\ + 20 \\ \hline \end{array}$$

$$\begin{array}{r} 10 \\ + 10 \\ \hline \end{array}$$

$$\begin{array}{r} 30 \\ + 20 \\ \hline \end{array}$$

$$\begin{array}{r} 60 \\ + 20 \\ \hline \end{array}$$

$$\begin{array}{r} 60 \\ + 10 \\ \hline \end{array}$$

$$\begin{array}{r} 20 \\ + 50 \\ \hline \end{array}$$

Name: \_\_\_\_\_

$$\begin{array}{r} 50 \\ + 10 \\ \hline \end{array}$$

$$\begin{array}{r} 30 \\ + 20 \\ \hline \end{array}$$

$$\begin{array}{r} 60 \\ + 20 \\ \hline \end{array}$$

$$\begin{array}{r} 40 \\ + 30 \\ \hline \end{array}$$

$$\begin{array}{r} 20 \\ + 10 \\ \hline \end{array}$$

$$\begin{array}{r} 70 \\ + 20 \\ \hline \end{array}$$

$$\begin{array}{r} 30 \\ + 30 \\ \hline \end{array}$$

$$\begin{array}{r} 20 \\ + 70 \\ \hline \end{array}$$

$$\begin{array}{r} 20 \\ + 50 \\ \hline \end{array}$$

$$\begin{array}{r} 30 \\ + 50 \\ \hline \end{array}$$

$$\begin{array}{r} 60 \\ + 20 \\ \hline \end{array}$$

$$\begin{array}{r} 10 \\ + 30 \\ \hline \end{array}$$

$30 + 60 =$

$10 + 70 =$

$20 + 70 =$

$10 + 10 =$

$50 + 20 =$

$30 + 30 =$

$10 + 10 =$

$50 + 20 =$

$50 + 10 =$

$10 + 30 =$

$40 + 30 =$

$10 + 10 =$

$50 + \underline{\quad} = 60$

$50 + \underline{\quad} = 70$

$40 + \underline{\quad} = 70$

$20 + \underline{\quad} = 30$

$20 + \underline{\quad} = 90$

$50 + \underline{\quad} = 70$

$10 + \underline{\quad} = 80$

$20 + \underline{\quad} = 30$

$30 + \underline{\quad} = 60$

$20 + \underline{\quad} = 40$

$40 + \underline{\quad} = 70$

$60 + \underline{\quad} = 70$

$$\begin{array}{r} 20 \\ + 70 \\ \hline \end{array}$$

$$\begin{array}{r} 30 \\ + 60 \\ \hline \end{array}$$

$$\begin{array}{r} 20 \\ + 10 \\ \hline \end{array}$$

$$\begin{array}{r} 10 \\ + 10 \\ \hline \end{array}$$

$$\begin{array}{r} 60 \\ + 20 \\ \hline \end{array}$$

$$\begin{array}{r} 30 \\ + 20 \\ \hline \end{array}$$

Name: \_\_\_\_\_

$$\begin{array}{r} 30 \\ + 20 \\ \hline \end{array}$$

$$\begin{array}{r} 20 \\ + 20 \\ \hline \end{array}$$

$$\begin{array}{r} 50 \\ + 20 \\ \hline \end{array}$$

$$\begin{array}{r} 30 \\ + 30 \\ \hline \end{array}$$

$$\begin{array}{r} 40 \\ + 30 \\ \hline \end{array}$$

$$\begin{array}{r} 70 \\ + 20 \\ \hline \end{array}$$

$$\begin{array}{r} 10 \\ + 40 \\ \hline \end{array}$$

$$\begin{array}{r} 10 \\ + 70 \\ \hline \end{array}$$

$$\begin{array}{r} 30 \\ + 30 \\ \hline \end{array}$$

$$\begin{array}{r} 20 \\ + 70 \\ \hline \end{array}$$

$$\begin{array}{r} 50 \\ + 20 \\ \hline \end{array}$$

$$\begin{array}{r} 40 \\ + 30 \\ \hline \end{array}$$

$20 + 10 =$

$60 + 20 =$

$10 + 10 =$

$20 + 20 =$

$70 + 20 =$

$20 + 50 =$

$50 + 10 =$

$10 + 10 =$

$10 + 10 =$

$20 + 10 =$

$20 + 70 =$

$60 + 20 =$

$\_\_ + 70 = 90$

$\_\_ + 30 = 60$

$10 + \_\_ = 40$

$50 + \_\_ = 80$

$10 + \_\_ = 80$

$40 + \_\_ = 70$

$\_\_ + 10 = 70$

$\_\_ + 20 = 70$

$\_\_ + 30 = 60$

$10 + \_\_ = 20$

$60 + \_\_ = 80$

$\_\_ + 60 = 90$

$$\begin{array}{r} 10 \\ + 40 \\ \hline \end{array}$$

$$\begin{array}{r} 60 \\ + 20 \\ \hline \end{array}$$

$$\begin{array}{r} 50 \\ + 10 \\ \hline \end{array}$$

$$\begin{array}{r} 20 \\ + 10 \\ \hline \end{array}$$

$$\begin{array}{r} 70 \\ + 20 \\ \hline \end{array}$$

$$\begin{array}{r} 20 \\ + 50 \\ \hline \end{array}$$

Name: \_\_\_\_\_

Write your starting time.

 : 

$30 + 30 = \square$

$20 + 10 = \square$

$50 + 40 = \square$

$40 + 20 = \square$

$60 + 30 = \square$

$60 + 30 = \square$

$60 + 30 = \square$

$30 + 60 = \square$

$10 + 10 = \square$

$70 + 10 = \square$

$40 + 40 = \square$

$50 + 20 = \square$

$10 + 40 = \square$

$40 + 10 = \square$

$10 + 70 = \square$

$20 + 70 = \square$

$40 + 40 = \square$

$10 + 70 = \square$

$30 + 10 = \square$

$20 + 60 = \square$

$20 + 30 = \square$

$30 + 10 = \square$

$50 + 10 = \square$

$40 + 40 = \square$

$10 + 40 = \square$

$10 + 80 = \square$

$40 + 10 = \square$

$30 + 50 = \square$

$20 + 40 = \square$

$30 + 60 = \square$

$60 + 10 = \square$

$70 + 10 = \square$

$50 + 20 = \square$

$20 + 20 = \square$

$30 + 10 = \square$

$10 + 40 = \square$

$30 + 30 = \square$

$30 + 30 = \square$

$30 + 40 = \square$

$10 + 10 = \square$

$60 + 10 = \square$

$30 + 30 = \square$

Write your ending time.

 : 

Make your own equations.

$\square + 50 = \square$

$\square + 50 = \square$

$40 + \square = \square$

$\square + \square = \square$

$30 + \square = \square$

$\square + \square = \square$

$40 + \square = \square$

$\square + 20 = \square$

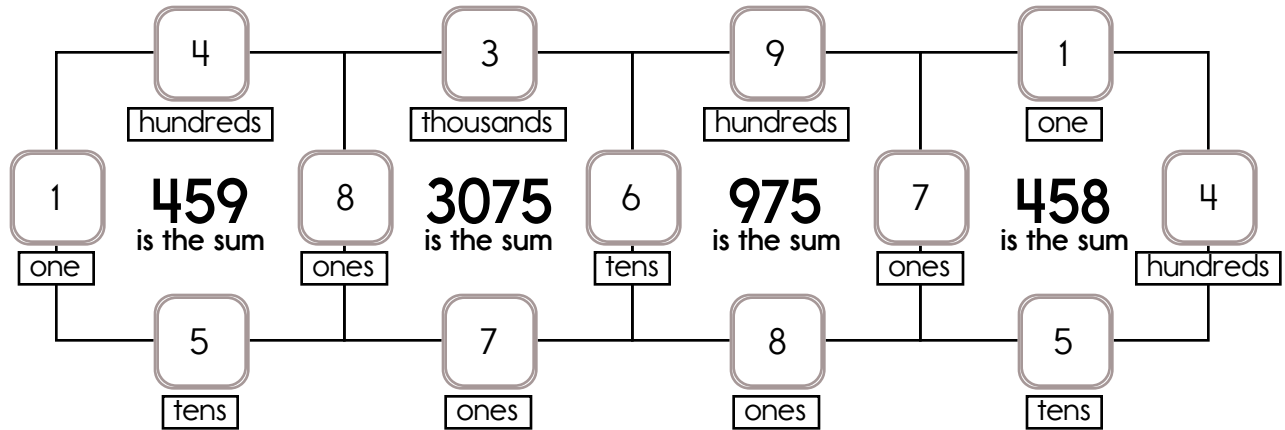
Name: \_\_\_\_\_

Fill in the missing numbers. How? The sum of the four surrounding numbers is in the center of each square.

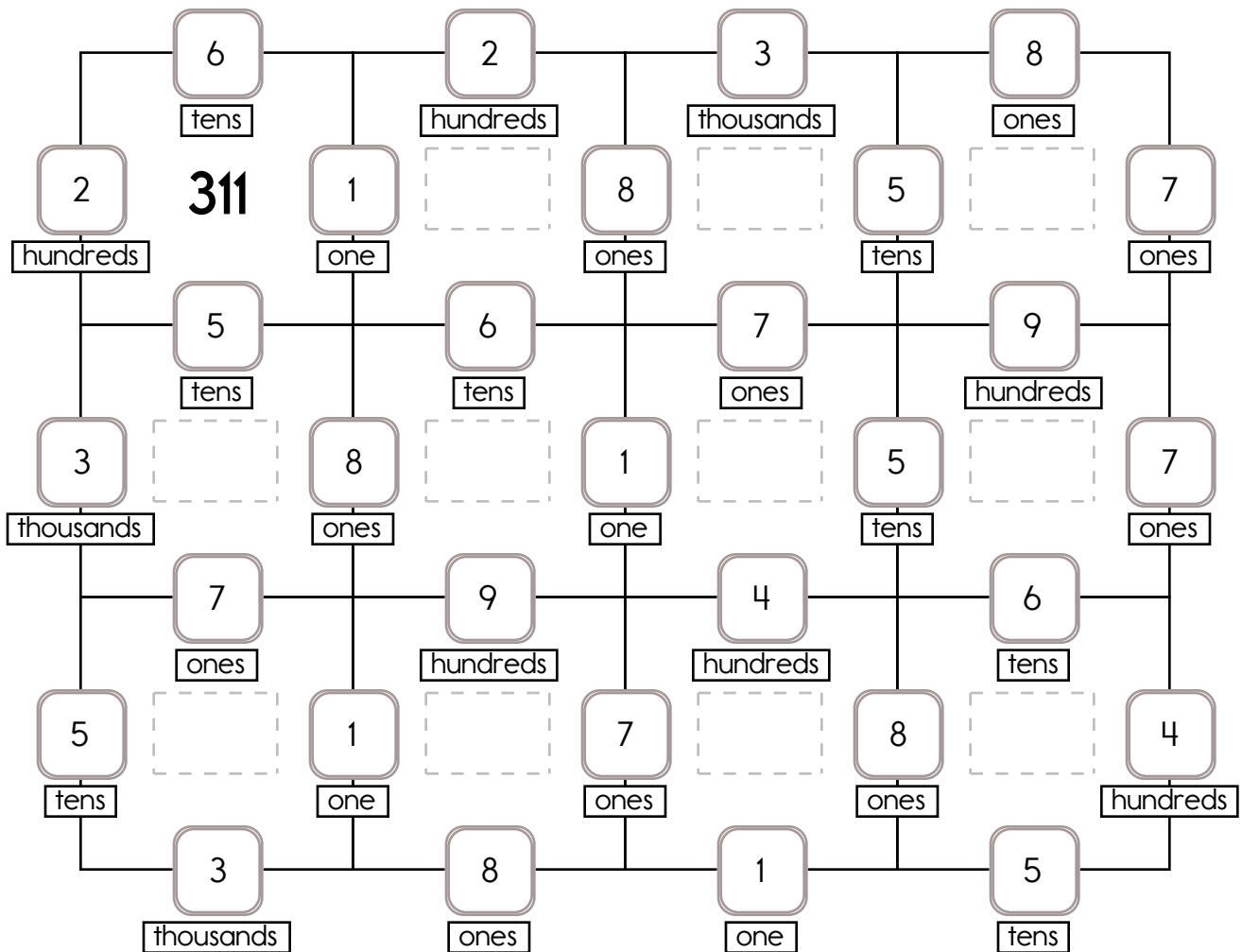
Example:

$$1 + 8 + 400 + 50 = 459$$

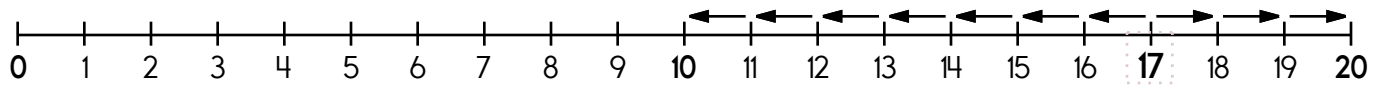
$$60 + 7 + 900 + 8 = 975$$



Fill in the missing numbers. How? The sum of the four surrounding numbers is in the center of each square.



Name: \_\_\_\_\_

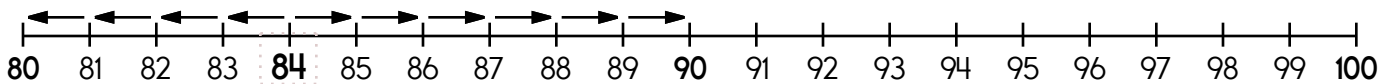
17 is 7 spots away from 10.

$17 - \underline{\quad} = 10$

17 is 3 spots away from 20.

$17 + \underline{\quad} = 20$

17 is closer to 10 or 20

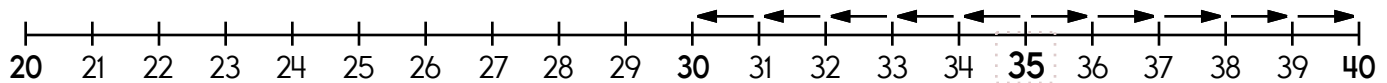
84 is        spots away from 80.

$84 - \underline{\quad} = 80$

84 is        spots away from 90.

$84 + \underline{\quad} = 90$

84 is closer to 80 or 90

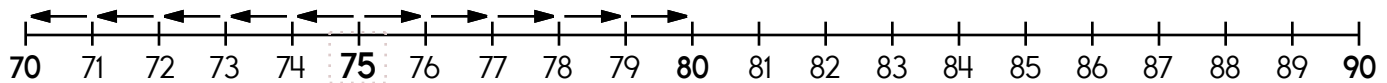
35 is        spots away from 30.

$35 - \underline{\quad} = 30$

35 is        spots away from 40.

$35 + \underline{\quad} = 40$

35 is closer to 30 or 40

75 is        spots away from 70.

$75 - \underline{\quad} = 70$

75 is        spots away from 80.

$75 + \underline{\quad} = 80$

75 is closer to 70 or 80

Name: \_\_\_\_\_

Round to the nearest ten.  
70 to 74 rounds down to 70.

75 to 80 rounds up to 80.

73 → 70

76 → \_\_\_\_\_

72 → \_\_\_\_\_

80 → \_\_\_\_\_

70 → \_\_\_\_\_

77 → \_\_\_\_\_

Round to the nearest ten.  
40 to 44 rounds down to 40.

45 to 50 rounds up to 50.

50 → 50

43 → \_\_\_\_\_

41 → \_\_\_\_\_

46 → \_\_\_\_\_

45 → \_\_\_\_\_

48 → \_\_\_\_\_

Round to the nearest ten.  
0 to 4 rounds down to 0.

5 to 10 rounds up to 10.

3 → 0

9 → \_\_\_\_\_

7 → \_\_\_\_\_

1 → \_\_\_\_\_

8 → \_\_\_\_\_

5 → \_\_\_\_\_

Round to the nearest ten.  
80 to 84 rounds down to 80.

85 to 90 rounds up to 90.

81 → 80

86 → \_\_\_\_\_

84 → \_\_\_\_\_

88 → \_\_\_\_\_

80 → \_\_\_\_\_

90 → \_\_\_\_\_

Round to the nearest ten.  
30 to 34 rounds down to 30.

35 to 40 rounds up to 40.

38 → 40

40 → \_\_\_\_\_

35 → \_\_\_\_\_

36 → \_\_\_\_\_

39 → \_\_\_\_\_

34 → \_\_\_\_\_

Name: \_\_\_\_\_

Is 848 closer to 800 or 900?

$$\begin{array}{r} 848 \\ - 800 \\ \hline \end{array} \qquad \begin{array}{r} 900 \\ - 848 \\ \hline \end{array}$$

848 is \_\_\_\_\_ away from 800.

848 is \_\_\_\_\_ away from 900.

848 is closest to \_\_\_\_\_.

Is 62 closer to 0 or 100?

$$\begin{array}{r} 62 \\ - 0 \\ \hline \end{array} \qquad \begin{array}{r} 100 \\ - 62 \\ \hline \end{array}$$

62 is \_\_\_\_\_ away from 0.

62 is \_\_\_\_\_ away from 100.

62 is closest to \_\_\_\_\_.

Is 573 closer to 500 or 600?

$$\begin{array}{r} 573 \\ - 500 \\ \hline \end{array} \qquad \begin{array}{r} 600 \\ - 573 \\ \hline \end{array}$$

573 is \_\_\_\_\_ away from 500.

573 is \_\_\_\_\_ away from 600.

573 is closest to \_\_\_\_\_.

Is 26 closer to 0 or 100?

$$\begin{array}{r} 26 \\ - 0 \\ \hline \end{array} \qquad \begin{array}{r} 100 \\ - 26 \\ \hline \end{array}$$

26 is \_\_\_\_\_ away from 0.

26 is \_\_\_\_\_ away from 100.

26 is closest to \_\_\_\_\_.

Is 180 closer to 100 or 200?

$$\begin{array}{r} 180 \\ - 100 \\ \hline \end{array} \qquad \begin{array}{r} 200 \\ - 180 \\ \hline \end{array}$$

180 is \_\_\_\_\_ away from 100.

180 is \_\_\_\_\_ away from 200.

180 is closest to \_\_\_\_\_.

Is 734 closer to 700 or 800?

$$\begin{array}{r} 734 \\ - 700 \\ \hline \end{array} \qquad \begin{array}{r} 800 \\ - 734 \\ \hline \end{array}$$

734 is \_\_\_\_\_ away from 700.

734 is \_\_\_\_\_ away from 800.

734 is closest to \_\_\_\_\_.



Name: \_\_\_\_\_

Round each number to the nearest tens. Add or subtract to get an estimate of the answer.

$$\begin{array}{r} 58 \longrightarrow \boxed{60} \\ - 26 \longrightarrow \boxed{30} \\ \hline 80 \end{array}$$

$$\begin{array}{r} 75 \longrightarrow \boxed{\phantom{00}} \\ - 13 \longrightarrow \boxed{\phantom{00}} \\ \hline \end{array}$$

$$\begin{array}{r} 63 \longrightarrow \boxed{\phantom{00}} \\ + 52 \longrightarrow \boxed{\phantom{00}} \\ \hline \end{array}$$

$$\begin{array}{r} 31 \longrightarrow \boxed{\phantom{00}} \\ + 93 \longrightarrow \boxed{\phantom{00}} \\ \hline \end{array}$$

$$\begin{array}{r} 99 \longrightarrow \boxed{\phantom{00}} \\ - 46 \longrightarrow \boxed{\phantom{00}} \\ \hline \end{array}$$

$$\begin{array}{r} 11 \longrightarrow \boxed{\phantom{00}} \\ + 76 \longrightarrow \boxed{\phantom{00}} \\ \hline \end{array}$$

$$\begin{array}{r} 33 \longrightarrow \boxed{\phantom{00}} \\ + 82 \longrightarrow \boxed{\phantom{00}} \\ \hline \end{array}$$

$$\begin{array}{r} 45 \longrightarrow \boxed{\phantom{00}} \\ - 25 \longrightarrow \boxed{\phantom{00}} \\ \hline \end{array}$$

$$\begin{array}{r} 78 \longrightarrow \boxed{\phantom{00}} \\ + 23 \longrightarrow \boxed{\phantom{00}} \\ \hline \end{array}$$

$$\begin{array}{r} 81 \longrightarrow \boxed{\phantom{00}} \\ - 15 \longrightarrow \boxed{\phantom{00}} \\ \hline \end{array}$$

$$\begin{array}{r} 64 \longrightarrow \boxed{\phantom{00}} \\ - 21 \longrightarrow \boxed{\phantom{00}} \\ \hline \end{array}$$


$$\begin{array}{r} 86 \longrightarrow \boxed{\phantom{00}} \\ + 45 \longrightarrow \boxed{\phantom{00}} \\ \hline \end{array}$$



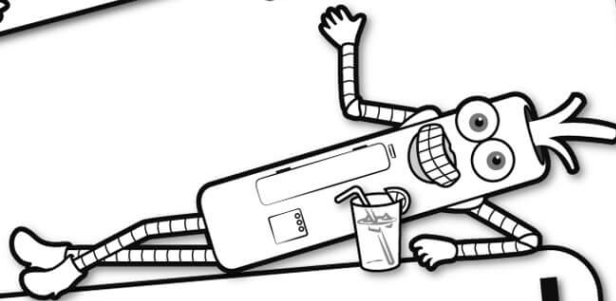
MathWorksheets.com



Free Weekly Math Worksheet Workbooks  
**Every Week!**



It's NO PREP  
at edHelper.



**edHelper.com!**

**only \$19.99  
per year**

