

Name: _____

<p>Eric told four jokes. Jacob also told four jokes. Sarah told seven jokes. Kevin told three jokes. Ava told five jokes. All the jokes were very funny. Their friends laughed. Everyone was happy. How many jokes were told in all?</p>	<p>There are three pink towels. There are seven white towels. There are five blue towels. How many towels are there in all?</p>	<p>Max has a garden. He grows peas, corn, beans, and peppers in the garden. He has seven rows of peas, three rows of corn, four rows of beans, and two rows of peppers. How many rows of vegetables does Max have in all?</p>
--	---	---

Count by 2s. Color the numbers yellow.

1	2	3	4	5	6	7	8	9	10
11	12	13	14	15	16	17	18	19	20

Count by 2s.

2 4 6 _____

12 _____

<p>What is the sum of $1 + 4 + 3$?</p> <p><input type="radio"/> 8 <input type="radio"/> 11 <input type="radio"/> 5 <input type="radio"/> 7</p>	<p>What is the difference for $9 - 8$?</p> <p><input type="radio"/> 5 <input type="radio"/> 6 <input type="radio"/> 2 <input type="radio"/> 1</p>	<p>8 is more than</p> <p><input type="radio"/> 7 <input type="radio"/> 9 <input type="radio"/> 8</p>
---	--	--

LUCK L W K E C X L Z L C K L U I C K L U C K O

TEN S R T E N U E N E E V P T E H N Z T D X T

DOWN N O P D W I R D O W N E D U O N N N B K X

Name: _____

Write < or > in each circle.

82 ○ 57

29 ○ 25

71 ○ 79

42 ○ 30

56 ○ 53

34 ○ 12

55 ○ 59

27 ○ 48

55 ○ 52

Trace. Then complete the sentence.

I see a ball.

I see a tree.

I see a book.

I see a _____

8 - 1 = _____

6 9 7

eighteen


18 14 6

6 tens and 3 ones

6 63 36

- cme
- cami
- camme
- came

Circle the word for the picture.




stage skunk socks
rings toast stump

- kaan
- cann
- can
- cun

Name: _____

Write a word that has the same vowel sound. Draw a picture of your word.

ā
a



cake

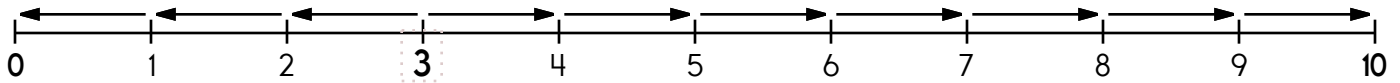
ā
a



cat

Free choice writing:

Name: _____



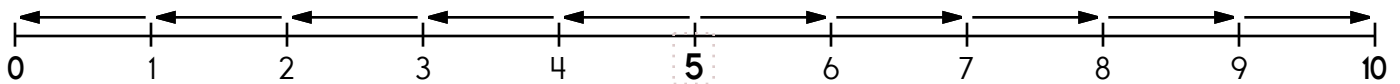
3 is 3 spots away from 0.

$$3 - \underline{\quad} = 0$$

3 is 7 spots away from 10.

$$3 + \underline{\quad} = 10$$

3 is closer to 0 or 10



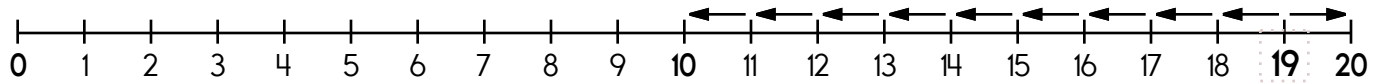
5 is _____ spots away from 0.

$$5 - \underline{\quad} = 0$$

5 is _____ spots away from 10.

$$5 + \underline{\quad} = 10$$

5 is closer to 0 or 10



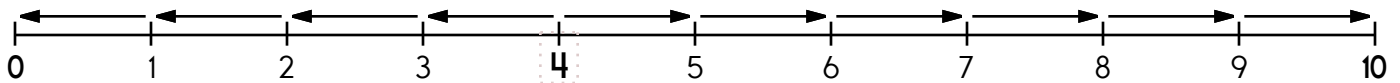
19 is _____ spots away from 10.

$$19 - \underline{\quad} = 10$$

19 is _____ spot away from 20.

$$19 + \underline{\quad} = 20$$

19 is closer to 10 or 20



4 is _____ spots away from 0.

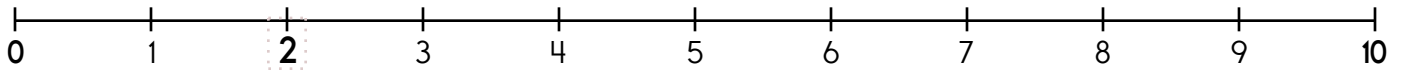
$$4 - \underline{\quad} = 0$$

4 is _____ spots away from 10.

$$4 + \underline{\quad} = 10$$

4 is closer to 0 or 10

Name: _____



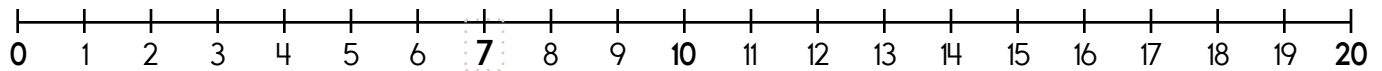
2 is 2 spots away from 0.

$$2 - \underline{\quad} = 0$$

2 is 8 spots away from 10.

$$2 + \underline{\quad} = 10$$

2 rounded to the nearest tens place is _____



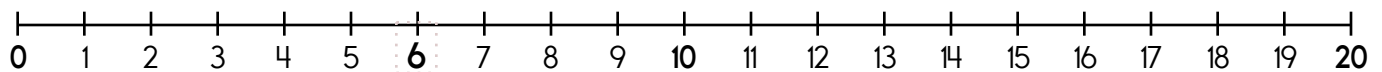
7 is _____ spots away from 0.

$$7 - \underline{\quad} = 0$$

7 is _____ spots away from 10.

$$7 + \underline{\quad} = 10$$

7 rounded to the nearest tens place is _____



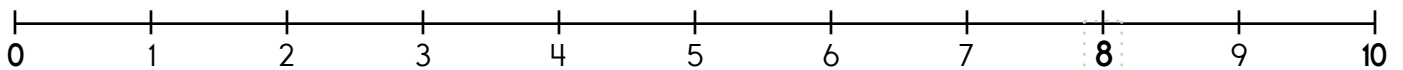
6 is _____ spots away from 0.

$$6 - \underline{\quad} = 0$$

6 is _____ spots away from 10.

$$6 + \underline{\quad} = 10$$

6 rounded to the nearest tens place is _____



8 is _____ spots away from 0.

$$8 - \underline{\quad} = 0$$

8 is _____ spots away from 10.

$$8 + \underline{\quad} = 10$$

8 rounded to the nearest tens place is _____

Name: _____

Round to the nearest ten.
10 to 14 rounds down to 10.

15 to 20 rounds up to 20.

18 → 20

19 → _____

17 → _____

11 → _____

16 → _____

20 → _____

12 → _____

10 → _____

18 → _____

Round to the nearest ten.
70 to 74 rounds down to 70.

75 to 80 rounds up to 80.

70 → 70

76 → _____

79 → _____

80 → _____

78 → _____

77 → _____

74 → _____

73 → _____

79 → _____

Round to the nearest ten.
90 to 94 rounds down to 90.

95 to 100 rounds up to 100.

96 → 100

98 → _____

93 → _____

92 → _____

90 → _____

97 → _____

100 → _____

99 → _____

91 → _____

Round to the nearest ten.
50 to 54 rounds down to 50.

55 to 60 rounds up to 60.

52 → 50

57 → _____

59 → _____

54 → _____



58 → _____

55 → _____

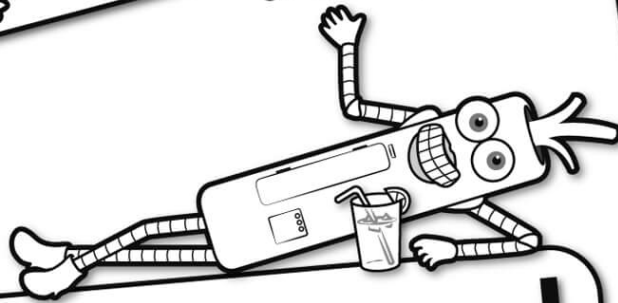
60 → _____

56 → _____

53 → _____




It's NO PREP at edHelper.




edHelper.com!


More history!



only \$19.99 per year




More science!



New ideas!



More puzzles!



Take The Boring Out Of Homework!

Easy to
print!

edHelper

Weekly K-6 "Take It Home" Books

Kids want choices
for homework.
"Take It Home" books
have fun graphics and
challenging puzzles and
problems for older kids.

"Dr. Programmer"
challenges kids..

Homework
will never be
the same!

edHelper.com

