

Name: \_\_\_\_\_

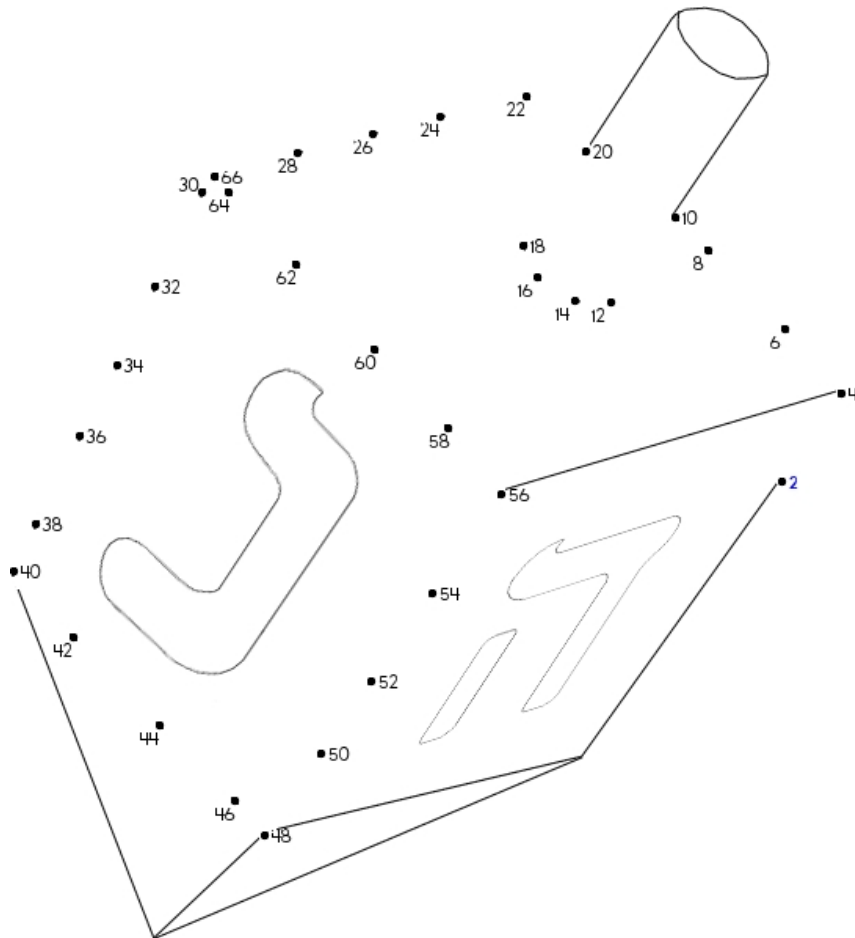
Mrs. Martin made butterscotch pudding. She put it in 12 cups. Adam and his twin brother each ate 1 cup. Adam's father ate 3 cups. How many cups of pudding were left?

Dee has 3 games. Mike has 8 games. How many games do they have in all?

Jessica is left-handed. She wrote her name 5 times with her right hand. She wrote her name 8 times with her left hand. How many times did she write her name?

Count by 2s.

2 , 4 , \_\_\_\_\_ , \_\_\_\_\_ , 10 , 12 , \_\_\_\_\_ , \_\_\_\_\_ , \_\_\_\_\_ , 22 , \_\_\_\_\_



Name: \_\_\_\_\_


Write a word that has the same vowel sound. Draw a picture of your word.

e  feet

\_\_\_\_\_

-----

\_\_\_\_\_

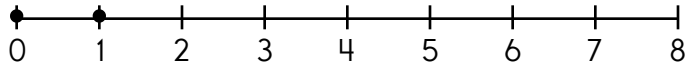
e  bed

\_\_\_\_\_

-----

\_\_\_\_\_

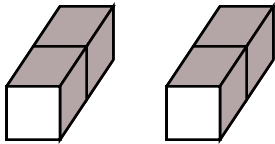
Max found 9 dimes and 5 nickels. How many coins did he find in all?



1 - \_\_\_\_ = 0

three

How many blocks?



Write the missing letter to spell hot.

h\_t   ho\_   \_ot

seven

nine

eight

8 - 4

Which shows a way to take apart 3?

3 - 2 = 1

6 - 0 = 6

3 + 3 = 6

Which shows a way to make 11?

6 + 7

6 + 5

3 + 4

5 + 2

What is the sum of 5 + 1 + 3?

4


9

10

15

Name: \_\_\_\_\_

SIX



How will you get from your house to Amanda's house?

Go up \_\_\_\_ . Go right \_\_\_\_ .

Start at your house. Go up 2. Go right 3. You knock at the door. Who answers?

\_\_\_\_\_

Start at 5f, 5F. Go left 1. Go down 3. You knock at the door. Who answers?

\_\_\_\_\_

Complete the pattern.

4 6 4 6 4 6 4 6

\_\_\_\_\_  
- - - -  
\_\_\_\_\_

What is the difference for  $14 - 3$ ?

2    6    11    0

$11 - 4 =$  \_\_\_\_\_

13    12    7

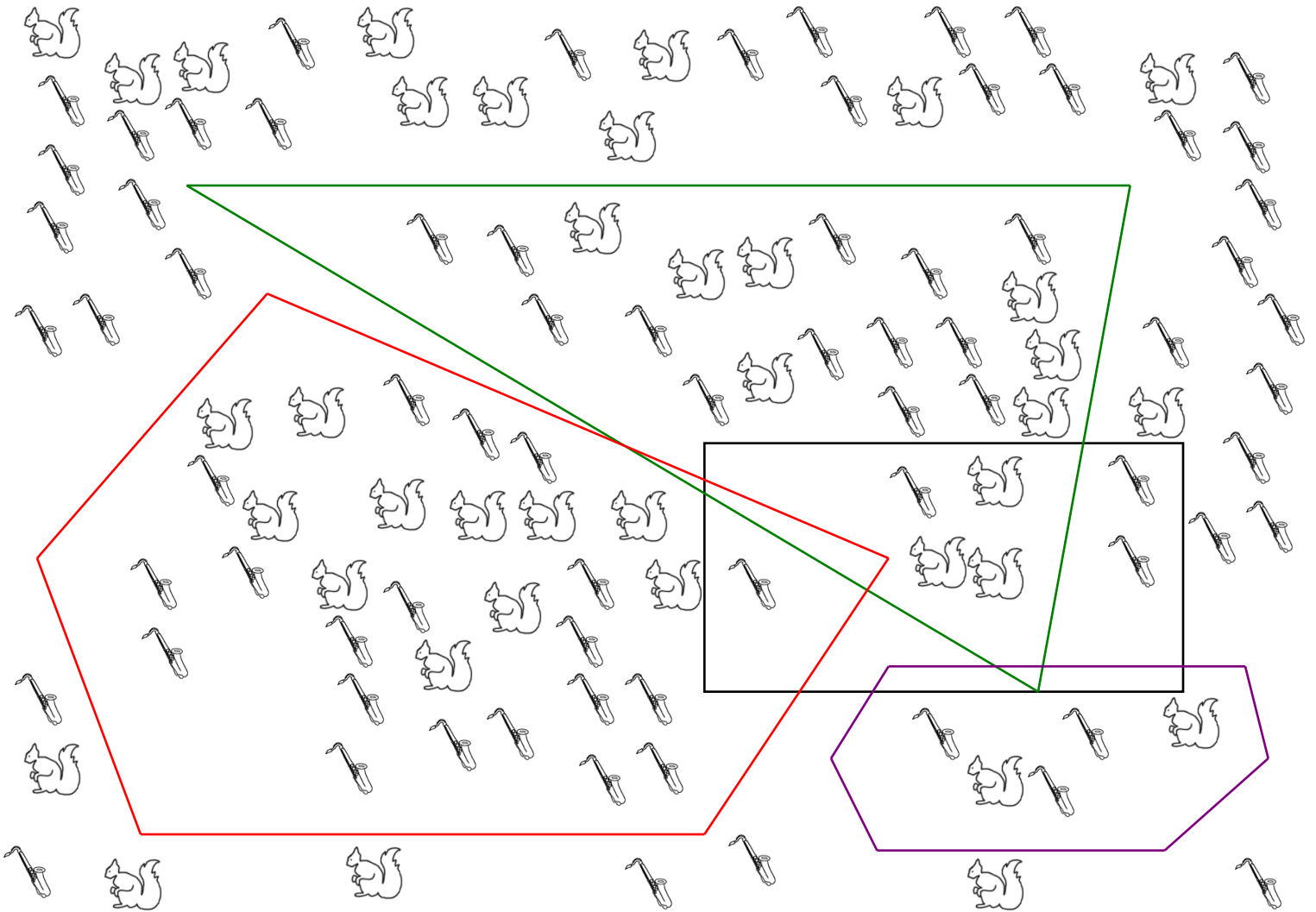
three

18    0    3

HIM H I R P H L N H I M H K M H M Z I D H O M V


WILL N L W I L L W I L R W I I L K D X I I B L W

Name: \_\_\_\_\_






How many  in the rectangle but not in the triangle? \_\_\_\_\_


How many more of  than of  in the pentagon? \_\_\_\_\_



How many  in both the rectangle and pentagon? \_\_\_\_\_

Draw the picture which is in the hexagon 2 times: \_\_\_\_\_

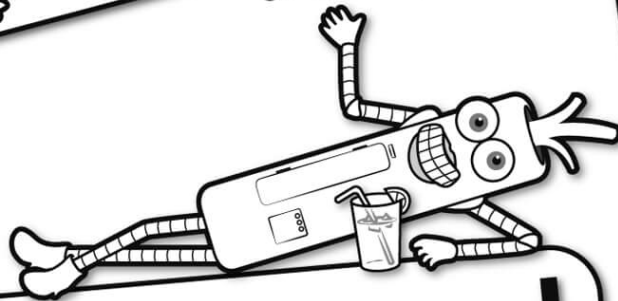
How many  or  in the rectangle? \_\_\_\_\_

How many  inside the hexagon? \_\_\_\_\_

How many  inside of any shape? \_\_\_\_\_




It's NO PREP at edHelper.




# edHelper.com!

More history!




only \$19.99 per year



Things for the classroom!

1 2 3


More science!



New ideas!



More puzzles!



# Take The Boring Out Of Homework!

Easy to  
print!

edHelper

## Weekly K-6 "Take It Home" Books

Kids want choices  
for homework.  
"Take It Home" books  
have fun graphics and  
challenging puzzles and  
problems for older kids.

"Dr. Programmer"  
challenges kids..

Homework  
will never be  
the same!

edHelper.com

