

Name: _____

9	-3		-1
			+2
			-2
+3		+1	

				+3
-1				
-3		+2		-2

-3		+2	
			+2
			-1

		-1
		-1
		-2
		-3
	+1	4

What is ten less than 53?

46, 47, _____, _____, _____, 51,

Which number should replace the first blank?

28, _____, _____, _____, 32, 33,

Which number should replace the third blank?

Name: _____

Mental Math

— #1 —

☞ Start with the number 3.

3



☞ Increase that number by 11.

9 1 4 5 4 2 7 0 8 0 (Circle your answer to double check you are correct.) _____

☞ Multiply by 6.

8 3 5 2 3 8 4 4 6 6 _____

☞ Add the number of legs on 3 chickens.

3 0 2 9 0 9 8 8 7 6 _____

Mental Math

— #2 —

■ Start with the number 4.

2 0 5 7 7 0 9 0 4 1 (Circle your answer to double check you are correct.) _____

■ Triple that number.

2 9 3 8 1 5 1 2 8 2 _____

■ Divide by 2.

6 2 8 6 6 1 5 7 4 6 _____

■ Triple that number.

8 6 1 8 6 8 1 0 7 8 _____



Name: _____

Mr. Fox does not like green eggs and ham. He does not like them with milk. He will not eat them with a pint of milk. How many cups are in a pint?

Amy liked carrots cut in round slices. They looked like orange pennies. She helped her mother cut them. Amy cut 16 slices. Her mother cut 33 slices. How many slices did they cut in all?

Mary had 28 smiley face stickers. She gave 11 stickers to Jane. How many stickers did she have left?

Peter wears blue socks. He had 10 blue socks. He lost one. How many socks are left?

1	2	3	4	5	6	7	8	9	10
---	---	---	---	---	---	---	---	---	----

$$\boxed{3} + \textcircled{1} = \underline{\quad}$$

$$3 + 1 = \underline{\quad}$$

Draw ○

1	2	3	4	5	6	7	8	9	10
---	---	---	---	---	---	---	---	---	----

$$\boxed{5} + \textcircled{5} = \underline{\quad}$$

$$5 + 5 = \underline{\quad}$$

Draw □ and ○



1	2	3	4	5	6	7	8	9	10
---	---	---	---	---	---	---	---	---	----

$$\boxed{7} + \textcircled{2} = \underline{\quad}$$



$$7 + 2 = \underline{\quad}$$

Name: _____

Draw the missing emojis. Explain the rule.



Draw the missing emojis. Explain the rule.



Name: _____

Rosa likes to play games. She has seven board games and three card games. How many games does Rosa have in all?

$7 + 3 = \underline{\quad}$

She has _____ games.

Jack had nine frogs. Six frogs hopped away. How many frogs does he have then?

$9 - 6 = \underline{\quad}$

He has _____ frogs.

A jar holds eight red marbles and five blue marbles. How many marbles are in the jar?

$8 + 5 = \underline{\quad}$

There are _____ marbles in the jar.

s a y r d t u i y u a y
d d v c j y y c c d m y
u k y i l e c h f y j r
l t y e d t u c e z s o
m p t c c r s e y c t e
t d t a e y m t p u t e

Look for these words **BACKWARDS** in the word search:

dry yes cut
eat

Count by 10s.

10 _____ 30

Cross out the **larger** number.

10 89

37 48

cuut
 cut
 kut
 cutt

1 + 9

8 is more than

9 7 8

Write the missing sign.

11 _____ 3 = 8

$2 + 7 = \square$

$4 + 3 = \square$

Circle the two numbers that make 10.

6 4 3 5 3 5

1 9 5 4 2 8 1 6

$6 + 2 = \square$ $5 + 8 = \square$ $5 + 5 = \square$

g p n v n d
o r p g q o
i e o i o p
n p g n h e
g o n z i n
o g g o g o

Word Bank
going open

Name: _____

<p>Cindy is three years older than her little brother. He is six years old. How old is Cindy?</p>	<p>Mrs. Miller sold 10 apple pies. Maria sold 5 cherry pies. How many pies were sold in all?</p>	<p>Gavin has 13 books. He gets 6 more for his birthday. How many books does he have in all?</p>
---	--	---

Write the hidden word. Start at one letter and then move either left or right. Continue in same direction.

<p>_____</p>	<p>_____</p>	<p>_____</p>
--------------	--------------	--------------

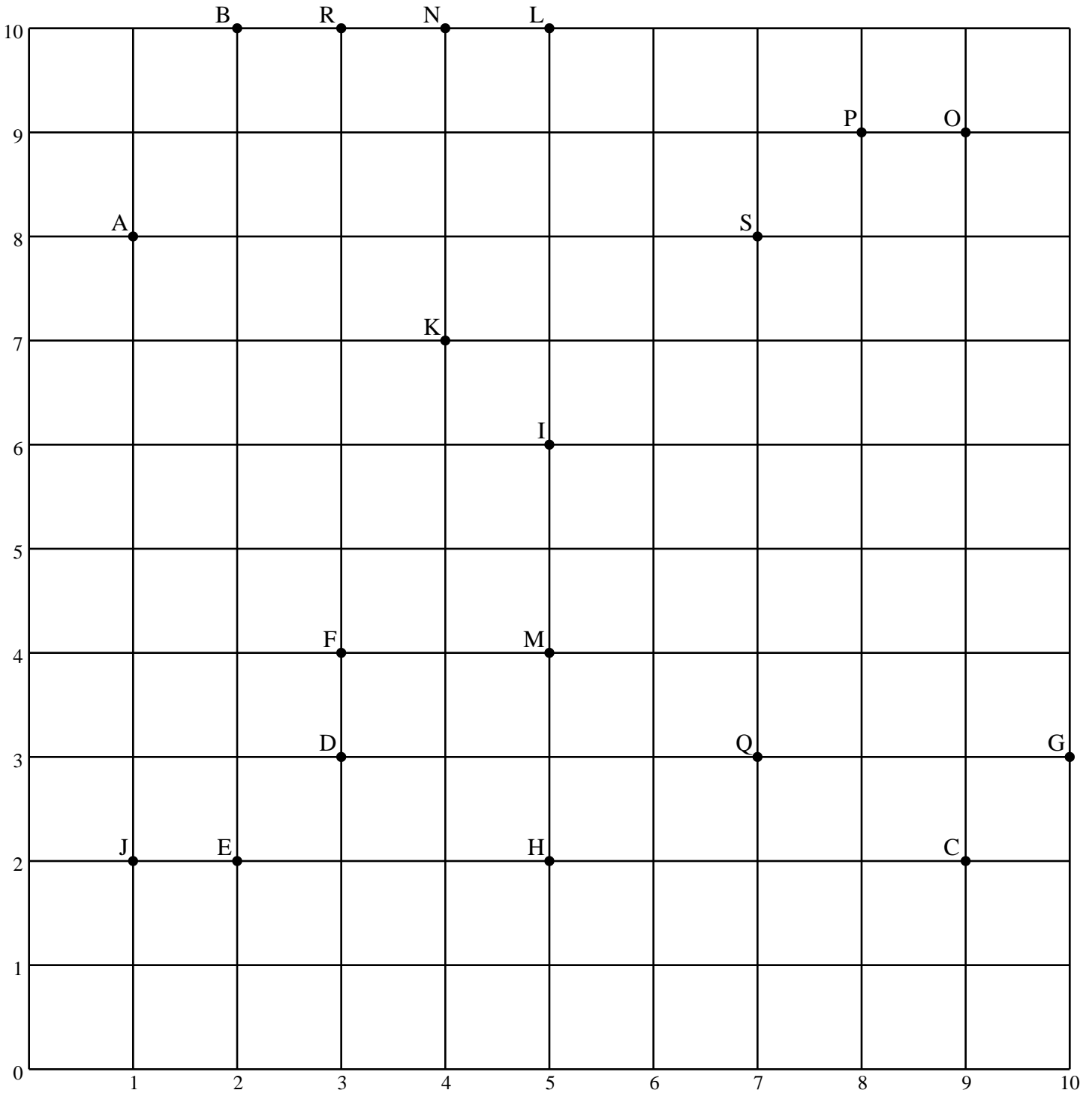
<p>What is the sum of $3 + 5 + 4$?</p> <p><input type="radio"/> 12 <input type="radio"/> 8 <input type="radio"/> 3 <input type="radio"/> 5</p>	<p>eighteen</p> <p><input type="radio"/> 18 <input type="radio"/> 0 <input type="radio"/> 1</p>	<p>What is the difference for $4 - 2$?</p> <p><input type="radio"/> 4 <input type="radio"/> 7 <input type="radio"/> 2 <input type="radio"/> 5</p>
---	---	--

SEND U X N S E H N R K N V J N B S E N D E Z G

TRAIN T R A I N A N T R I A N I T F I J Y R N T

Name: _____

Write the distance (in units) for each line segment on the coordinate grid.



\overline{FR} 6

\overline{QS} _____

\overline{DG} _____

\overline{MH} _____

\overline{NL} _____

\overline{JA} _____

Name: _____

bigger
number

smaller
number

27

46

35

77

50

98

92

72

68

59

81

24

75

35

70

98

69

81

48

52

82

96

34

8

40

26

106

46

88

62

16

17

1

36

88

79

93

43

76

45

52

74

34

45

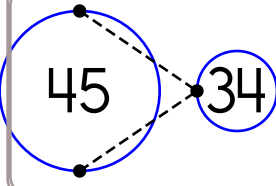
63

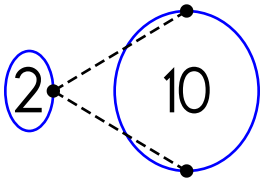
3

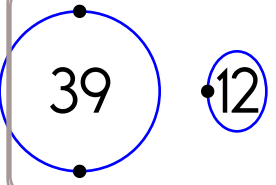
93

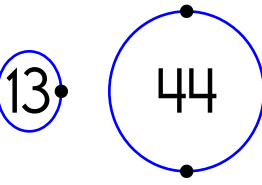
49

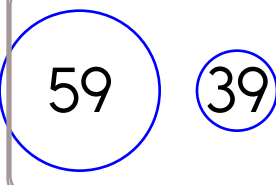
Name: _____

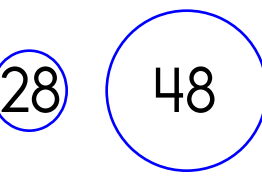

45 > 34

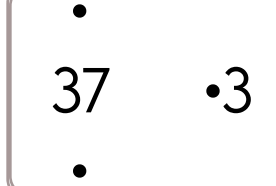

2 < 10

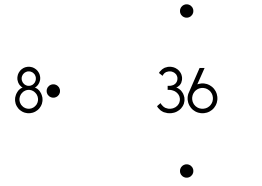

39 > 12


13 44


59 39


28 48


37 3


8 36

0 38

47 41

42 30



31 7



31 46



18 36

Name: _____

Complete the pattern.


2 4 6 8 10 12  

1 2 3 4 5 6  

5 10 15 20 25 30  


across →

down ↓

2.  ___w___

1.  ha___

4.  ___ld

3.  z___

1.		3.		
		4.		
2.				

What is the sum of $2 + 3 + 5$?

- 14 13 11
 10

$8 - 4 = \underline{\hspace{2cm}}$

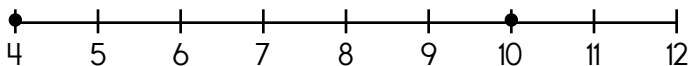
- 12 9 4

$7 + 9 = \boxed{\hspace{1cm}}$

$6 + 9 = \boxed{\hspace{1cm}}$

Which shows a way to make 8?

- $6 + 2$ $2 + 9$
 $6 + 5$ $8 + 7$



$10 - \underline{\hspace{1cm}} = 4$

Read the word.
Clap your hand for each syllable.
How many syllables?

had

1 2 3

$5 + 8 = \boxed{\hspace{1cm}}$

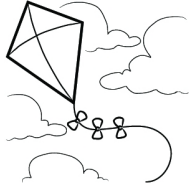
$3 + 6 = \boxed{\hspace{1cm}}$

$6 + 3 = \boxed{\hspace{1cm}}$

Name: _____

Write a word that has the same vowel sound. Draw a picture of your word.

i



kite

i



pig

Trace. Then complete the sentence.

We went to the school.

We went to the store.

We went to the _____

fourteen

6 14 5

3 is more than

2 4 3

6 tens and 9 ones

96 9 69

HAND H L D Y H F H N A D M E H A N D P Z D A J

WHEN Q P N W U S H E W H E N Z B W H E W T E E

Name: _____

6	-3		-1			-2		-3
				+3			-1	
								-1
				+2	+2			+1
-1		+1		+2	+3			-3
-2		-2		+3	8	-3		
							+1	2

6	7	8	2	5	2	4	9	9
+ 1	+ 1	+ 8	+ 5	+ 1	+ 6	+ 3	+ 4	+ 6

$9 - 5 = \underline{\quad}$ <input type="radio"/> 13 <input type="radio"/> 8 <input type="radio"/> 4	four <input type="radio"/> 7 <input type="radio"/> 4 <input type="radio"/> 0	5 is more than <input type="radio"/> 4 <input type="radio"/> 6 <input type="radio"/> 5
---	---	---

Name: _____

Complete the pattern.

3 6 9 12 15 18 21 _____

4 8 12 16 20 24 28 _____

20 24 28 32 36 40 44 _____

3 4 5 6 7 8 9 _____

4 6 8 10 12 14 16 _____

12 15 18 21 24 27 30 _____

I like to _____.

3 tens and 1 one

- 3 13 31

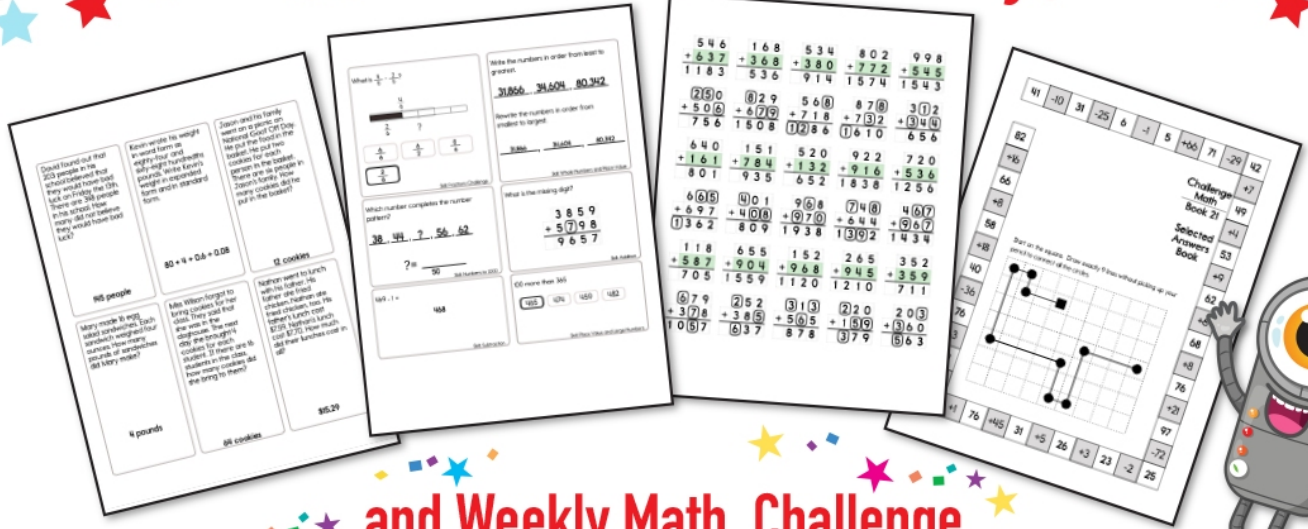
7 tens and 3 ones

- 73 37 7


7 is more than

- 8 7 6


Subscribe to Get Answer Keys





and Weekly Math, Challenge
Workbooks, Posters, Daily Reading,
and so much more!



SUBSCRIBE TO RECEIVE EVEN MORE
Answer Keys • Effective Activities • Access
to as many printables as you need!

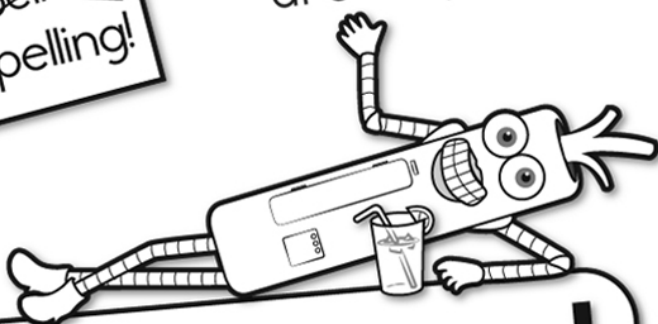


edHelper.com




It's NO PREP at edHelper.

More history!




edHelper.com!



New online math games!



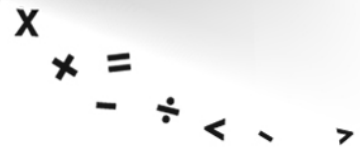
More things for the classroom!




More science!



New ideas!



More puzzles!



Take The Boring Out Of Homework!

Easy to
print!

edHelper

Weekly K-6 "Take It Home" Books

Kids want choices
for homework.
"Take It Home" books
have fun graphics and
challenging puzzles and
problems for older kids.

"Dr. Programmer"
challenges kids..

Homework
will never be
the same!

edHelper.com

