

Name: \_\_\_\_\_

Complete the pattern.

1	2	3	4	5	6	7	
---	---	---	---	---	---	---	--

2	4	6	8	10	12	14	
---	---	---	---	----	----	----	--

4	8	12	16	20	24	28	
---	---	----	----	----	----	----	--

3	6	9	12	15	18	21	
---	---	---	----	----	----	----	--

Complete the pattern.

5	10	15	20	25	30		
---	----	----	----	----	----	--	--

6	9	12	15	18	21		
---	---	----	----	----	----	--	--

15	20	25	30	35	40		
----	----	----	----	----	----	--	--

Name: \_\_\_\_\_

Complete the pattern.

8	10	12	14	16			
---	----	----	----	----	--	--	--

20	24	28	32	36			
----	----	----	----	----	--	--	--

5	6	7	8	9			
---	---	---	---	---	--	--	--

4	5	6	7	8			
---	---	---	---	---	--	--	--

Complete the pattern.

12	16	20	24	28			
----	----	----	----	----	--	--	--

10	15	20	25	30			
----	----	----	----	----	--	--	--

12	15	18	21	24			
----	----	----	----	----	--	--	--

Name: \_\_\_\_\_

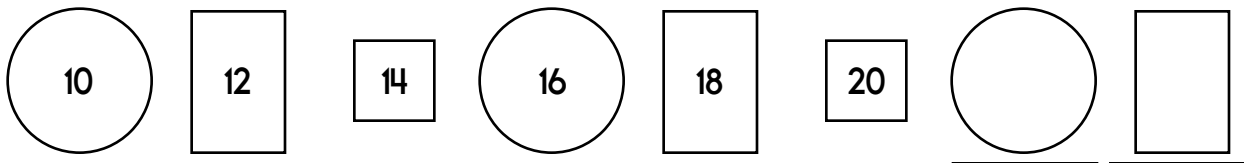
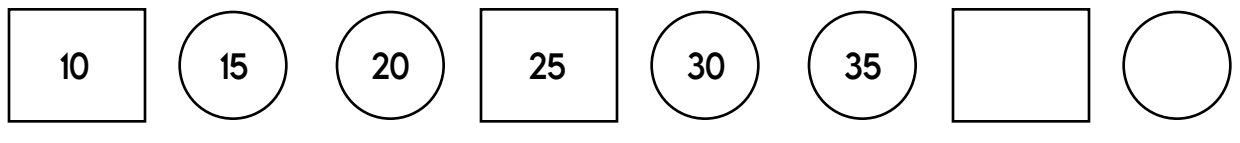
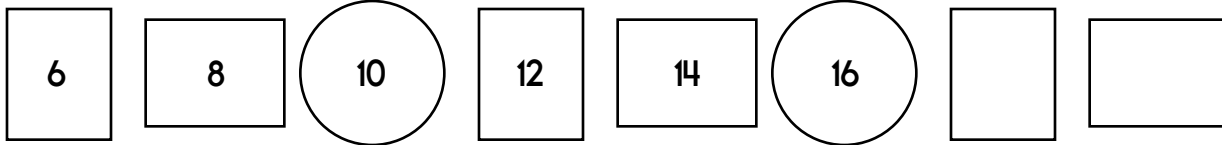
Robert baked 9 cookies. He needs 24 in all.  
How many more cookies does he need?

Baba Nina made 25 blini. Her family ate 19 of  
them. How many blini were left?

Megan had 3 dimes and 9 pennies. She gave  
2 dimes to her best friend. How much money  
does she have left?

Emma has 3 coins. They equal 75¢. What  
coins does Emma have?

Complete the pattern.





word root **ultra** can mean **beyond**

**ultraviolet, ultrasonic**

Name: \_\_\_\_\_

Puzzle:

	3	11
3		4
11	4	+

Work Area:

	3	11
3		4
11	4	+

The sum for each column  
and row is given.



= \_\_\_\_\_



= \_\_\_\_\_

	8
-	1
<hr/>	

94, \_\_\_\_\_, \_\_\_\_\_, \_\_\_\_\_,  
\_\_\_\_\_, \_\_\_\_\_, 100

$$5 + 5 + 2 = \underline{\quad}$$

$$5 + 5 + 3 = \underline{\quad}$$

Circle the odd numbers.

1 14 28

7 63 96

52 885 239

Justin is baking oatmeal  
raisin cookies. He puts  
exactly 2 raisins into each  
cookie. If he used 8 raisins,  
how many cookies do you  
think he made?

H, K, I, L, J, M, K,  
\_\_\_\_\_, L, O, M, P


Write the missing sign.

$$10 \underline{\quad} 2 = 12$$



Name: \_\_\_\_\_

Print the number 8.



Color in the month that comes after March.

January	February	March	April
May	June	July	August
September	October	November	December

Write how much to add.

<p>1 <math>\bigcirc + 3</math> 4 <math>\bigcirc + 3</math> 7</p> <p>Start with <u>1</u>.</p> <p>Add <u>3</u>. Repeat.</p>	<p>2 <math>\bigcirc +</math> 4 <math>\bigcirc +</math> 6</p> <p>Start with ____.</p> <p>Add _____. Repeat.</p>	<p>5 <math>\bigcirc +</math> 6 <math>\bigcirc +</math> 7</p> <p>Start with ____.</p> <p>Add _____. Repeat.</p>
<p>3 <math>\bigcirc</math> 6 <math>\bigcirc</math> 9</p> <p>Start with ____.</p> <p>Add _____. Repeat.</p>	<p>4 <math>\bigcirc</math> 5 <math>\bigcirc</math> 6</p> <p>Start with ____.</p> <p>Add _____. Repeat.</p>	<p>2 <math>\bigcirc</math> 4 <math>\bigcirc</math> 6</p> <p>Start with ____.</p> <p>Add _____. Repeat.</p>
<p>1 <math>\bigcirc</math> 4 <math>\bigcirc</math> 7</p> <p>Start with ____.</p> <p>Add _____. Repeat.</p>	<p>5 <math>\bigcirc</math> 6 <math>\bigcirc</math> 7</p> <p>Start with ____.</p> <p>Add _____. Repeat.</p>	<p>3 <math>\bigcirc</math> 5 <math>\bigcirc</math> 7</p> <p>Start with ____.</p> <p>Add _____. Repeat.</p>

**DISH** I S S W D I S H Z A V D K D X S I D S H I I

**BOX** N B O K T B D X K H B O X W A V O B O X B Y

**SO** O S O O S O Y S S O S O H H J O V M W L F Z

word root **cred** can mean **believe**

**credible, credulous, incredulous**



Name: \_\_\_\_\_

How many?



Fill in the missing numbers.

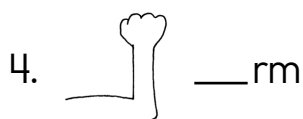

1	☆ 2	☆ 3	4	5	6	7	8	9	10
11		13		15		17	18	19	20

Trace and write.

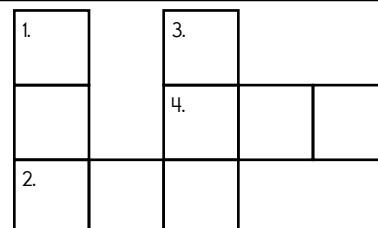
\_\_\_\_\_

or or or or or or

across →



down ↓



Wendy had two trees.  
She bought seven  
more trees. How  
many trees does she  
have?

$$2 + 7 = \underline{\quad}$$

She has \_\_\_\_\_  
trees.

$$0 + 5 = \underline{\quad}$$

☐ 5    ☐ 15    ☐ 8

nine    eight    four

8 is more than

☐ 7    ☐ 9    ☐ 8

$$3 + 7$$

$$14 - 6$$



Name: \_\_\_\_\_

want • they • eight • on • foxes • ropes • roses • hope • drop  
goes

word has the sound of o like in hot	word has the sound of o like in cone	does not fit

Hunter walked 3 blocks to the store. He bought some socks. He walked 4 blocks to his grandmother's house. He walked 3 blocks home. How far did he walk in all?



$$4 + \underline{\quad} = 7$$

five

Count by 3s.

7      13

three

one

8 tens and 3 ones

☐ 105   ☐ 83   ☐ 3

fifteen

☐ 3   ☐ 19   ☐ 15

$$8 - 7 = \underline{\quad}$$

☐ 7   ☐ 1   ☐ 6

Write the correct symbol.

>

greater than

<

less than

=

equal to

13 ○ 11

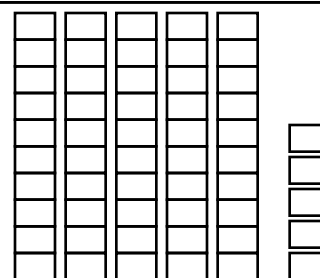
64 ○ 66

86 ○ 85

34 ○ 34

70 ○ 77

57 ○ 53



\_\_\_\_ tens \_\_\_\_ ones

Number = \_\_\_\_



Name: \_\_\_\_\_

Emily told on her brother. He put four bugs on her arms and one bug on her leg. How many bugs did her brother put on her in all?	Max found 8 dimes and 5 nickels. How many coins did he find in all?	Alex ate 5 hot dogs. David ate 3 hot dogs. How many hot dogs did they eat in all?
--	---	---

Complete the patterns.

7 4 3 7 4 3 7 4

x G x G x G x G

Which shows a way to make 13?

- ☐ 7 + 4      ☐ 4 + 3  
☐ 5 + 9      ☐ 4 + 9

Write the words into the boxes.

ask  
our

--	--	--

--	--	--

NOT O U B O O T T N O T T N S O N O T A T R N L  
 SHINE H O N K I S H I N E S H I N I E S W N N P Q  
 WEEK E E W K U W E E K E W E E K K W G E T W E L  
 BOTH U N S D C B Y B O H T H Q O B B O T H E R P  
 SHARK H Z A N C S F G S H A R K S H O R K A A E H  
 BLEW B L E W E R W E E C S L B L E W L L O T B W





Name: \_\_\_\_\_

$9 + 2 = \underline{\quad}$

$10 + 2 = \underline{\quad}$

Circle all the ways to make 5.

$$\begin{array}{ccc} 2 + 2 & 1 + 4 & 3 + 2 \\ 2 + 5 & 1 + 5 & 3 + 3 \end{array}$$

Circle all the ways to make 8.

$$\begin{array}{ccc} 6 + 2 & 4 + 6 & 7 + 1 \\ 4 + 4 & 7 + 3 & 5 + 3 \end{array}$$

$18 - \underline{\quad} = 13$

Double two.

What is ten more than 56?

Circle the even numbers.

5 91 28

6 47 33

84 489 352

9, 11, 13, \_\_\_\_\_, 17, \_\_\_\_\_,  
\_\_\_\_\_

Count by 2s.

Nathan needs thirteen cents. How much more money does he need?



$26 + \underline{\quad} = 36$

96, 112, 128, 144,  
\_\_\_\_\_, 176, 192, 208

What is ten less than 88?

Cool, huh?

double it

Write the number.

A      B

add 7

Write the number.

<u>C</u>	<u>D</u>
1	1
2	2
3	3
4	4
5	5
6	6
7	7
8	8
9	9
10	10
11	11
12	12
13	13
14	14
15	15
16	16
17	17
18	18
19	19
20	20
21	21
22	22
23	23
24	24
25	25
26	26
27	27
28	28
29	29
30	30
31	31
32	32
33	33
34	34
35	35
36	36
37	37
38	38
39	39
40	40
41	41
42	42
43	43
44	44
45	45
46	46
47	47
48	48
49	49
50	50
51	51
52	52
53	53
54	54
55	55
56	56
57	57
58	58
59	59
60	60
61	61
62	62
63	63
64	64
65	65
66	66
67	67
68	68
69	69
70	70
71	71
72	72
73	73
74	74
75	75
76	76
77	77
78	78
79	79
80	80
81	81
82	82
83	83
84	84
85	85
86	86
87	87
88	88
89	89
90	90
91	91
92	92
93	93
94	94
95	95
96	96
97	97
98	98
99	99
100	100

subtract 4

Write the number.

E

subtract 2

Write the number.

F	G
---	---

**A + B + C + D + E + F + G**

---

\_\_\_\_\_t\_y\_ \_ \_ \_ \_e

4 after 11



Name: \_\_\_\_\_

Color in the boxes.

9 or 0 = pink, 6 or 5 = black,

8 or 3 = blue

What is the hidden number? \_\_\_\_\_

3	8	6	3	3	8	3
6	5	8	5	6	6	6
3	3	9	0	0	9	5
6	5	8	5	5	8	9
8	8	3	3	3	8	0
6	3	5	8	6	0	6
3	8	8	3	9	3	5
5	8	6	9	5	8	5
3	6	9	0	0	0	9

$2 + 9$

$7 - 5$

$7 - 4$

$1 + 7$

Write the missing letter to spell **been**.

be\_n    b\_en    \_een

What is the difference for  $4 - 1$ ?

☐ 7   ☐ 8   ☐ 3   ☐ 5

7 tens and 4 ones

☐ 4   ☐ 2   ☐ 74

$2 - 2 = \underline{\hspace{2cm}}$

☐ 11   ☐ 13   ☐ 0

What day comes after Monday?


\_\_\_\_\_

Read the word.  
Clap your hand for each syllable.  
How many syllables?

they

1      2      3

Show 1 o'clock.



Count by 2s.

10      12      \_\_\_\_\_

Name: \_\_\_\_\_



Write the missing vowel.

w



i

g

s\_\_nk

a



j

l

f\_\_rm

e



b


u

b\_\_d

r i i q d l w e n w h l  
h n x t f p f t i f h z  
i i p s a o i z q i w h  
t h q e h s f b i w s r  
g k s y t h l i j t j w  
i l l i s t l n p h m h

Write the missing letter to spell how.

ho\_ h\_w \_ow

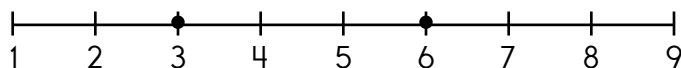


\_\_\_ : \_\_00

8 - 6

Look for these words BACKWARDS in the word search:

fit she new  
ill



$$3 + \underline{\quad} = 6$$

What is the sum of  
 $4 + 4 + 3$ ?

☐ 12 ☐ 8 ☐ 15 ☐ 11

4 is more than

☐ 4 ☐ 5 ☐ 3

$1 + 0 = \underline{\quad}$

☐ 10 ☐ 1 ☐ 14

BUG F S B O H G B U G T G D U L X K Y W B Q B E  
GREW G F R E W Q Z O G G R E W J F H D R W G E E  
MUCH Z M U C H H H L C G U B H M U U C H D U U C  
DOES V D E O D O E S E E I T R W D P X E N B D O  
ONCE N W O N C E N C O N C E M Z O E I C E Y Q E



Name: \_\_\_\_\_

Keep the hundreds chart in mind when completing this page:

1	2	3	4	5	6	7	8	9	10
11	12	13	14	15	16	17	18	19	20
21	22	23	24	25	26	27	28	29	30

Fill in the missing numbers on the hundreds chart pieces.

Add 1.

45	
----	--

9	
---	--

54	
----	--

44	
----	--

Add 10.

59

22

64

77

70

2

5

Add 1 or 10.

79

47	
----	--

61

38	
----	--

15

19



Name: \_\_\_\_\_

Complete the pattern.

20 24 28 32 36 40 44 \_\_\_\_\_

4 5 6 7 8 9 10 \_\_\_\_\_

6 9 12 15 18 21 24 \_\_\_\_\_

15 20 25 30 35 40 45 \_\_\_\_\_

12 16 20 24 28 32 36 \_\_\_\_\_

What is the sum of  
 $1 + 1 + 2$ ?

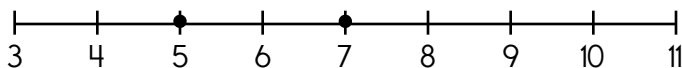
☐ 7 ☐ 15 ☐ 4 ☐ 5

What is the difference  
for  $11 - 2$ ?

☐ 9 ☐ 8 ☐ 0 ☐ 3

4 tens and 9 ones

☐ 4 ☐ 9 ☐ 49




$7 - \underline{\quad} = 5$

Count by 10s.

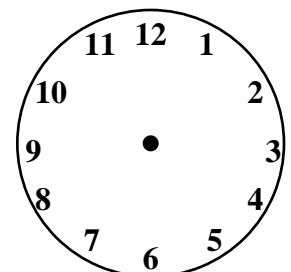
33 \_\_\_\_\_ 53

$8 + 6 = \boxed{\quad}$

Show 7 o'clock.



Show 12 o'clock.





It's NO PREP at edHelper.

More history!

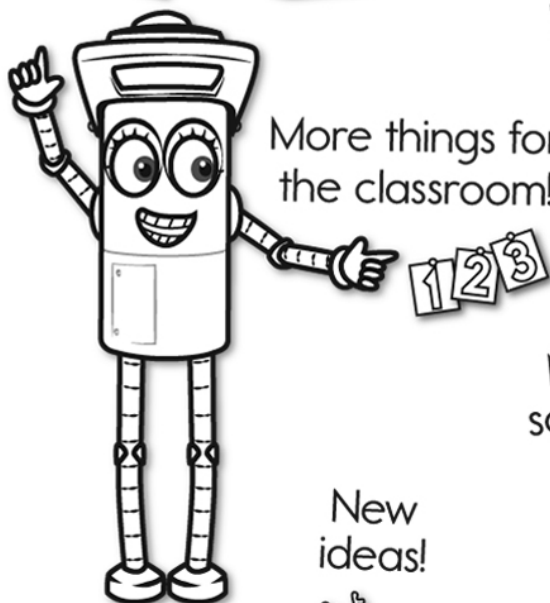


# edHelper.com!

New online math games!



More things for the classroom!



More science!



New ideas!



x  
+ =  
- ÷  
< >

More puzzles!





