

Name: _____

Only use a pencil to write the numbers on the blank lines. You do not need any scrap paper! Solve it in your head. If you forget a number, then start over. Cool, huh?

Mental Math



= Do it
in your
head!

imagine 4 in your head

add 3

Write the number.

_____ A

imagine 2 in your head

add 3

add 8

Write the number.

_____ B _____ C

imagine 2 in your head

add 6

subtract 4

Write the number.

_____ D

imagine 6 in your head

subtract 4

add 7

Write the number.

_____ E

What is the sum?

$A + B + C + D + E$

Wow! Great job! That's the answer, but do you know how to SPELL the number?

_____ e _____ - _____ u r

8 after 17 _____

9 before 19 _____

5 before 15 _____

6 after 11 _____

3 before 11 _____

4 before 12 _____

1 after 15 _____

8 before 18 _____

6 before 17 _____

9 after 19 _____

7 before 14 _____

2 before 16 _____

Name: _____



	+1	-1	+2	-2
35				
23				
42				
69				
88				
51				
76				
37				
70				
64				

Name: _____

Miss Glenn has 7 girls and 10 boys in her class. How many students does she have in all?

Jason has 37 cousins. Some of them are second cousins. It is a very big family. What digit is in the ones place?

Emily does not like green peas. She ate 2 peas. She hid 8 peas under her plate. She ate 4 more peas. She hid 8 more peas. How many peas did she eat in all?

Alex went to the beach. He played in the sand. His father gave him 20¢ to buy a drink. He has 2¢ left. How much did he spend?

$\begin{array}{r} 1 \\ + 7 \\ \hline \end{array}$	$\begin{array}{r} 1 \\ + 2 \\ \hline \end{array}$	$\begin{array}{r} 1 \\ + 9 \\ \hline \end{array}$	$\begin{array}{r} 4 \\ + 9 \\ \hline \end{array}$	$\begin{array}{r} 4 \\ + 1 \\ \hline \end{array}$	$\begin{array}{r} 4 \\ + 6 \\ \hline \end{array}$	$\begin{array}{r} 3 \\ + 7 \\ \hline \end{array}$	$\begin{array}{r} 7 \\ + 4 \\ \hline \end{array}$	$\begin{array}{r} 5 \\ + 6 \\ \hline \end{array}$
---------------------------------------------------	---------------------------------------------------	---------------------------------------------------	---------------------------------------------------	---------------------------------------------------	---------------------------------------------------	---------------------------------------------------	---------------------------------------------------	---------------------------------------------------

Hannah has 3 pairs of shoes. Her sister has 6 pairs of shoes. How many pairs do they have in all?

Count by 1.

1 _____ 3 _____

4 is 3 more than _____ .

seven

ten

Name: _____

Complete the pattern.

5	10	15	20	25	30	35	
---	----	----	----	----	----	----	--

2	4	6	8	10	12	14	
---	---	---	---	----	----	----	--

4	8	12	16	20	24	28	
---	---	----	----	----	----	----	--

3	6	9	12	15	18	21	
---	---	---	----	----	----	----	--

Complete the pattern.

1	2	3	4	5	6		
---	---	---	---	---	---	--	--

12	16	20	24	28	32		
----	----	----	----	----	----	--	--

2	3	4	5	6	7		
---	---	---	---	---	---	--	--

Name: _____

Complete the pattern.

20	25	30	35	40			
----	----	----	----	----	--	--	--

10	12	14	16	18			
----	----	----	----	----	--	--	--

12	15	18	21	24			
----	----	----	----	----	--	--	--

10	15	20	25	30			
----	----	----	----	----	--	--	--

Complete the pattern.

15	18	21	24	27			
----	----	----	----	----	--	--	--

6	8	10	12	14			
---	---	----	----	----	--	--	--

16	20	24	28	32			
----	----	----	----	----	--	--	--

Name: _____

Circle the third number.

9, A, F, 3, 1, B, F, F, B, 6,
6, 5, 4, 3, D, D, 9

How much is this?



How many dots on the bug?



Circle the fifth letter.


D, F, A, 8, 4, 4, B, A, 4, 1,
7, F, D, B, 4, D, 8, 4, A

6, 8, 10, 12, 14, 16, 18,
_____, 22, 24

Circle all the ways to make 4.

1 + 3 2 + 2 3 + 3
1 + 1 4 + 1 3 + 2
2 + 1 2 + 4

What time is it?



____:____

Write the numbers.

four _____

six _____

one _____

ten _____

nine _____

Write these numbers in
order from largest to
smallest.

0, 1, 14

____, ____, ____

$9 + 3 = \underline{\quad}$

$10 + 3 = \underline{\quad}$

B, E, _____, K, N, Q,
T, W, Z

How much is this?



How many?



29, ____, 31, ____, 33,
____, ____

10, ____, 14, 16, 18, 20,
22, 24, 26

Name: _____

Write a word that has the same vowel sound. Draw a picture of your word.

u



book

u



cup

Count by 2s.

9

13

$8 + 3 =$

$3 + 7 =$

$6 + 7 =$

$3 + 3 =$

Trace. Then complete the sentence.

Look at the moon

Look at the stars

Look at the

H A R M R U R W R G L R H A H A R M M H R A M M R

M I X I Y W G P N H B S X M O X D L C M I X X K

Name: _____


Eight people sat on a bench. Three of them left. How many people are still sitting on the bench?	Sara has seven candy bars. She buys three more. How many candy bars does she have in all?	Anne put 1 scoop of ice cream in her glass. Then she put 2 more scoops in her glass. How many scoops did she put in her glass in all?
--------------------------------------------------------------------------------------------------	-------------------------------------------------------------------------------------------	---------------------------------------------------------------------------------------------------------------------------------------

Write <, >, or =.		
25 ○ 40	98 ○ 97	16 ○ 63
37 ○ 38	26 ○ 22	99 ○ 52
85 ○ 14	49 ○ 44	84 ○ 84

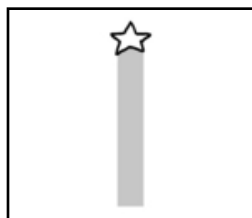
Mr. Allen drove 8 miles to the shop. He bought three pints of ice cream. Ms. Moore drove 5 miles to the shop. She bought four pints of ice cream. How many pints of ice cream did they buy in all?	Which shows a way to take apart 9? ○ $12 + 2 = 14$ ○ $9 - 8 = 1$ ○ $9 + 9 = 18$	11 - 4
		Write the missing sign. 7 ____ 3 = 10

DEW	R D E W W D G D I M J W V D E W W L Q O D
MANY	M A N Y Y A M A A N Y Z P M Q M U M M Y N
FARM	Y M G A M O F A R M U A F A R M E E B W P
MOTHER	H M O T H E R T M U T H U R W E S B U D P
TODAY	T O O D A Y T T O X Y D R F A T O D A Y H
SAW	A W S A S A W E P W Q L O C V S A A W S R

Name: _____



Distance from \bullet B to \bullet C



centimeter

Distance from \bullet E to \bullet F



centimeters

Distance from \bullet A to \bullet B



centimeters

Distance from \bullet D to \bullet E



centimeters

Name: _____

Complete the pattern.

2	3	4	5	6	7	8	
---	---	---	---	---	---	---	--

9	12	15	18	21	24	27	
---	----	----	----	----	----	----	--

25	30	35	40	45	50	55	
----	----	----	----	----	----	----	--

2	3	4	5	6	7	8	
---	---	---	---	---	---	---	--

Complete the pattern.

12	16	20	24	28	32		
----	----	----	----	----	----	--	--

8	10	12	14	16	18		
---	----	----	----	----	----	--	--

15	18	21	24	27	30		
----	----	----	----	----	----	--	--

Name: _____

Complete the pattern.

3	4	5	6	7			
---	---	---	---	---	--	--	--

10	15	20	25	30			
----	----	----	----	----	--	--	--

16	20	24	28	32			
----	----	----	----	----	--	--	--

10	12	14	16	18			
----	----	----	----	----	--	--	--

Complete the pattern.

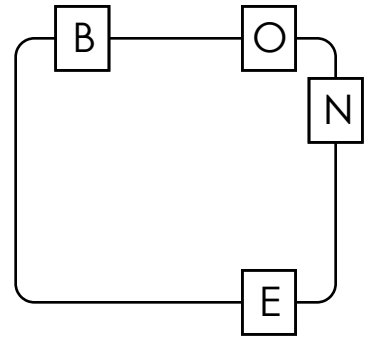
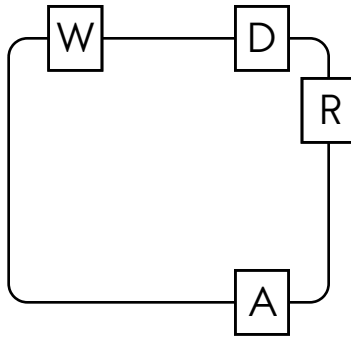
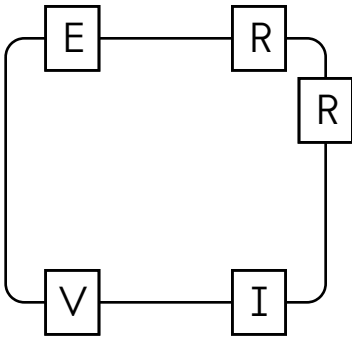
25	30	35	40	45			
----	----	----	----	----	--	--	--

12	16	20	24	28			
----	----	----	----	----	--	--	--

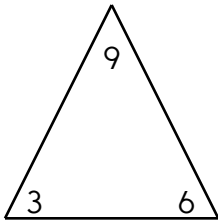
2	3	4	5	6			
---	---	---	---	---	--	--	--

Name: _____

Write the hidden word. Start at one letter and then move either left or right. Continue in same direction.



Fill in the blanks using numbers from the fact family.



<input type="text"/>	+	<input type="text"/>	=	<input type="text"/>
<input type="text"/>	+	<input type="text"/>	=	<input type="text"/>
<input type="text"/>	-	<input type="text"/>	=	<input type="text"/>
<input type="text"/>	-	<input type="text"/>	=	<input type="text"/>

Count by 10s.

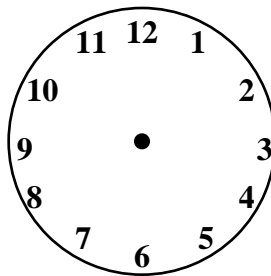
21

31

nine

four

Show 12 o'clock.



3 + 4 =

t	f	k	o	h	a
h	w	e	r	c	e
e	n	h	t	o	i
i	f	e	u	g	h
r	r	d	f	o	r
h	t	c	f	q	x

Word Bank
for their

7 + 5

five

7 tens and 9 ones

☐ 1 ☐ 9 ☐ 79

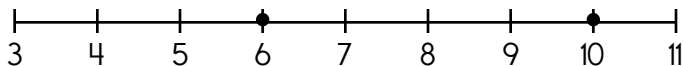
7 is more than

☐ 7 ☐ 8 ☐ 6

eighteen

☐ 9 ☐ 18 ☐ 14

six



6 + _____ = 10

Write the missing letter to spell him.

h_m hi_ _im

4 + 8 =

7 + 5 =

Name: _____

Complete the pattern.

6, 4, 5, 2, 6, 4, 5, _____, _____, _____, _____, _____



1 2 3 4 5 6 7 8 9 10

$$8 - \cancel{1} = \underline{\quad}$$

$$8 - 1 = \underline{\quad}$$

Draw X

1 2 3 4 5 6 7 8 9 10

$$3 - \cancel{3} = \underline{\quad}$$

$$3 - 3 = \underline{\quad}$$

Draw □ and X

1 2 3 4 5 6 7 8 9 10

$$5 - \cancel{2} = \underline{\quad}$$


$$5 - 2 = \underline{\quad}$$

Name: _____

Write the missing vowel.



f _ _ ll



z _ _ o



pl _ _ ne

Write the missing vowel.




g _ _ rl



y _ _ s



bo _ _ k



_____ : ____ 00

1 + 7

Write a number sentence.
Then draw a picture to show your number sentence.

_____ - _____ =

Write an addition number sentence using the numbers 6, 2, and 4.

Count by 5s.

10 _____ 20

What is the difference for 15 - 2?

☐ 13 ☐ 18 ☐ 5 ☐ 11

4 is more than

☐ 4 ☐ 5 ☐ 3

What is the sum of 1 and 6?

☐ 7 ☐ 11 ☐ 3

Circle the two numbers that make 6.

3 4 3

1 2 5

2 4 3 5

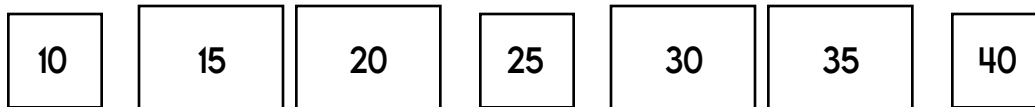
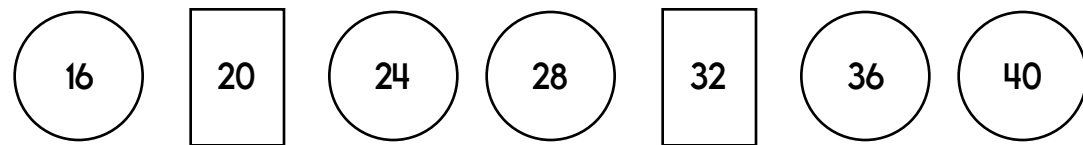
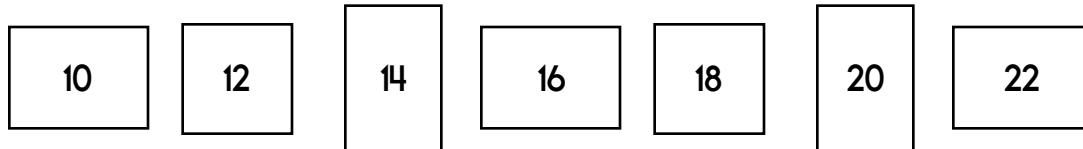
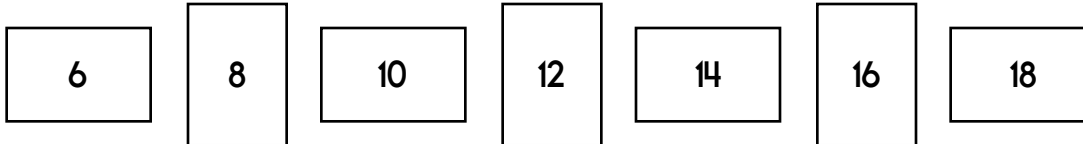
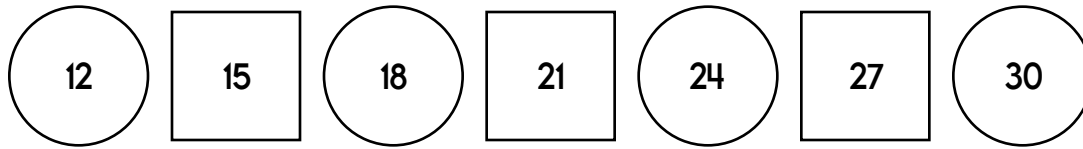
1 3 3 4

7 + 3

12 - 9

Name: _____

Complete the pattern.



The girls drink 4 pints of milk. The boys drink 7 pints of milk. How many pints of milk do they drink in all?

eight

☐ 19

☐ 0

☐ 8

$2 + 4 = \square$

$2 + 9 = \square$

$10 - 6$

$5 + 9$

Count by 3s.

13

19

$6 + 7 = \square$

Write the missing letter to spell who.

wh_

w_o

_ho

$2 + 7 = \square$

$3 + 6 = \square$

$9 - 2$

$8 + 2 = \square$

$3 + 8 = \square$



It's NO PREP at edHelper.

More history!



edHelper.com!



New online math games!



New ideas!



More science!



More puzzles!



