

Name: \_\_\_\_\_

Gavin bought three ski hats. He bought nine more ski hats. How many ski hats does he have in all?

$$3 + 9 = \underline{\quad}$$

He had \_\_\_\_\_ ski hats.

Jacob built a fort. He used eight big blankets and seven small blankets. How many blankets did he use in all?

$$8 + 7 = \underline{\quad}$$

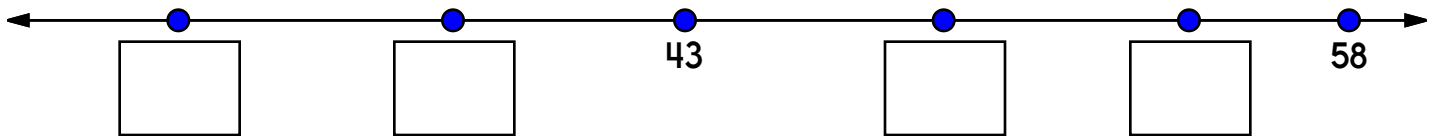
He used \_\_\_\_\_ blankets.

Anna had ten valentines. She gave away two valentines. How many valentines does she have left?

$$10 - 2 = \underline{\quad}$$

She has \_\_\_\_\_ valentines left.

Write the missing numbers to complete the number line.



Use these numbers: 54, 32, 49, 38

Write a number sentence. Then draw a picture to show your number sentence.

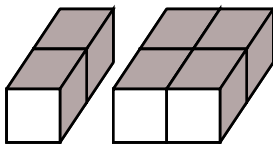
\_\_\_\_\_ - \_\_\_\_\_ = \_\_\_\_\_

n a h i s  
n u f m f  
o s f y h  
f h t j h  
p i u e w

his

- cold
- cald
- culd
- coold

How many blocks?

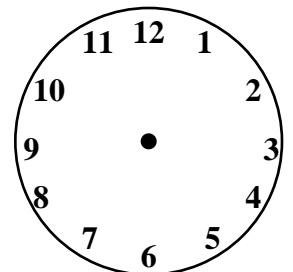


What day comes after Tuesday?  
\_\_\_\_\_

Write the missing sign.

$$12 \underline{\quad} 8 = 4$$

Show 7 o'clock.



$$9 + 3 = \boxed{\quad}$$

$$8 + 9 = \boxed{\quad}$$

$$7 + 5 = \boxed{\quad}$$

$$8 + 7 = \boxed{\quad}$$


$$5 + 4 = \boxed{\quad}$$

$$8 + 3 = \boxed{\quad}$$

Name: \_\_\_\_\_

<p>Maria went fishing. She caught 3 big fish. She caught an old shoe. She caught 2 little fish. She caught 1 more big fish. How many fish did she catch in all?</p>	<p>Sarah liked the Hug Holiday. She got five hugs from her mother. She got three hugs from her father. She got two hugs from her sister. She got three hugs from her grandmother. How many hugs did Sarah get in all?</p>	<p>Hannah had four pairs of pink pajamas and three pairs of blue pajamas. She gave her sister one pair of pajamas. How many pairs did Hannah have left?</p>
---	---	---

What is going on in the picture? Write a topic and a title to describe the picture.



Topic: \_\_\_\_\_

\_\_\_\_\_

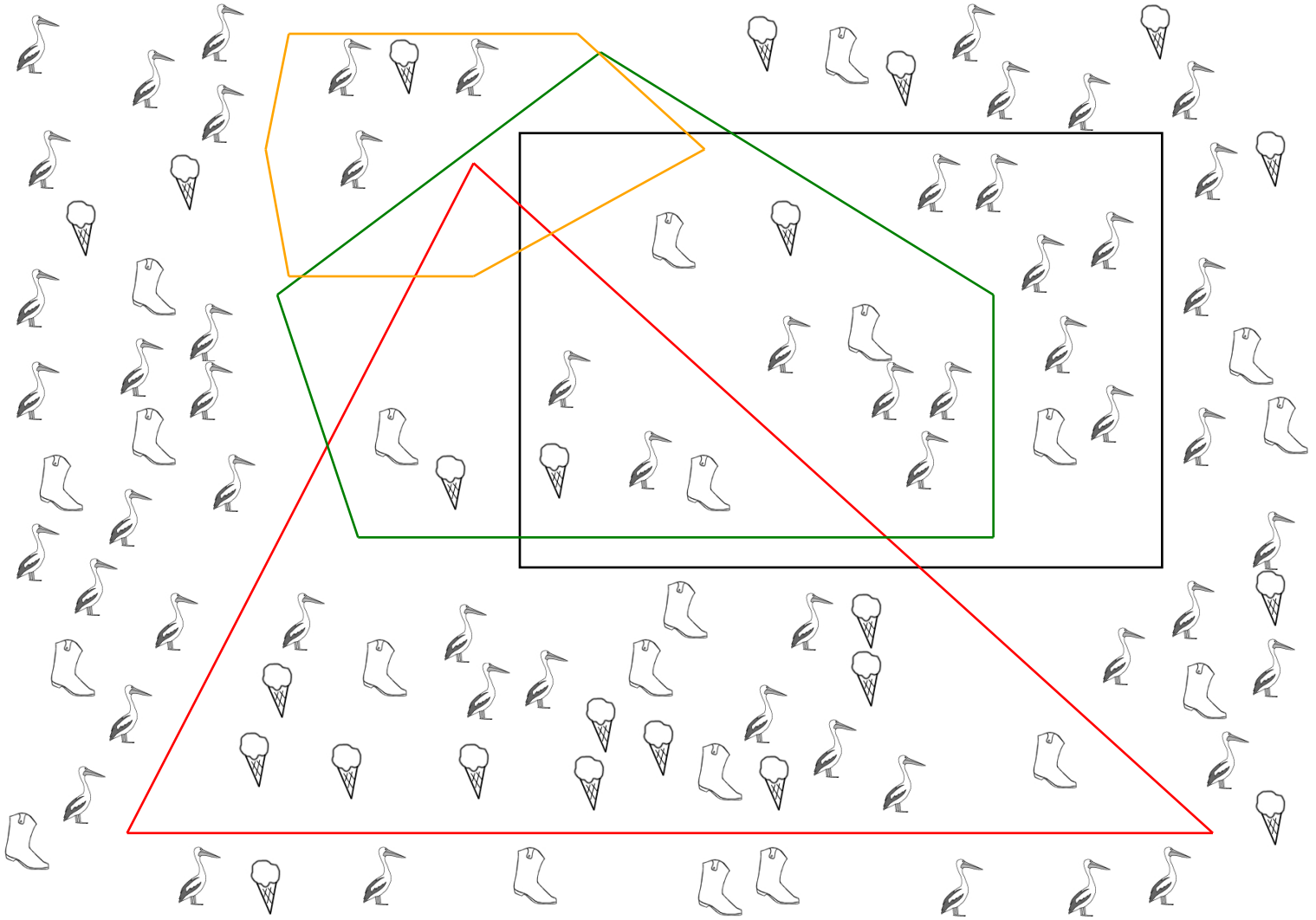
Title: \_\_\_\_\_


\_\_\_\_\_

<p>3 tens and 5 ones</p> <p><input type="radio"/> 35    <input type="radio"/> 3    <input type="radio"/> 503</p>	<p>eighteen</p> <p><input type="radio"/> 18    <input type="radio"/> 2    <input type="radio"/> 7</p>	<p>4 is more than</p> <p><input type="radio"/> 3    <input type="radio"/> 4    <input type="radio"/> 5</p>
--	---	--


<p>e e o d p r d e o b o s l e h w d t s h h o w d x</p> <p><b>Word Bank</b> how      does</p>	<p>Circle the words.</p> <p>summersunweedbluekiddishredeastbirdoff haspicksunbirdpinkreddishfellsixthseenblue sistersaypickdishcornlandoffsummerthese</p>
--	---


Name: \_\_\_\_\_





How many  in both the triangle and pentagon? \_\_\_\_\_



This picture is in the hexagon only once. Draw it: \_\_\_\_\_

How many  in the triangle but not in the pentagon? \_\_\_\_\_

How many  inside of any shape? \_\_\_\_\_

How many  inside the hexagon? \_\_\_\_\_

How many  are not inside of any shapes? \_\_\_\_\_

How many more of  than of  in the pentagon? \_\_\_\_\_

Name: \_\_\_\_\_

0	+3		-3			+2		+2
				+1		-1		
							+2	
+3		-2		+1		-3	+1	
-2						+3	+2	
	+2		-1	2	-1		9	

4	-3				+1	6	
		+2		-3		-3	
	+3			8		3	
+1				+2		-1	
	+1		-2	6	2	-2	0

Name: \_\_\_\_\_

Circle the two numbers that make 8.

4      1      7	6      7      2	4      5      4
6      1      3      5	5      1      4      4	2      4      6      1
5      3      6      1	4      1      6      7	6      4      3      5

Count by 2s.

7      \_\_\_\_\_      11

Write the   numbers in order from smallest to largest.

1	2	3	4	5
6	7	8	9	10
11	12	13	14	15
16	17	18	19	20

\_\_\_\_\_

Count by 1.

4      \_\_\_\_\_      6      \_\_\_\_\_

\_\_\_\_\_ is 1 more than 4.

11 - 9

3 + 4

cut

kut

kuh

cutt

four

six

eight

15 - 7 = \_\_\_\_\_

8       10       3

Write the missing letter to spell have.

ha\_e    hav\_    \_ave

SEED E W I E T O S D X S X S D E E D D S E E D

DRAW S A D R A W T D R W A A R D D D R A W W D

SUMMER S S U H M U R S U M M E R M Y A E M F S E

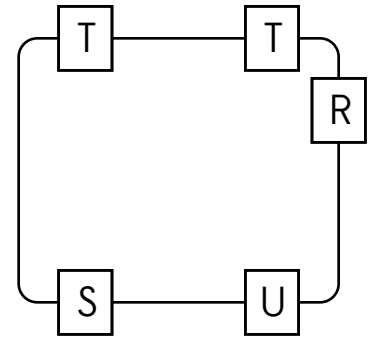
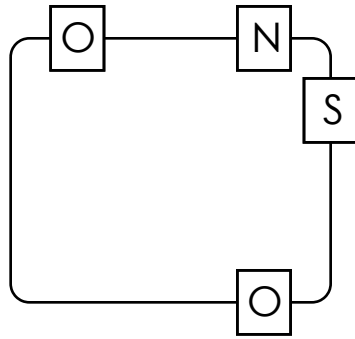
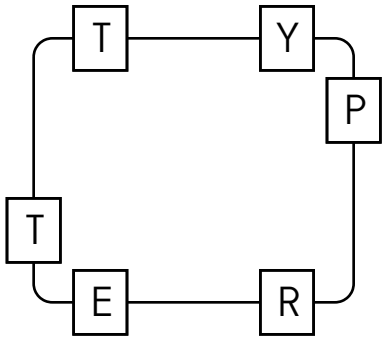
AT T T L A T J K A O G E A T M Y T D A A T A

GET E G E T E E O Z Q T Y G J X G U H T T T T

ODD Z F G D P O X Q D E C O O D D A O D D N L

Name: \_\_\_\_\_

Write the hidden word. Start at one letter and then move either left or right. Continue in same direction.



Trace. Then complete the sentence.

I hurt my leg.

I hurt my nose.

I hurt my chin.

I hurt my \_\_\_\_\_

\_\_\_\_\_

\_\_\_\_\_

Name: \_\_\_\_\_

Jenna loves to eat pickles! Today she had four pickles with her lunch and four pickles as a snack. How many pickles did Jenna eat today?

$$4 + 4 = \underline{\quad}$$

She ate \_\_\_\_\_ pickles.

Hunter had nine eggs. He ate two eggs. How many eggs were left?

$$9 - 2 = \underline{\quad}$$

He had \_\_\_\_\_ eggs left.

Nathan saw three icicles. Then he saw seven more icicles. How many icicles did he see altogether?

$$3 + 7 = \underline{\quad}$$

He saw \_\_\_\_\_ icicles.

Look under the mat for the key.

Look under the mat for the key.

**BROTHER** B R E T H U R T B R O T H E R T E R G R

**LIE** Q L O E J D L I E V L M A I O U B C S E

**STOOL** A L T K U S T O O L D O O S T R O O L V

**SAW** C I R S A A W K F U G Q A A P S A W A S

**BIRTH** R B B I R T H Q S W U B I R H I C H L I

**AGAIN** V D N G Z N I A G A I N N A G I N E I P

**TOGETHER** T O G E A T H E R T O G E T H E R A Q X

**HUG** U H D H O H G U W U G J G H U G G M G T

Name: \_\_\_\_\_

Complete the pattern.

1	2	3	4	5	6	7	_____
---	---	---	---	---	---	---	-------

5	10	15	20	25	30	35	_____
---	----	----	----	----	----	----	-------

4	8	12	16	20	24	28	_____
---	---	----	----	----	----	----	-------

2	4	6	8	10	12	14	_____
---	---	---	---	----	----	----	-------



3	6	9	12	15	18	21	_____
---	---	---	----	----	----	----	-------

Fill in the missing numbers.

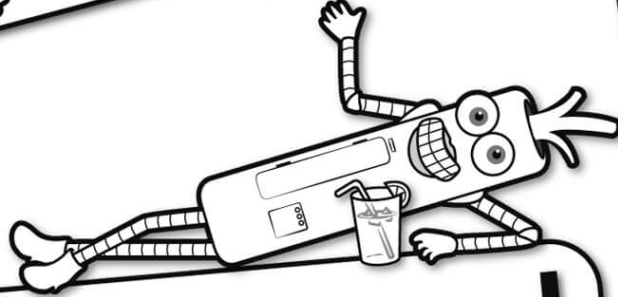
71	72		74	75	76	77		79	80
81	82		84	85	86	87		89	90
91		93	94	95	96		98	99	100

- |   |   |  |
|---|---|--|
| <p>six</p> <p><input type="radio"/> 6    <input type="radio"/> 1    <input type="radio"/> 3</p> | <p><math>2 + 4 = \underline{\quad}</math></p> <p><input type="radio"/> 15    <input type="radio"/> 8    <input type="radio"/> 6</p> | <p>8 tens and 6 ones</p> <p><input type="radio"/> 8    <input type="radio"/> 86    <input type="radio"/> 530</p> |
|---|---|--|






It's NO PREP at edHelper.




# edHelper.com!

More history!



Things for the classroom!



only \$19.99 per year


More science!



New ideas!



More puzzles!



# Take The Boring Out Of Homework!

Easy to  
print!

edHelper

## Weekly K-6 "Take It Home" Books

Kids want choices  
for homework.  
"Take It Home" books  
have fun graphics and  
challenging puzzles and  
problems for older kids.

"Dr. Programmer"  
challenges kids..

Homework  
will never be  
the same!

edHelper.com

