

Name: _____

How much is this?



C, G, K, O, _____, W

19, 20, _____, 22, _____,

_____, _____

How many?



How much is this?



28, _____, 30, _____, 32,

_____, _____

Draw a rectangle that is about 4 cm long on each side. Do not use a ruler. Just guess!

N, M, N, M, N, M, N,
_____, N, M, N, M

Write the numbers.

one _____

nine _____

two _____

How many dots on the bug?



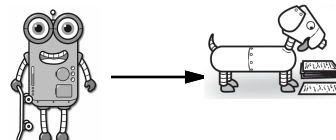
How many?





What is ten less than 72?

Name: _____

Help Robot find Rover. Color the boxes with odd sums to make a path.



	$7 + 4 =$	$6 + 7 =$	$8 + 3 =$	$4 + 7 =$	$5 + 4 =$	$6 + 3 =$	$2 + 6 =$
$3 + 3 =$	$7 + 9 =$	$5 + 5 =$	$8 + 4 =$	$6 + 2 =$	$5 + 9 =$	$2 + 7 =$	$8 + 9 =$
$1 + 7 =$	$4 + 8 =$	$4 + 4 =$	$1 + 9 =$	$3 + 1 =$	$7 + 3 =$	$7 + 7 =$	$3 + 2 =$
$9 + 8 =$	$6 + 1 =$	$9 + 6 =$	$7 + 8 =$	$2 + 5 =$	$1 + 2 =$	$9 + 2 =$	$5 + 8 =$
$4 + 3 =$	$4 + 9 =$	$1 + 7 =$	$6 + 8 =$	$3 + 5 =$	$8 + 9 =$	$2 + 4 =$	$9 + 1 =$
$6 + 9 =$	$9 + 4 =$	$1 + 6 =$	$5 + 2 =$	$6 + 3 =$	$2 + 9 =$	$3 + 9 =$	$2 + 9 =$
$6 + 4 =$	$9 + 4 =$	$7 + 5 =$	$4 + 6 =$	$7 + 1 =$	$8 + 9 =$	$8 + 3 =$	

Name: _____

It took Megan 11 minutes to drink her soda. It took Hunter 8 minutes. How many minutes more did it take Megan?

Amy counted 37 parents at the picnic. Rose counted 9 more than Amy. How many parents did Rose count?

Babe Ruth hit 2 homeruns on Monday. He hit 3 homeruns on Tuesday. How many more did he hit on Tuesday?

The girls picked 8 apples, 4 peaches, and 5 pears. How many apples and pears did they pick?

1	2	3	4	5	6	7	8	9	10
---	---	---	---	---	---	---	---	---	----

$$\boxed{9} + \textcircled{1} = \underline{\hspace{2cm}}$$

$$9 + 1 = \underline{\hspace{2cm}}$$

Draw ○

1	2	3	4	5	6	7	8	9	10
---	---	---	---	---	---	---	---	---	----

$$\boxed{2} + \textcircled{5} = \underline{\hspace{2cm}}$$

$$2 + 5 = \underline{\hspace{2cm}}$$

Draw □ and ○



1	2	3	4	5	6	7	8	9	10
---	---	---	---	---	---	---	---	---	----

$$\boxed{6} + \textcircled{4} = \underline{\hspace{2cm}}$$



$$6 + 4 = \underline{\hspace{2cm}}$$

Name: _____

Draw the missing emojis. Explain the rule.



Draw the missing emojis. Explain the rule.



Name: _____

Jason peeled an orange. He separated it into nine pieces. He gave nine pieces to his friend, Justin. How many pieces does Jason have left?

$$9 - 9 = \underline{\quad}$$

He has _____
pieces left.

Max has one penny in his pocket. He finds two more pennies while walking to the store. How many pennies does Max have now?

$$1 + 2 = \underline{\quad}$$

He has _____
pennies.

Hannah is making cards for her friends. She made seven purple cards. She made five green cards. How many cards did Hannah make in all?

$$7 + 5 = \underline{\quad}$$

She made _____
cards.

Make 8.

$$\underline{7} + \underline{1} = \underline{\quad}$$

$$\underline{6} + \underline{\quad} = \underline{\quad}$$

$$\underline{7} + \underline{\quad} = \underline{\quad}$$

$$\underline{3} + \underline{\quad} = \underline{\quad}$$

$$\underline{\quad} + \underline{5} = \underline{\quad}$$

$$\underline{\quad} + \underline{2} = \underline{\quad}$$

$$14 - 9 = \underline{\quad}$$

Fill in the numbers.

45	46		48		50
	56	57	58	59	
65	66	67	68	69	70
75	76	77	78	79	80
85	86	87	88		90

34		36	37
54	55		57
		66	

JET T J T I J E T J B H T P J E T T N E S G M E
RIVER F I K V R I H V U U R S R I V E R B E L P V

Name: _____

When Alex went to the zoo he saw four hippos and four zebras. How many animals did Alex see?	Jacob's house has four blue windows and two yellow windows. How many windows are there in all?	Max had eight bags of candy. He gave three bags to his brother. How many bags of candy were left?
--	--	---

Count by 2s. Color the numbers orange.

1	2	3	4	5	6	7	8	9	10
11	12	13	14	15	16	17	18	19	20

Count by 2s.

2 4 6 _____

12 _____

Count by 5s.



= 5¢



How much?

_____ ¢

eight

one

3 is more than

☐ 2 ☐ 3 ☐ 4

9 tens and 4 ones

☐ 9 ☐ 94 ☐ 4

twelve

☐ 0 ☐ 12 ☐ 9

Count by 1.

1 _____ 4 _____

3 is _____ more than 1.

Write the missing letter to spell sing.

si_g sin_ _ing

6 + 7

Name: _____

Draw the missing spots in the patterns.















Show the pattern by putting the same letter under each shape or number.


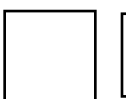
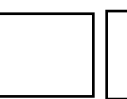
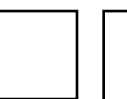
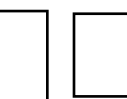
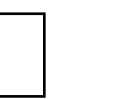
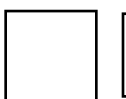
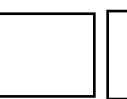

8 3 2 8 3 2 8 3 2 8 _ 2 8

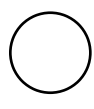
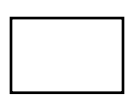
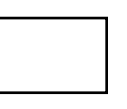
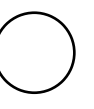
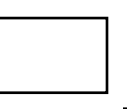
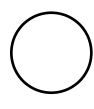
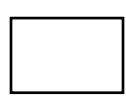
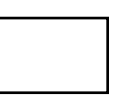

A B C A B C A B C A B C A

1 1 0 1 1 0 1 1 0 1 1 _ 1

3 9 2 4 3 9 2 _ 3 9 2 4 3

        _      

      _   

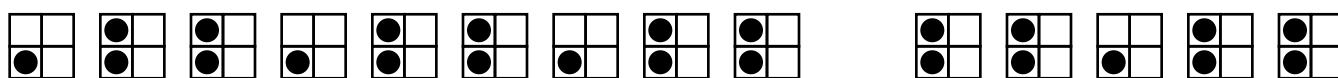
     _    

Name: _____

Draw the missing spots in the patterns.

7 1 9 1 7 1 _ 1 7 1 9 1 7

4 3 7 4 3 7 4 3 _ 4 3 7 4



Draw your own patterns.

1 0 3 4 1 0 3 4 1 0 3 4 1

ABCD pattern

--	--	--	--	--	--	--	--	--	--	--	--	--	--

Draw an ABBB pattern.

--	--	--	--	--	--	--	--	--	--	--	--	--	--

Draw an ABCB pattern.

--	--	--	--	--	--	--	--	--	--	--	--	--	--

Draw an ABCD pattern.

--	--	--	--	--	--	--	--	--	--	--	--	--	--

Draw an ABC pattern.

--	--	--	--	--	--	--	--	--	--	--	--	--	--

I drew an _____ pattern.

Name: _____

Draw the missing spots in the patterns.


Show the pattern by putting the same letter under each shape or number.

5 3 0 0 5 3 0 0 5 3 0 _ 5

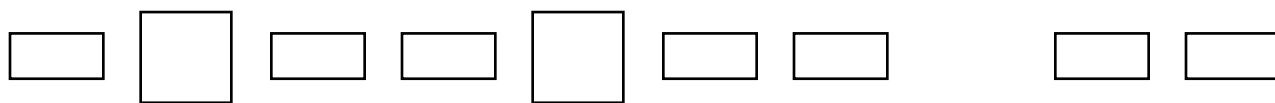
A B C C A B C C A B C C A

6 7 7 6 6 7 7 6 6 7 _ 6 6





1 9 3 1 9 3 1 9 3 1 9 _ 1

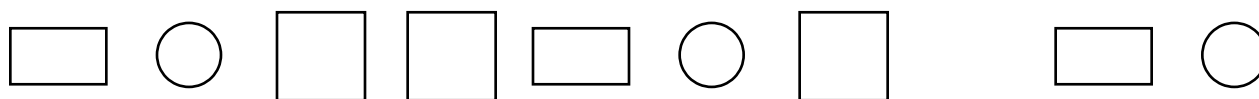


Name: _____

Draw the missing spots in the patterns.

9 9 7 9 9 7 9 9 7 9 9 7 _

2 3 6 2 3 6 2 3 6 _ 3 6 2



Draw your own patterns.



AABA pattern

--	--	--	--	--	--	--	--	--	--	--	--	--

Draw an ABAC pattern.

--	--	--	--	--	--	--	--	--	--	--	--	--

Draw an ABB pattern.

--	--	--	--	--	--	--	--	--	--	--	--	--

Draw an ABCD pattern.

--	--	--	--	--	--	--	--	--	--	--	--	--

Draw an AABC pattern.

--	--	--	--	--	--	--	--	--	--	--	--	--

I drew an _____ pattern.

Name: _____

Write a word that has the same vowel sound. Draw a picture of your word.

u



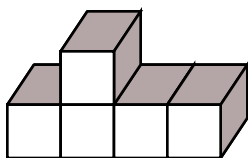
cup

u



book

How many blocks?



Count by 2s.

13 ____ 17

Write the missing sign.

11 ____ 6 = 17

☐ cold

☐ coold

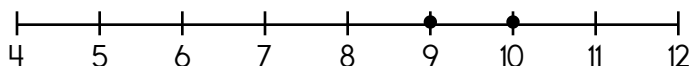
☐ cold

☐ kold

ten

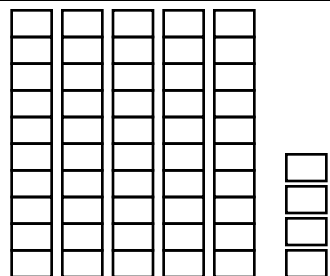
What is the difference for 9 - 6?

☐ 1 ☐ 3 ☐ 5 ☐ 7



9 + ____ = 10

four



____ tens ____ ones

Number = ____

Write a number sentence.

Then draw a picture to show your number sentence.

____ - ____ =

☐ kuh

☐ cutt

☐ cet

☐ cut

Name: _____

train • baby • these • bag • shake • as • shall • be • cane • bad

word has the sound of a like in snake	word has the sound of a like in man	does not fit
_____	_____	_____
_____	_____	_____
_____	_____	_____
_____	_____	_____

Trace. Then complete the sentence.

I saw a duck

I saw a dove

I saw a robin

I saw a _____

$8 - 6 = \underline{\quad}$

○ 2

○ 9

○ 5

$5 + 4 = \boxed{\quad}$

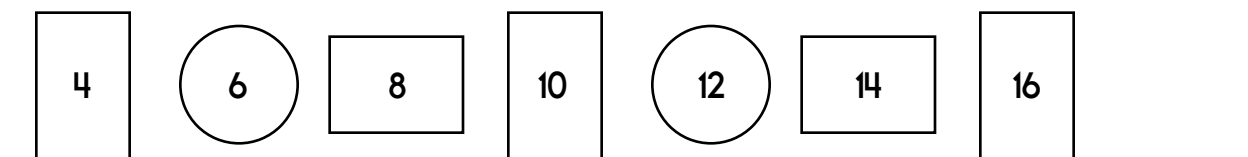
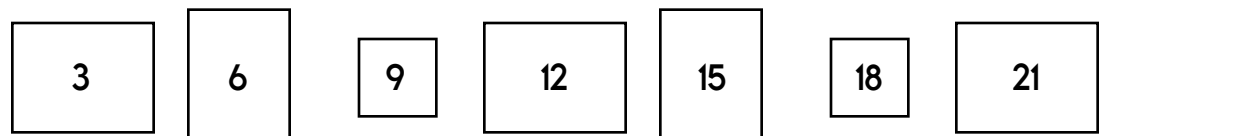
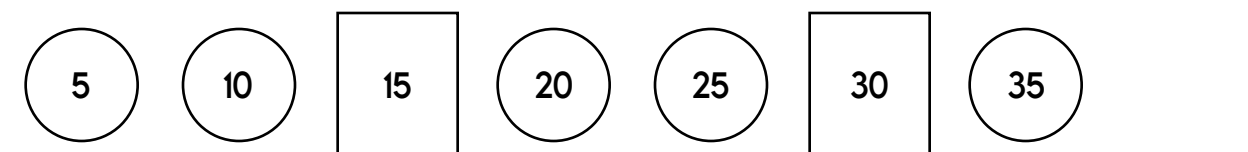
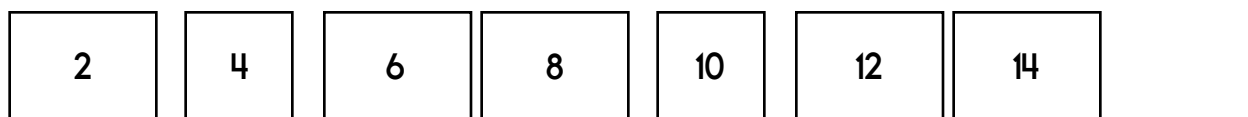
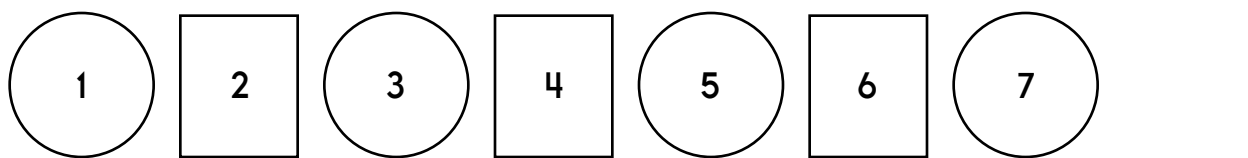
$5 + 5 = \boxed{\quad}$

$9 + 4 = \boxed{\quad}$

$4 + 3 = \boxed{\quad}$

Name: _____


Complete the pattern.



$\begin{array}{r} 4 \\ + 6 \\ \hline \end{array}$	$\begin{array}{r} 6 \\ + 3 \\ \hline \end{array}$	$\begin{array}{r} 4 \\ + 3 \\ \hline \end{array}$	$\begin{array}{r} 8 \\ + 1 \\ \hline \end{array}$	$\begin{array}{r} 1 \\ + 1 \\ \hline \end{array}$	$\begin{array}{r} 4 \\ + 9 \\ \hline \end{array}$	$\begin{array}{r} 7 \\ + 3 \\ \hline \end{array}$	$\begin{array}{r} 5 \\ + 7 \\ \hline \end{array}$	$\begin{array}{r} 5 \\ + 4 \\ \hline \end{array}$
---	---	---	---	---	---	---	---	---

word root **form** can mean **shape**

formation, uniform



It's NO PREP
at edHelper.



edHelper.com!

**only \$19.99
per year**

