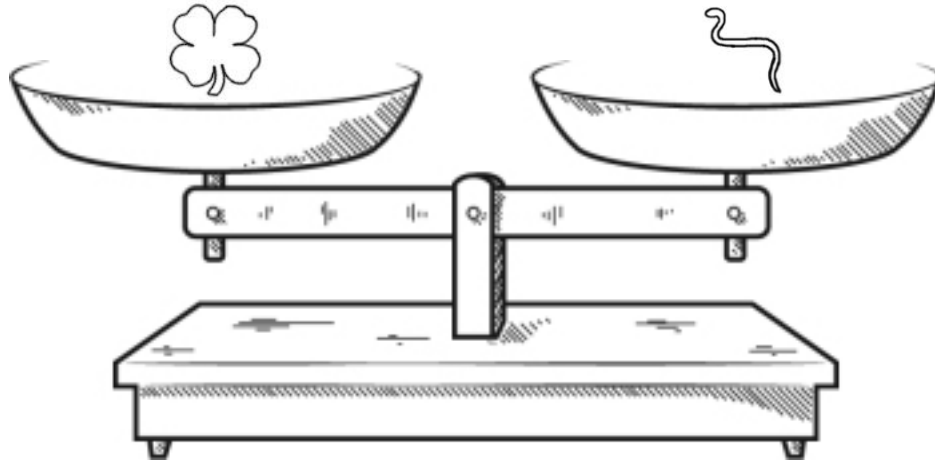
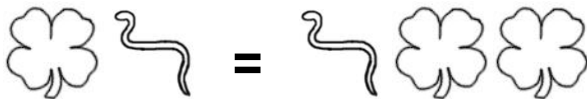


Name: _____

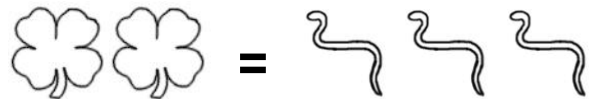


Look at the balance. What does it tell you? Write a sentence to explain.



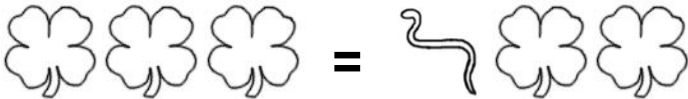
☐ True

☐ False



☐ True

☐ False



☐ True

☐ False



☐ True

☐ False

Did you find that one is true? If not, look again!

You should only mark TRUE if you are absolutely sure it is correct!

What is ten less than 52?

$$35 + \underline{\quad} = 45$$

$$22 - \underline{\quad} = 19$$

Name: _____



| | +1 | -1 | +2 | -2 |
|----|----|----|----|----|
| 66 | | | | |
| 38 | | | | |
| 71 | | | | |
| 53 | | | | |
| 29 | | | | |
| 42 | | | | |
| 85 | | | | |
| 84 | | | | |
| 77 | | | | |
| 20 | | | | |

Name: _____

Amanda has nine bathing suits. Only two of them are red. How many are not red?

Lee has 7 mints. Hal has 10 more than Lee. How many mints does Hal have?

Sarah saw a red bug. Connor saw three white bugs. How many more bugs did Connor see?

Molly saw 9 seagulls. Then she saw 23 more. How many seagulls did Molly see?

Count by 5s.

4 _____ 14

$6 + 7 = \square$

$9 + 2 = \square$

$8 + 8 = \square$

$8 + 7 = \square$

$10 - 3 = \underline{\hspace{2cm}}$

☐ 13 ☐ 5 ☐ 1

☐ 10 ☐ 7 ☐ 12

What is the sum of
 $2 + 1 + 3$?

☐ 13 ☐ 6 ☐ 14 ☐ 9

5 is more than

☐ 4 ☐ 6 ☐ 5

Do the words rhyme?



found



around

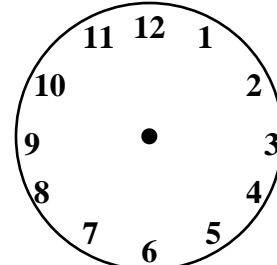


Yes



No

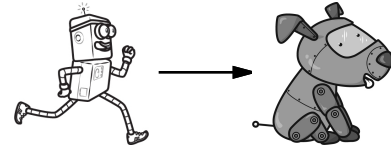
Show 12 o'clock.





$7 + 4$

Name: _____

Help Robot find Rover. Color the boxes with odd sums to make a path.



| | | | | | | | |
|---|-----------|-----------|-----------|-----------|-----------|-----------|---|
|  | $7 + 5 =$ | $1 + 7 =$ | $5 + 9 =$ | $3 + 5 =$ | $4 + 2 =$ | $8 + 6 =$ | $9 + 3 =$ |
| $7 + 2 =$ | $3 + 6 =$ | $6 + 6 =$ | $9 + 5 =$ | $7 + 2 =$ | $1 + 9 =$ | $4 + 7 =$ | $2 + 8 =$ |
| $5 + 4 =$ | $4 + 5 =$ | $5 + 1 =$ | $1 + 3 =$ | $4 + 4 =$ | $8 + 6 =$ | $7 + 3 =$ | $9 + 5 =$ |
| $5 + 2 =$ | $7 + 5 =$ | $8 + 4 =$ | $8 + 8 =$ | $3 + 9 =$ | $4 + 8 =$ | $1 + 4 =$ | $7 + 1 =$ |
| $1 + 6 =$ | $3 + 2 =$ | $4 + 7 =$ | $8 + 5 =$ | $2 + 9 =$ | $1 + 4 =$ | $1 + 4 =$ | $8 + 7 =$ |
| $7 + 9 =$ | $2 + 3 =$ | $9 + 8 =$ | $7 + 4 =$ | $4 + 1 =$ | $8 + 9 =$ | $7 + 2 =$ | $7 + 8 =$ |
| $7 + 2 =$ | $2 + 3 =$ | $8 + 7 =$ | $8 + 1 =$ | $1 + 6 =$ | $4 + 5 =$ | $3 + 4 =$ |  |

Name: _____

Choose three colors. Color words that belong in the same category with the same color.

| | | | |
|-----------|--------|------------|-------------|
| notepad | shorts | litter box | belt |
| trash | apple | manure | pants |
| hall pass | socks | sewer | rotten milk |

Circle the two numbers that make 7.

3 4 6

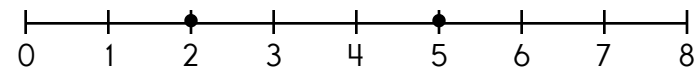
4 1 6

2 5 4 6

3 6 2 5

Write the missing sign.

$10 \text{ ___ } 7 = 3$

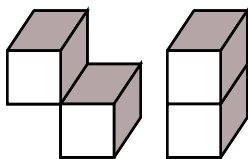


$5 - \text{ ___ } = 2$

Count by 10s.

$58 \text{ ___ } 78$

How many blocks?



Write the missing letter to spell **fast**.

fa_t fas_ f_st

$5 + 6$

Which has the same sum as $7 + 8$?

- ☐ $7 + 7 + 1$ ☐ $7 + 7 + 3$
☐ $1 + 7 + 8$

Which shows a way to take apart 3?

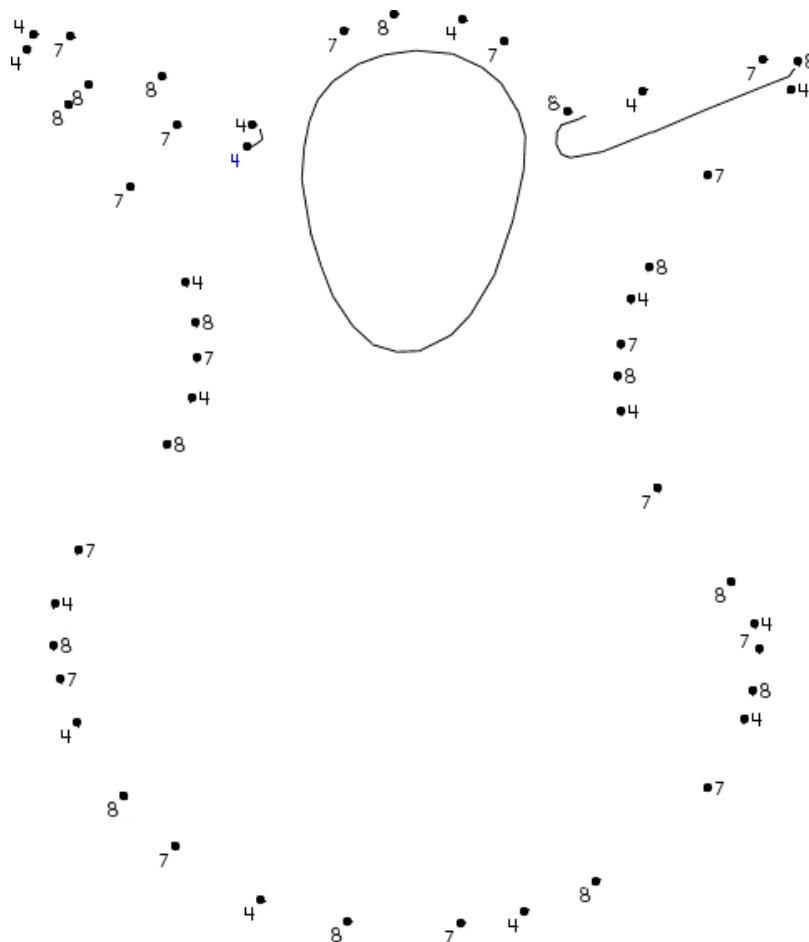
- ☐ $5 - 4 = 1$ ☐ $5 - 3 = 2$
☐ $3 - 2 = 1$

$3 - 2 = \text{ ______ }$

- ☐ 8 ☐ 1 ☐ 1

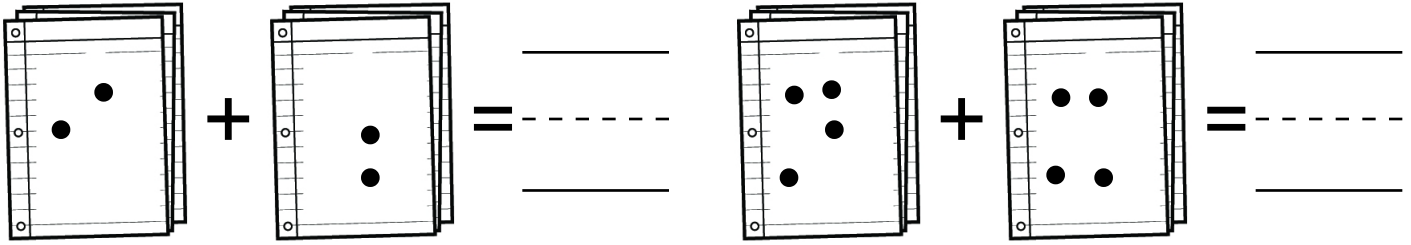
Max walked 4 blocks to the store. He bought some socks. He walked 3 blocks to his grandmother's house. He walked 3 blocks home. How far did he walk in all?

4, 7, 8, 4, 7, _____, _____, _____, _____, _____, _____, _____

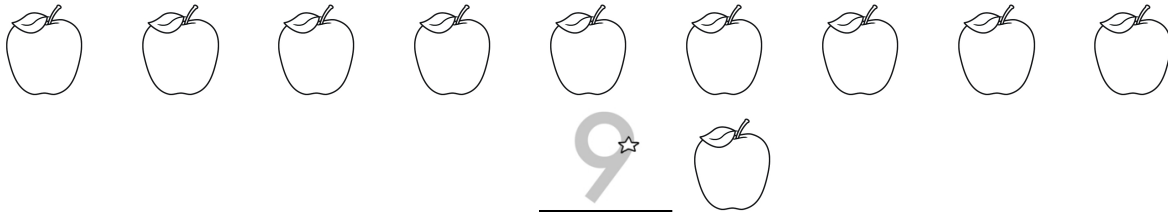


Name: _____

Add the spots.



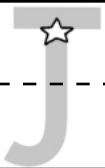
1 2 3 4 5 6 7 8 9 10



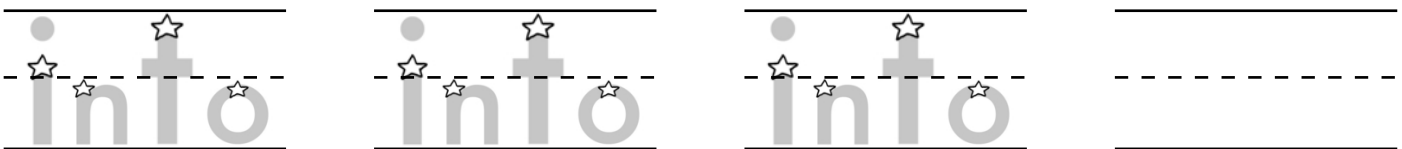
1 2 3 4 5 6 7 8 9 10



Print the letter J.



Trace and write.



Name: _____

There are many plants in Holly's house. There are two plants in Holly's room. There is one plant in the kitchen. There are four plants in the living room. How many plants are there in Holly's house?

Bill counted 24 boys eating ice cream. They were very happy. Ann counted 2 more boys than Bill. How many boys did Ann count?

Adam walked 12 blocks to the pool. Jessica walked 2 blocks to the pool. How many more blocks did Adam walk?

Amy has eleven books. Two books have red covers. How many books do not have red covers?

Which has the same sum as $8 + 9$?

- ☐ $8 + 8 + 3$ ☐ $8 + 8 - 1$
☐ $8 + 8 + 1$

$11 - 3 = \underline{\hspace{2cm}}$

- ☐ 11 ☐ 4 ☐ 5 ☐ 3
☐ 8 ☐ 13

What is the sum of $1 + 5 + 4$?

- ☐ 4 ☐ 5 ☐ 12
☐ 10

YOU D Y T Y Y Y O U F B U J C N Y H P U O Y I U
TEAM S E O T T Q T A E M F D K T E E T A T E A M
STEW T T G V S B E T S T E W S T E W W X W S P A
DRY N R V D D R Y J B S W Y Q D H Y Y M D R I I

word root **viv** can mean **live or life**

convivial, revival, vivacious

Name: _____

Write how much to add.

$$8 \quad (+4) \quad 12 \quad (+4) \quad 16$$

Start with 8.

Add 4. Repeat.

$$4 \quad (+) \quad 5 \quad (+) \quad 6$$

Start with ____.

Add _____. Repeat.

$$5 \quad (+) \quad 8 \quad (+) \quad 11$$

Start with ____.

Add _____. Repeat.

Write how much to add.

$$7 \quad () \quad 9 \quad () \quad 11$$

Start with ____.

Add _____. Repeat.

$$6 \quad () \quad 11 \quad () \quad 16$$

Start with ____.

Add _____. Repeat.

$$3 \quad () \quad 4 \quad () \quad 5$$

Start with ____.

Add _____. Repeat.

Write how much to add.

$$1 \quad () \quad 6 \quad () \quad 11$$

Start with ____.

Add _____. Repeat.

$$9 \quad () \quad 13 \quad () \quad 17$$

Start with ____.

Add _____. Repeat.

$$2 \quad () \quad 4 \quad () \quad 6$$

Start with ____.

Add _____. Repeat.

Write how much to add.

$$9 \quad () \quad 12 \quad () \quad 15$$

Start with ____.

Add _____. Repeat.

$$6 \quad () \quad 7 \quad () \quad 8$$

Start with ____.

Add _____. Repeat.

$$2 \quad () \quad 5 \quad () \quad 8$$

Start with ____.

Add _____. Repeat.

Write how much to add to get from the first number to the second number.

$$8 \quad (+) \quad 13$$

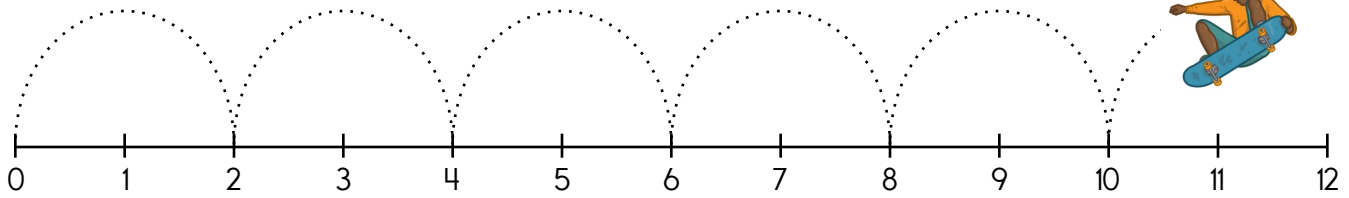
$$3 \quad (+) \quad 5$$

$$5 \quad (+) \quad 9$$

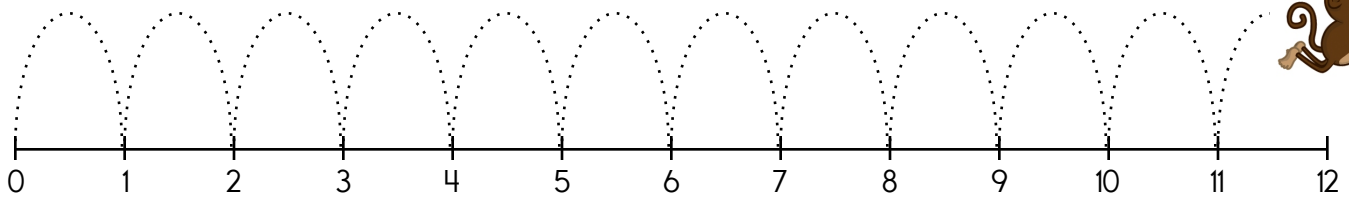
$$7 \quad (+) \quad 9$$

$$1 \quad (+) \quad 5$$

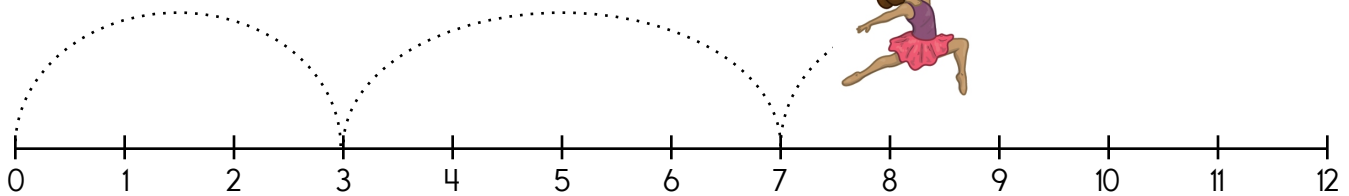
Name: _____



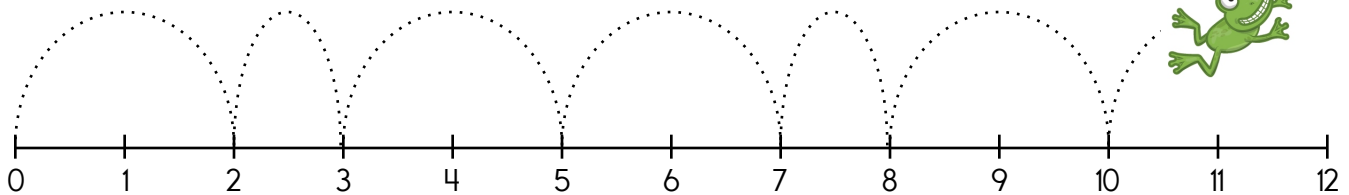
Look at the pattern. The skateboarder will next go to number _____.



Look at the pattern. The monkey will next go to number _____.



Look at the pattern. The dancer will next go to number _____.



Look at the pattern. The frog will next go to number _____.

$$3 + 1 = \underline{\hspace{2cm}}$$

☐ 4 ☐ 31 ☐ 13

Name: _____

Complete the patterns.

5 0 5 0 5 0 5 0

3 6 6 3 6 6 3 6

L m L m L m L m

2 9 4 2 9 4 2 9

He will drink the cold milk

He will drink the cold milk.

$12 - 9 =$ _____

☐ 3 ☐ 10 ☐ 2

4 tens and 9 ones

☐ 607 ☐ 4 ☐ 49

3 is more than

☐ 3 ☐ 4 ☐ 2


Count by 4s.

13 _____ 21

$1 + 8$

$8 - 6$

Circle the word for the picture.



doll

bottle

rabbit

turtle

pigs

needle

$5 + 5 =$

$4 + 9 =$

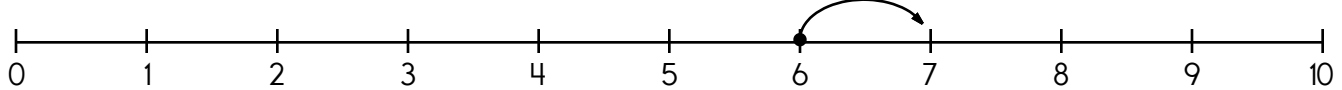
$8 + 6 =$

$2 + 3 =$

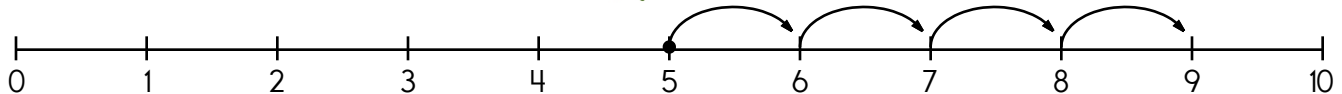
Name: _____

Write how much to add to get from the first number to the second number.

| | | | | |
|-------------------|----------------|-----------------|-----------------|-----------------|
| 4 \bigcirc +1 5 | 5 \bigcirc 8 | 7 \bigcirc 12 | 4 \bigcirc 6 | 1 \bigcirc 5 |
| 6 \bigcirc 11 | 3 \bigcirc 6 | 2 \bigcirc 3 | 9 \bigcirc 13 | 8 \bigcirc 13 |
| 6 \bigcirc 7 | 3 \bigcirc 6 | 7 \bigcirc 9 | 1 \bigcirc 4 | 9 \bigcirc 13 |



- a. The dancer started at 6. b. The dancer took 1 leap.
c. The dancer stopped at 7. 6 + 1 = 7



- a. The frog started at _____. b. The frog took _____ leaps.
c. The frog stopped at _____. _____ + _____ = _____

$7 + 3 = \underline{\hspace{2cm}}$

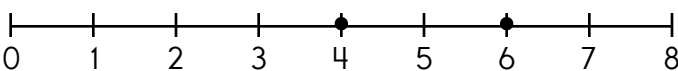
☐ 4 ☐ 6 ☐ 10

4 is more than

☐ 3 ☐ 5 ☐ 4

$6 - 5 = \underline{\hspace{2cm}}$

☐ 1 ☐ 11 ☐ 4

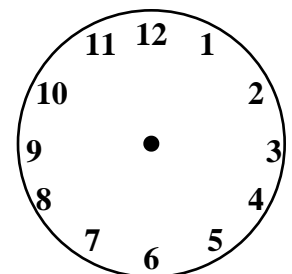


$6 - \underline{\hspace{1cm}} = 4$

f s o o n u
e s o g k t
z v p w o s
h r o c s u


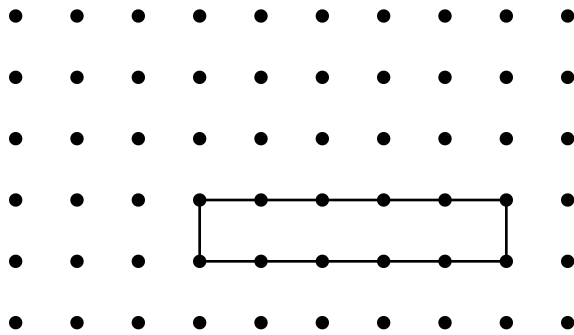
soon

Show 5 o'clock.


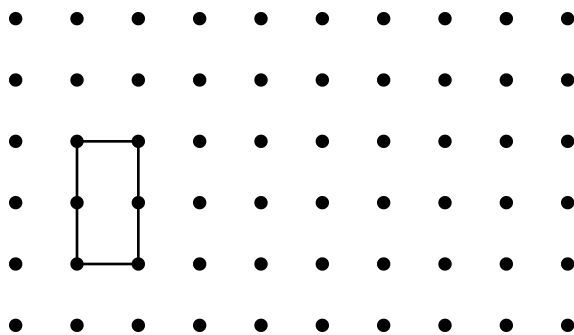


Name: _____


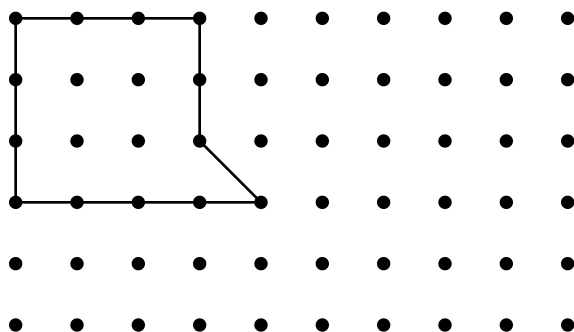
Draw a slide of the shape by moving the shape 3 dots to the left and 3 dots up.



Draw a slide of the shape by moving the shape 1 dot to the left and 2 dots up.



Draw a slide of the shape by moving the shape 3 dots to the right and 1 dot down.



Name: _____

Complete the pattern.

5 10 15 20 25 30 35 _____

4 8 12 16 20 24 28 _____

1 2 3 4 5 6 7 _____

2 4 6 8 10 12 14 _____

3 6 9 12 15 18 21 _____

What month comes after May?

Write the missing letter to spell over.

ov_r ove_ o_er



What is the difference for $7 - 1$?

☐ 6 ☐ 0 ☐ 8 ☐ 1

What is the difference for $6 - 5$?

☐ 1 ☐ 0 ☐ 6 ☐ 4



7 is more than

☐ 6 ☐ 7 ☐ 8

BLOCK L P K C E K Z Y K B L O C K R B L C O K B

THIRD T H I R D R H G B R H W K T I D T H I D Q

MUCH M U C H K U C H M O C H A N M U C H M H W




It's NO PREP at edHelper.

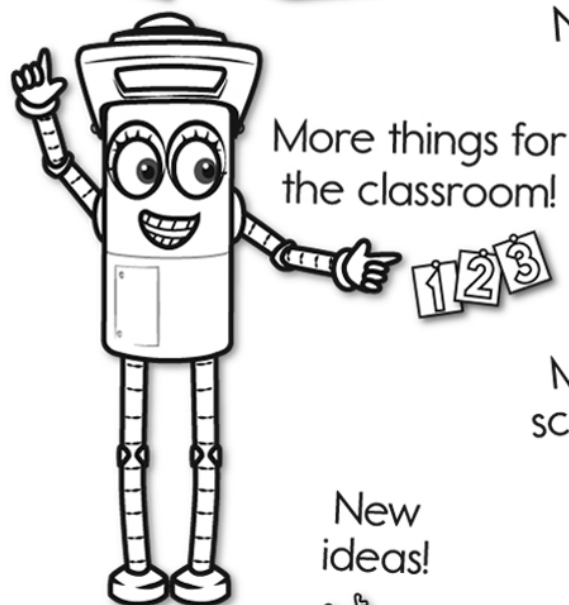
More history!



edHelper.com!



New online math games!



1 2 3



New ideas!



x
+ =
- ÷
< >

More puzzles!

