


Name: _____

8	-3		+3		+2		-3
				-2	+1		+3
				+1	+2		-2
	-3		+1		-1		+2
+2							
				-3		-1	
-1		+1		+2	9		-2
							7

<p>Which shows a way to make 10?</p> <p><input type="radio"/> 2 + 3 <input type="radio"/> 3 + 6</p> <p><input type="radio"/> 7 + 2 <input type="radio"/> 7 + 3</p>	<p>4 is more than</p> <p><input type="radio"/> 5 <input type="radio"/> 4 <input type="radio"/> 3</p>	<p>14 - 9 = _____</p> <p><input type="radio"/> 3 <input type="radio"/> 5 <input type="radio"/> 13</p>
--	--	---

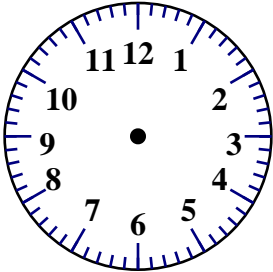
Name: _____

<p>Max picked 8 blue flowers for his mother. Flowers made his mother smile. He found 2 vases. He put an equal number of flowers in each vase. How many flowers did Max put in each vase?</p>	<p>Nathan went to the beach. He found 3 quarters, 1 nickel, 4 dimes, and 8 pennies. How much money did he find in all?</p>	<p>Vera ate three blini. Baba Nina ate two blini. Mama Katya ate four blini. Papa Jeff ate six blini. How many blini did they eat in all?</p>
--	--	---

$\begin{array}{r} 3 \\ 6 \\ + 79 \\ \hline \end{array}$	$\begin{array}{r} 40 \\ 57 \\ + 14 \\ \hline \end{array}$	$\begin{array}{r} 22 \\ 50 \\ + 34 \\ \hline \end{array}$	$\begin{array}{r} 21 \\ 20 \\ + 50 \\ \hline \end{array}$		$\begin{array}{r} 44 \\ - 22 \\ \hline \end{array}$
				$\underline{6} : \underline{35}$	

Circle the words.

kingnewdowntownsellspakpasttogethertwicedownjet
twiceslowjethidwerenightusedkingnewjobblinkpilejaw
petdifferentshapedownuncletogethertmightpathkingtip

<p>100 more than 534</p>	<div>03:30</div> 	<p>Write + or - in the circles.</p> <p>2 <input type="text"/> 23 = 4 <input type="text"/> 21</p> <p>18 <input type="text"/> 10 = 6 <input type="text"/> 22</p>
--------------------------	--	--

Name: _____

Djora lives in Turkmenistan. His father raises horses. He has 7 black horses. He has 11 brown horses. How many horses does he have in all?	Hunter found out that 207 people in his school believed that they would have bad luck on Friday the 13th. There are 333 people in his school. How many did not believe they would have bad luck?

Color in the boxes.

9 or 11 = yellow, 10 or 16 = orange,

8 or 3 = pink, 12 = purple,

14 or 6 = red

What is the hidden number? _____

$6 + 6$	$8 + 2$	$7 + 9$	$8 + 2$	$8 + 2$	$8 + 2$	$6 + 6$	$2 + 1$
$8 + 2$	$1 + 5$	$6 + 6$	$1 + 5$	$6 + 6$	$4 + 4$	$8 + 2$	$4 + 7$
$8 + 2$	$2 + 1$	$4 + 7$	$4 + 4$	$6 + 3$	$1 + 5$	$7 + 9$	$6 + 8$
$1 + 5$	$7 + 9$	$8 + 2$	$8 + 2$	$8 + 2$	$8 + 2$	$6 + 6$	$4 + 7$
$8 + 2$	$4 + 7$	$4 + 4$	$1 + 5$	$6 + 6$	$1 + 5$	$8 + 2$	$2 + 1$
$7 + 9$	$6 + 8$	$6 + 6$	$4 + 7$	$2 + 1$	$6 + 3$	$8 + 2$	$4 + 7$
$4 + 7$	$7 + 9$	$8 + 2$	$8 + 2$	$7 + 9$	$8 + 2$	$1 + 5$	$4 + 4$
$2 + 1$	$6 + 6$	$2 + 1$	$6 + 8$	$4 + 7$	$2 + 1$	$6 + 6$	$6 + 3$

$\begin{array}{r} 22 \\ + 11 \\ \hline \end{array}$	$\begin{array}{r} 79 \\ - 15 \\ \hline \end{array}$	$24 + 71 = \underline{\hspace{2cm}}$
---	---	--------------------------------------

Name: _____

Sarah saw four spiders in her garden. She saw four spiders in the tool shed. How many spiders did she see in all?

$$4 + 4 = \underline{\quad}$$

She saw _____ spiders.

Rosa went to the fair with her family. She rode eight rides before lunch and two rides after lunch. How many total rides did she go on?

$$8 + 2 = \underline{\quad}$$

She went on _____ rides.

On Tuesday two inches of snow fell. On Thursday three inches of snow fell. How much snow fell in all?

$$2 + 3 = \underline{\quad}$$

_____ inches of snow fell.

G H I J K L M N O

•	•	•	•	•	•	•	•	•
---	---	---	---	---	---	---	---	---

Unscramble:

R B N O W

•	•	•	•	•
---	---	---	---	---

What is the difference for $10 - 1$?

☐ 14 ☐ 6 ☐ 9 ☐ 0

What is the sum of 0 and 3?

☐ 7 ☐ 3 ☐ 9

7 tens and 5 ones

☐ 75 ☐ 705 ☐ 7

VOTE Q J T F A V O I T E P C V X O V D V O T E T

GOT O N G C A X R E M G O T T G O T T L G O O Q

Name: _____

Miss Glenn has 9 girls and 12 boys in her class. How many students does she have in all?

Gina's father had 28 roses. He put 15 roses in a vase. He put ferns in the vase, too. He sold the vase of roses to Mr. Jones. How many roses does he have left?

Hunter told two jokes. David also told two jokes. Emily told six jokes. Eric told three jokes. Hannah told five jokes. All the jokes were very funny. Their friends laughed. Everyone was happy. How many jokes were told in all?

Trace. Then complete the sentence.

We went to the beach.





We went to the park.

We went to the zoo.

We went to the

Name: _____

Color the sun with the greater number.



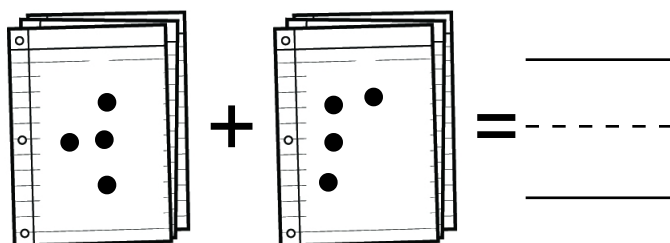
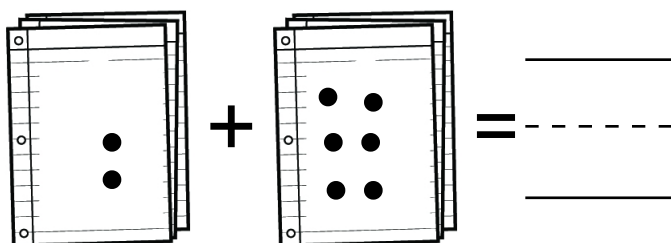
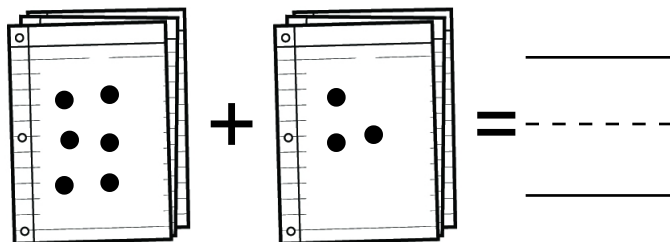
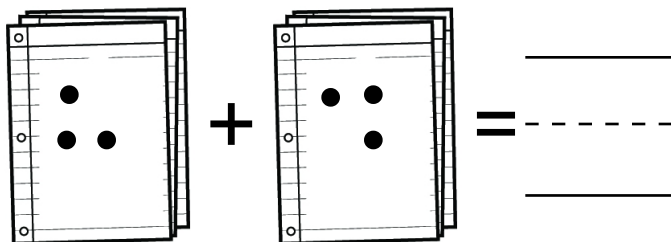
How many?



Circle each letter D you see.

D R D G Q B N D J D D T F D C

Add the spots.



Name: _____

1	2	3	4	5	6	7	8	9	10
11	12	13	14	15	16	17	18	19	20

$$\boxed{8} + \textcircled{8} = \underline{\quad}$$

$$8 + 8 = \underline{\quad}$$

Draw ○

1	2	3	4	5	6	7	8	9	10
11	12	13	14	15	16	17	18	19	20

$$\boxed{5} + \textcircled{12} = \underline{\quad}$$

$$5 + 12 = \underline{\quad}$$

Draw □ and ○

1	2	3	4	5	6	7	8	9	10
11	12	13	14	15	16	17	18	19	20

$$\boxed{12} + \textcircled{4} = \underline{\quad}$$

$$12 + 4 = \underline{\quad}$$

Draw □ and ○

1	2	3	4	5	6	7	8	9	10
11	12	13	14	15	16	17	18	19	20

$$\boxed{13} + \textcircled{4} = \underline{\quad}$$

$$13 + 4 = \underline{\quad}$$

Draw □ and ○

1	2	3	4	5	6	7	8	9	10
11	12	13	14	15	16	17	18	19	20

$$\boxed{7} + \textcircled{1} = \underline{\quad}$$

$$7 + 1 = \underline{\quad}$$

Draw □ and ○

1	2	3	4	5	6	7	8	9	10
11	12	13	14	15	16	17	18	19	20

$$\boxed{3} + \textcircled{5} = \underline{\quad}$$

$$3 + 5 = \underline{\quad}$$

Name: _____

1	2	3	4	5	6	7	8	9	10
11	12	13	14	15	16	17	18	19	20

$$\boxed{10} + \textcircled{1} = \underline{\quad}$$

$$10 + 1 = \underline{\quad}$$

Draw ○

1	2	3	4	5	6	7	8	9	10
11	12	13	14	15	16	17	18	19	20

$$\boxed{17} + \bigcirc = 20$$

$$17 + \underline{\quad} = 20$$

Draw □ and ○

1	2	3	4	5	6	7	8	9	10
11	12	13	14	15	16	17	18	19	20

$$\boxed{15} + \bigcirc = 20$$

$$15 + \underline{\quad} = 20$$

Draw □ and ○

1	2	3	4	5	6	7	8	9	10
11	12	13	14	15	16	17	18	19	20

$$\boxed{11} + \bigcirc = 13$$

$$11 + \underline{\quad} = 13$$

Draw □ and ○

1	2	3	4	5	6	7	8	9	10
11	12	13	14	15	16	17	18	19	20

$$\boxed{9} + \bigcirc = 15$$

$$9 + \underline{\quad} = 15$$

Draw □ and ○

1	2	3	4	5	6	7	8	9	10
11	12	13	14	15	16	17	18	19	20

$$\boxed{14} + \bigcirc = 18$$

$$14 + \underline{\quad} = 18$$

Name: _____

What is ten less than 77?

$$\begin{array}{r} 6 \\ + 8 \\ \hline \end{array}$$

Circle the fifth letter.

F, 2, Z, 2, 4, A, 5, 8, D, 7,
R, X, 4, B, 7, Z, 7

Draw a rectangle that is about 1 cm long on each side. Do not use a ruler. Just guess!

106, 105, _____, _____,

_____, _____,

_____, _____,

98, 97,

_____, _____, 94

Count by 2s.

2, 4, 6, 8, 10

What comes next?

A, _____, I, M, Q, U, Y

10, 12, 14, 16, 18, 20, _____,

24, 26

Circle the odd numbers.

7 85 56

3 42 98

64 271 729

11, 13, 15, 17, 19, _____, 23,

How many nickels do you need if you want to have exactly 15 cents?

25 - ____ = 15

Name: _____

WHAT'S THE BEST THING TO PUT INTO A PUMPKIN PIE?

9 1 2 5 4 6 6 4 3

$5 + 4 = \underline{\quad}$

Y

$5 - 4 = \underline{\quad}$

O

$3 + 1 = \underline{\quad}$

T

$9 - 4 = \underline{\quad}$

R

$6 + 0 = \underline{\quad}$

E

$3 - 0 = \underline{\quad}$

H

$1 + 1 = \underline{\quad}$

U

Count by 4s.

37

45

i d f a s

i i i g v

f w n i k

f d d v i

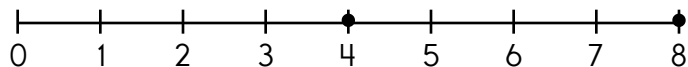
r e g e m

Word Bank

find

give

$6 + 2 = \underline{\quad}$



$8 - \underline{\quad} = 4$

Write the missing letter to spell put.

p_t pu_ _ut

Which shows a way to take apart 3?

☐ $6 - 6 = 0$

☐ $3 - 1 = 2$

☐ $6 - 3 = 3$

What is the difference for $6 - 5$?

☐ 2 ☐ 1 ☐ 4 ☐ 3

Write the missing sign.

$8 \underline{\quad} 4 = 4$

fifteen

☐ 12

☐ 19

☐ 15

Name: _____

Complete the pattern.

2, 7, 1, 2, 7, 1, 2, _____, _____, _____, _____, _____



Write <, >, or =.

42 ○ 42

91 ○ 99

37 ○ 36

15 - 9 = _____

○ 6 ○ 21 ○ 6

nineteen

○ 19 ○ 16 ○ 1

3 is more than

○ 2 ○ 4 ○ 3

Circle the two numbers that make 7.

3 5 4

5 1 6

1 5 2 4


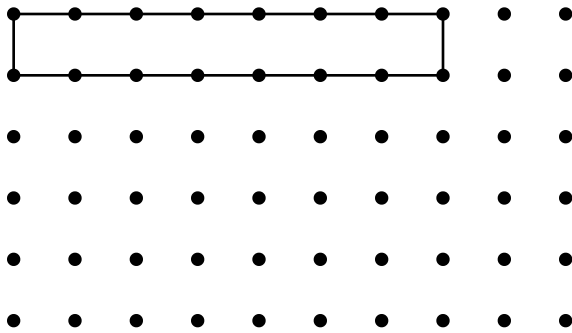
3 5 1 2

12 - 6


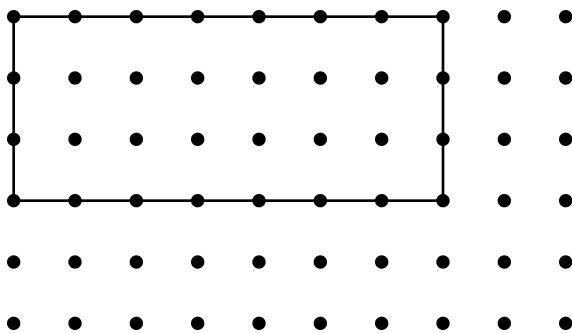
13 - 7

Name: _____



Draw a slide of the shape by moving the shape 1 dot to the right and 3 dots down.



Draw a slide of the shape by moving the shape 1 dot to the right and 1 dot down.



Draw a slide of the shape by moving the shape 3 dots to the right and 1 dot up.



Name: _____

Complete the pattern.

4	8	12	16	20	24	28	_____
---	---	----	----	----	----	----	-------

2	4	6	8	10	12	14	_____
---	---	---	---	----	----	----	-------

1	2	3	4	5	6	7	_____
---	---	---	---	---	---	---	-------

5	10	15	20	25	30	35	_____
---	----	----	----	----	----	----	-------

3	6	9	12	15	18	21	_____
---	---	---	----	----	----	----	-------

6	8	10	12	14	16	18	_____
---	---	----	----	----	----	----	-------

Count back 2. What is the difference?

_____ = 12 - 2

- ☐ 11 ☐ 10 ☐ 9
☐ 13 ☐ 8 ☐ 6

4 tens and 1 one

- ☐ 41 ☐ 1 ☐ 4

3 + 6 =

3 + 6 =

What is the difference for 12 - 2?

- ☐ 11 ☐ 10 ☐ 4
☐ 15

word root **form** can mean **shape**

uniform, transform



It's NO PREP at edHelper.

More history!




edHelper.com!



New online math games!



New ideas!



x
+ =
- ÷
< >

More puzzles!



