

Name: _____

+		8	9	
2	$\underline{2} + \underline{\quad}$	$\underline{2} + 8$	$\underline{2} + 9$	11 $\underline{2} + \underline{\quad}$
	$\underline{\quad} + \underline{\quad}$	14 $\underline{\quad} + 8$	$\underline{\quad} + 9$	$\underline{\quad} + \underline{\quad}$
5	$\underline{5} + \underline{\quad}$	$\underline{5} + 8$	14 $\underline{5} + 9$	$\underline{5} + \underline{\quad}$
3	7 $\underline{3} + \underline{\quad}$	$\underline{3} + 8$	12 $\underline{3} + 9$	12 $\underline{3} + \underline{\quad}$

It is nice when _____

_____.

What is the sum of
 $4 + 3 + 2$?

☐ 6 ☐ 8 ☐ 13 ☐ 9

ten

☐ 10 ☐ 9 ☐ 4

$10 - 3 = \underline{\quad}$

☐ 7 ☐ 1 ☐ 2

M O T H E R T A H E T M O T H U R W M O T H E R O E P

H I S A Y S I I S H H I H X H I S O H G F H U S

T H I N N H E N I P G F T H I H I H T N C T H I N

word root **se** can mean **aside or apart**

secede, seclude, seclusion

Name: _____

Circle the fifth number.

B, B, 5, 3, 8, F, 4, D, 4, F,
B, 8, F, D, 1, 2, 5, F, 1

How many?



How many?



11, 13, 15, 17, _____, 21

0, g, 6, _____, g, 6, 0,
g, 6, 0, g, 6, 0, g

2 tens + 1 one = 21

8 tens + 2 ones = ____

3 tens + 6 ones = ____


7 tens + 0 ones = ____

What comes before
and after?

____, 81, ____

____, 114, ____

What time is it?



____:____

Estimate. Wendy took a small cup and filled it with ice cubes. How many could she fit into the cup?

4

14

24

34

What is ten less than 87?

What is ten more than 65?

How many dots on the bug?



Name: _____

Complete the pattern.

5	10	15	20	25	30	35	<u> </u>
---	----	----	----	----	----	----	-------------

2	4	6	8	10	12	14	<u> </u>
---	---	---	---	----	----	----	-------------

4	8	12	16	20	24	28	<u> </u>
---	---	----	----	----	----	----	-------------

3	6	9	12	15	18	21	<u> </u>
---	---	---	----	----	----	----	-------------

Complete the pattern.

1	2	3	4	5	6	<u> </u>	<u> </u>
---	---	---	---	---	---	-------------	-------------

8	10	12	14	16	18	<u> </u>	<u> </u>
---	----	----	----	----	----	-------------	-------------

15	18	21	24	27	30	<u> </u>	<u> </u>
----	----	----	----	----	----	-------------	-------------

Name: _____

Complete the pattern.

15	20	25	30	35			
----	----	----	----	----	--	--	--

8	12	16	20	24			
---	----	----	----	----	--	--	--

4	5	6	7	8			
---	---	---	---	---	--	--	--

10	15	20	25	30			
----	----	----	----	----	--	--	--

Complete the pattern.

20	24	28	32	36			
----	----	----	----	----	--	--	--

6	8	10	12	14			
---	---	----	----	----	--	--	--

9	12	15	18	21			
---	----	----	----	----	--	--	--

Name: _____

Gavin has nine math problems to do for his homework. He has already done five of them. How many math problems does Gavin have left to do?

$$9 - 5 = \underline{\quad}$$

He has _____ math problems left.

A mango tree had eight mangoes on it. Two hungry fruit bats came. They ate three mangoes. How many mangoes are left on the tree?

$$8 - 3 = \underline{\quad}$$

There are _____ mangoes on the tree.

At the parade, Sara picked up three pieces of gum. She also picked up four lollipops. How many pieces of candy did Sara pick up in all?

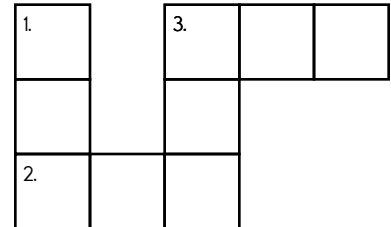
$$3 + 4 = \underline{\quad}$$

She picked up _____ pieces of candy.

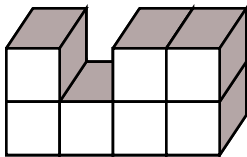
across →



down ↓



How many blocks?



What day comes after Thursday?

Write the missing sign.

$$10 \underline{\quad} 2 = 12$$

$$7 + 2$$

three

Which shows a way to make 12?

☐ $9 + 2$ ☐ $4 + 8$

☐ $3 + 8$ ☐ $4 + 6$

5 is more than

☐ 6 ☐ 5 ☐ 4

$$14 - 9 = \underline{\quad}$$

☐ 5 ☐ 15 ☐ 10

MYSELF P M E M Y S E F Q Z C Y M Y S E L F M F W

SUMMER E M U S M L X H R M S U M M E R S M M E R

Name: _____

<p>Mrs. Young made butterscotch pudding. She put it in 12 cups. Kevin and his twin brother each ate 1 cup. Kevin's father ate 2 cups. How many cups of pudding were left?</p>	<p>Hannah put 16 brownies on a plate in two stacks. She put 11 brownies in the first stack. How many are in the second stack?</p>	<p>Farmer John planted seven rows of corn, eleven rows of wheat, two rows of tomatoes, and three rows of strawberries. How many rows did Farmer John plant in all?</p>
---	---	--

Choose three colors. Color words that belong in the same category with the same color.

camel	hat	fruit	yogurt
bear	hood	hair clip	tiger
juice	cereal	elephant	lion

Which shows a way to take apart 4?

- ☐ $5 + 2 = 7$
☐ $5 - 3 = 2$
☐ $4 - 3 = 1$

$8 - 3 = \underline{\quad}$

- ☐ 5 ☐ 10 ☐ 1
☐ 8 ☐ 7 ☐ 11

zero

- ☐ 0 ☐ 3 ☐ 11



TODAY N R X Z Y T U H D A T O D A Y Y Q T F T Y
 HOME O H O M E D F M O M O M H O M P E E O H W

Name: _____

Fill in the missing numbers.

1	2	3	4	5	6	7	8	9	10
11	12	13	14	15	16	17	18	19	20


1	2		4						
							18		

1 2 3 4 5 6 7 8 9 10



2 

1 2 3 4 5 6 7 8 9 10

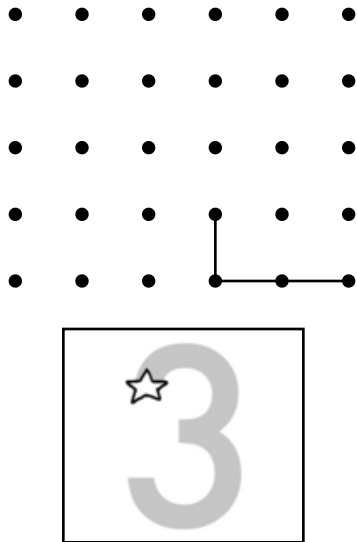
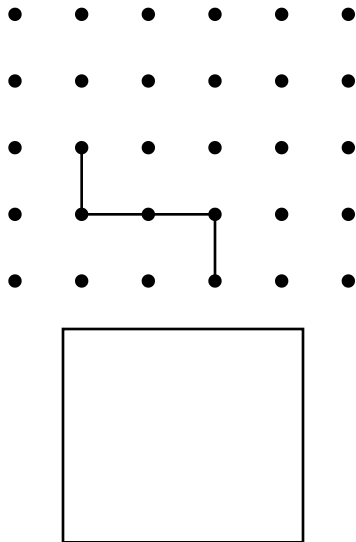
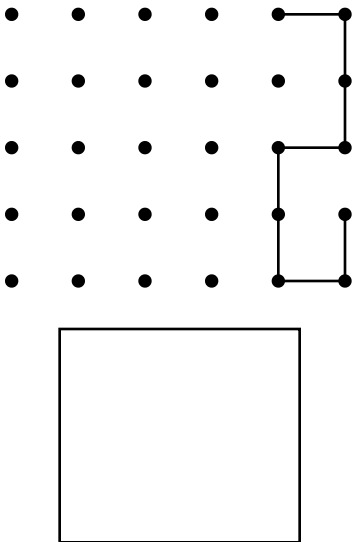
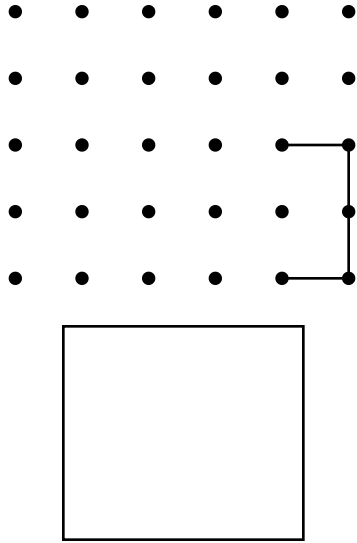
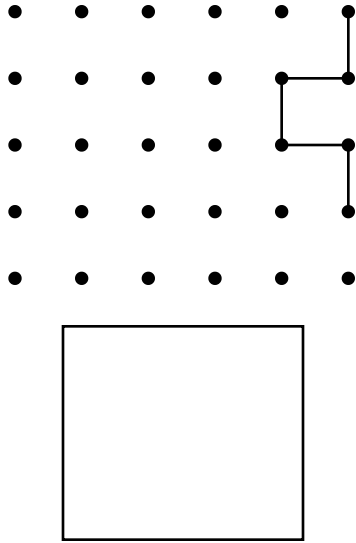
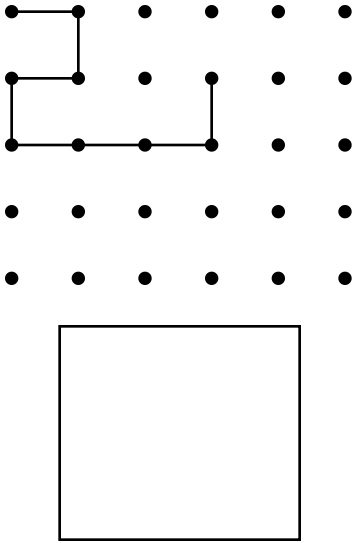
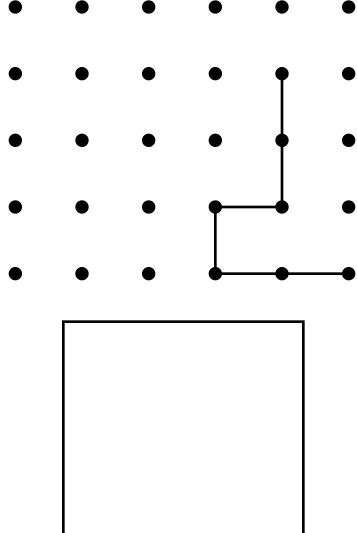
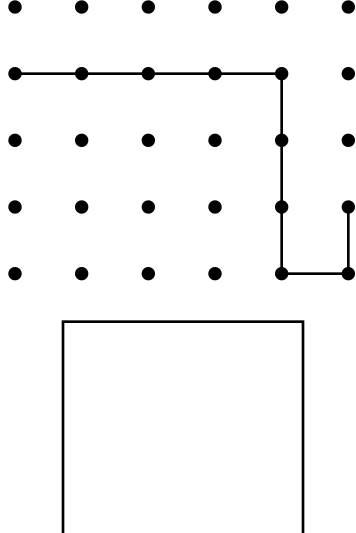
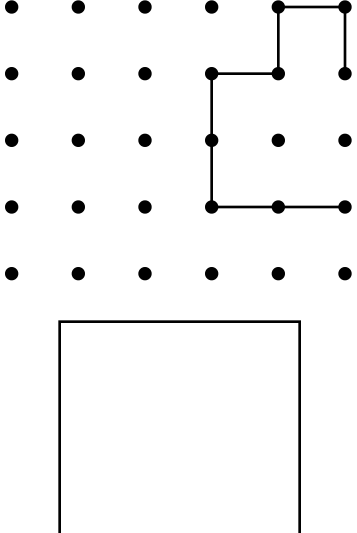


Circle each letter S you see.

S N F S S S S S D C G V L S S


Name: _____


Count the number of lines.

Name: _____


← left → right ↑ above ↓ below



From  go → go ↑ go ↓ go ↑ go ↓ go ← go ↓


Where are you?



From  go → go ← go → go → go ↑ go ↓ go ↑

Where are you?



From  go ↑ go → go → go ↑ go → go → go ←

Where are you?



Name: _____

1 2 3 4 5 6 7 8 9 10

$$\boxed{4} + \textcircled{4} = \underline{\quad}$$

$$4 + 4 = \underline{\quad}$$

Draw ○

1 2 3 4 5 6 7 8 9 10

$$\boxed{2} + \textcircled{8} = \underline{\quad}$$

$$2 + 8 = \underline{\quad}$$

Draw □ and ○


1 2 3 4 5 6 7 8 9 10

$$\boxed{7} + \textcircled{2} = \underline{\quad}$$

$$7 + 2 = \underline{\quad}$$

Write a word that has the same vowel sound. Draw a picture of your word.

○



frog

○



snow

7 is more than

○ 8 ○ 7 ○ 6

5 tens and 8 ones

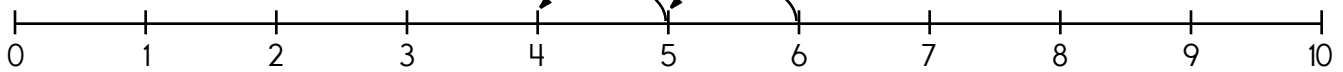
○ 8 ○ 850 ○ 58

4 - 1 = _____

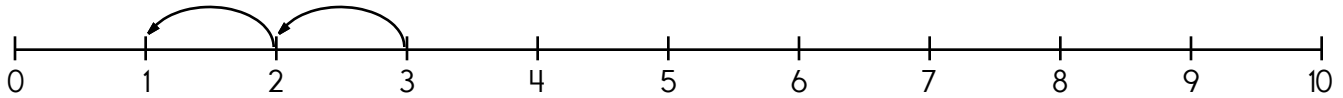
○ 13 ○ 7 ○ 3



Name: _____



$$\underline{6} - 2 = \underline{4}$$



$$\underline{\quad} - 2 = \underline{\quad}$$

The cat is yellow and brown.

The cat is yellow and brown.

Write < or > in each circle.

$$71 \bigcirc 78$$

$$42 \bigcirc 40$$

$$15 \bigcirc 70$$

four

☐ 4 ☐ 10 ☐ 9

6 tens and 2 ones

☐ 26 ☐ 701 ☐ 62

8 is more than

☐ 9 ☐ 8 ☐ 7

Circle the two numbers that make 7.

3 6 4


5 6 2

6 5 1 3

4 2 6 5




There are seven books on the table and three books on the floor. How many books are there in all?

There are _____ books.



Name: _____

Puzzle:

		0
4		11
4	7	+

Work Area:

		0
4		11
4	7	+

The sum for each column
and row is given.



= _____



= _____

$$20 + 239 = 259$$

Using the commutative
property of addition, what
do you think $239 + 20$ is?

How much is this?



$$24 + \underline{\quad} = 34$$

B, E, H, K, N, Q,

_____, W, Z

Circle the fifth letter.

1, 2, D, 4, A, A, F, 3, D,
5, 3, F, 2, 1, A, A, 3, A, F

$$\begin{array}{r} 8 \\ - 4 \\ \hline \end{array}$$

Write the numbers.

two _____

eight _____

six _____

eleven _____

twelve _____

Circle the even numbers.

5 32 77

1 26 89

64 763 358

37, _____, 40, _____, 42

Name: _____

Complete the pattern.

4 5 6 7 8 9 10 _____

5 6 7 8 9 10 11 _____

4 6 8 10 12 14 16 _____

12 16 20 24 28 32 36 _____

$\begin{array}{r} 7 \\ + 6 \\ \hline \end{array}$	$\begin{array}{r} 4 \\ + 4 \\ \hline \end{array}$	$\begin{array}{r} 8 \\ + 2 \\ \hline \end{array}$	$\begin{array}{r} 4 \\ + 3 \\ \hline \end{array}$	$\begin{array}{r} 3 \\ + 9 \\ \hline \end{array}$	$\begin{array}{r} 8 \\ + 7 \\ \hline \end{array}$	$\begin{array}{r} 2 \\ + 2 \\ \hline \end{array}$	$\begin{array}{r} 4 \\ + 1 \\ \hline \end{array}$	$\begin{array}{r} 2 \\ + 3 \\ \hline \end{array}$
---	---	---	---	---	---	---	---	---

Unscramble the letters.



pmats

COAT F C O A N T C O A T B L M G V I A U O C A K

MEAT E M E A T B Y H M A E T U G E X A T W S T T



It's NO PREP at edHelper.

More history!



edHelper.com!

New online math games!



More things for the classroom!



More science!



New ideas!



x
+ =
- ÷
< >

More puzzles!



