




Name: _____

Puzzle:

		12
	2	11
18	5	+

Work Area:

		12
	2	11
18	5	+

The sum for each column
and row is given.







= _____



= _____

Puzzle:

		16
		4
10	10	+

Work Area:

		16
		4
10	10	+

The sum for each column
and row is given.



= _____



= _____

How many?



How many dots on the bug?



How many?



Name: _____

Complete the pattern.

3	6	9	12	15	18	21	
---	---	---	----	----	----	----	--

4	8	12	16	20	24	28	
---	---	----	----	----	----	----	--

1	2	3	4	5	6	7	
---	---	---	---	---	---	---	--

2	4	6	8	10	12	14	
---	---	---	---	----	----	----	--

Complete the pattern.

5	10	15	20	25	30		
---	----	----	----	----	----	--	--

20	24	28	32	36	40		
----	----	----	----	----	----	--	--

6	8	10	12	14	16		
---	---	----	----	----	----	--	--

Name: _____

Complete the pattern.

20	25	30	35	40			
----	----	----	----	----	--	--	--

2	3	4	5	6			
---	---	---	---	---	--	--	--

6	9	12	15	18			
---	---	----	----	----	--	--	--

16	20	24	28	32			
----	----	----	----	----	--	--	--

Complete the pattern.





6	8	10	12	14			
---	---	----	----	----	--	--	--

15	18	21	24	27			
----	----	----	----	----	--	--	--

5	6	7	8	9			
---	---	---	---	---	--	--	--

Name: _____

<p>Last year Hannah hit 5 home runs. Megan hit 14 home runs. How many more home runs did Megan hit than Hannah?</p>	<p>Hunter weighs 54 pounds. Jason weighs 4 pounds less. How much does Jason weigh?</p>	<p>David saw 13 turkeys. Justin saw 21 turkeys. How many turkeys did they see in all?</p>
---	--	---

<p>Holly has eight birthday gifts. She got eight more gifts. How many gifts does she have now?</p> <p>She has _____ gifts.</p>	<p>Do the words rhyme?</p> <div style="display: flex; justify-content: space-around; align-items: center;"> <div style="text-align: center;">  moon </div> <div style="text-align: center;">  spoon </div> <div style="text-align: center;">  Yes </div> </div> <div style="text-align: center;">  No </div>
--	---

<p>Which is a doubles fact?</p> <p><input type="radio"/> $6 + 5 = 11$</p> <p><input type="radio"/> $5 + 5 = 10$</p> <p><input type="radio"/> $5 + 8 = 13$</p>	<p>What is the sum of 2 and 1?</p> <p><input type="radio"/> 6 <input type="radio"/> 3 <input type="radio"/> 21</p>	<p>4 is more than</p> <p><input type="radio"/> 4 <input type="radio"/> 5 <input type="radio"/> 3</p>
		<p>Write the missing sign.</p> <p>9 ____ 6 = 3</p>

$8 + 1$	six	$12 - 8$
---------	-----	----------

Name: _____

1



2



3



4



5



5



1



2



3



4



5

• • • •

4

• •

•

• • • • •

• • •

• • • • •
• • • •

• • • • •
• • •

• • • • •
•

• • • • •
• • • • •

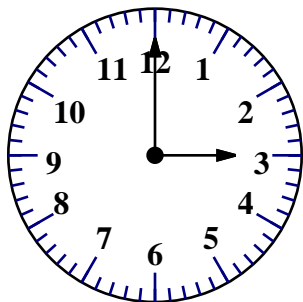
• • • • •
• •

Trace and write.


just

just


Name: _____



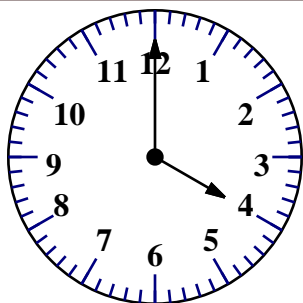
_____ o'clock




_____ o'clock



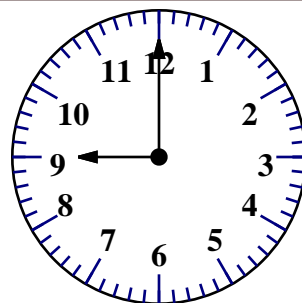
_____ o'clock



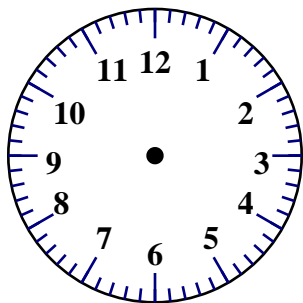
_____ o'clock




_____ o'clock



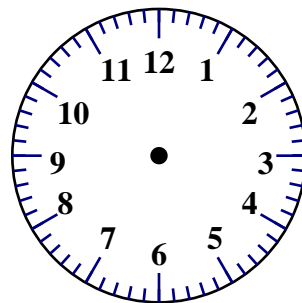
_____ o'clock




Draw 6 o'clock.




Draw 9 o'clock.




Draw 2 o'clock.



1:00



:



:

Name: _____

Up in a tree there was a nest with nine eggs. If three eggs fell out of the nest, how many eggs would be left?

Justin is counting trucks. He counted four blue trucks. He counted seven red trucks. He counted four brown trucks. How many trucks did he count in all?

Ava ate 6 carrots. Then she ate 4 more carrots. How many carrots did she eat in all?

Jacob ate 12 jelly beans. Kevin ate 4 jelly beans. How many jelly beans did they eat in all?

1 2 3 4 5 6 7 8 9 10

$$8 + 2 = \underline{\quad}$$

$$8 + 2 = \underline{\quad}$$

Draw ○

1 2 3 4 5 6 7 8 9 10

$$4 + 6 = \underline{\quad}$$

$$4 + 6 = \underline{\quad}$$

Draw □ and ○

1 2 3 4 5 6 7 8 9 10

$$6 + 2 = \underline{\quad}$$

$$6 + 2 = \underline{\quad}$$

Name: _____

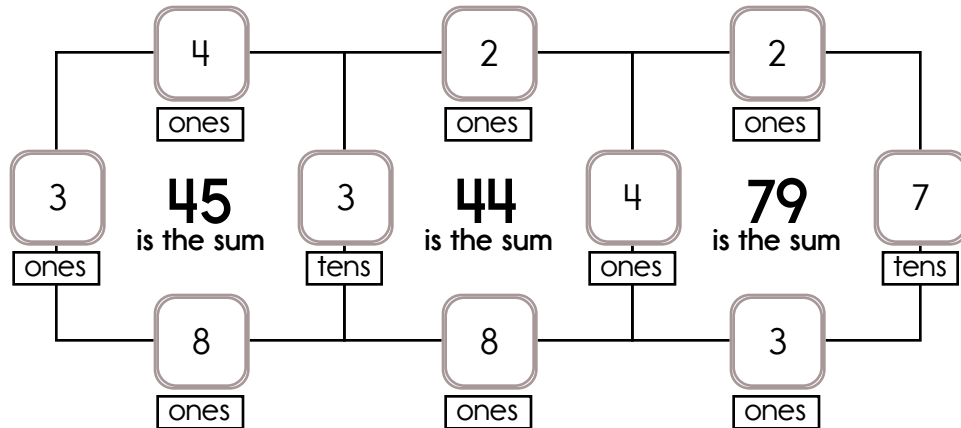
Fill in the missing numbers. How? The sum of the four surrounding numbers is in the center of each square.

Example:

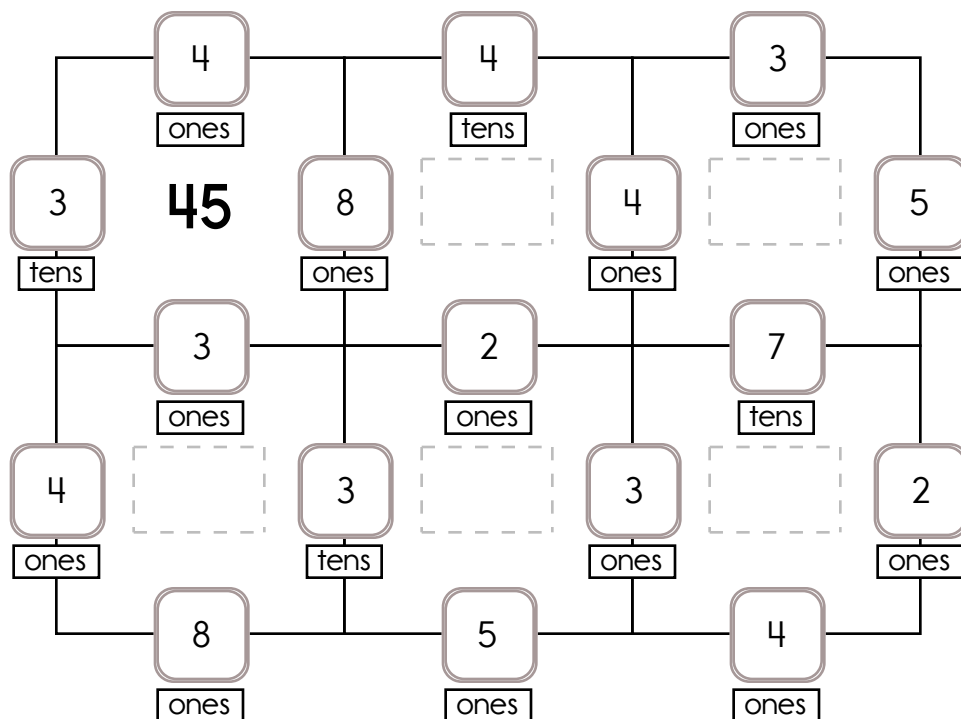
$$3 + 30 + 4 + 8 = 45$$

Example:

$$4 + 70 + 2 + 3 = 79$$



Fill in the missing numbers. How? The sum of the four surrounding numbers is in the center of each square.



Circle the fourth letter.

X, D, 8, R, 1, 3, 3, A, Z, 1,
4, B, F, 7, 1, Z, X, 3, 9

13, 15, 17, 19, _____, 23, 25

I, K, M, _____, Q, S, U,
W, Y


word root **hemi** can mean **half**

hemisphere

Name: _____

Mental Math

— #1 —



- Count by fours. Start with the number that comes after 5.

9

- Triple that number.

1 2 5 7 2 7 3 9 8 2 (Circle your answer to double check you are correct.) _____

- Round that number to the nearest ten.

7 8 9 1 3 7 3 0 4 4

- Add 6.

5 3 6 6 3 8 7 6 6 1

- Find the square root.

6 0 6 2 1 3 9 8 5 9

- Add 59.

6 5 9 2 8 8 6 7 5 6

- Double that number.

3 5 7 6 4 1 3 0 8 8

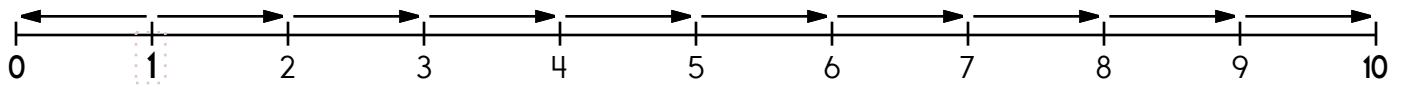
Name: _____

Count by 2s.

2 , 4 , 6 , 8 , _____ , 12 , 14 , _____ , 18 , 20 , 22 , 24



Name: _____



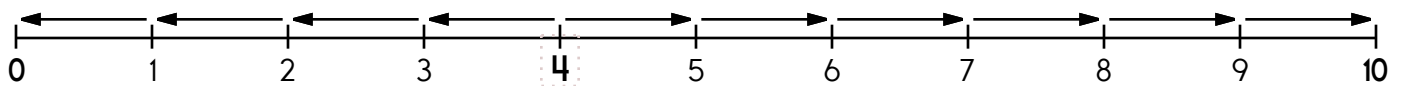
1 is 1 spot away from 0.

$$1 - \underline{\quad} = 0$$

1 is 9 spots away from 10.

$$1 + \underline{\quad} = 10$$

1 is closer to 0 or 10



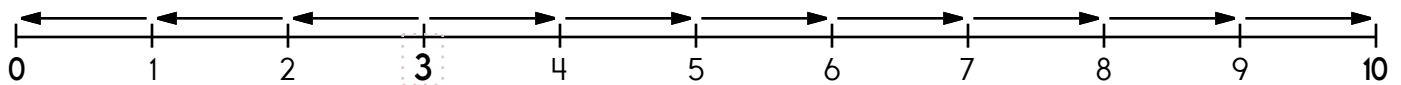
4 is 4 spots away from 0.

$$4 - \underline{\quad} = 0$$

4 is 6 spots away from 10.

$$4 + \underline{\quad} = 10$$

4 is closer to 0 or 10



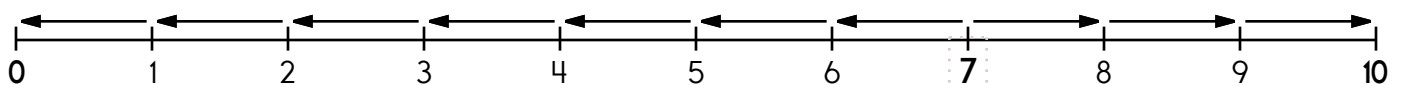
3 is 3 spots away from 0.

$$3 - \underline{\quad} = 0$$

3 is 7 spots away from 10.

$$3 + \underline{\quad} = 10$$

3 is closer to 0 or 10



7 is 7 spots away from 0.

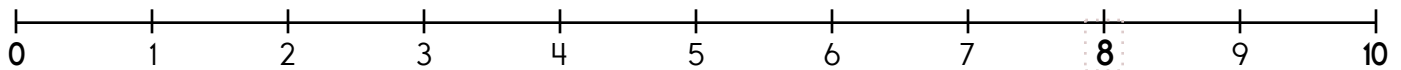
$$7 - \underline{\quad} = 0$$

7 is 3 spots away from 10.

$$7 + \underline{\quad} = 10$$

7 is closer to 0 or 10

Name: _____



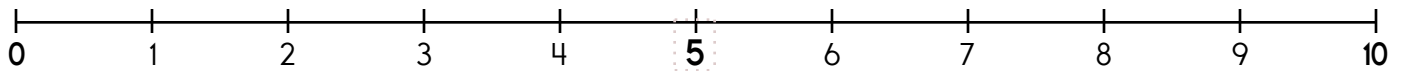
8 is 8 spots away from 0.

$$8 - \underline{\quad} = 0$$

8 is 2 spots away from 10.

$$8 + \underline{\quad} = 10$$

Is 8 closer to 0 or 10? 8 is closer to _____



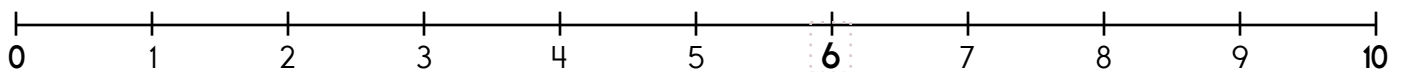
5 is _____ spots away from 0.

$$5 - \underline{\quad} = 0$$

5 is _____ spots away from 10.

$$5 + \underline{\quad} = 10$$

Is 5 closer to 0 or 10? 5 is closer to _____



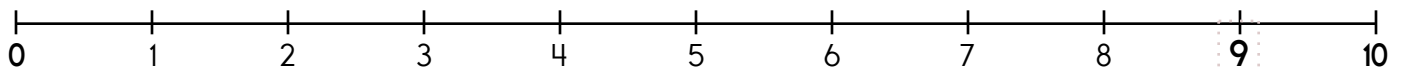
6 is _____ spots away from 0.

$$6 - \underline{\quad} = 0$$

6 is _____ spots away from 10.

$$6 + \underline{\quad} = 10$$

Is 6 closer to 0 or 10? 6 is closer to _____



9 is _____ spots away from 0.

$$9 - \underline{\quad} = 0$$

9 is _____ spot away from 10.

$$9 + \underline{\quad} = 10$$

Is 9 closer to 0 or 10? 9 is closer to _____

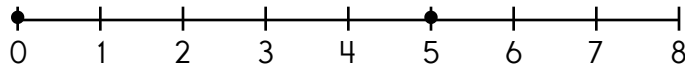
Name: _____

What is going on in the picture? Write a topic and a title to describe the picture.



Topic: _____

Title: _____



$0 + \underline{\quad} = 5$

Write the missing letter to spell **blue**.

bl_e b_ue blu_

Color in the boxes.

6 or 4 = black, 2 or 5 = purple,
9 or 8 = orange, 1 or 7 = green,
0 or 3 = pink

What is the hidden number? _____

7	0	1	3	2	0	5
5	8	2	9	7	8	7
6	6	4	6	6	4	5
0	2	3	7	6	3	1
8	1	9	4	9	5	8
1	3	4	0	1	3	7
9	6	7	5	9	2	9
4	5	9	3	1	3	1


☐ kann

☐ cann

☐ can

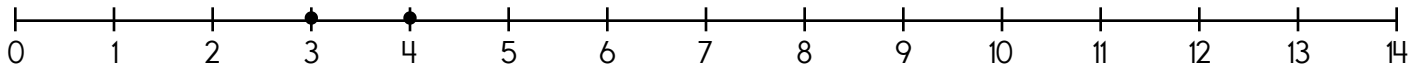
☐ cen

ten



____ : ____

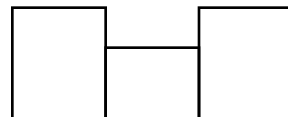
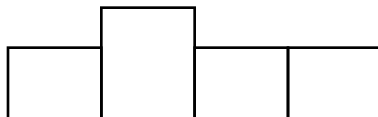
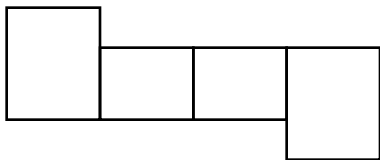
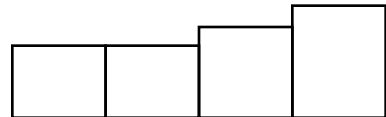

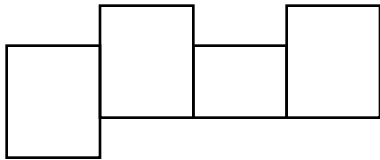
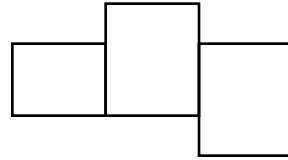
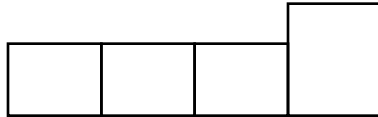
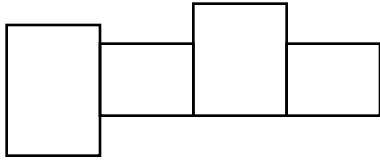
Name: _____



$$3 + \underline{\quad} = 4$$

Write the words into the boxes.

led • tree • sail • glad • joke • keep • slow • why • used



Write a word that has the same vowel sound. Draw a picture of your word.

ă
a



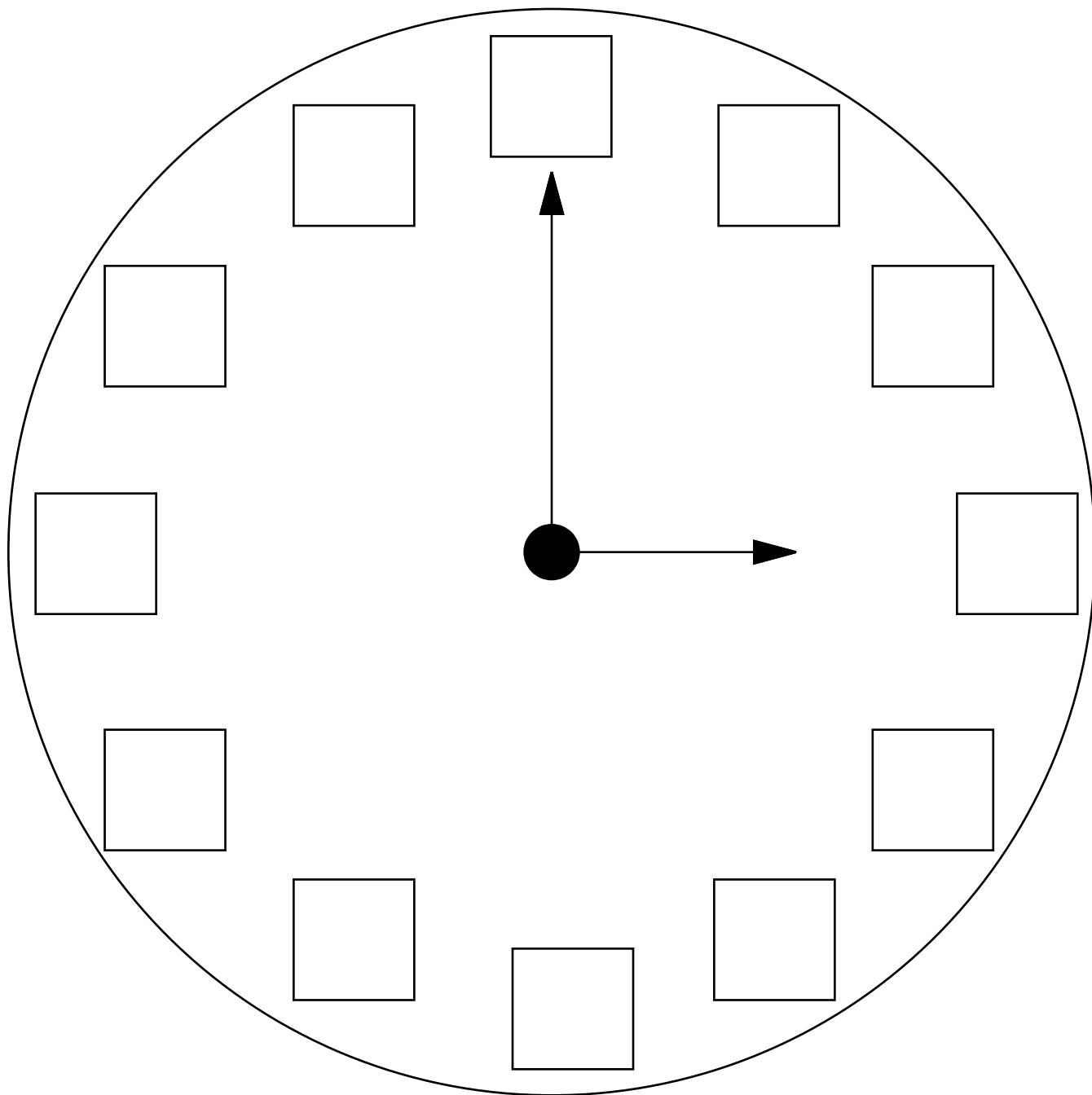
cat

ā
a



cake

Name: _____



_____ o'clock



Name: _____

Get a fidget spinner! Spin it.

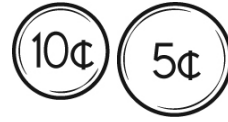
I needed to spin _____ time(s) to finish.

How many?



What is ten more than 82?

How much is this?



Connor needs fifteen cents.
How much more money
does he need?



4 tens + 0 ones

Circle the even numbers.

3 41 99

4 52 17

68 565 286

Write the number that is 2
more.

18 ____

24 ____

72 ____

3 tens + 0 ones

In four years Jenna will be
in the eighth grade. What
grade is she currently in?

Name: _____

Complete the pattern.

15	20	25	30	35	40	45	_____
----	----	----	----	----	----	----	-------

20	25	30	35	40	45	50	_____
----	----	----	----	----	----	----	-------

8	12	16	20	24	28	32	_____
---	----	----	----	----	----	----	-------

6	9	12	15	18	21	24	_____
---	---	----	----	----	----	----	-------

l z t e p l t e g j u w
l b t e i l c g t c g e
g p d i d p i i e r e e
d i k t y l c r g n t m
g i i k d p i h b g v g
p o d t p p p e r g f e

Look for these words BACKWARDS in the word search:

pet did get
lie

Connor is having a birthday party. He invited nine girls from his class and one boy from his class. How many total classmates did he invite?

He invited _____ classmates.

$$11 - 8$$

$$6 + 4$$

$$1 + 1 = \underline{\hspace{2cm}}$$

☐ 12 ☐ 3 ☐ 2

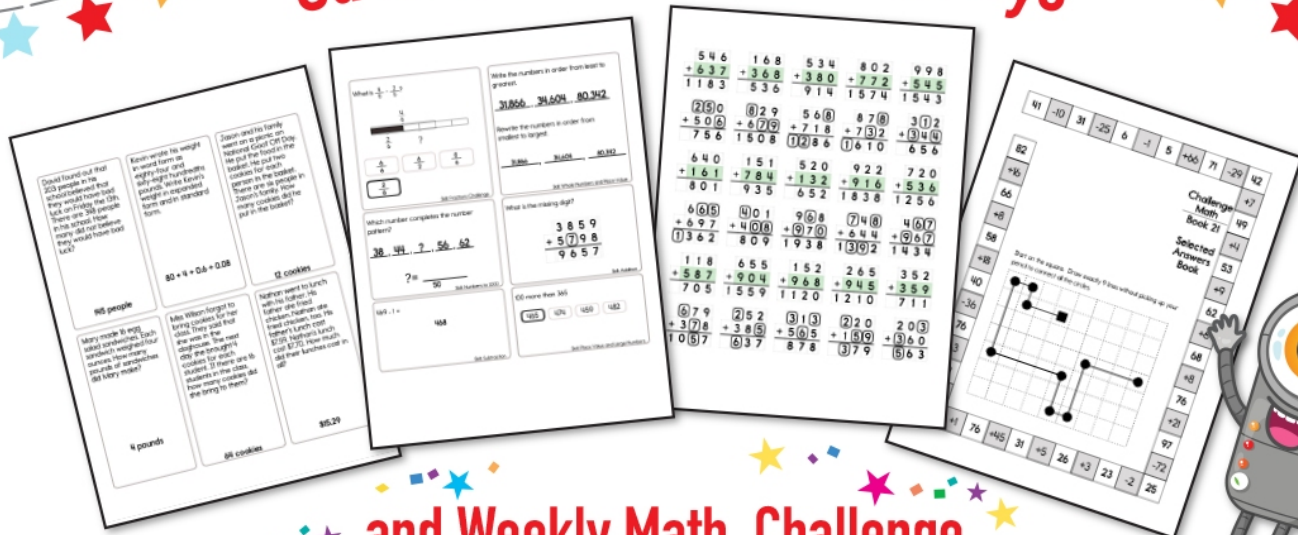
8 tens and 6 ones

☐ 86 ☐ 8 ☐ 6


6 is more than

☐ 7 ☐ 6 ☐ 5


Subscribe to Get Answer Keys



and Weekly Math, Challenge Workbooks, Posters, Daily Reading, and so much more!



SUBSCRIBE TO RECEIVE EVEN MORE
Answer Keys • Effective Activities • Access
to as many printables as you need!



edHelper.com



It's NO PREP at edHelper.

More history!

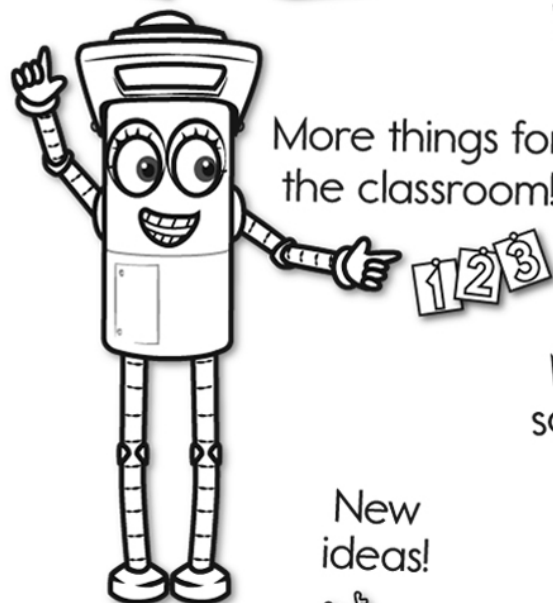


edHelper.com!

New online math games!



More things for the classroom!



More science!



New ideas!



x
+ =
- ÷
< >

More puzzles!



