
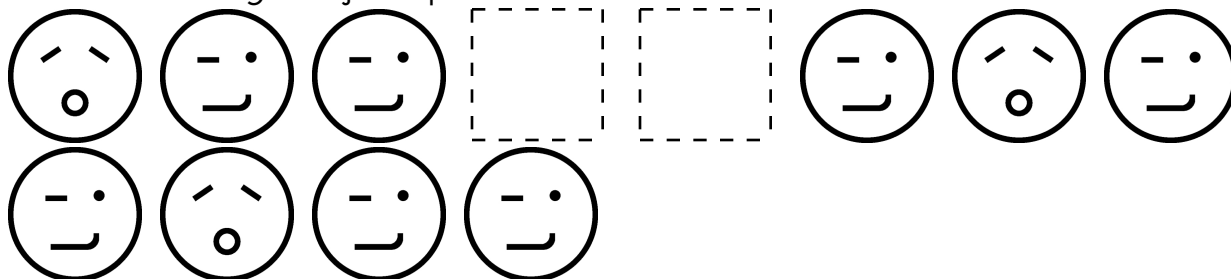




Name: _____

Draw the missing emojis. Explain the rule.



Draw the missing emojis. Explain the rule.



Name: _____

Draw the missing spots in the patterns.















Show the pattern by putting the same letter under each shape or number.

☆ | ☆ | ☆ 3 4 | ☆ | ☆ | ☆ 3 4 | ☆ | _ | ☆ 3 4 | ☆

A A B C A A B C A A B C A

☆ 8 4 ☆ 2 ☆ 8 4 ☆ 2 8 _ ☆ 2 8 4 ☆ 2 8

☆ | ☆ 9 9 | ☆ | ☆ 9 9 | ☆ | ☆ 9 9 | ☆ | ☆ 9 _ | ☆

             _ 

     _    

9 9 8 9 9 8 _ 9 8 9 9 8 9

Name: _____

Draw the missing spots in the patterns.

3 3 9 3 3 9 3 3 9 3 3 9 _

4 9 4 3 4 9 4 3 4 9 4 3 _

8 4 5 8 4 5 8 _ 5 8 4 5 8

Draw your own patterns.

6 4 0 0 6 4 0 0 6 4 0 0 6

ABCC pattern

--	--	--	--	--	--	--	--	--	--	--	--	--

Draw an ABC pattern.

--	--	--	--	--	--	--	--	--	--	--	--	--

Draw an ABCA pattern.

--	--	--	--	--	--	--	--	--	--	--	--	--

Draw an ABA pattern.

--	--	--	--	--	--	--	--	--	--	--	--	--

Draw an ABCD pattern.

--	--	--	--	--	--	--	--	--	--	--	--	--

I drew an _____ pattern.

Name: _____


Mental Math

— #1 —



Start with the number 4.

4



Double that number.

8 7 5 0 2 2 9 7 3 4 (Circle your answer to double check you are correct.)



Double again.

8 1 5 1 9 1 6 6 2 2



Add a dozen.

6 2 8 9 4 3 1 9 8 5



Subtract 2 tens.

9 1 5 8 4 7 6 4 8 3



Double that number.

1 4 5 8 4 8 1 6 9 6



Increase that number by 6.

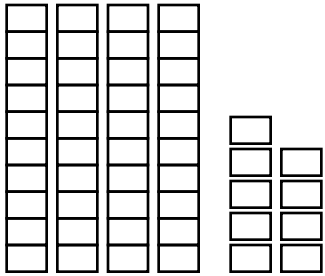
6 2 8 2 2 9 4 0 7 2

Name: _____

Jack wants to buy a sea monkey. He has 7 dimes and 8 pennies. How much money does he have?

Sean has 5 dimes, 1 nickel, and 13 pennies. How much money does he have?

Sarah has a hug chart. Every day she writes down how many hugs she gets. On Monday, she got seven hugs. On Tuesday, she got five hugs. On Wednesday, she got six hugs. On Thursday, she got nine hugs. How many hugs did she get in all?



____ tens ____ ones

Number = _____

Circle the word for the picture.



wig


bank

leg

hat

say

out



____ : ____

Write the missing sign.

12 ____ 8 = 20

Start from 1. Count by 1.



1

1 + 1

1 + 2

1 + 3

1 + 4

1 + 5

1 + 6


1 + 4 = ____

1 + 2 = ____

1 + 6 = ____

Name: _____

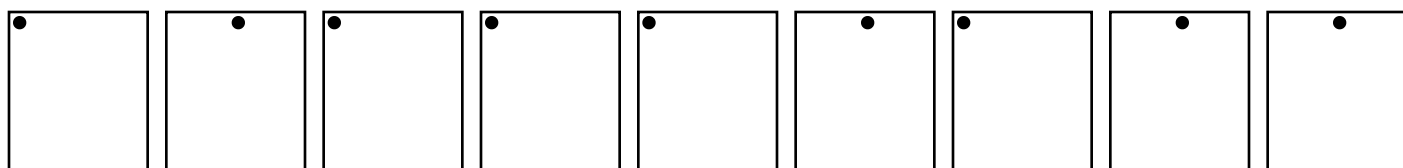
1 2 3 4 5 6 7 8 9 10



1 2 3 4 5 6 7 8 9 10



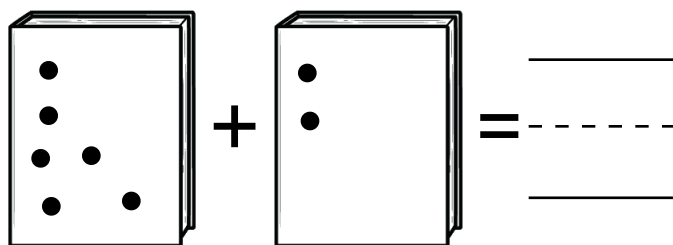
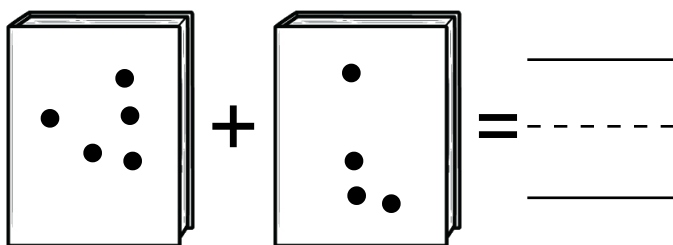
B C D E F G H I J



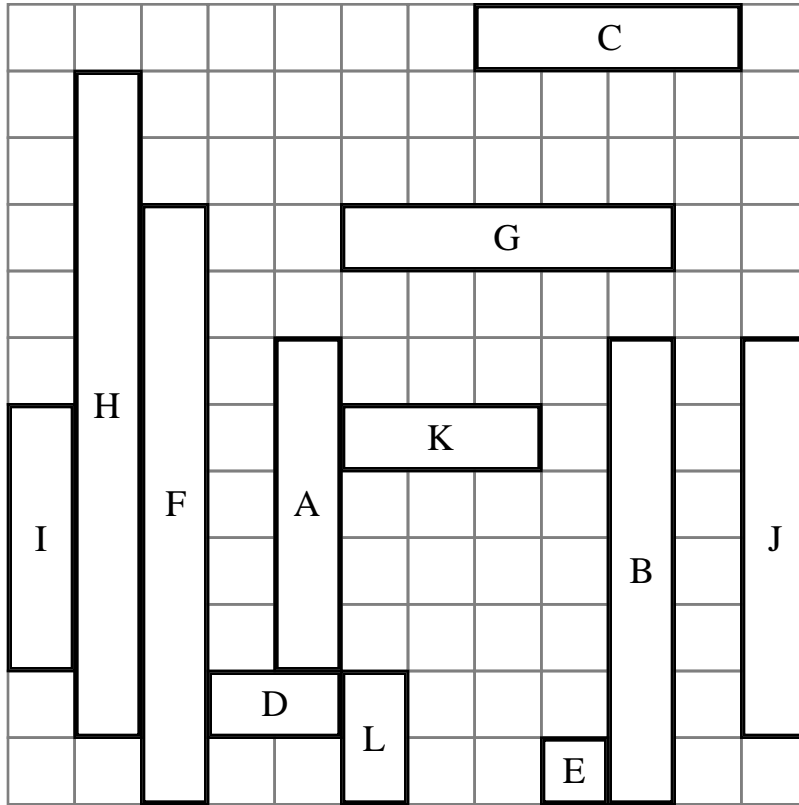
Circle each letter T you see.

S T Z H T K T D T T Q T Y T T

Add the spots.



Name: _____



Rectangle D is same length as rectangle _____

Rectangle _____ is the shortest rectangle.

Rectangle E is _____ unit long.

Rectangle K is larger than rectangle _____

Rectangle _____ is the longest rectangle.

Rectangle G is shorter than rectangle _____

Rectangle B is _____ units long.

Rectangle J is _____ units long.

Rectangle I is shorter than rectangle _____

Rectangle F is _____ units long.

Name: _____

Draw lines to put the numbers in order.

•	•	•	•
60	27	57	84

•	•	•	•
75	80	24	26

•	•	•	•
45	93	13	78


Name: _____

$$28 + 441 = 469$$

Using the commutative property of addition, what do you think $441 + 28$ is?

G, I, K, M, O, Q, S,
_____, W, Y

How much is this?



7 tens + 0 ones

7, 10, 13, _____, 19,

_____, _____

Count by 3s. Which number should replace the second blank?

Circle the odd numbers.

9 28 85

4 11 73

56 452 997

$$23 - \underline{\quad} = 13$$

$$\begin{array}{r} 4 \\ + 7 \\ \hline \end{array}$$

11, 13, 15, 17, _____, 21, 23

Circle all the ways to make 11.

5 + 6 7 + 2 10 + 1
8 + 3 8 + 5 7 + 4
2 + 9 3 + 10 2 + 10

Circle the fifth letter.

7, 1, R, 8, B, Z, 6, F, X, 2,
9, D, A, 8, 3, 4, X, D

What is ten more than 62?

48, 49, _____, _____, _____,
_____, 54

Which number should

$$\begin{array}{r} 6 \\ - 2 \\ \hline \end{array}$$

6, _____, 10, 12, 14, 16, 18

Name: _____

← left → right ↑ above ↓ below



From  go → go ← go → go ↓ go → go ↓ go →

Where are you?



From  go ← go ← go ↑ go → go ← go → go →

Where are you?



From  go ← go ↑ go ↓ go → go → go → go → go ←

Where are you?




Name: _____

Jessica saw three spiders in her garden. She saw three spiders in the tool shed. How many spiders did she see in all?

$$3 + 3 = \underline{\quad}$$

She saw _____ spiders.

Anna drew a picture. She then folded the piece of paper. Show what the paper looks like when it is unfolded.



Fill in the missing numbers.

41	42	43	44	45	46		48		50
51	52	53	54	55	56	57			60
	62	63	64	65	66	67	68		70
71	72	73	74	75	76			79	80

eleven

☐ 4 ☐ 0 ☐ 11

nine

☐ 3 ☐ 11 ☐ 9

5 tens and 4 ones

☐ 5 ☐ 54 ☐ 4

Write the missing letter to spell out.

o_t ou_ _ut

What month comes after October?

Write the words into the boxes.

has
old

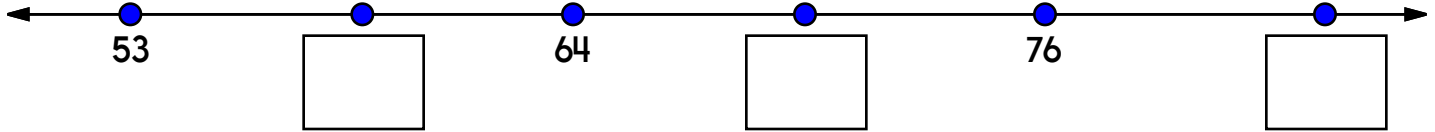
--	--	--

--	--	--

$$9 - 2$$

Name: _____

Write the missing numbers to complete the number line.



Use these numbers: 70, 58, 83

Write the missing letter.

s **c** **y**



___ aw

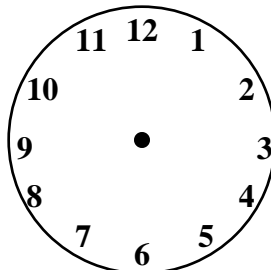


___ es




___ old

Show 11 o'clock.

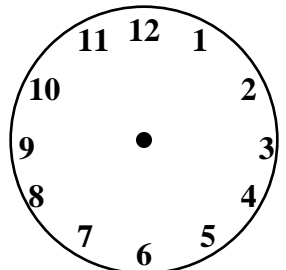


$$8 + 6$$



___ : 00

Show 10 o'clock.



$$9 - 3$$

Which shows a way to make 13?

- ☐ 10 + 5 ☐ 10 + 3
☐ 8 + 6 ☐ 5 + 7

$$9 - 2 = \underline{\hspace{2cm}}$$

- ☐ 13 ☐ 1 ☐ 7 ☐ 9
☐ 11 ☐ 8

$$11 - 4 = \underline{\hspace{2cm}}$$

- ☐ 18 ☐ 7 ☐ 2

My town has two fire stations. The North Station has five fire trucks. The South Station has four fire trucks. How many fire trucks are in my town?

There are _____ fire trucks in my town.

Circle the word for the picture.



purse

my

he

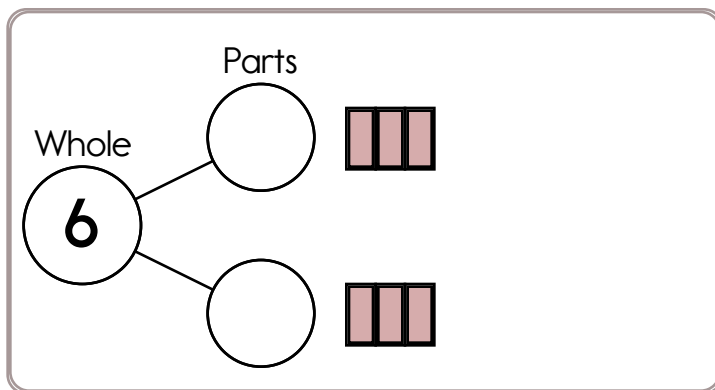
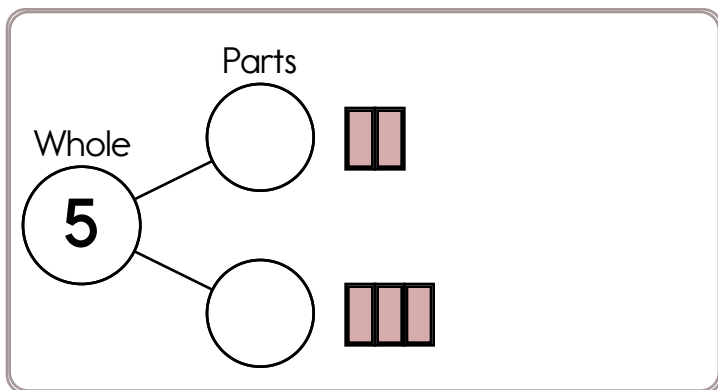
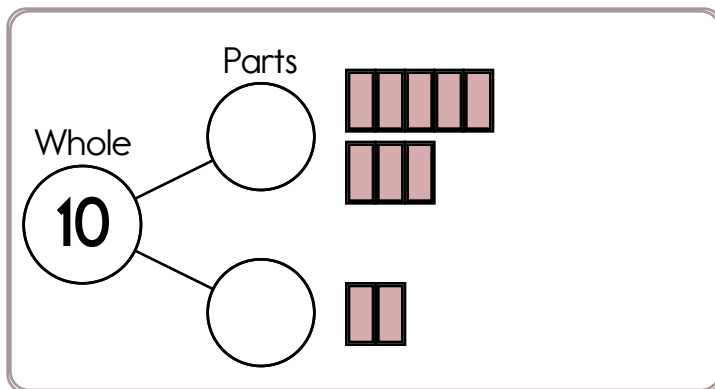
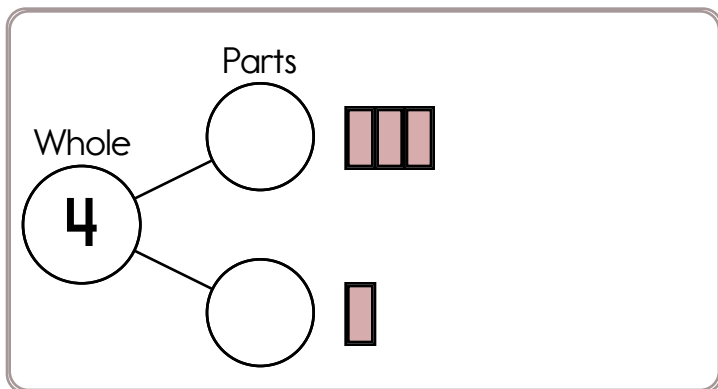
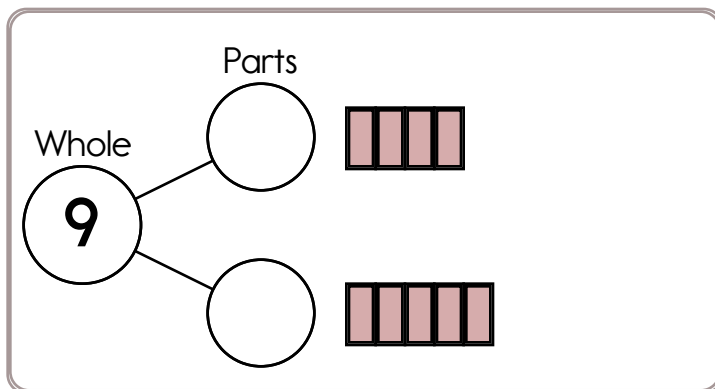
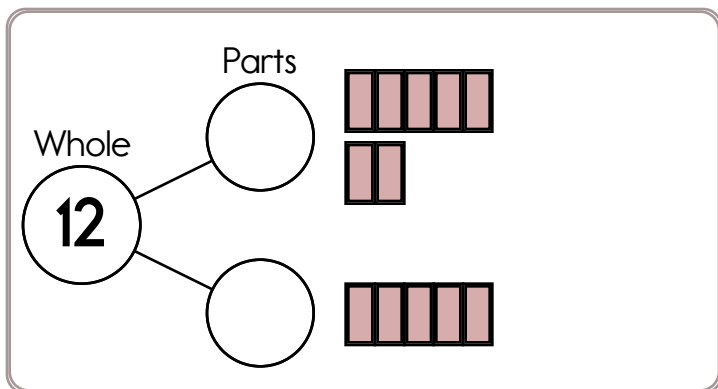
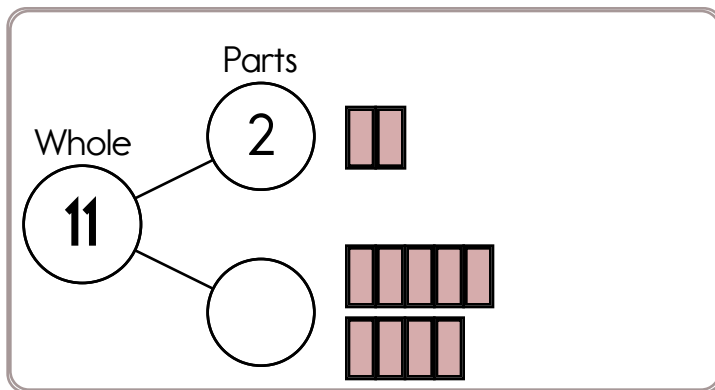
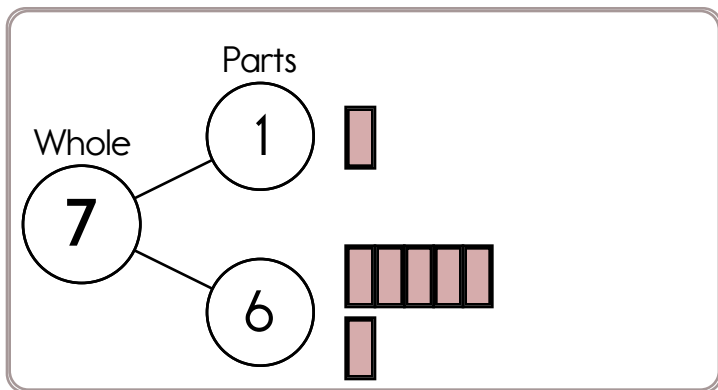


eight

stump

mouse

Name: _____



Name: _____

Hannah's brother asked her to bring his bath toys. He has three boats and five water guns. How many toys does he have?

The Nile River rose 2 feet. It flooded the fields. It rose 5 more feet. How many feet did the water rise in all?

Jacob ate three pieces of cake. Eric ate five pieces of cake. Eric was very sick! How many pieces of cake did they eat in all?

How much is this?



Circle all the ways to make 12.

$6 + 6$ $8 + 3$ $4 + 8$
 $1 + 11$ $5 + 9$ $7 + 5$
 $3 + 9$ $10 + 2$ $3 + 10$

What is ten less than 66?

Jack told three jokes. Eric also told three jokes. Hannah told five jokes. David told two jokes. Sara told four jokes. All the jokes were very funny. Their friends laughed. Everyone was happy. How many jokes were told in all?

It took Sarah 12 minutes to drink her soda. It took Justin 5 minutes. How many minutes more did it take Sarah?

Alex told four jokes. Jacob also told four jokes. Maria told eight jokes. Adam told two jokes. Megan told three jokes. All the jokes were very funny. Their friends laughed. Everyone was happy. How many jokes were told in all?

$$8 + 2 = \underline{\quad}$$

$$9 + 2 = \underline{\quad}$$

Circle the fifth number.

5, B, 3, F, 1, Z, A, 2, X, 2,
4, D, 4, 6, R, 9, Z

7, 9, 11, 13, 15, _____, 19

Name: _____

Complete the pattern.

2 4 6 8 10 12 14 _____

3 6 9 12 15 18 21 _____

4 8 12 16 20 24 28 _____

5 10 15 20 25 30 35 _____

1 2 3 4 5 6 7 _____

4 6 8 10 12 14 16 _____

Which shows a way to make 10?

- ☐ 6 + 2 ☐ 4 + 5
☐ 3 + 7 ☐ 3 + 3

7 - 4 = _____

- ☐ 8 ☐ 9 ☐ 13
☐ 3 ☐ 14 ☐ 6

What is the difference for 4 - 4?

- ☐ 5 ☐ 0 ☐ 4 ☐ 2



It's NO PREP at edHelper.

More history!



edHelper.com!



New online math games!



New ideas!



\times $=$ $-$ \div $<$ $-$ $>$

More puzzles!



