



Name: \_\_\_\_\_

Get a fidget spinner! Spin it.

I needed to spin \_\_\_\_\_ time(s) to finish.

How much is this?



Circle the third letter.

2, F, A, 9, 6, B, 6, F, 8, 1,  
F, B, 5, D, B, A, 6, 7

28, \_\_\_\_, \_\_\_\_, 31, \_\_\_\_,  
\_\_\_\_, 34

8, 10, 12, 14, 16, 18, 20,  
\_\_\_\_, 24, 26

Write the number that  
is 2 more.

13 \_\_\_\_

60 \_\_\_\_

51 \_\_\_\_

3, W, e, 3, W, e, 3,  
W, e, 3, \_\_\_\_, e, 3,  
W

B, \_\_\_\_, L, Q, V

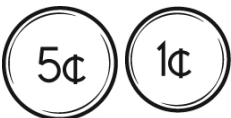
Circle all the ways to make  
5.

1 + 4	2 + 3	3 + 3
2 + 4	2 + 5	2 + 1
3 + 4	3 + 1	2 + 2

How many?



How much is this?



How many?




Circle the fifth number.

F, 4, B, D, 2, 5, A, D, 3,  
6, 8, A, 6, 8, F, 7, A




Name: \_\_\_\_\_


1 2 3 4 5 6 7 8 9 10



1 2 3 4 5 6 7 8 9 10




Here is an example of shade box subtraction:



9 - 5

Complete this shade box subtraction.



5 - 3 = \_\_\_\_\_

☐ cann

☐ can

☐ kann

☐ cen



zero

☐ 1

☐ 3

☐ 0

5 is more than

☐ 5

☐ 4

☐ 6

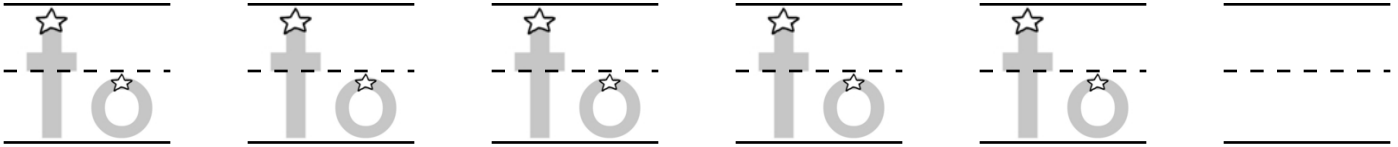
Write the missing sign.

9 \_\_\_\_ 8 = 17



Name: \_\_\_\_\_

Trace and write.



Circle each letter D you see.

**M X D N R D D F D B G Y W K D**

**TOLD L J D D O W T O L D X L L T U L D O V O G L**  
**STING N S T I I N G S S T I N G N G Y G W G N I T**

Fill in the missing numbers.

1	2	3	4	5	6	7	8	9	10
	12		14	15	16	17	18	19	20
	22	23	24		26	27	28	29	30

A hen laid six eggs.  
Four eggs hatched.  
How many eggs does  
she have left?

$$6 - 4 = \underline{\quad}$$

She has \_\_\_\_\_  
egg(s).

8 is more than

☐ 7      ☐ 8      ☐ 9

$$8 - 3$$

$$3 + 8$$

Which shows a way to  
make 8?

☐  $6 + 4$       ☐  $5 + 5$

☐  $7 + 2$       ☐  $5 + 3$





Name: \_\_\_\_\_


Vera ate two blini. Baba Nina ate three blini. Mama Katya ate four blini. Papa Jeff ate six blini. How many blini did they eat in all?

Tim has 16 toy cars. He gave 8 cars to Jim. How many cars does Tim have left?

Peter liked to ride his bike. It made him very happy. One day he rode 5 miles. The next day he rode 3 miles. The next day he rode 4 more miles. How many miles did he ride in all?

Complete the pattern.

1 , 6 , 6 , 1 , 6 , 6 , \_\_\_\_\_ , \_\_\_\_\_ , \_\_\_\_\_ , \_\_\_\_\_ , \_\_\_\_\_ , \_\_\_\_\_



Name: \_\_\_\_\_



Look at the monster pattern. Draw the missing monster.



1



2



1



2



1



2



1



2



1



Circle the  
**smaller** number.

19

16

16

12

17

15

16

12



tell

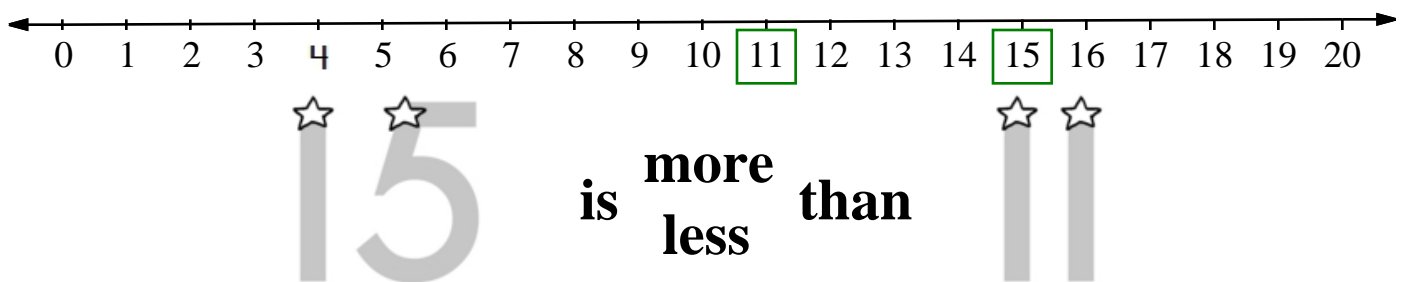
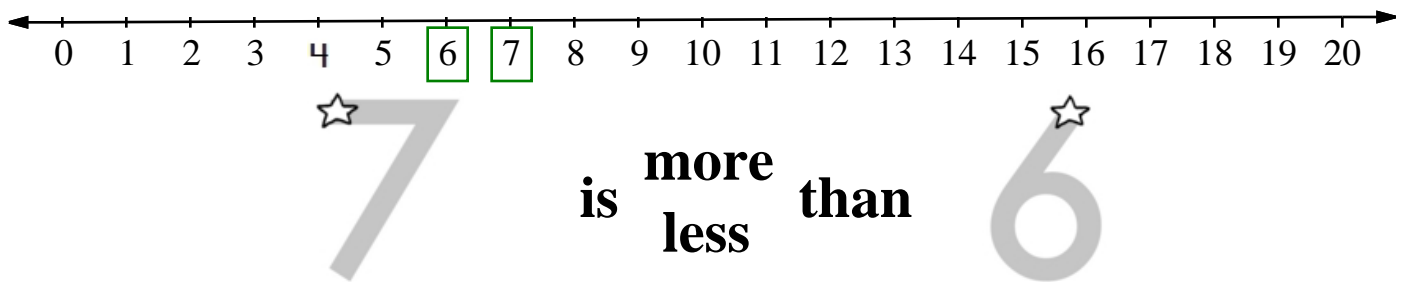
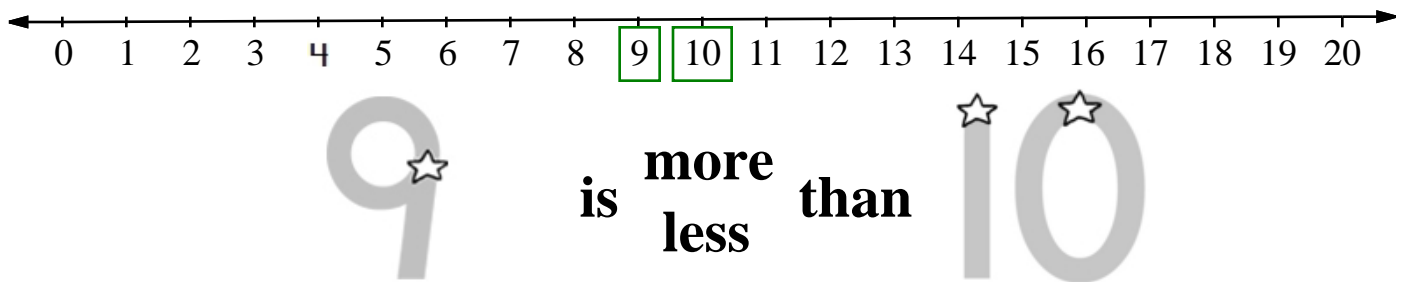
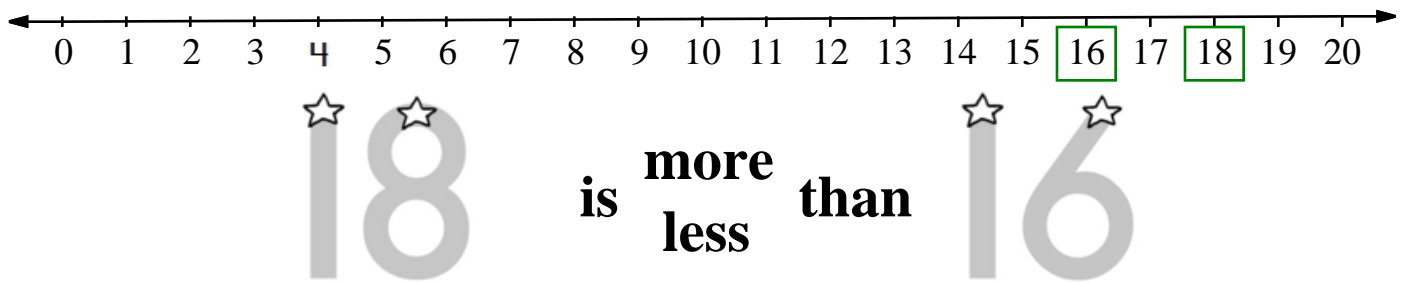
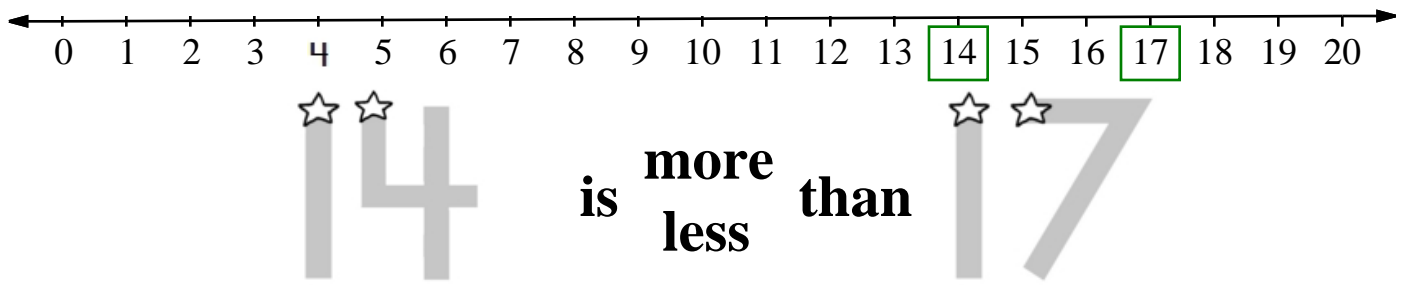
How many?



Print the letter M.



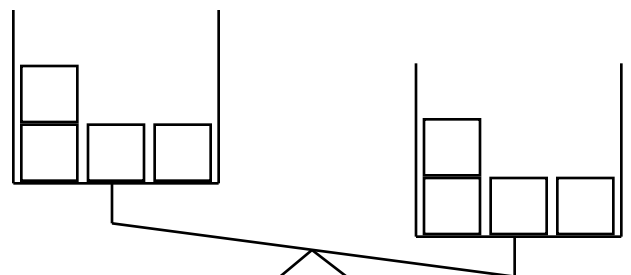
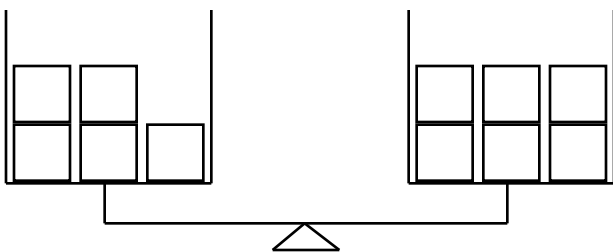
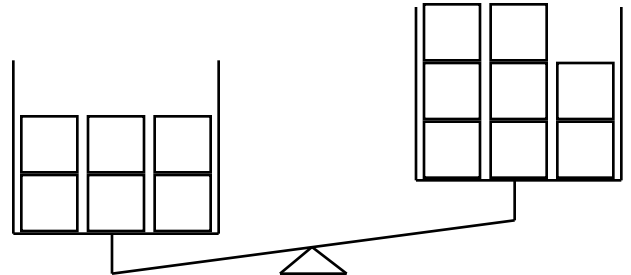
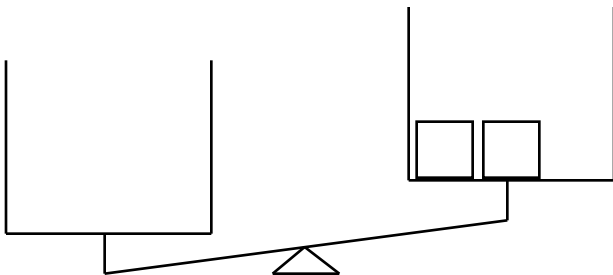
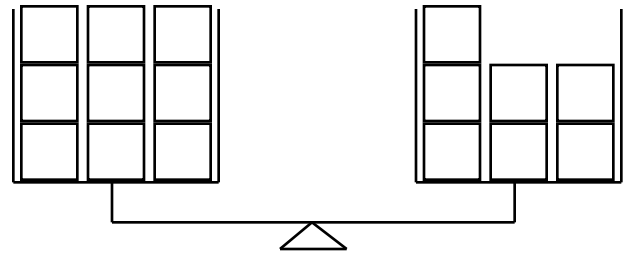
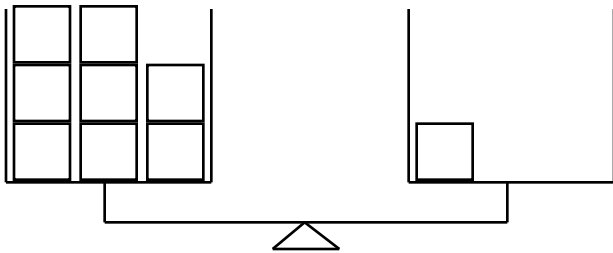
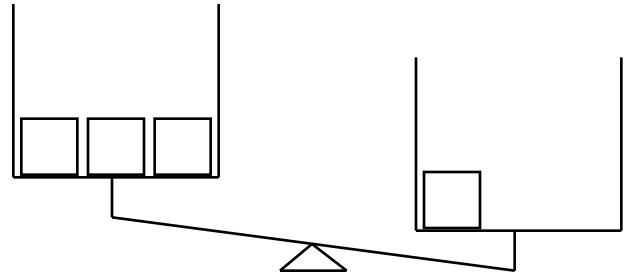
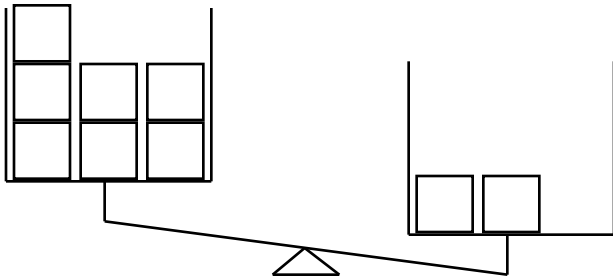
Name: \_\_\_\_\_





Name: \_\_\_\_\_

Some blocks are missing. Draw blocks so that the scale picture makes sense.





Name: \_\_\_\_\_

$$50 + 423 = 473$$

Using the commutative property of addition, what do you think  $423 + 50$  is?

$$\begin{array}{r} 3 \\ + 7 \\ \hline \end{array}$$

11, 13, 15, 17, 19, 21, 23,  
25, \_\_\_\_\_, 29

What is ten less than 74?

47, 48, \_\_\_\_\_, \_\_\_\_\_, 51,  
\_\_\_\_\_


$$9 + 2 = \underline{\hspace{2cm}}$$

$$10 + 2 = \underline{\hspace{2cm}}$$

9, 8, 8, 9, 8, 8, 9, 8, 8,  
9, 8, 8, \_\_\_\_\_, 8, 8

Draw a rectangle that is about 4 cm long on each side. Do not use a ruler. Just guess!

What time is it?



\_\_\_\_\_ : \_\_\_\_\_

$$\begin{array}{r} 4 \\ - 1 \\ \hline \end{array}$$

What is ten more than 54?

$$\begin{array}{r} 9 \\ - 9 \\ \hline \end{array}$$





Name: \_\_\_\_\_

Find 2 equations hidden in each box. Good luck!

$1 + 2$

$18$   
 $8 + 5$   
 $1 + 8$

$13$

$16$

$0 + 7$

$9 + 9$

Write 2 equations: \_\_\_\_\_

$6 + 5$

$0 + 9$

$13$   
 $2 + 1$   
 $2 + 6$

$9$   
 $3$

$3 + 1$

Write 2 equations: \_\_\_\_\_

$5$   
 $2 - 0$

$9 - 3$   
 $6 - 1$

$3$

$2$

Write 2 equations: \_\_\_\_\_

**Name:** \_\_\_\_\_

10	-2	
		-3
	-1	
-3		
+2		
-2		
	+1	

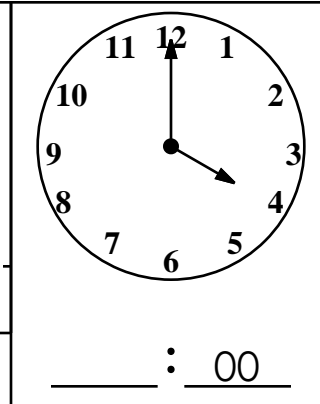
	-2		-1		-3	
-1						
						+2
-2						
9						+1
+3		+3				
+1	-3					
		+1				2

7 + 1    5 + 2    1 + 9    5 + 1    3 + 7    7 + 5    5 + 5    7 + 4    9 + 2



Name: \_\_\_\_\_

<p>n o c s q w x e x o a n n e c a v n x m c o d x x p l n o o p o t a c s w t i u n c <b>t e w</b> w a t s t n n a c w p s a c x w n n n n w t x x i s h</p>	<p>j z r a n n d a v k l n z n m o b k j a</p> <hr style="border: 0.5px dashed black;"/> <p style="text-align: center;">ran</p>
<p>Look for these words <b>BACKWARDS</b> in the word search:</p> <p>wet      can      six top</p>	<div style="border: 1px solid black; padding: 5px; margin-bottom: 5px;"> <math>7 - 3</math> </div>



<p>There are 17 sugar cookies. Adam ate 5. How many cookies are left?</p>	<div style="border: 1px solid black; padding: 5px; margin-bottom: 5px;"> </div> <div style="border: 1px solid black; padding: 5px;"> <math>6 - \underline{\quad} = 5</math> </div>
---	--

Color in all of the months that have 31 days.






January	February	March	April
May	June	July	August
September	October	November	December

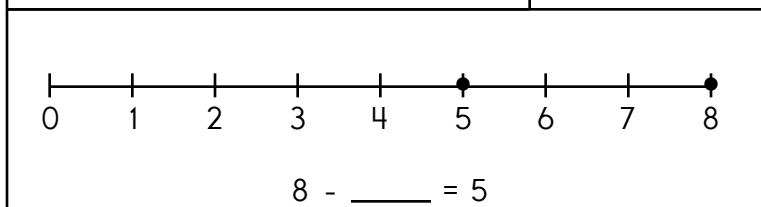
$3 - 1 = \underline{\quad}$ <input type="radio"/> 2 <input type="radio"/> 15 <input type="radio"/> 4	6 is more than <input type="radio"/> 5 <input type="radio"/> 6 <input type="radio"/> 7	4 tens and 5 ones <input type="radio"/> 45 <input type="radio"/> 540 <input type="radio"/> 4
---	---	---

<p>Circle the word for the picture.</p> <div style="display: flex; align-items: center; justify-content: space-around;"> <div style="text-align: center;"> <p>pan      two      out</p> <p>ten      mug      ate</p> </div> </div>	<div style="border: 1px solid black; padding: 5px; margin-bottom: 5px;"> </div> <div style="border: 1px solid black; padding: 5px; margin-bottom: 5px;"> <math>12 - 4</math> </div> <div style="border: 1px solid black; padding: 5px;"> <math>\underline{\quad} : \underline{\quad} 00</math> </div>
--	---

Name: \_\_\_\_\_



<p>Write the missing letter.</p> <div style="display: flex; gap: 10px;"> <div style="border: 1px solid black; padding: 2px 10px;">d</div> <div style="border: 1px solid black; padding: 2px 10px;">c</div> <div style="border: 1px solid black; padding: 2px 10px;">j</div> </div>	<p>Add.</p>	 <p>_____ : 00</p>
 <p>_____ ome</p>	$7 + 1 = \square$	
 <p>_____ ump</p>	$7 + 2 = \square$	
 <p>_____ rink</p>		



Read. When you read a number, write it.

<p><b>8</b></p> <p>Robert has eight cars.</p>	<p>Rosa is four years old.</p>
<p>I played violin for three minutes.</p>	<p>Eight days from now is Halloween.</p>

$5 - 0 = \underline{\quad}$ <input type="radio"/> 13 <input type="radio"/> 9 <input type="radio"/> 5	7 is more than <input type="radio"/> 8 <input type="radio"/> 7 <input type="radio"/> 6	7 tens and 1 one <input type="radio"/> 7 <input type="radio"/> 17 <input type="radio"/> 71
---	---	---

<b>HE</b>	J K H I Q E U E H E G T L M X E V H A E E
<b>LAND</b>	A H D L T M D I K L A N D L A N N D Q A S
<b>SHAKE</b>	G K E S K A K E E E A K Q S H A K E H P W
<b>GIVING</b>	Q G G I H V I H N I N C G I V I N G J Y P
<b>OVER</b>	R O O O O R V O V E E A Q D O V E R W C Y
<b>SHARK</b>	P S Z R R S H A R K M I R Y H S H O R K U



Name: \_\_\_\_\_


$28 + 326 = 354$   
Using the commutative property of addition, what do you think  $326 + 28$  is?

$8 + 3 = \underline{\quad}$   
 $9 + 3 = \underline{\quad}$

Circle all the ways to make 6.

$3 + 3$	$4 + 1$	$2 + 4$
$3 + 4$	$1 + 5$	$4 + 4$
$5 + 3$	$5 + 2$	$6 + 2$

C, F, I, L, O, R,  
\_\_\_\_\_, X

What is ten more than 78?

11, 14, 17, \_\_\_\_\_, \_\_\_\_\_, 26,  
\_\_\_\_\_  
Count by 3s.

A, \_\_\_\_\_, K, P, U, Z

7 tens + 9 ones = 79  
1 ten + 6 ones = \_\_\_\_\_  
8 tens + 9 ones = \_\_\_\_\_  
3 tens + 0 ones = \_\_\_\_\_



Name: \_\_\_\_\_

Wendy had 19 walnuts. She gave Anne 9 walnuts. How many walnuts does she have left?

Max drank 3 milkshakes. If Peter drank 2 more milkshakes than Max, how many milkshakes did they drink in all?

Kayla saw 12 birds in the tree. Five flew away. How many birds were left in the tree?

Robert is 3 years older than his best friend Peter. Peter is 13. How old is Robert?

Mary raked eight piles of leaves. The wind blew away one pile. How many piles does she have left?

$$\underline{\quad} - \underline{\quad} = \underline{\quad}$$

She has \_\_\_\_\_ piles left.

Which has the same sum as  $3 + 4$ ?

- ☐  $3 + 3 + 1$
- ☐  $1 + 3 + 4$
- ☐  $3 + 3 + 3$

Count back 2. What is the difference?

$$\underline{\quad} = 8 - 2$$


- ☐ 6      ☐ 3      ☐ 10
- ☐ 13      ☐ 4      ☐ 5



Name: \_\_\_\_\_

What is ten less than 88?


How much is this?



Circle the third number.

D, 3, 9, F, D, 6, 6, B, 4,  
A, 3, A, B, 6, 3, F, 2

What time is it?



\_\_\_\_:\_\_\_\_

Amanda is reading book 2 of the My Club series. There are 7 books in the series. After she finishes book 2, how many more books will she read to finish the series?

Write these numbers in order from largest to smallest.

1, 4, 2

\_\_\_\_, \_\_\_\_, \_\_\_\_

How much is this?



49, \_\_\_\_, \_\_\_\_, \_\_\_\_, 53, 54,

\_\_\_\_

13 + \_\_\_\_ = 23

A, \_\_\_\_, G, J, M, P,  
S, V, Y

59, \_\_\_\_, 61, 62, \_\_\_\_

\_\_\_\_

Circle all the ways to make 9.

7 + 2    5 + 2    4 + 5  
3 + 6    1 + 8    3 + 4  
6 + 2    3 + 8    7 + 1



Name: \_\_\_\_\_

Complete the pattern.

4 8 12 16 20 24 28 \_\_\_\_\_

2 4 6 8 10 12 14 \_\_\_\_\_

5 10 15 20 25 30 35 \_\_\_\_\_

1 2 3 4 5 6 7 \_\_\_\_\_

3 6 9 12 15 18 21 \_\_\_\_\_

Maria has five toy dinosaurs. Gavin has four toy dinosaurs. How many toy dinosaurs do they have in all?

$$5 + 4 = \underline{\hspace{2cm}}$$

They have \_\_\_\_\_ toy dinosaurs.

Which shows a way to take apart 6?


- ☐  $8 - 2 = 6$    ☐  $8 - 6 = 2$   
☐  $6 - 2 = 4$

Which shows a way to make 10?

- ☐  $6 + 3$    ☐  $8 + 2$   
☐  $5 + 4$    ☐  $2 + 5$







It's NO PREP at edHelper.

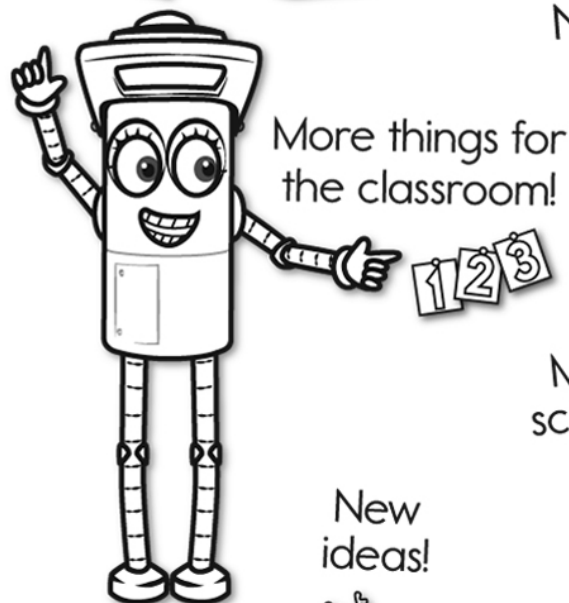
More history!



# edHelper.com!



New online math games!



New ideas!



$\times$   
 $\times =$   
 $- \div$   
 $< - >$

More puzzles!



