

Name: _____

12, 14, 16, 18, 20, 22, 24,
_____, 28

16, ____, 18, 19, ____,
____, ____

What is ten less than 84?


Circle the even numbers.

2 43 18

6 99 25


81 754 977

What time is it?



____:____

What time is it?



____:____

Estimate. Jessica took a cup and filled it with pennies. How many could she fit into the cup?

8
108
308
2008

Write the number that is 2 more.

18 ____
72 ____
57 ____

F, F, ____, F, F, H, F,
F, H, F, F, H

Circle all the ways to make 6.

5 + 1 1 + 4 2 + 4
5 + 3 3 + 3 5 + 2
3 + 2 4 + 4 6 + 1

How many?



How many?



Name: _____

Make change. You can use \$20, \$10, \$5, \$1, 25¢, 10¢, 5¢, or 1¢.

Use the fewest bills and coins to make \$24.16.

\$20	\$1	\$1	\$1	\$1
------	-----	-----	-----	-----

10¢	5¢	1¢
-----	----	----

Use the fewest bills and coins to make \$33.55.

				\$1
--	--	--	--	-----

		5¢
--	--	----

Use the fewest bills and coins to make \$46.36.

--	--	--	--

--	--	--

Use the fewest bills and coins to make \$23.57.

--	--	--	--

--	--	--	--	--

Which number has a 1 in the hundreds place?

☐ 712 ☐ 172 ☐ 271

$18 + \underline{\hspace{2cm}} = 19$

☐ 1 ☐ 7 ☐ 5

11:00 a.m. to 7:00 p.m.

☐ 11 hours ☐ 8 hours
☐ 5 hours ☐ 6 hours

Name: _____

Jenna did 8 math problems. Then she did 3 more problems. How many did she do in all?

Ava saw a red bug. Connor saw nine white bugs. How many more bugs did Connor see?

Holly liked the Hug Holiday. She got three hugs from her mother. She got five hugs from her father. She got two hugs from her sister. She got two hugs from her grandmother. How many hugs did Holly get in all?

Anna is losing her baby teeth. Last year she had 15 baby teeth. Three of her baby teeth fell out. How many baby teeth does she have left?

What is the sum of
 $2 + 1 + 2$?

☐ 11 ☐ 5 ☐ 9 ☐ 7

What is the sum of
 $5 + 5 + 3$?

☐ 13 ☐ 6 ☐ 11 ☐ 12

4 is more than

☐ 3 ☐ 5 ☐ 4

COULD O C O U L D O K Q Z R C C U L D H D D A M

AN U K H N A N A Y V J I N W P C A A N A G O

CARD J C C A R D H A P C D A Z B C R A D L Y N

WEED E W E E D D R D Z E E W E E D D O K E D S

MEET K B F M E E T T T D E E U C I E M E E T T

Name: _____

Draw the missing spots in the patterns.

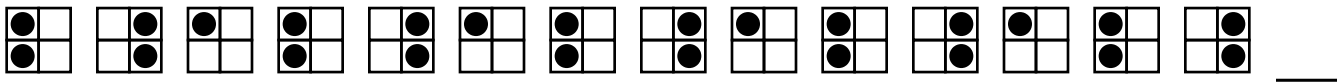
Show the pattern by putting the same letter under each shape or number.

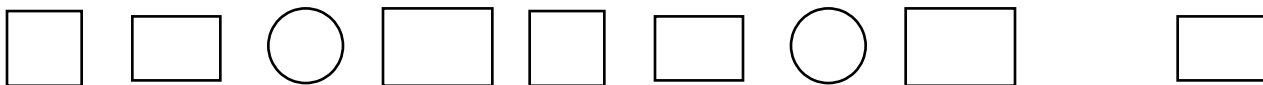


A B C B A B C B A B C B A









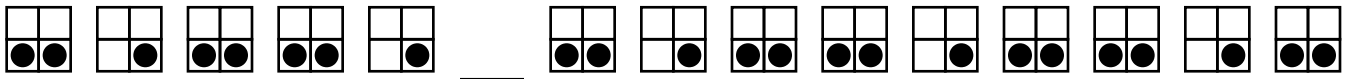


Name: _____

Draw the missing spots in the patterns.

☆ 5 ☆ 0 ☆ 0 ☆ 5 ☆ 0 ☆ 0 ☆ 5 ☆ 0 ☆ 0 ☆ 5 ☆ 0 _ ☆ 5

☆ 4 ☆ 9 ☆ 4 ☆ 8 ☆ 4 ☆ 9 ☆ 4 _ ☆ 4 ☆ 9 ☆ 4 ☆ 8 ☆ 4



Draw your own patterns.

☆ 7 ☆ 7 ☆ 9 ☆ 7 ☆ 7 ☆ 7 ☆ 9 ☆ 7 ☆ 7 ☆ 7 ☆ 9 ☆ 7 ☆ 7

AABA pattern

--	--	--	--	--	--	--	--	--	--	--	--	--	--

Draw an ABCC pattern.

--	--	--	--	--	--	--	--	--	--	--	--	--	--

Draw an ABCD pattern.

--	--	--	--	--	--	--	--	--	--	--	--	--	--

Draw an AAB pattern.

--	--	--	--	--	--	--	--	--	--	--	--	--	--

Draw an AABC pattern.

--	--	--	--	--	--	--	--	--	--	--	--	--	--

I drew an _____ pattern.

Name: _____

Complete the pattern.

4	8	12	16	20	24	28	<u> </u>
---	---	----	----	----	----	----	-------------------

3	6	9	12	15	18	21	<u> </u>
---	---	---	----	----	----	----	-------------------

1	2	3	4	5	6	7	<u> </u>
---	---	---	---	---	---	---	-------------------

2	4	6	8	10	12	14	<u> </u>
---	---	---	---	----	----	----	-------------------

Complete the pattern.

5	10	15	20	25	30	<u> </u>	<u> </u>
---	----	----	----	----	----	-------------------	-------------------

12	15	18	21	24	27	<u> </u>	<u> </u>
----	----	----	----	----	----	-------------------	-------------------

10	12	14	16	18	20	<u> </u>	<u> </u>
----	----	----	----	----	----	-------------------	-------------------

Name: _____

Complete the pattern.

3	4	5	6	7			
---	---	---	---	---	--	--	--

8	12	16	20	24			
---	----	----	----	----	--	--	--

25	30	35	40	45			
----	----	----	----	----	--	--	--

8	10	12	14	16			
---	----	----	----	----	--	--	--

Complete the pattern.

8	12	16	20	24			
---	----	----	----	----	--	--	--

15	20	25	30	35			
----	----	----	----	----	--	--	--

5	6	7	8	9			
---	---	---	---	---	--	--	--

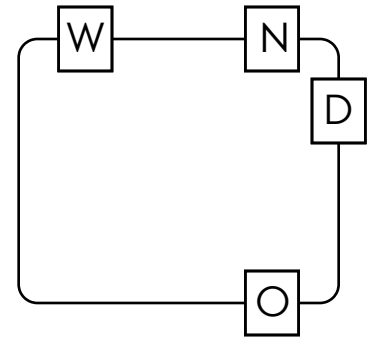
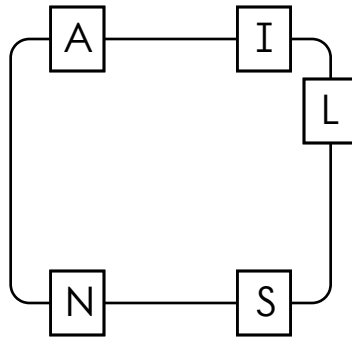
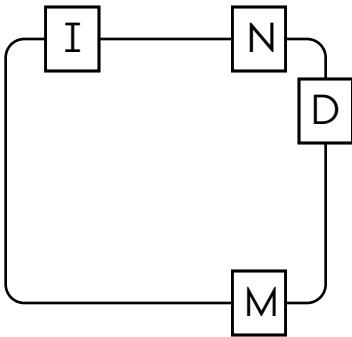
Name: _____

Mrs. James made 18 cards for Forget Me Not Day. Fay made 6 more cards than Mrs. James. How many cards did Fay make?

April had 27 smiley face stickers. She gave 11 stickers to Jane. How many stickers did she have left?

There are 23 teddy bears on the shelf. Seven are black. How many are not black?

Write the hidden word. Start at one letter and then move either left or right. Continue in same direction.



1 2 3 4 5 6 7 8 9 10

$$\boxed{1} + \textcircled{5} = \underline{\quad}$$

$$1 + 5 = \underline{\quad}$$

Draw ○

1 2 3 4 5 6 7 8 9 10

$$\boxed{9} + \textcircled{1} = \underline{\quad}$$

$$9 + 1 = \underline{\quad}$$

Draw □ and ○

1 2 3 4 5 6 7 8 9 10

$$\boxed{7} + \textcircled{2} = \underline{\quad}$$

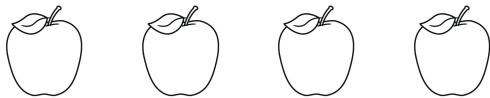
$$7 + 2 = \underline{\quad}$$

Name: _____

Fill in the missing numbers.

1	☆ 2	☆ 3	4	5	6	7	8	9	10
		13	14	15		17	18	19	20

1 2 3 4 5 6 7 8 9 10



☆ 4



1 2 3 4 5 6 7 8 9 10





Trace and write.

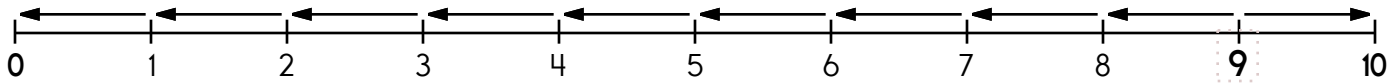
☆
brown

☆
brown

Print the letter H.

☆
H

Name: _____



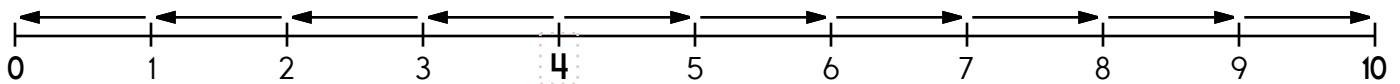
9 is 9 spots away from 0.

$$9 - \underline{\quad} = 0$$

9 is 1 spot away from 10.

$$9 + \underline{\quad} = 10$$

9 is closer to 0 or 10



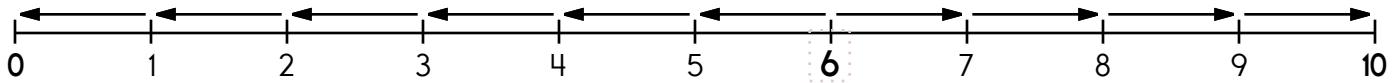
4 is spots away from 0.

$$4 - \underline{\quad} = 0$$

4 is spots away from 10.

$$4 + \underline{\quad} = 10$$

4 is closer to 0 or 10



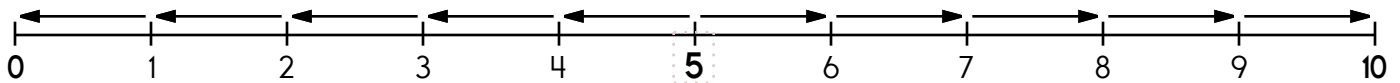
6 is spots away from 0.

$$6 - \underline{\quad} = 0$$

6 is spots away from 10.

$$6 + \underline{\quad} = 10$$

6 is closer to 0 or 10



5 is spots away from 0.

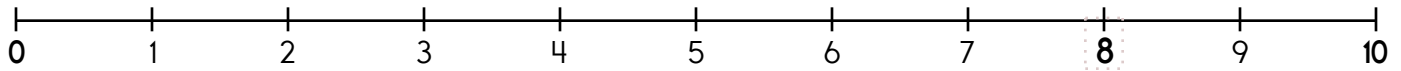
$$5 - \underline{\quad} = 0$$

5 is spots away from 10.

$$5 + \underline{\quad} = 10$$

5 is closer to 0 or 10

Name: _____



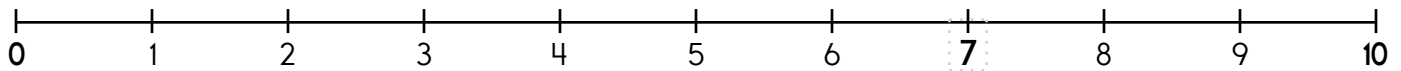
8 is 8 spots away from 0.

$$8 - \underline{\quad} = 0$$

8 is 2 spots away from 10.

$$8 + \underline{\quad} = 10$$

Is 8 closer to 0 or 10? 8 is closer to _____



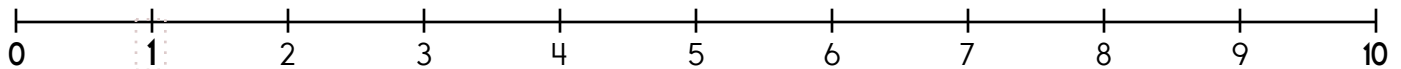
7 is _____ spots away from 0.

$$7 - \underline{\quad} = 0$$

7 is _____ spots away from 10.

$$7 + \underline{\quad} = 10$$

Is 7 closer to 0 or 10? 7 is closer to _____



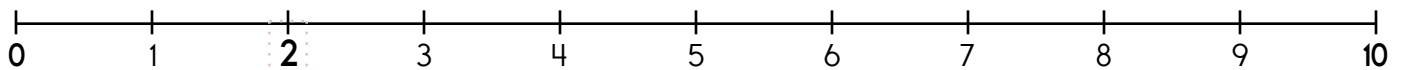
1 is _____ spot away from 0.

$$1 - \underline{\quad} = 0$$

1 is _____ spots away from 10.

$$1 + \underline{\quad} = 10$$

Is 1 closer to 0 or 10? 1 is closer to _____



2 is _____ spots away from 0.

$$2 - \underline{\quad} = 0$$

2 is _____ spots away from 10.

$$2 + \underline{\quad} = 10$$

Is 2 closer to 0 or 10? 2 is closer to _____

Name: _____

Draw the missing spots in the patterns.

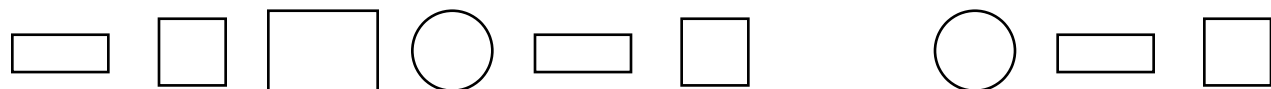
Show the pattern by putting the same letter under each shape or number.



A A B A A B A A B A A B A











Name: _____

Draw the missing spots in the patterns.

8 6 6 8 6 _ 8 6 6 8 6 6 8

1 1 0 1 1 0 1 1 _ 1 1 0 1

□ □ □ □ □ □ □ □ □

Draw your own patterns.

2 2 4 2 2 4 2 2 4 2 2 4 2

AAB pattern

□ □ □ □ □ □ □ □ □ □ □ □ □

Draw an ABC pattern.

□ □ □ □ □ □ □ □ □ □ □ □ □

Draw an ABB pattern.

□ □ □ □ □ □ □ □ □ □ □ □ □

Draw an ABCC pattern.

□ □ □ □ □ □ □ □ □ □ □ □ □

Draw an ABA pattern.

□ □ □ □ □ □ □ □ □ □ □ □ □

I drew an _____ pattern.

Name: _____

Write a word that has the same vowel sound. Draw a picture of your word.

ū



cup

ū



book

Write <, >, or =.

72 ○ 77

36 ○ 65

60 ○ 80

16 ○ 19

41 ○ 42

77 ○ 98

64 ○ 65

59 ○ 96

41 ○ 41

7 tens and 5 ones

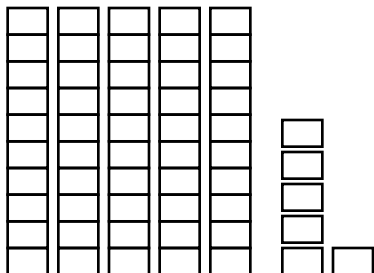
33 - 17 = _____

zero

○ 5 ○ 570 ○ 75

○ 21 ○ 49 ○ 16


○ 9 ○ 0 ○ 1



_____ tens _____ ones

Number = _____


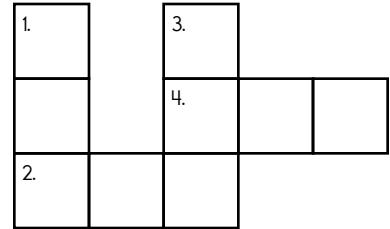
Amy drew a picture. She then folded the piece of paper. Show what the paper looks like when it is unfolded.



Name: _____

across →

down ↓



Circle the word for the picture.



thank table kites



sad zoo cheese

Gavin had ten baseball caps. He gave two baseball caps to his best friend. How many baseball caps did Gavin have left?

seven

one

3 is more than

☐ 2 ☐ 3 ☐ 4

5 tens and 6 ones

☐ 2 ☐ 56 ☐ 65

seven

☐ 12 ☐ 7 ☐ 8

TRUST S U B T R O S T R G P T U K T R U S T L O T
BLOCK C K M L T B L O C K B L C O K C C O G O B L
BALL Z P O X B B E W L A B B A L L B C A E A L L
INTO I J T N I Q B I N T O T A T U N I N T O H G
STONE O E T S T O N E E S T O N T S S E S S L T N
TAIL I U G L F H Q T A I L T C K A O Z T A I L E
DOLL B A X D D O L L J M O F U C L I D A L L G Y
FIX G X F E U Z B I F I X S X K M D F U X X C Y

Write the missing letter to spell **own**.

o_n ow_ _wn

Write the missing sign.

9 ____ 8 = 1

three



Name: _____

$\begin{array}{r} 4 \\ + 4 \\ \hline \end{array}$	$\begin{array}{r} 7 \\ + 6 \\ \hline \end{array}$	$\begin{array}{r} 8 \\ + 7 \\ \hline \end{array}$	$\begin{array}{r} 4 \\ + 8 \\ \hline \end{array}$	$\begin{array}{r} 4 \\ + 2 \\ \hline \end{array}$	$\begin{array}{r} 5 \\ + 7 \\ \hline \end{array}$	$\begin{array}{r} 8 \\ + 9 \\ \hline \end{array}$	$\begin{array}{r} 3 \\ + 2 \\ \hline \end{array}$	$\begin{array}{r} 3 \\ + 5 \\ \hline \end{array}$
---	---	---	---	---	---	---	---	---

$\begin{array}{r} \square \\ + 9 \\ \hline 1 \end{array}$	$\begin{array}{r} 5 \\ + 2 \\ \hline \square \end{array}$	$\begin{array}{r} \square \\ + 8 \\ \hline 1 \end{array}$	$\begin{array}{r} \square \\ + 2 \\ \hline 1 \end{array}$	$\begin{array}{r} \square \\ + 3 \\ \hline 5 \end{array}$	$\begin{array}{r} 1 \\ + \square \\ \hline 1 \end{array}$	$\begin{array}{r} 2 \\ + 4 \\ \hline \square \end{array}$	$\begin{array}{r} 6 \\ + \square \\ \hline 8 \end{array}$	$\begin{array}{r} 5 \\ + 3 \\ \hline \square \end{array}$
---	---	---	---	---	---	---	---	---

$\begin{array}{r} 8 \\ + 8 \\ \hline \end{array}$	$\begin{array}{r} 3 \\ + 1 \\ \hline \end{array}$	$\begin{array}{r} 8 \\ + 3 \\ \hline \end{array}$	$\begin{array}{r} 7 \\ + 9 \\ \hline \end{array}$	$\begin{array}{r} 7 \\ + 8 \\ \hline \end{array}$	$\begin{array}{r} 8 \\ + 4 \\ \hline \end{array}$	$\begin{array}{r} 5 \\ + 9 \\ \hline \end{array}$	$\begin{array}{r} 5 \\ + 4 \\ \hline \end{array}$	$\begin{array}{r} 7 \\ + 7 \\ \hline \end{array}$
---	---	---	---	---	---	---	---	---

$\begin{array}{r} 8 \\ + \square \\ \hline 1 \end{array}$	$\begin{array}{r} \square \\ + 8 \\ \hline 1 \end{array}$	$\begin{array}{r} 2 \\ + \square \\ \hline 4 \end{array}$	$\begin{array}{r} 9 \\ + 5 \\ \hline \square \end{array}$	$\begin{array}{r} \square \\ + 3 \\ \hline 7 \end{array}$	$\begin{array}{r} 6 \\ + \square \\ \hline 1 \end{array}$	$\begin{array}{r} 3 \\ + \square \\ \hline 6 \end{array}$	$\begin{array}{r} 1 \\ + \square \\ \hline 9 \end{array}$	$\begin{array}{r} 6 \\ + 3 \\ \hline \square \end{array}$
---	---	---	---	---	---	---	---	---

$\begin{array}{r} 2 \\ + 7 \\ \hline \end{array}$	$\begin{array}{r} 8 \\ + 1 \\ \hline \end{array}$	$\begin{array}{r} 9 \\ + 6 \\ \hline \end{array}$	$\begin{array}{r} 4 \\ + 6 \\ \hline \end{array}$	$\begin{array}{r} 5 \\ + 1 \\ \hline \end{array}$	$\begin{array}{r} 2 \\ + 1 \\ \hline \end{array}$	$\begin{array}{r} 4 \\ + 7 \\ \hline \end{array}$	$\begin{array}{r} 4 \\ + 9 \\ \hline \end{array}$	$\begin{array}{r} 4 \\ + 5 \\ \hline \end{array}$
---	---	---	---	---	---	---	---	---

$\begin{array}{r} 2 \\ + \square \\ \hline 7 \end{array}$	$\begin{array}{r} 9 \\ + 8 \\ \hline \square \end{array}$	$\begin{array}{r} \square \\ + 2 \\ \hline 9 \end{array}$	$\begin{array}{r} 1 \\ + \square \\ \hline 6 \end{array}$	$\begin{array}{r} 6 \\ + 1 \\ \hline \square \end{array}$	$\begin{array}{r} \square \\ + 6 \\ \hline 1 \end{array}$	$\begin{array}{r} 9 \\ + \square \\ \hline 1 \end{array}$	$\begin{array}{r} 6 \\ + \square \\ \hline 1 \end{array}$	$\begin{array}{r} 6 \\ + \square \\ \hline 1 \end{array}$
---	---	---	---	---	---	---	---	---

Name: _____

Sara saw one bee on the brown cake and four bees on the yellow cake. None of the bees tried to sting her. How many bees did she see in all?

There were 16 puzzles on the shelf. Steve took 6 of them. How many puzzles were left?

Rosa made four apple pies. Maria made two cherry pies. Erin made one pumpkin pie. How many pies did they make in all?

$$\begin{array}{r} 9 \\ - 9 \\ \hline \end{array}$$

Circle the fourth number.

B, A, 8, 1, 9, D, B, D, 9, B,
9, 5, F, D, 8, 3, 5, D, F

14, 16, 18, 20, _____,
24, 26, 28

Sara had three pairs of pink pajamas and two pairs of blue pajamas. She gave her sister one pair of pajamas. How many pairs did Sara have left?

Molly saw 9 seagulls. Then she saw 22 more. How many seagulls did Molly see?

There were 13 red shirts at the thrift shop. Ms. Johnson bought 8 of them. How many red shirts were left?

Circle all the ways to make 7.

5 + 2 3 + 4 3 + 6
1 + 6 4 + 1 5 + 4
7 + 1 2 + 7 1 + 5

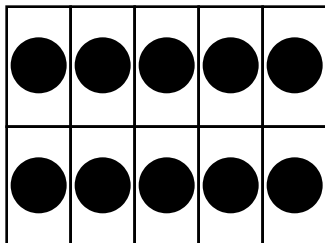
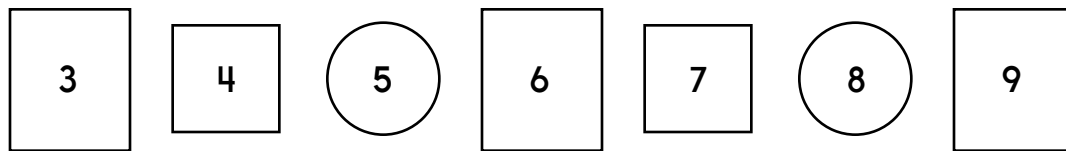
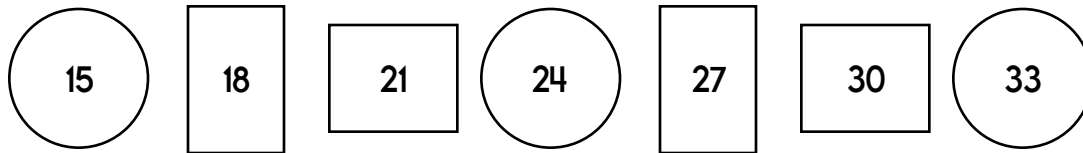
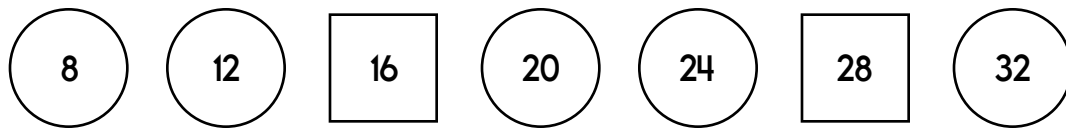
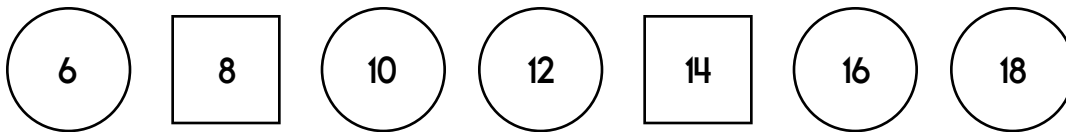
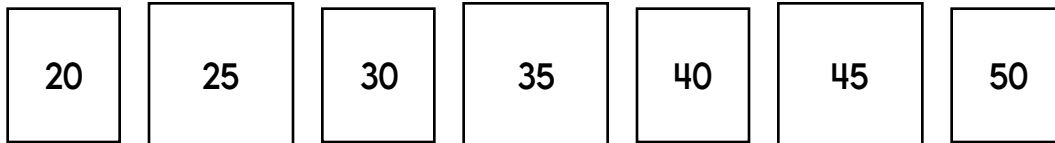

Circle the third letter.

D, 4, B, 3, 6, F, A, D, A,
9, 1, 5, F, 2, F, 5, D, 4, B

$$\begin{array}{r} 3 \\ + 1 \\ \hline \end{array}$$

Name: _____

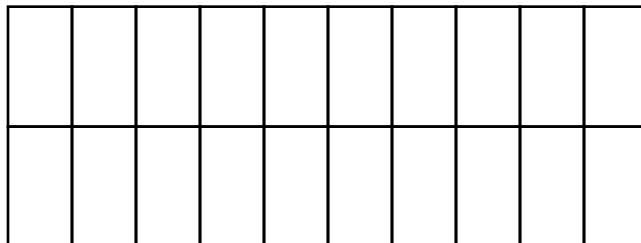
Complete the pattern.



+





=



Write the missing letter to spell little.

litt_e lit_le _ittle




It's NO PREP at edHelper.


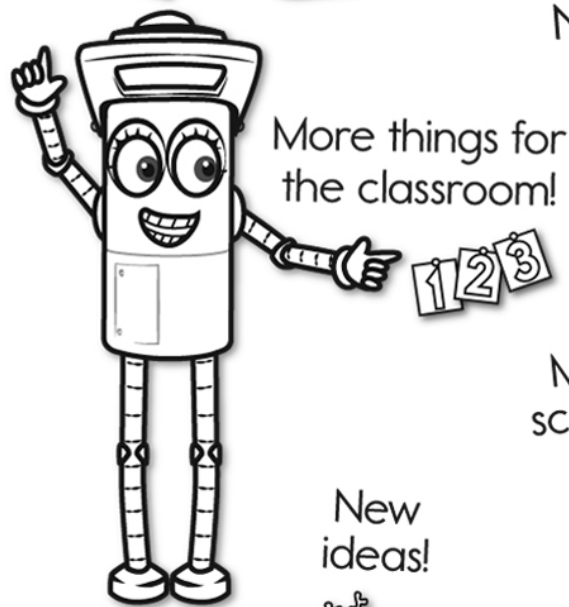
More history!



edHelper.com!



New online math games!



New ideas!



x
+ =
- ÷
< >

More puzzles!

