

Name: _____

Peter saw 4 butterflies. Jason saw 3 butterflies. How many butterflies did they see in all?

There are 6 blue fish on the bathroom wall. There are 9 yellow fish on the bathroom wall. How many fish are there in all?

$$34 + \underline{\quad} = 44$$

E, G, I, K, M, O, Q,
_____, U, W, Y

A, F, B, G, C, H,
_____, I, E, J

Amy made four apple pies. Holly made three cherry pies. Amanda made one pumpkin pie. How many pies did they make in all?

Rose ate 6 carrots. Then she ate 4 more carrots. How many carrots did she eat in all?

Holly had three pairs of pink pajamas and two pairs of blue pajamas. She gave her sister one pair of pajamas. How many pairs did Holly have left?

96, _____, _____, _____,
_____, _____, 102

$$\begin{array}{r} 8 \\ - 4 \\ \hline \end{array}$$

$$18 - \underline{\quad} = 15$$

39, 40, _____, 42, _____,

How much is this?



49, _____, 51, _____, _____, 54

Name: _____

There are eight birds in a bird nest. Two of the birds flew away. How many birds are left?

Connor's dog had five puppies. His sister's dog had three puppies. How many puppies were there in all?

Nathan liked to ride his bike. It made him very happy. One day he rode 3 miles. The next day he rode 4 miles. The next day he rode 2 more miles. How many miles did he ride in all?

$$\begin{array}{r} 18 \\ + 7 \\ \hline \end{array}$$

How many nickels do you need if you want to have exactly 20 cents?


What is ten less than 54?

Peter drew animal cartoons. He drew seven rabbits, three deer, two bears, and three horses. How many rabbits, horses, and deer did he draw?

Miss Glenn has 7 girls and 13 boys in her class. How many students does she have in all?

Hunter made 12 home runs. Robert made 5 home runs. How many more home runs did Hunter make than Robert?

How much is this?



Double two.

What is ten more than 63?

word root **intro** can mean **within** **introversion, introvert**

Name: _____

Amy made 10 bowls of snow cream. She ate 3 of them. How many bowls of snow cream were left?

Gavin bought 4 ice cream sodas. He gave 3 sodas to his brother. How many sodas are left?

Wendy liked the Hug Holiday. She got three hugs from her mother. She got four hugs from her father. She got three hugs from her sister. She got four hugs from her grandmother. How many hugs did Wendy get in all?

$$\begin{array}{r} 7 \\ + 6 \\ \hline \end{array}$$

$$\begin{array}{r} 12 \\ - 6 \\ \hline \end{array}$$

13, 15, 17, 19, 21,
_____, 25, 27, 29

Hunter walked 10 blocks to the pool. Holly walked 2 blocks to the pool. How many more blocks did Hunter walk?

It is very hot today. Max drank six cups of water. Connor drank four cups of tea. Jacob drank seven cups of water. Gavin drank three cups of water. How many cups of water did the boys drink?

Tim has 16 toy cars. He gave 3 cars to Jim. How many cars does Tim have left?

What is the difference for $4 - 1$?

4 0 6 3

fourteen


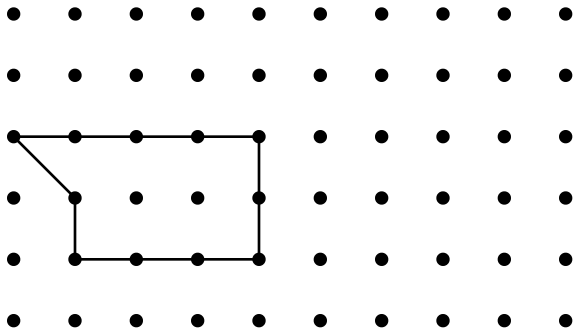
14 17 11

$6 - 6 =$ _____


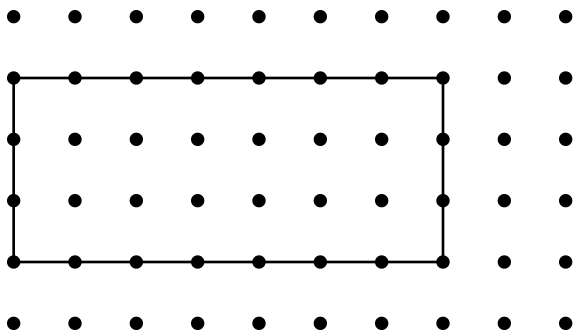
0 10 6

Name: _____



Draw a slide of the shape by moving the shape 1 dot to the right and 2 dots up.



Draw a slide of the shape by moving the shape 1 dot to the right and 1 dot up.



Draw a slide of the shape by moving the shape 1 dot to the right and 1 dot down.





Name: _____

Get a fidget spinner! Spin it.

I needed to spin _____ time(s) to finish.

39, ____, 41, ____, 43,

____, ____

 $56 - \underline{\quad} = 46$

Double three.

A, C, E, G, I,

____, M, O, Q

10, 12, 14, 16, ____, 20

94, ____, ____, ____,


____, ____, 100

 $21 - \underline{\quad} = 18$

How many nickels do you need if you want to have exactly 25 cents?

What is ten less than 75?

What time is it?



____:____

Sara found a wishing well. In her pocket she found 12 coins. She threw 6 of her coins into the wishing well. How many coins does she still have?

Gavin needs sixteen cents. How much more money does he need?





MathWorksheets.com

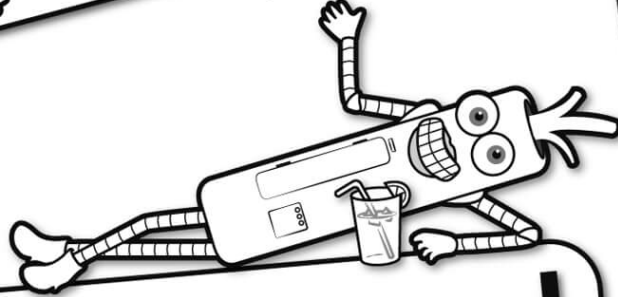


Free Weekly Math Worksheet Workbooks

Every Week!




It's NO PREP at edHelper.




edHelper.com!

More history!




Things for the classroom!



only \$19.99 per year


More science!



New ideas!



More puzzles!



Take The Boring Out Of Homework!

Easy to
print!

edHelper

Weekly K-6 "Take It Home" Books

Kids want choices
for homework.
"Take It Home" books
have fun graphics and
challenging puzzles and
problems for older kids.

"Dr. Programmer"
challenges kids..

Homework
will never be
the same!

edHelper.com

