

Name: _____

Erin made seven cups of pudding. She ate three cups. How many cups of pudding were left?

Hannah put 1 scoop of ice cream in her glass. Then she put 4 more scoops in her glass. How many scoops did she put in her glass in all?

Ava, Anne, and Anna are so thankful for swimming. Ava swam four hours last week. Anne swam three hours last week. Anna swam five hours last week. How many hours did they swim in all?

$$\begin{array}{r} 6 \\ - 4 \\ \hline \end{array}$$

B, E, H, K, N, Q,
_____, W, Z

16, ____, 18, 19, ____,
____, ____

Miss Clark had some knitting needles. She bought 4 more needles. Now she has 13 needles. How many needles did she have before?

Wendy has three red crayons, three blue crayons, and two green crayons. How many crayons does she have in all?

Last year Rose hit 6 home runs. Megan hit 12 home runs. How many more home runs did Megan hit than Rose?

What is ten more than 83?

$$\begin{array}{r} 5 \\ + 4 \\ \hline \end{array}$$

$$14 + \underline{\quad} = 24$$

Write the missing sign.

$$7 \underline{\quad} 4 = 3$$

Name: _____

Kevin put 6 sodas on a tray. Erin took 2 sodas off the tray. How many sodas were left on the tray?

Gavin has 3 red pencils. Jason has 8 blue pencils. How many pencils do they have in all?

What is ten less than 54?

18, _____, _____, _____, 22, 23

How much is this?



Hunter, Adam, and Peter went to the zoo. Hunter saw seven penguins. Adam saw eight penguins. Peter saw four penguins. How many penguins did they see in all?

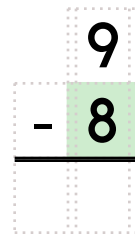
Cindy is four years older than her little brother. He is three years old. How old is Cindy?

Robert walked 9 blocks to the pool. Sarah walked 3 blocks to the pool. How many more blocks did Robert walk?

How much is this?



What is ten more than 83?



ten

2 10 4

$13 - 7 = \underline{\hspace{2cm}}$

3 14 6

five

5 3 8

Name: _____

Jessica ate two slices of pizza. Peter ate four slices of pizza. How many slices of pizza did Jessica and Peter together eat altogether?

Holly had 7 red balloons. There were white stars on them. Three balloons floated away. How many were left?

Ms. Lee made 10 bowls of oatmeal. She ate 1 bowl of oatmeal. Jason ate 2 bowls of oatmeal. Maria ate 2 bowls of oatmeal. How many bowls of oatmeal were left?

How much is this?



$$15 + \underline{\quad} = 25$$

How much is this?



Emily and Emma helped clean up the park. Emma picked up 5 more bags of trash than Emily. Emma picked up 13 bags of trash. How many bags of trash did Emily pick up?

Ava has three red jellybeans. She has four green jellybeans. She has six yellow jellybeans. She has five black jellybeans. How many jellybeans does she have in all?

Alex hopes to have a green truck someday. He saw nine trucks today. Five of the trucks Alex saw were not green. How many of the trucks that Alex saw were green?

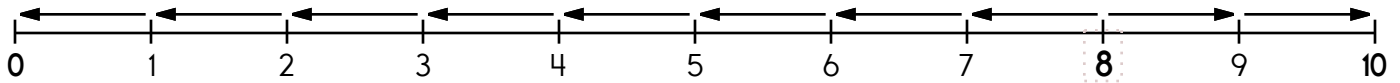
C, _____, M, R, W

49, _____, 51, _____, _____, 54

6, 8, 10, 12, 14, 16,
_____, 20, 22

word root **dict** can mean **say** **dictionary, dictate**

Name: _____

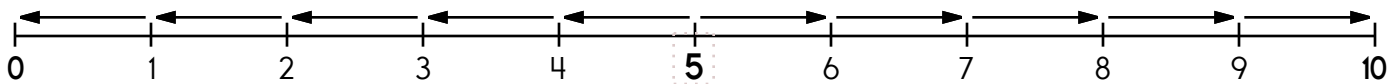
8 is 8 spots away from 0.

$8 - \underline{\quad} = 0$

8 is 2 spots away from 10.

$8 + \underline{\quad} = 10$

8 is closer to 0 or 10



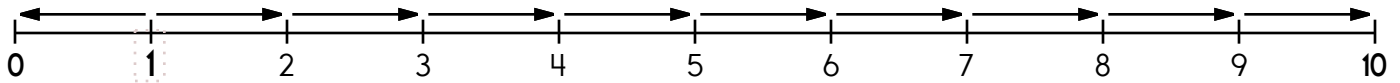
5 is _____ spots away from 0.

$5 - \underline{\quad} = 0$

5 is _____ spots away from 10.

$5 + \underline{\quad} = 10$

5 is closer to 0 or 10



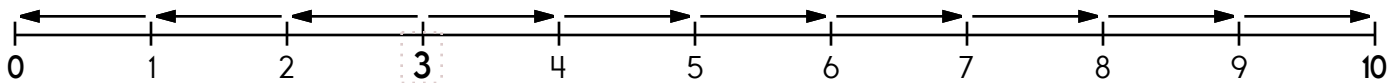
1 is _____ spot away from 0.

$1 - \underline{\quad} = 0$

1 is _____ spots away from 10.

$1 + \underline{\quad} = 10$

1 is closer to 0 or 10



3 is _____ spots away from 0.

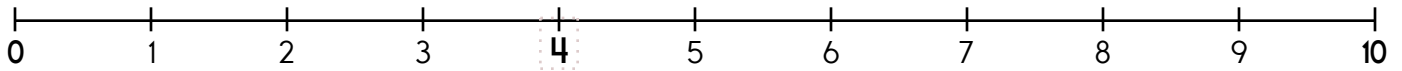
$3 - \underline{\quad} = 0$

3 is _____ spots away from 10.

$3 + \underline{\quad} = 10$

3 is closer to 0 or 10

Name: _____

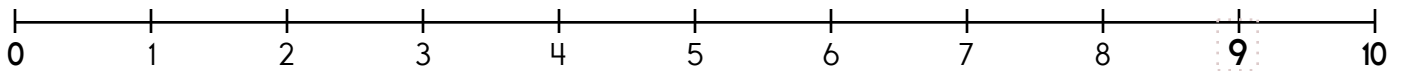
4 is 4 spots away from 0.

$4 - \underline{\quad} = 0$

4 is 6 spots away from 10.

$4 + \underline{\quad} = 10$

Is 4 closer to 0 or 10? 4 is closer to _____



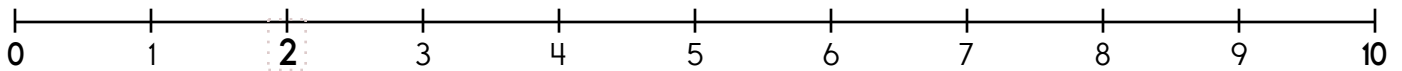
9 is _____ spots away from 0.

$9 - \underline{\quad} = 0$

9 is _____ spot away from 10.

$9 + \underline{\quad} = 10$

Is 9 closer to 0 or 10? 9 is closer to _____



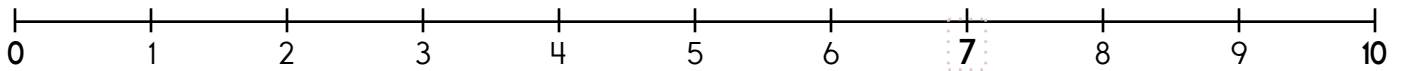
2 is _____ spots away from 0.

$2 - \underline{\quad} = 0$

2 is _____ spots away from 10.

$2 + \underline{\quad} = 10$

Is 2 closer to 0 or 10? 2 is closer to _____



7 is _____ spots away from 0.

$7 - \underline{\quad} = 0$

7 is _____ spots away from 10.

$7 + \underline{\quad} = 10$

Is 7 closer to 0 or 10? 7 is closer to _____

Name: _____

Round to the nearest ten.
0 to 4 rounds down to 0.

5 to 10 rounds up to 10.

4 → 0 9 → 10 → 6 → 8 → 7 → 5 → 2 → 0 →

Round to the nearest ten.
80 to 84 rounds down to 80.

85 to 90 rounds up to 90.

90 → 90 89 → 80 → 83 → 81 → 88 → 85 → 86 → 87 →

Round to the nearest ten.
20 to 24 rounds down to 20.

25 to 30 rounds up to 30.

26 → 30 20 → 28 → 27 → 29 → 30 → 21 → 22 → 24 →

Round to the nearest ten.
30 to 34 rounds down to 30.

35 to 40 rounds up to 40.

37 → 40 36 → 33 → 38 → 31 → 40 → 35 → 39 → 30 →

Name: _____

Maria is left-handed. She wrote her name 5 times with her right hand. She wrote her name 7 times with her left hand. How many times did she write her name?

Jason had 8 shirts. His mother bought him some new shirts for school. Now he has 10 shirts. How many shirts did his mother buy?

Holly had nine apples. Anne had four apples. How many more apples did Holly have?

Mrs. James made 17 cards for Forget Me Not Day. Fay made 5 more cards than Mrs. James. How many cards did Fay make?

17, 18, _____, 20, _____,

$$\begin{array}{r} 8 \\ + 8 \\ \hline \end{array}$$

What is ten less than 77?

What is ten more than 77?

Double five.

What is ten more than 52?



MathWorksheets.com

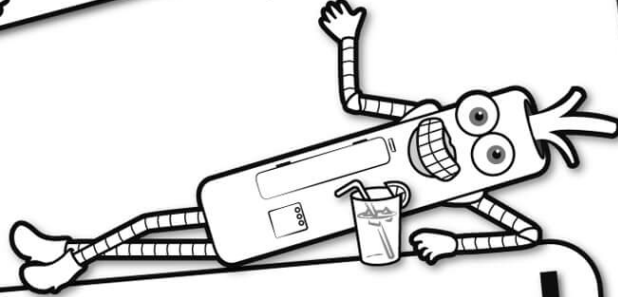


Free Weekly Math Worksheet Workbooks

Every Week!



It's NO PREP at edHelper.




edHelper.com!

More history!




Things for the classroom!



only \$19.99 per year


More science!



New ideas!



More puzzles!



Take The Boring Out Of Homework!

Easy to
print!

edHelper

Weekly K-6 "Take It Home" Books

Kids want choices
for homework.
"Take It Home" books
have fun graphics and
challenging puzzles and
problems for older kids.

"Dr. Programmer"
challenges kids..

Homework
will never be
the same!

edHelper.com

